



Thursday 2 February 2012 – Morning

A2 GCE GEOGRAPHY

F763/1/2 Global Issues

INSERT 2 – RESOURCE BOOKLET

Duration: 2 hours 30 minutes



INFORMATION FOR CANDIDATES

- This document consists of **8** pages. Any blank pages are indicated.

INSTRUCTION TO EXAMS OFFICER/INVIGILATOR

- Do not send this Insert for marking; it should be retained in the centre or recycled. Please contact OCR Copyright should you wish to re-use this document.

Earth hazards**Fig. 1****An extract adapted from a text on rivers**

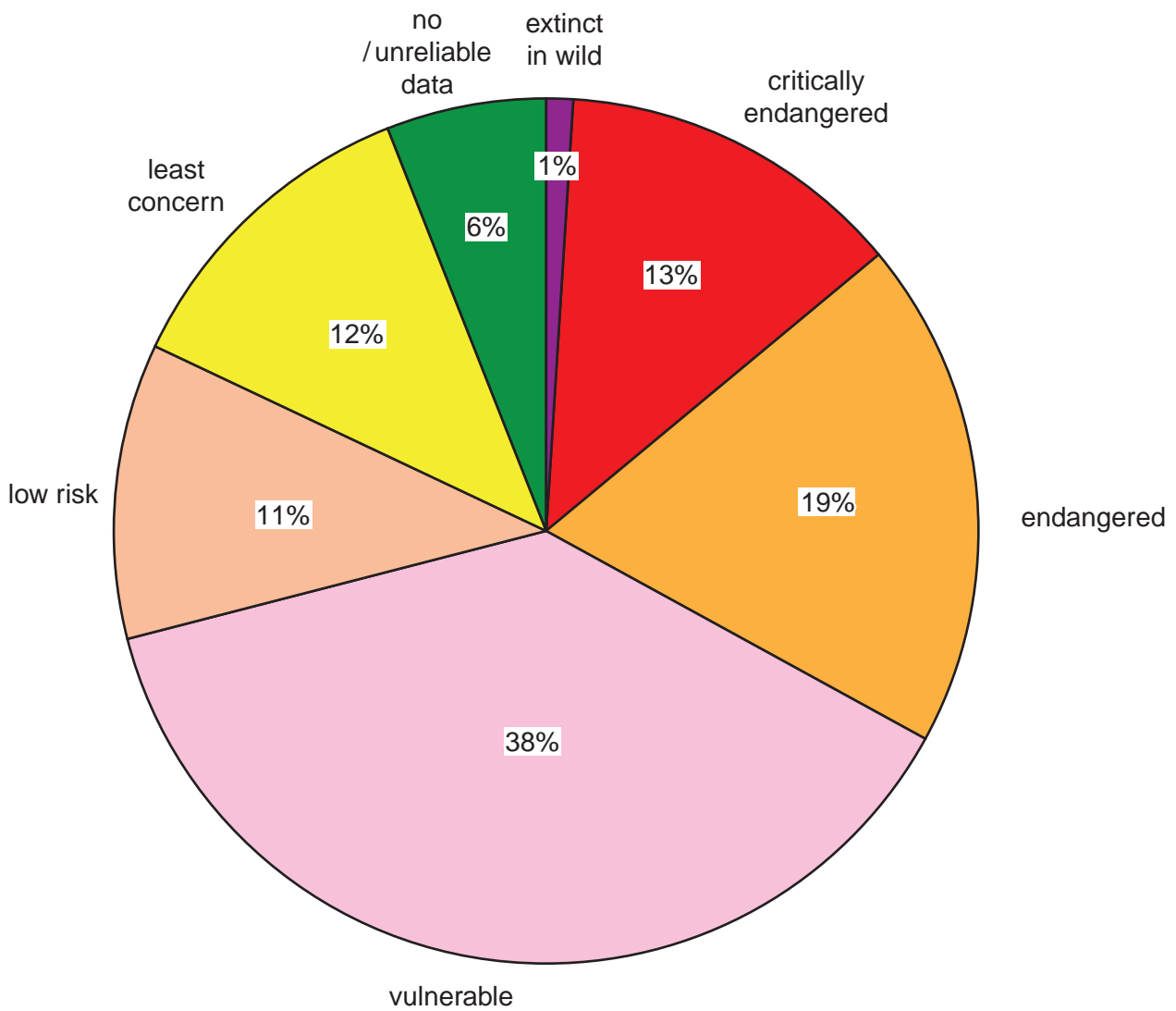
Most rivers flood. It is a natural process for river discharge to exceed channel capacity, leading to the formation of floodplains. Physical factors such as a prolonged period of heavy rainfall or rapid snow-melt can contribute to river flooding.

Floodplains are valued for agriculture, manufacturing industry, settlement, recreation and leisure. About 75% of population and properties in Japan, for example, are located on floodplains. Land-use changes such as deforestation and urbanisation can bring about unintended changes to river flow and so increase the probability and severity of flooding.

Ecosystems and environments under threat

Fig. 2

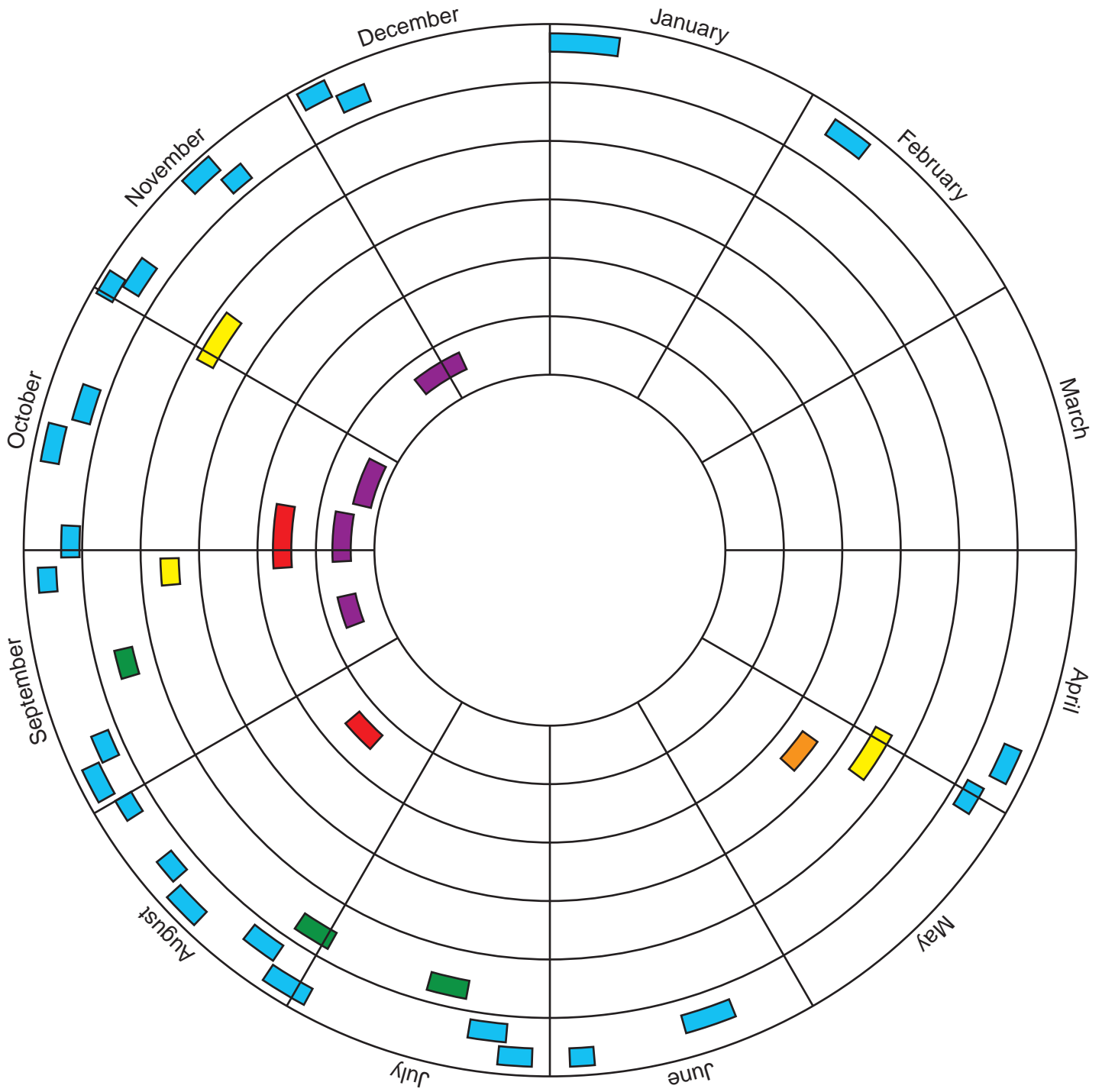
Global percentage of plant species at various levels of threat of extinction, 2009



Climatic hazards

Fig. 3

Timing and strength of tropical storms and typhoons over the Western Pacific, 2009

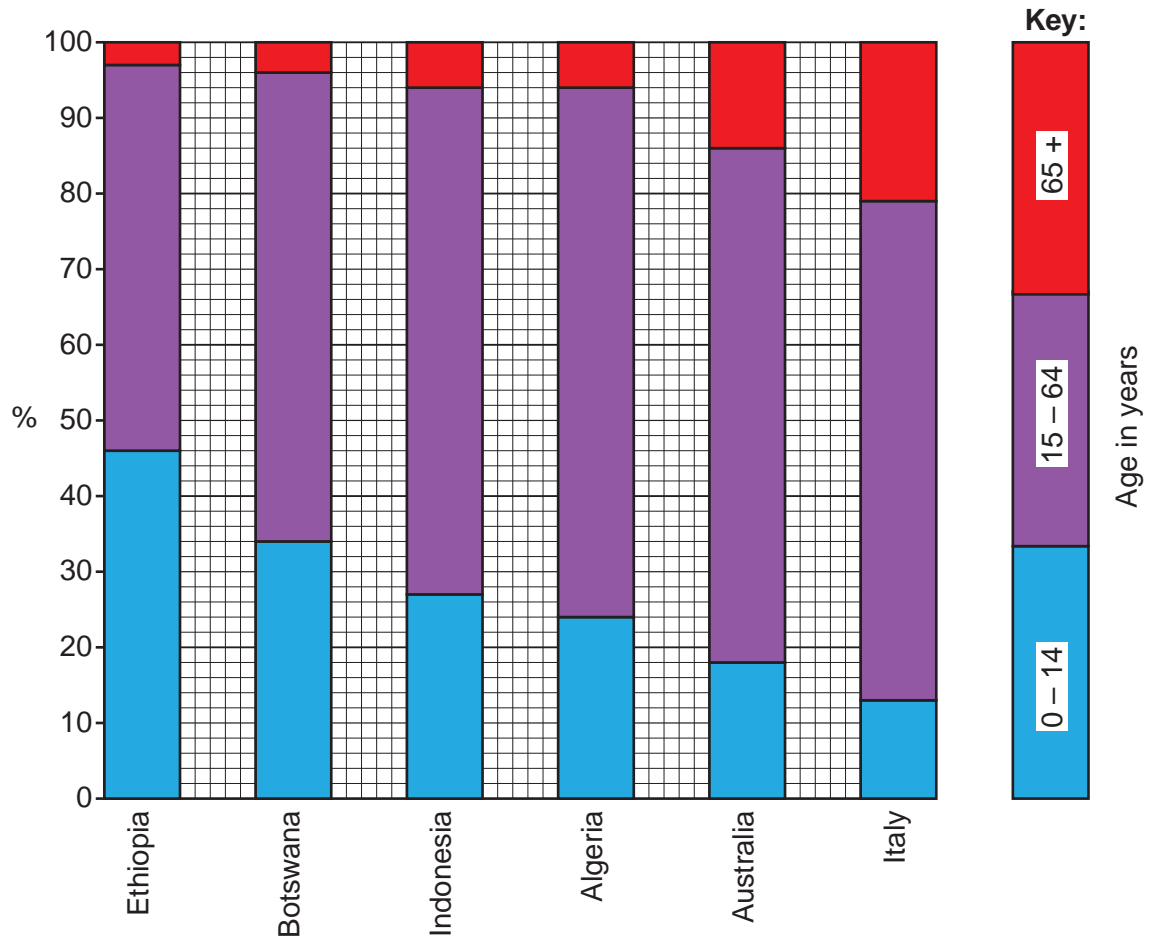


- Key:**
- Tropical storm
 - Typhoon category 1 (weakest)
 - Typhoon category 2
 - Typhoon category 3
 - Typhoon category 4
 - Typhoon category 5 (strongest)

Population and resources

Fig. 4

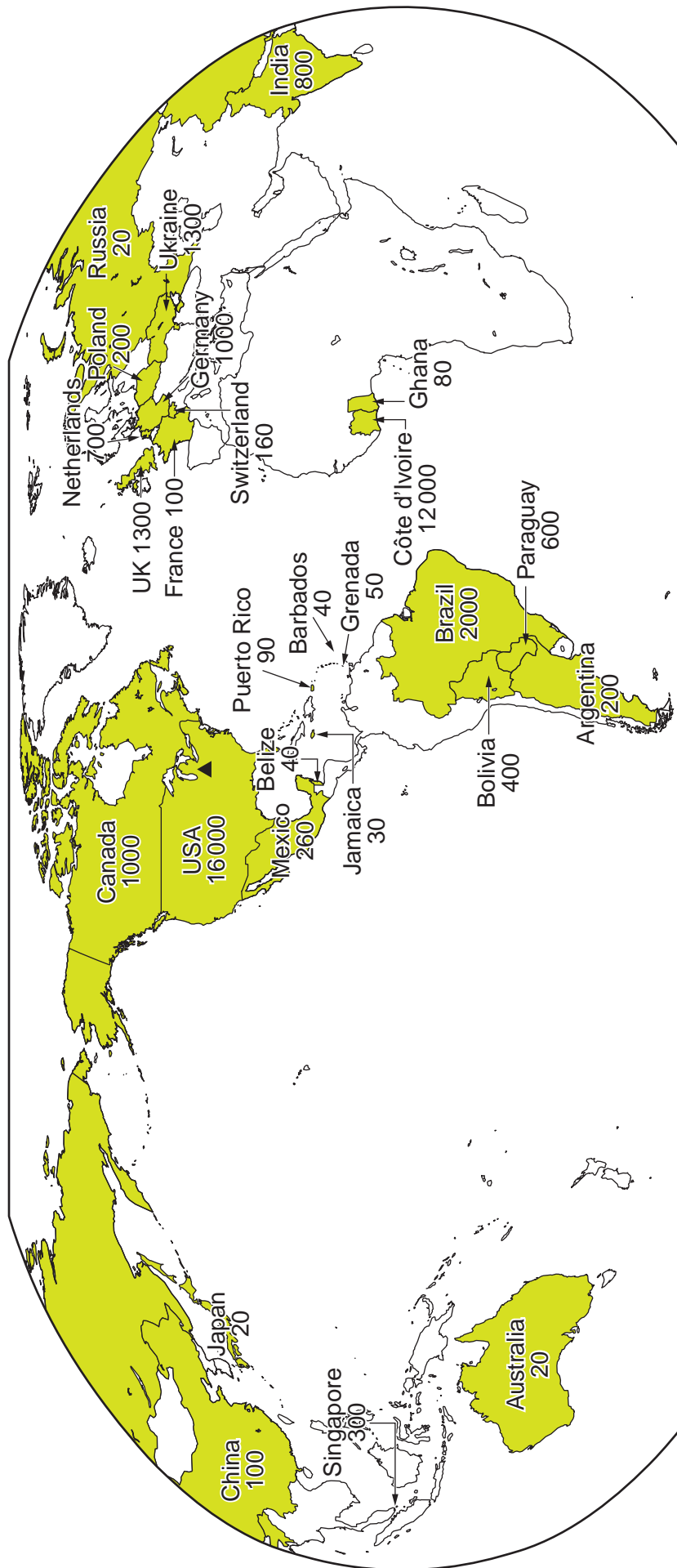
Age structures for selected countries, 2011



Globalisation

Fig. 5

Location and numbers of employees of ADM, 2010



Key:

▲ ADM* Corporate Headquarters

■ Countries where ADM employees located

* ADM is a transnational company, which transports, stores and processes agricultural products.

Development and inequalities

Fig. 6

A local market in Sudan and a shopping centre in Italy



**Copyright Information**

OCR is committed to seeking permission to reproduce all third-party content that it uses in its assessment materials. OCR has attempted to identify and contact all copyright holders whose work is used in this paper. To avoid the issue of disclosure of answer-related information to candidates, all copyright acknowledgements are reproduced in the OCR Copyright Acknowledgements Booklet. This is produced for each series of examinations and is freely available to download from our public website (www.ocr.org.uk) after the live examination series.

If OCR has unwittingly failed to correctly acknowledge or clear any third-party content in this assessment material, OCR will be happy to correct its mistake at the earliest possible opportunity.

For queries or further information please contact the Copyright Team, First Floor, 9 Hills Road, Cambridge CB2 1GE.

OCR is part of the Cambridge Assessment Group; Cambridge Assessment is the brand name of University of Cambridge Local Examinations Syndicate (UCLES), which is itself a department of the University of Cambridge.