

Please check the examination details below before entering your candidate information

Candidate surname					Other names				
Centre Number				Candidate Number					
<input type="text"/>	<input type="text"/>	<input type="text"/>	<input type="text"/>	<input type="text"/>	<input type="text"/>	<input type="text"/>	<input type="text"/>	<input type="text"/>	<input type="text"/>

Pearson Edexcel Level 3 GCE

Wednesday 17 May 2023

Morning (Time: 2 hours 15 minutes) **Paper reference** **9GE0/01**

Geography
Advanced
PAPER 1

You must have:
Resource Booklet (enclosed)
Calculator, ruler

Total Marks

Instructions

- Use **black** ink or ball-point pen.
- **Fill in the boxes** at the top of this page with your name, centre number and candidate number.
- Answer **all** questions in Section **A**, and Section **C**.
- Answer **either** Question 2 **or** Question 3 in Section **B**.
- Answer the questions in the spaces provided
– *there may be more space than you need.*

Information

- The total mark for this paper is 105.
- The marks for **each** question are shown in brackets
– *use this as a guide as to how much time to spend on each question.*

Advice

- Read each question carefully before you start to answer it.
- Check your answers if you have time at the end.

Turn over ►

P72619A

©2023 Pearson Education Ltd.
N:1/1/1/1/1




Pearson

SECTION A

Tectonic Processes and Hazards

Answer ALL questions in this section. Write your answers in the spaces provided.

You must use the Resource Booklet provided.

- 1 Study Figure 1 below.

The data was collected to investigate whether there was a significant relationship between the population living within 5km of a volcanic location and the years since the last eruption, at 10 selected locations.

Volcanic location	Population within 5km, in millions	Rank	Years since last eruption	Rank	d	d ²
Michoacán-Guanajuato	5.8	1	70	8	-7	49
Tatun Volcanic Group	5.1	2	1374	1	1	1
Campi Flegrei	2.2	3	484	4	-1	1
Ilopango	2.0	4	142	5	-1	1
Hainan Volcanic Field	1.7	5	89	7	-2	4
San Pablo Volcanic Field	1.3	6.5	672	2	4.5	20.25
Ghegham Volcanic Ridge	1.3	6.5	122	6	0.5	0.25
Dieng Volcanic Complex	1.1	8	1	9.5	-1.5	2.25
Auckland Volcanic Field	1.0	9.5	576	3	6.5	42.25
Masaya	1.0	9.5	1	9.5	0	0
						Σd^2

Figure 1

The population living within 5km of a volcanic location and the years since the last eruption, at 10 selected locations.

DO NOT WRITE IN THIS AREA

DO NOT WRITE IN THIS AREA

DO NOT WRITE IN THIS AREA



(a) (i) Calculate Σd^2 .

(1)

$$\Sigma d^2 = \dots\dots\dots$$

(ii) The formula for Spearman's rank correlation coefficient value r_s is given below.

In this data set $n = 10$.

$$r_s = 1 - \frac{6 \Sigma d^2}{n^3 - n}$$

Calculate the value of r_s , to two decimal places, for the data given.

You must show your working.

(2)

$$r_s = \dots\dots\dots$$

(iii) The tables below show the two hypotheses that are being tested and the critical values of Spearman's rank r_s when $n = 10$.

Null Hypothesis: There is no significant relationship between the number of people living within 5km of a volcanic location and the years since the last eruption.

Alternative Hypothesis: There is a significant relationship between the number of people living within 5km of a volcanic location and the years since the last eruption.

Confidence level	0.10 (90%)	0.05 (95%)	0.01 (99%)
Critical value	0.44	0.56	0.73

Using the Spearman's rank correlation r_s value calculated in (a)(ii), state which hypothesis can be accepted.

(1)

DO NOT WRITE IN THIS AREA

DO NOT WRITE IN THIS AREA

DO NOT WRITE IN THIS AREA



P 7 2 6 1 9 A 0 3 3 2

(b) Assess the effectiveness of strategies used to manage the impacts of volcanic hazards.

(12)

Area with horizontal dotted lines for writing.

DO NOT WRITE IN THIS AREA

DO NOT WRITE IN THIS AREA

DO NOT WRITE IN THIS AREA



DO NOT WRITE IN THIS AREA

DO NOT WRITE IN THIS AREA

DO NOT WRITE IN THIS AREA

Handwriting practice area with horizontal dotted lines.

(Total for Question 1 = 16 marks)

TOTAL FOR SECTION A = 16 MARKS



DO NOT WRITE IN THIS AREA

DO NOT WRITE IN THIS AREA

DO NOT WRITE IN THIS AREA

Study Figure 2b in the Resource Booklet.

(b) Explain the role of feedback in changing the size of ice sheets and sea ice.

(6)

Area with horizontal dotted lines for writing the answer.



(c) Explain the role of melting and refreezing cycles in forming distinctive periglacial landforms.

(8)

Area with horizontal dotted lines for writing.

DO NOT WRITE IN THIS AREA

DO NOT WRITE IN THIS AREA

DO NOT WRITE IN THIS AREA



DO NOT WRITE IN THIS AREA

DO NOT WRITE IN THIS AREA

DO NOT WRITE IN THIS AREA

Blank writing area with horizontal dotted lines.



(d) Evaluate the view that the management of active and relict glaciated landscapes is likely to be unsuccessful.

(20)

Area with horizontal dotted lines for writing.

DO NOT WRITE IN THIS AREA

DO NOT WRITE IN THIS AREA

DO NOT WRITE IN THIS AREA



DO NOT WRITE IN THIS AREA

DO NOT WRITE IN THIS AREA

DO NOT WRITE IN THIS AREA

Large writing area with horizontal dotted lines.



DO NOT WRITE IN THIS AREA

DO NOT WRITE IN THIS AREA

DO NOT WRITE IN THIS AREA

Large empty area with horizontal dotted lines for writing.



DO NOT WRITE IN THIS AREA

DO NOT WRITE IN THIS AREA

DO NOT WRITE IN THIS AREA

Area with horizontal dotted lines for writing.

(Total for Question 2 = 40 marks)

Large empty rectangular area for writing.



Do not answer Question 3 if you have answered Question 2.

Indicate which question you are answering by marking a cross . If you change your mind, put a line through the box and then indicate your new question with a cross .

If you answer Question 3, put a cross in the box .

Coastal Landscapes and Change

You must use the Resource Booklet provided.

3 Study Figure 3a in the Resource Booklet.

(a) Explain the contribution of erosional processes in producing sediment.

(6)

.....

.....

.....

.....

.....

.....

.....

.....

.....

.....

.....

.....

.....

.....

.....

.....

.....

.....

.....

.....

.....

.....

.....

DO NOT WRITE IN THIS AREA

DO NOT WRITE IN THIS AREA

DO NOT WRITE IN THIS AREA



DO NOT WRITE IN THIS AREA

DO NOT WRITE IN THIS AREA

DO NOT WRITE IN THIS AREA

Study Figure 3b in the Resource Booklet.

(b) Explain the role of global warming in changing mean sea level since 1920.

(6)

Area with horizontal dotted lines for writing the answer.



(c) Explain the role of geology in the formation of contrasting cliff profiles.

(8)

DO NOT WRITE IN THIS AREA

DO NOT WRITE IN THIS AREA

DO NOT WRITE IN THIS AREA

Area with horizontal dotted lines for writing.



DO NOT WRITE IN THIS AREA

DO NOT WRITE IN THIS AREA

DO NOT WRITE IN THIS AREA

.....

.....

.....

.....

.....

.....



P 7 2 6 1 9 A 0 1 7 3 2

(d) Evaluate the view that without hard engineering there is little future for coastal communities threatened by coastal recession and flooding.

(20)

Area with horizontal dotted lines for writing.

DO NOT WRITE IN THIS AREA

DO NOT WRITE IN THIS AREA

DO NOT WRITE IN THIS AREA



DO NOT WRITE IN THIS AREA

DO NOT WRITE IN THIS AREA

DO NOT WRITE IN THIS AREA

Large writing area with horizontal dotted lines.



DO NOT WRITE IN THIS AREA

DO NOT WRITE IN THIS AREA

DO NOT WRITE IN THIS AREA

Handwriting practice area with 20 horizontal dotted lines.



DO NOT WRITE IN THIS AREA

DO NOT WRITE IN THIS AREA

DO NOT WRITE IN THIS AREA

Area with horizontal dotted lines for writing.

(Total for Question 3 = 40 marks)

TOTAL FOR SECTION B = 40 MARKS



SECTION C

Physical Systems and Sustainability

Answer ALL questions in this section. Write your answers in the spaces provided.

You must use the Resource Booklet provided.

4 Study Figure 4a in the Resource Booklet.

(a) Explain **one** possible impact on local communities of the development of onshore wind farms.

(3)

.....

.....

.....

.....

.....

.....

.....

DO NOT WRITE IN THIS AREA

DO NOT WRITE IN THIS AREA

DO NOT WRITE IN THIS AREA



(b) Explain how adaptation strategies, such as water conservation, may help communities cope with a changed climate.

(6)

DO NOT WRITE IN THIS AREA

DO NOT WRITE IN THIS AREA

DO NOT WRITE IN THIS AREA

Area with horizontal dotted lines for writing the answer.



(c) Explain how water insecurity can cause both social and economic problems.

(8)

Area with horizontal dotted lines for writing.

DO NOT WRITE IN THIS AREA

DO NOT WRITE IN THIS AREA

DO NOT WRITE IN THIS AREA



DO NOT WRITE IN THIS AREA

DO NOT WRITE IN THIS AREA

DO NOT WRITE IN THIS AREA

Handwriting practice lines consisting of six horizontal dotted lines.

A large empty rectangular area for writing or drawing.



P 7 2 6 1 9 A 0 2 5 3 2

(d) Study Figure 4b and 4c in the Resource Booklet, which show two neighbouring upland river catchments and their hydrographs following a local storm event.

Assess the extent to which land use affects the shape of these storm hydrographs.

(12)

Area with horizontal dotted lines for writing.

DO NOT WRITE IN THIS AREA

DO NOT WRITE IN THIS AREA

DO NOT WRITE IN THIS AREA



DO NOT WRITE IN THIS AREA

DO NOT WRITE IN THIS AREA

DO NOT WRITE IN THIS AREA

Large writing area with horizontal dotted lines.



P 7 2 6 1 9 A 0 2 7 3 2

DO NOT WRITE IN THIS AREA

DO NOT WRITE IN THIS AREA

DO NOT WRITE IN THIS AREA

(e) The processes of the carbon cycle operate at longer and slower (geological) and shorter and faster (biological) timescales.

Evaluate the view that human activities are having a greater impact on shorter term biological processes than on longer term geological processes.

(20)

Area with horizontal dotted lines for writing.



DO NOT WRITE IN THIS AREA

DO NOT WRITE IN THIS AREA

DO NOT WRITE IN THIS AREA

Large writing area with horizontal dotted lines.



DO NOT WRITE IN THIS AREA

DO NOT WRITE IN THIS AREA

DO NOT WRITE IN THIS AREA

Large area with horizontal dotted lines for writing.



DO NOT WRITE IN THIS AREA

DO NOT WRITE IN THIS AREA

DO NOT WRITE IN THIS AREA

Area with horizontal dotted lines for writing.

(Total for Question 4 = 49 marks)

**TOTAL FOR SECTION C = 49 MARKS
TOTAL FOR PAPER = 105 MARKS**



DO NOT WRITE IN THIS AREA

DO NOT WRITE IN THIS AREA

DO NOT WRITE IN THIS AREA

BLANK PAGE



Pearson Edexcel Level 3 GCE**Wednesday 17 May 2023**

Morning (Time: 2 hours 15 minutes)

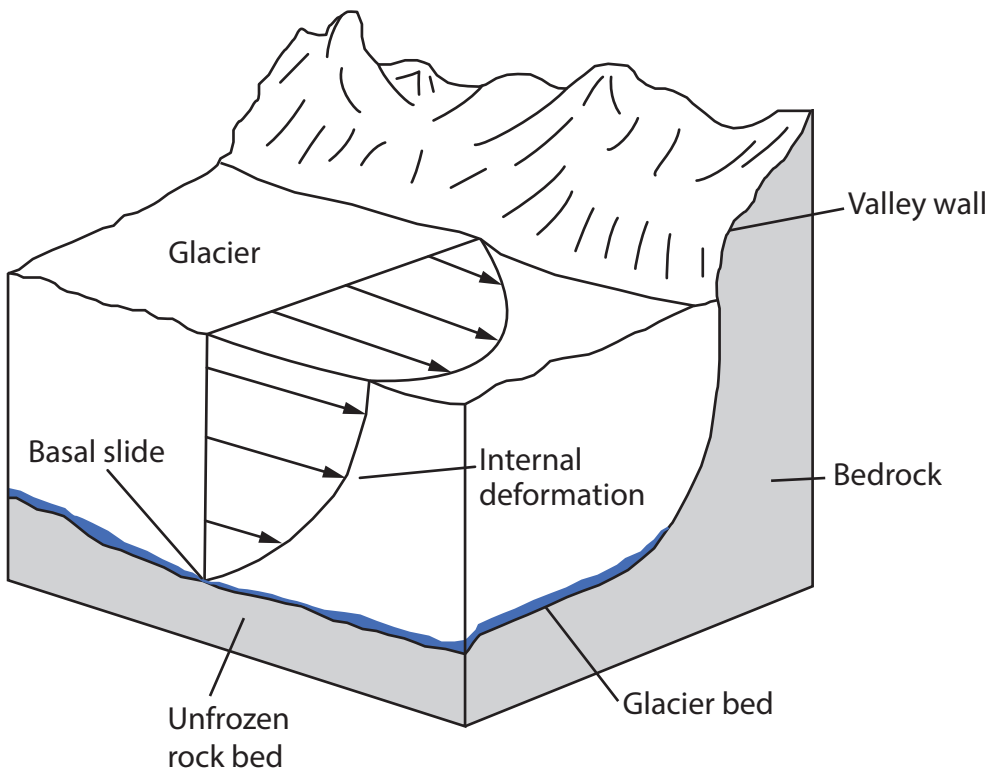
Paper
reference**9GE0/01****Geography****Advanced
PAPER 1****Resource Booklet****Do not return this Booklet with the question paper.***Turn over* ►**P72619A**©2023 Pearson Education Ltd.
N:1/1/1/1/1

P 7 2 6 1 9 A


Pearson

SECTION B

The following resources relate to Question 2.



Key



Meltwater



Ice movement (Length of arrow indicates relative ice velocity)

Figure 2a

Distribution of velocity in a temperate glacier

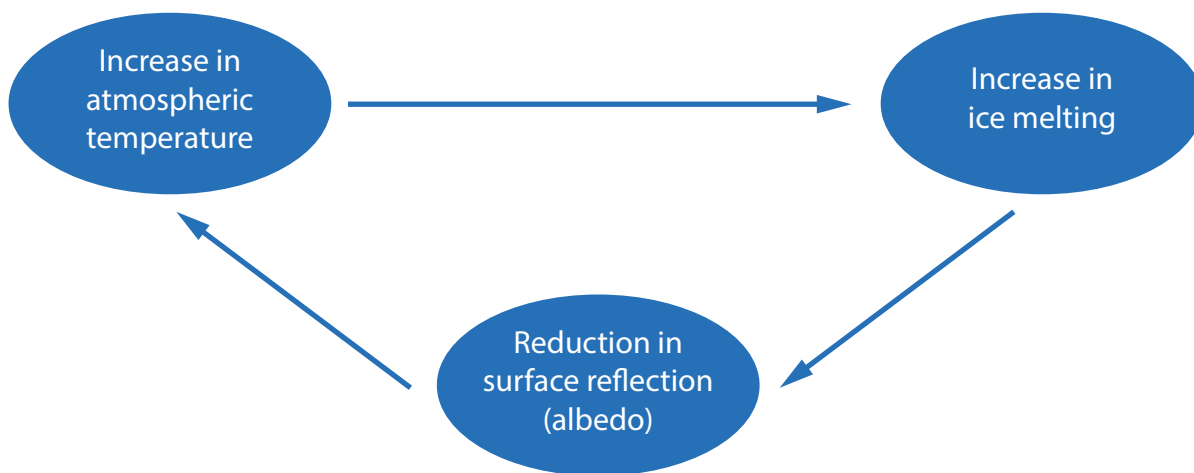
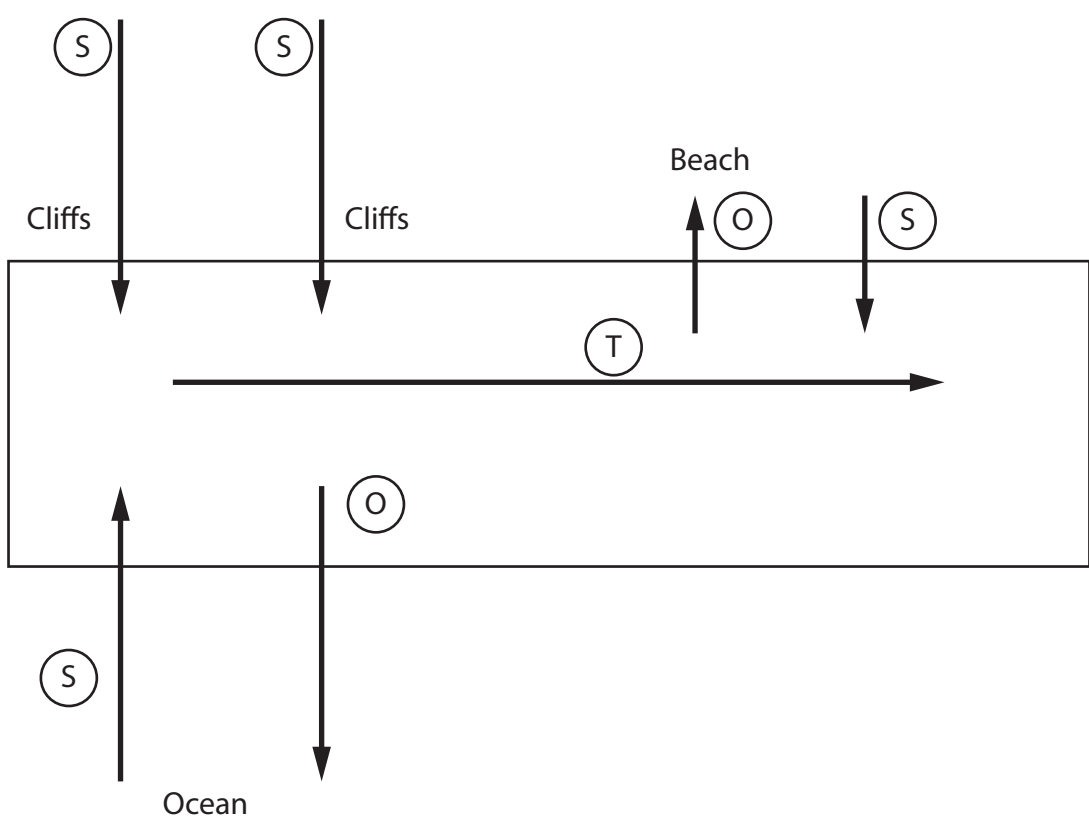


Figure 2b

Impact of increases in atmospheric temperature on the size of ice sheets and sea ice



The following resources relate to Question 3.



Key

- (S) Sources of sediment to the cell
- (T) Transfers of sediment within the cell
- (O) Outputs of sediment from the cell

Figure 3a

A coastal sediment cell showing sources, transfers and outputs



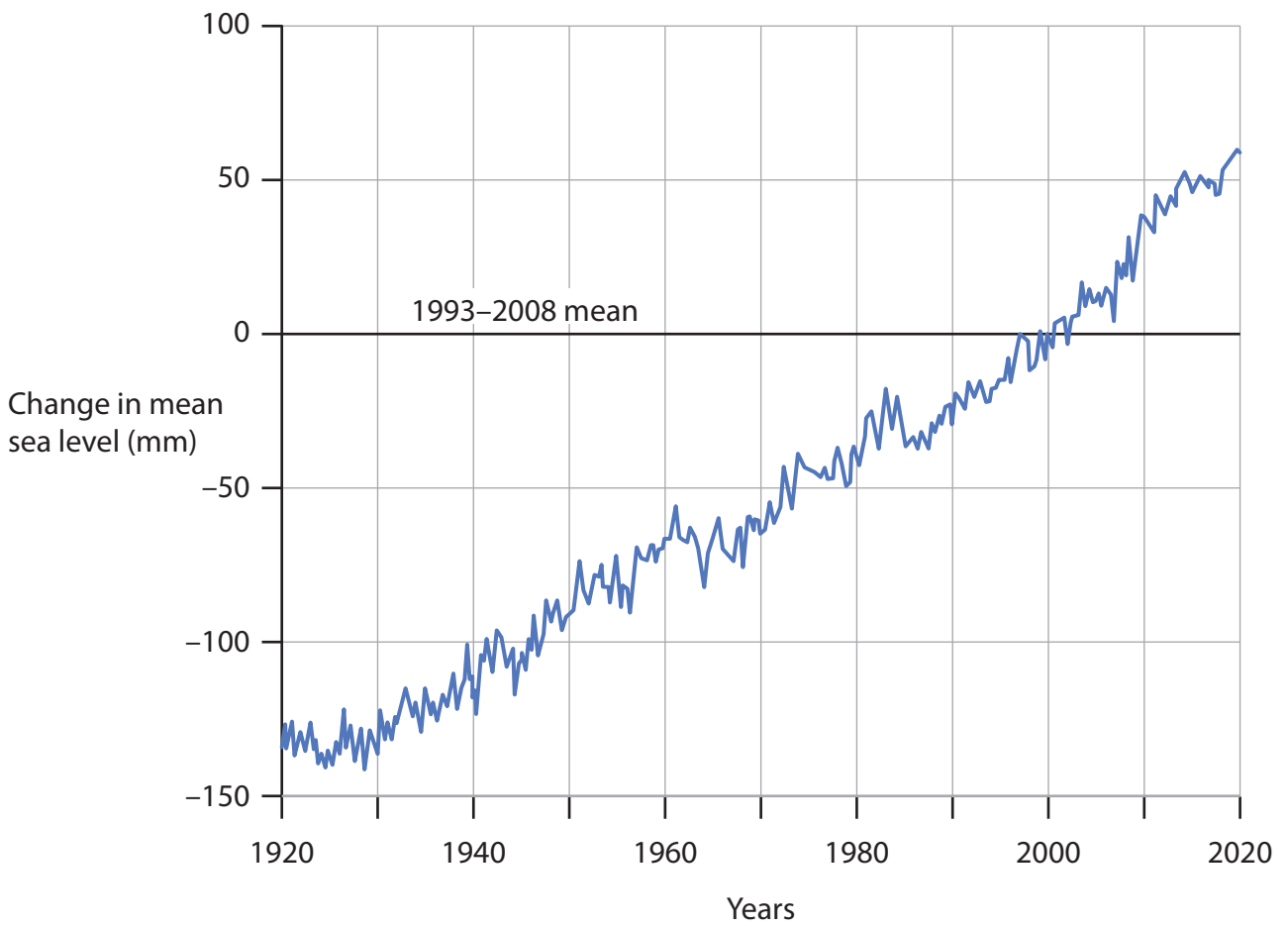


Figure 3b
Mean sea level, 1920–2020, compared to 1993–2008 mean



SECTION C

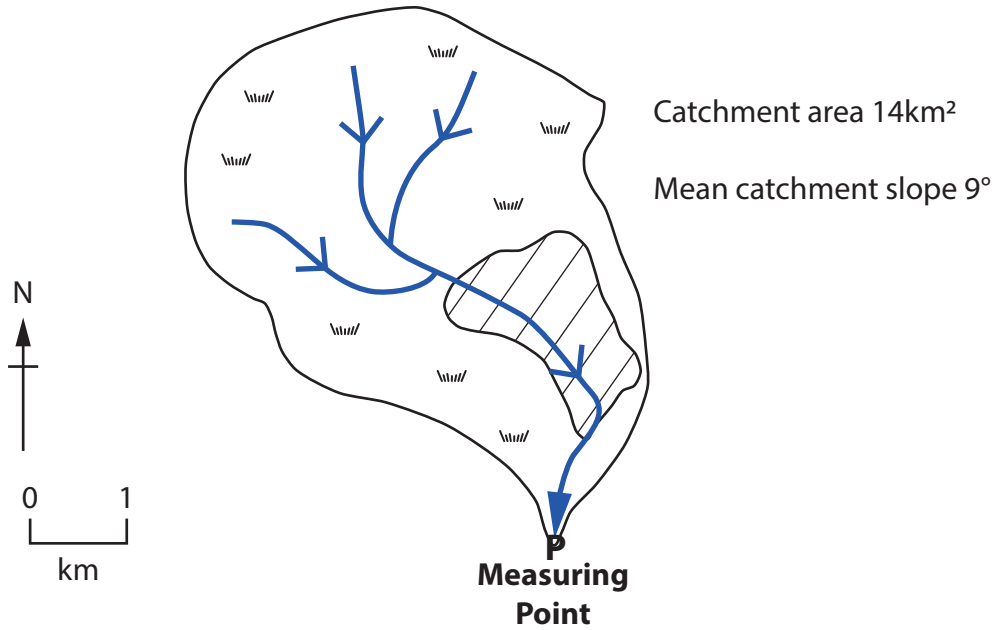
The following resources relate to Question 4.



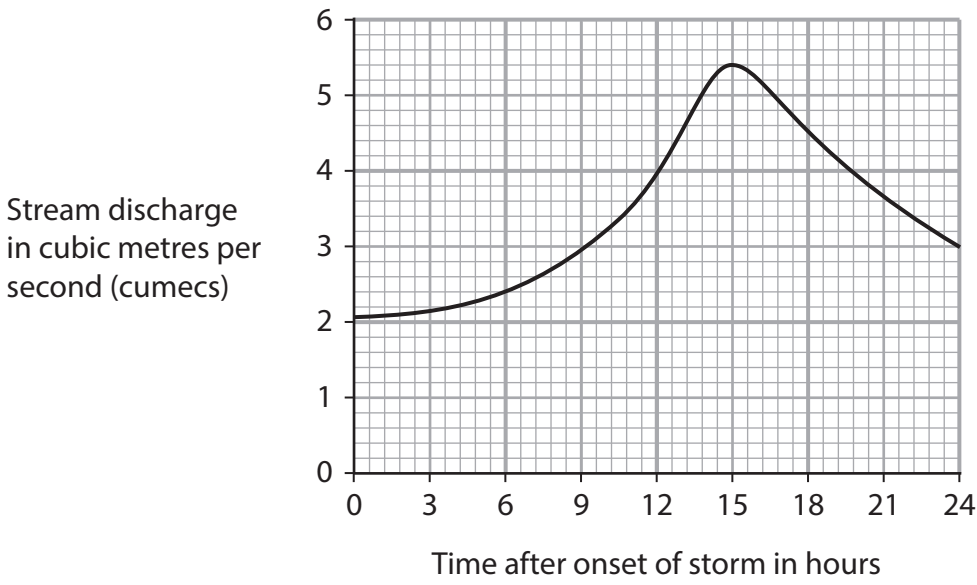
Figure 4a

An onshore wind farm

Catchment X



Hydrograph for Catchment X

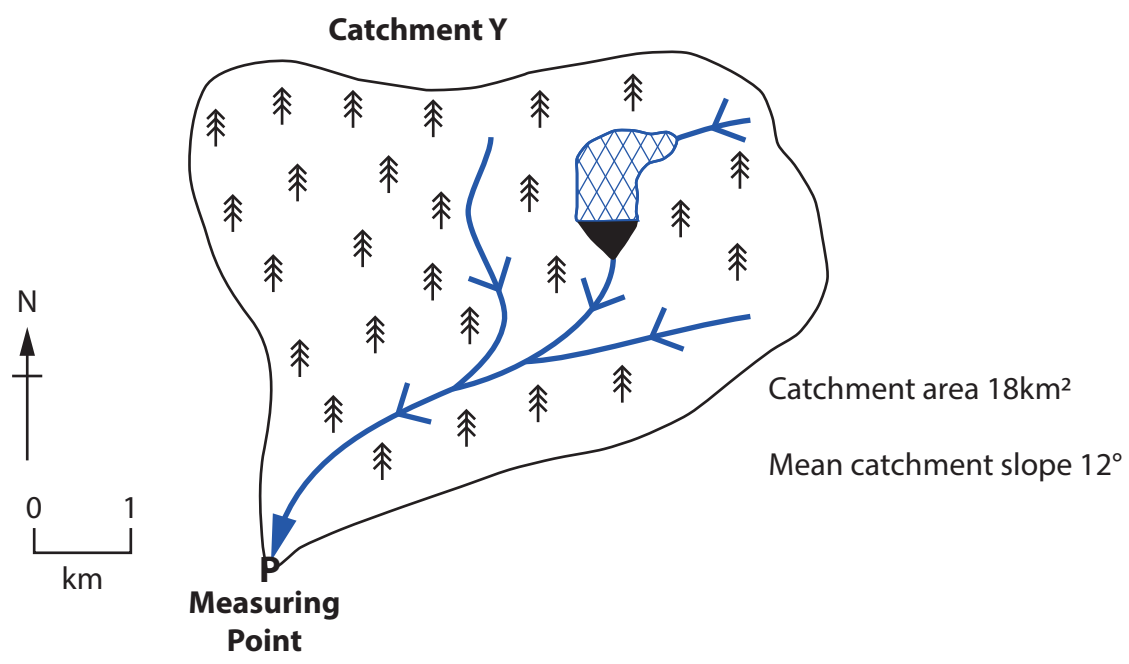


- Key**
- Moorland and grassland underlain by impermeable rock
 - Urban area
 - River flow
 - P** Measuring point

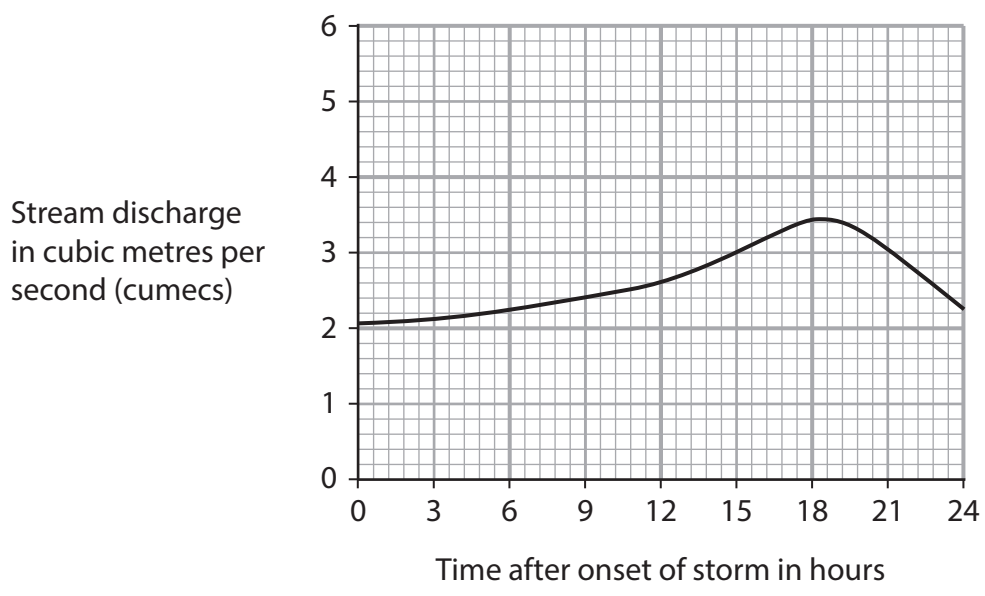
Figure 4b

A map and hydrograph of upland Catchment X





Hydrograph for Catchment Y



- Key**
- Coniferous forest plantation underlain by permeable rock
 - Reservoir
 - Dam
 - River flow
 - P** Measuring point

Figure 4c

A map and hydrograph of upland Catchment Y



BLANK PAGE

Acknowledgements

Pearson Education Ltd. gratefully acknowledges all the following sources used in the preparation of this paper:

Figure 1 volcano.si.edu

Figure 3b <https://www.climate.gov/news-features/understanding-climate/climate-change-global-sea-level>

Figure 4a © Peter Devlin/Alamy Stock Photo

