

Please check the examination details below before entering your candidate information

Candidate surname					Other names				
Centre Number				Candidate Number					
<input type="text"/>	<input type="text"/>	<input type="text"/>	<input type="text"/>	<input type="text"/>	<input type="text"/>	<input type="text"/>	<input type="text"/>	<input type="text"/>	<input type="text"/>

**Pearson Edexcel International Advanced Level**

Time 1 hour 45 minutes

Paper reference **WGE01/01**

**Geography**

**International Advanced Subsidiary**

**PAPER 1: Global Challenges**

**You must have:**  
Resource Booklet (enclosed)

Total Marks

### Instructions

- Use **black** ink or ball-point pen.
- **Fill in the boxes** at the top of this page with your name, centre number and candidate number.
- Answer **all** questions in Section A. Answer **either** Question 5 **or** Question 6 in Section B.
- Answer the questions in the spaces provided  
– *there may be more space than you need.*
- Calculators may be used.

### Information

- The total mark for this paper is 90.
- The marks for **each** question are shown in brackets  
– *use this as a guide as to how much time to spend on each question.*

### Advice

- Read each question carefully before you start to answer it.
- Check your answers if you have time at the end.

Turn over ►

P66606A

©2022 Pearson Education Ltd.

Q:1/1/1/1



  
Pearson

## SECTION A

You must use the Resource Booklet.

Answer ALL questions. Write your answers in the spaces provided.

Some questions must be answered with a cross in a box ☒. If you change your mind about an answer, put a line through the box ☒ and then mark your new answer with a cross ☒.

1 (a) Study Figure 1 in the Resource Booklet.

(i) Describe the distribution of avalanche hazard risk.

(2)

.....

.....

.....

.....

(ii) Explain **two** factors that may trigger avalanches in the areas shown.

(4)

1 .....

.....

.....

2 .....

.....

.....

DO NOT WRITE IN THIS AREA

DO NOT WRITE IN THIS AREA

DO NOT WRITE IN THIS AREA



DO NOT WRITE IN THIS AREA

DO NOT WRITE IN THIS AREA

DO NOT WRITE IN THIS AREA

(b) Explain **one** way that the magnitude of a hazard event can be measured.

(3)

.....

.....

.....

.....

.....

.....

(c) Explain why hydro-meteorological hazards have different economic and social impacts.

(6)

.....

.....

.....

.....

.....

.....

.....

.....

.....

.....

.....

.....

.....

.....

.....

.....

.....

.....

.....

.....

.....

.....

**(Total for Question 1 = 15 marks)**



2 Study Figure 2 in the Resource Booklet.

(a) (i) State the typical number of years in a sunspot cycle.

(1)

(ii) Describe the trends in sunspot numbers between 1750 and 1850.

(2)

(iii) Suggest **one** impact of sunspot numbers between 1650 and 1700 on Earth's climate.

(2)

DO NOT WRITE IN THIS AREA

DO NOT WRITE IN THIS AREA

DO NOT WRITE IN THIS AREA



DO NOT WRITE IN THIS AREA

DO NOT WRITE IN THIS AREA

DO NOT WRITE IN THIS AREA

(b) Explain why the evidence used to reconstruct past climate records may be unreliable.

(4)

.....

.....

.....

.....

.....

.....

.....

.....

.....

.....

(c) Explain how shifts in the location of climate belts may impact on farming practice in the future.

(6)

.....

.....

.....

.....

.....

.....

.....

.....

.....

.....

.....

.....

.....

.....

.....

.....

.....

.....

.....

.....

.....

.....

.....

**(Total for Question 2 = 15 marks)**



3 Study Figure 3 in the Resource Booklet.

(a) (i) Identify the approximate percentage (%) of countries that had formally approved the African Continental Free Trade Area (AfCFTA) by 2019.

(1)

- A 5%
- B 40%
- C 80%
- D 100%

(ii) Explain **one** reason why African nations may benefit from joining free trade blocs such as AfCFTA.

(2)

.....

.....

.....

.....

(b) Explain **one** way in which these international organisations have each promoted globalisation.

(4)

World Trade Organisation:

.....

.....

.....

.....

International Monetary Fund:

.....

.....

.....

.....

DO NOT WRITE IN THIS AREA

DO NOT WRITE IN THIS AREA

DO NOT WRITE IN THIS AREA



DO NOT WRITE IN THIS AREA

DO NOT WRITE IN THIS AREA

DO NOT WRITE IN THIS AREA

(c) Explain **one** way in which the degree of globalisation of a country is measured. (2)

Dotted lines for writing answer (c)

(d) Explain the costs and benefits of TNCs outsourcing production to emerging countries. (6)

Dotted lines for writing answer (d)

(Total for Question 3 = 15 marks)

Blank area for writing total marks



P 6 6 6 0 6 A 0 7 2 0

4 Study Figure 4 in the Resource Booklet.

(a) (i) Identify the type of country that has the highest number of pollution-related deaths per year in 2019.

(1)

- A Developed
- B Developing
- C Emerging
- D EU member

(ii) Suggest **one** reason why the number of pollution-related deaths is:

(4)

relatively high in China

relatively low in the United States.

DO NOT WRITE IN THIS AREA

DO NOT WRITE IN THIS AREA

DO NOT WRITE IN THIS AREA





DO NOT WRITE IN THIS AREA

DO NOT WRITE IN THIS AREA

DO NOT WRITE IN THIS AREA

(b) Explain the benefits of immigration for host countries.

(4)

.....

.....

.....

.....

.....

.....

.....

.....

.....

.....

(c) Explain why managing international migration is a challenge for many countries.

(6)

.....

.....

.....

.....

.....

.....

.....

.....

.....

.....

.....

.....

.....

.....

.....

.....

.....

.....

.....

.....

.....

.....

.....

**(Total for Question 4 = 15 marks)**

---

**TOTAL FOR SECTION A = 60 MARKS**





DO NOT WRITE IN THIS AREA

DO NOT WRITE IN THIS AREA

DO NOT WRITE IN THIS AREA

Large empty area with horizontal dotted lines for writing.



(b) Assess the extent to which global warming threatens developing countries more than others.

(20)

Area with horizontal dotted lines for writing.

DO NOT WRITE IN THIS AREA

DO NOT WRITE IN THIS AREA

DO NOT WRITE IN THIS AREA



DO NOT WRITE IN THIS AREA

DO NOT WRITE IN THIS AREA

DO NOT WRITE IN THIS AREA

Handwriting practice area with 25 horizontal dotted lines.



DO NOT WRITE IN THIS AREA

DO NOT WRITE IN THIS AREA

DO NOT WRITE IN THIS AREA

(Total for Question 5 = 30 marks)



DO NOT WRITE IN THIS AREA

**Do not answer Question 6 if you have answered Question 5.**

**If you answer Question 6 put a cross in the box  .**

**6** Study Figure 6 in the Resource Booklet.

(a) Suggest reasons for the contrasting urbanisation trends.

(10)

Dotted lines for writing the answer.



DO NOT WRITE IN THIS AREA

DO NOT WRITE IN THIS AREA

DO NOT WRITE IN THIS AREA

Large empty rectangular area with rounded corners, intended for writing or drawing.





(b) Assess the extent to which globalisation has benefitted emerging countries more than others.

(20)

DO NOT WRITE IN THIS AREA

DO NOT WRITE IN THIS AREA

DO NOT WRITE IN THIS AREA

Area with horizontal dotted lines for writing.



P 6 6 6 0 6 A 0 1 7 2 0

DO NOT WRITE IN THIS AREA

DO NOT WRITE IN THIS AREA

DO NOT WRITE IN THIS AREA

Large empty area with horizontal dotted lines for writing.



DO NOT WRITE IN THIS AREA

DO NOT WRITE IN THIS AREA

DO NOT WRITE IN THIS AREA

Area with horizontal dotted lines for writing.

**(Total for Question 6 = 30 marks)**

---

**TOTAL FOR SECTION B = 30 MARKS**  
**TOTAL FOR PAPER = 90 MARKS**



DO NOT WRITE IN THIS AREA

DO NOT WRITE IN THIS AREA

DO NOT WRITE IN THIS AREA

**BLANK PAGE**



# Pearson Edexcel International Advanced Level

Time 1 hour 45 minutes

Paper  
reference

**WGE01/01**

## Geography

International Advanced Subsidiary  
**PAPER 1: Global Challenges**

### Resource Booklet

Do not return this Booklet with the question paper.

Turn over ►

P66606A

©2022 Pearson Education Ltd.

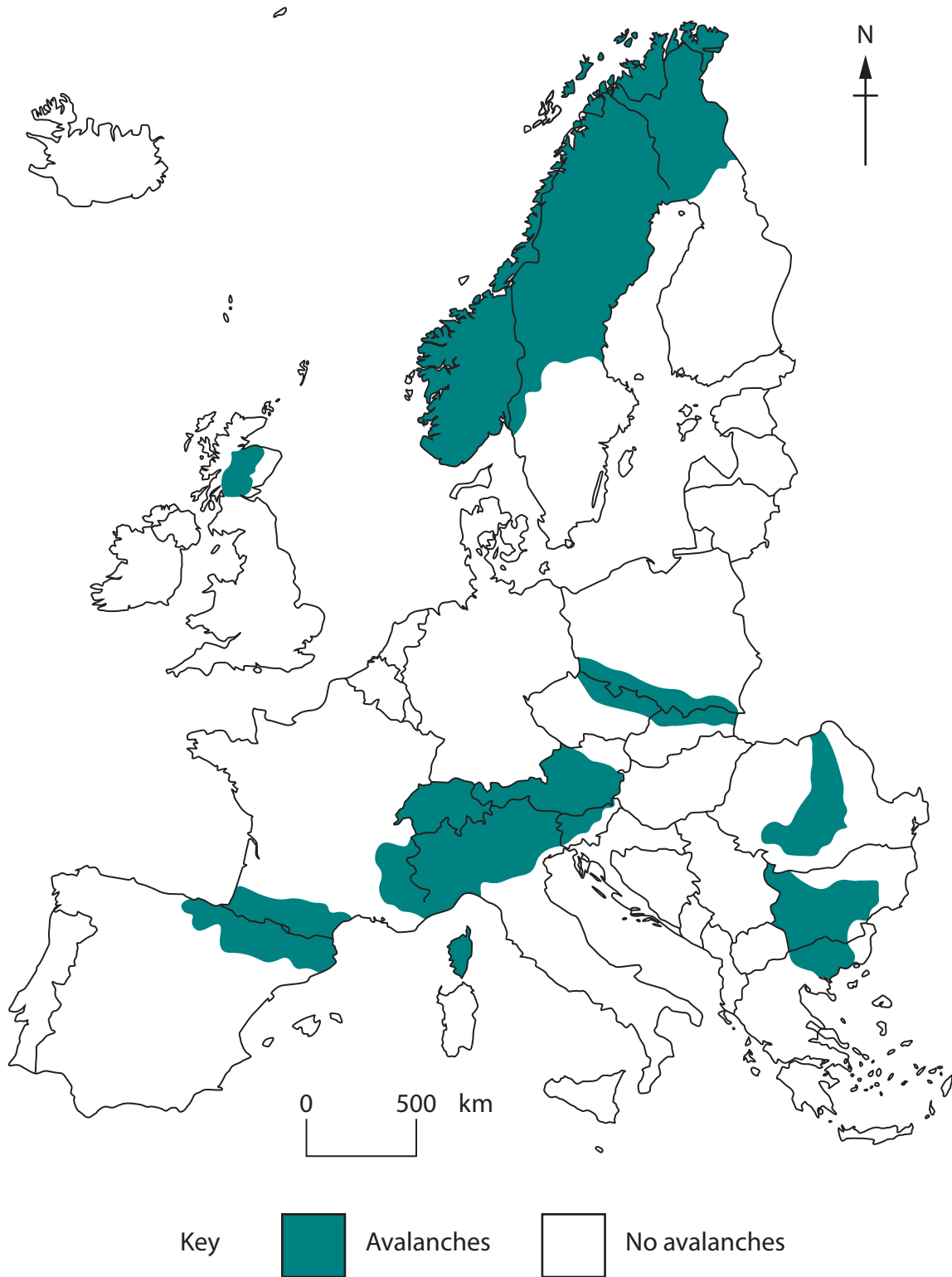
Q:1/1/1/1



Pearson

**SECTION A**

The following resource relates to Question 1.



**Figure 1**

**Map of avalanche hazard risk in Europe**



The following resource relates to Question 2.

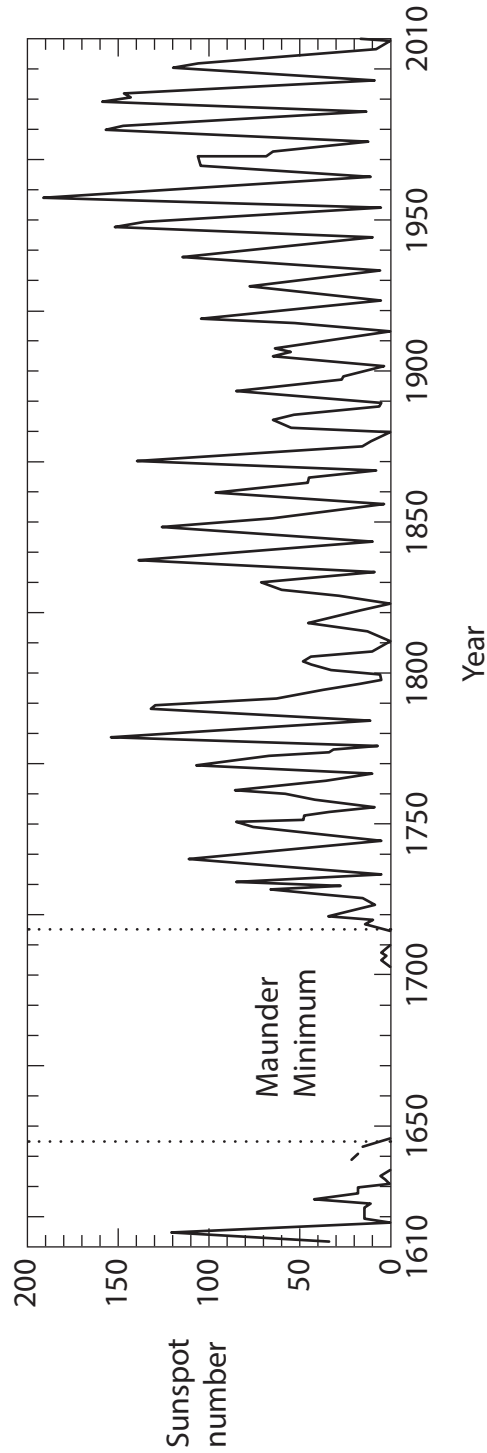


Figure 2

Graph of sunspot numbers from 1610 to 2010



The following resource relates to Question 3.

There are 54 countries in Africa

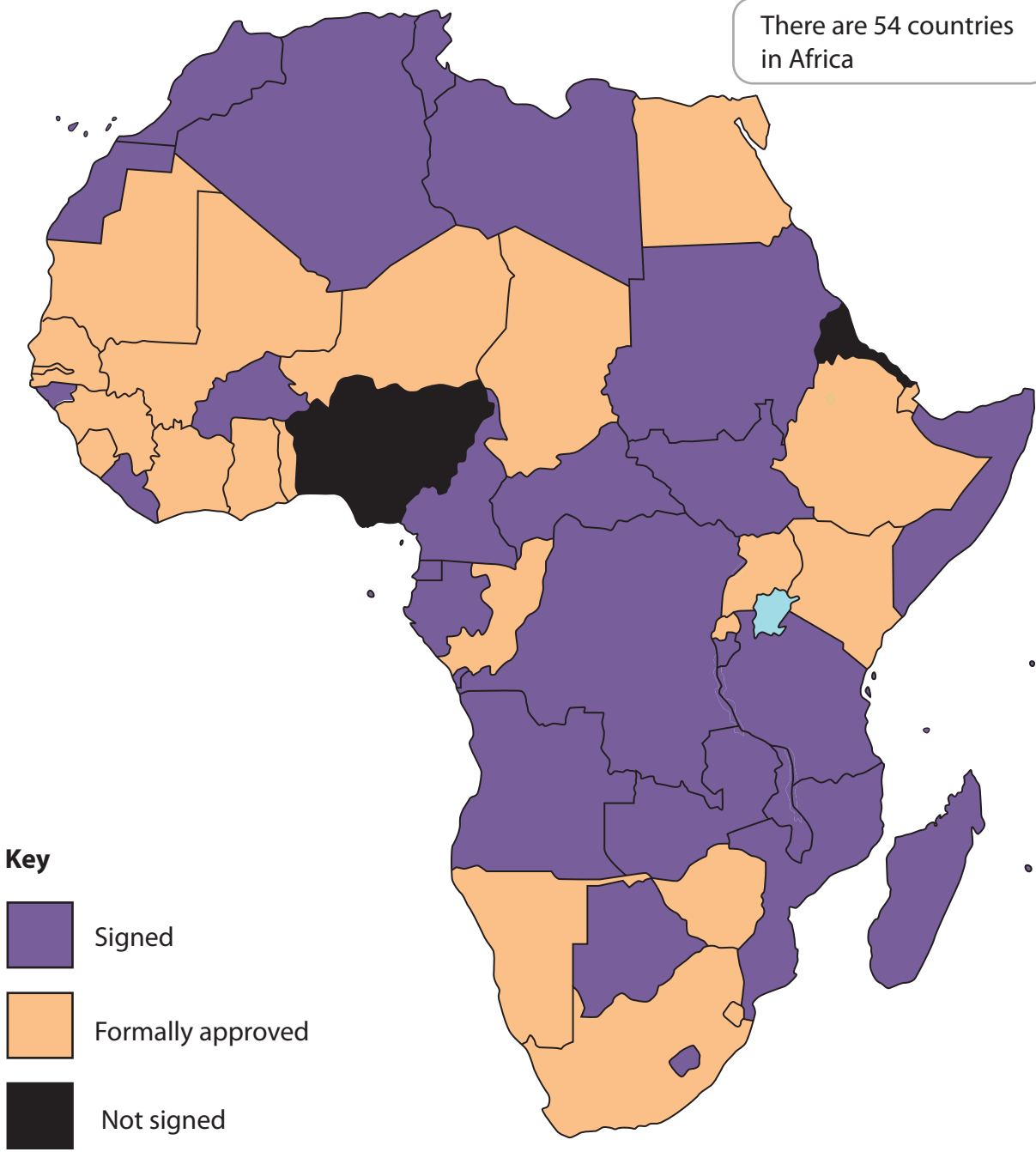


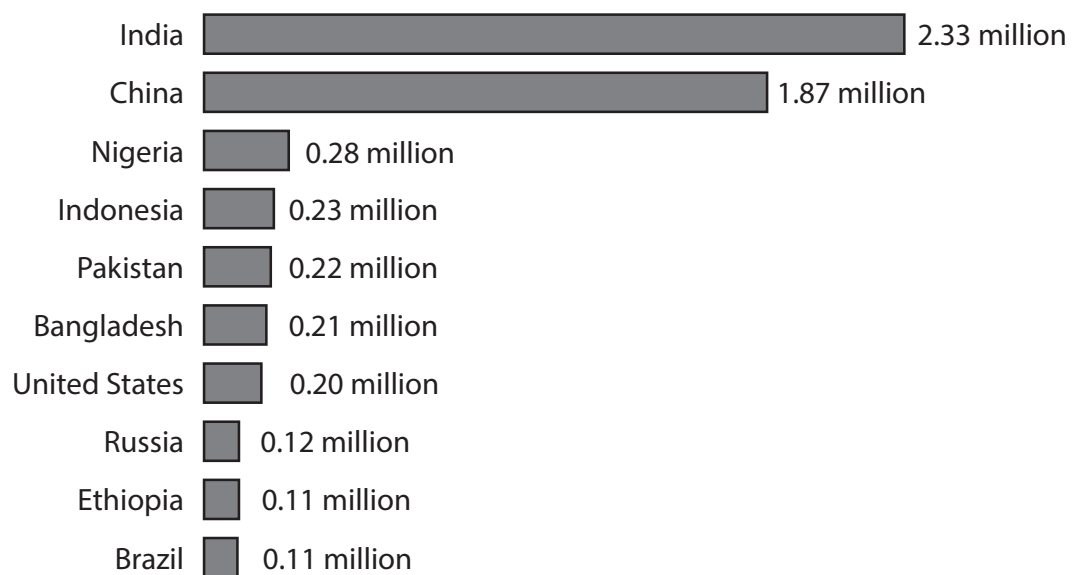
Figure 3

Map of the African Continental Free Trade Area (AfCFTA) agreement, 2019





The following resource relates to Question 4.

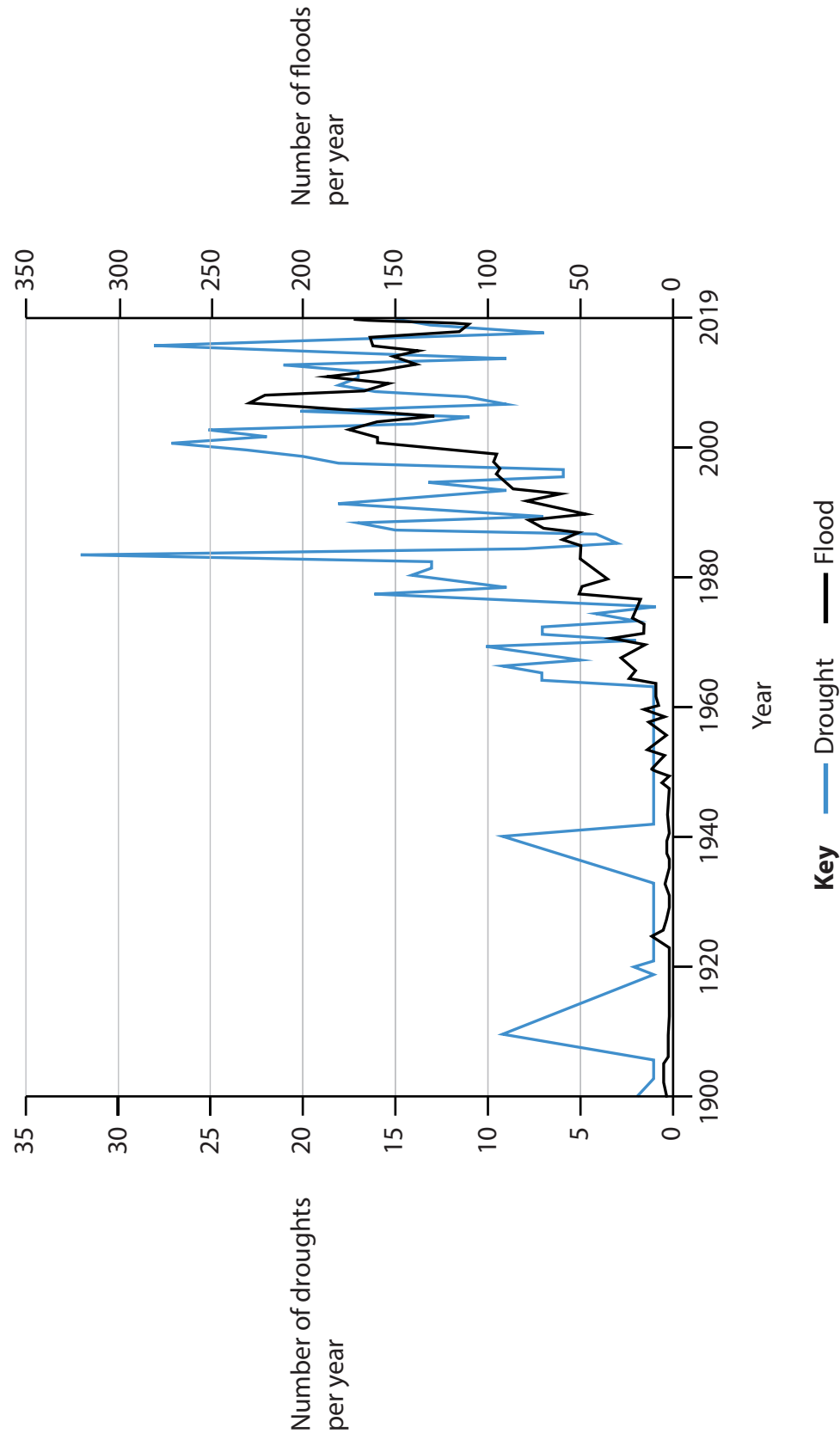


**Figure 4**

**Estimated number of pollution-related deaths  
(due to exposure to toxic air, water and land), 2019**

**SECTION B**

The following resource relates to Question 5.



**Figure 5**

**Number of recorded drought and flood disasters worldwide, 1900–2019**



The following resource relates to Question 6.

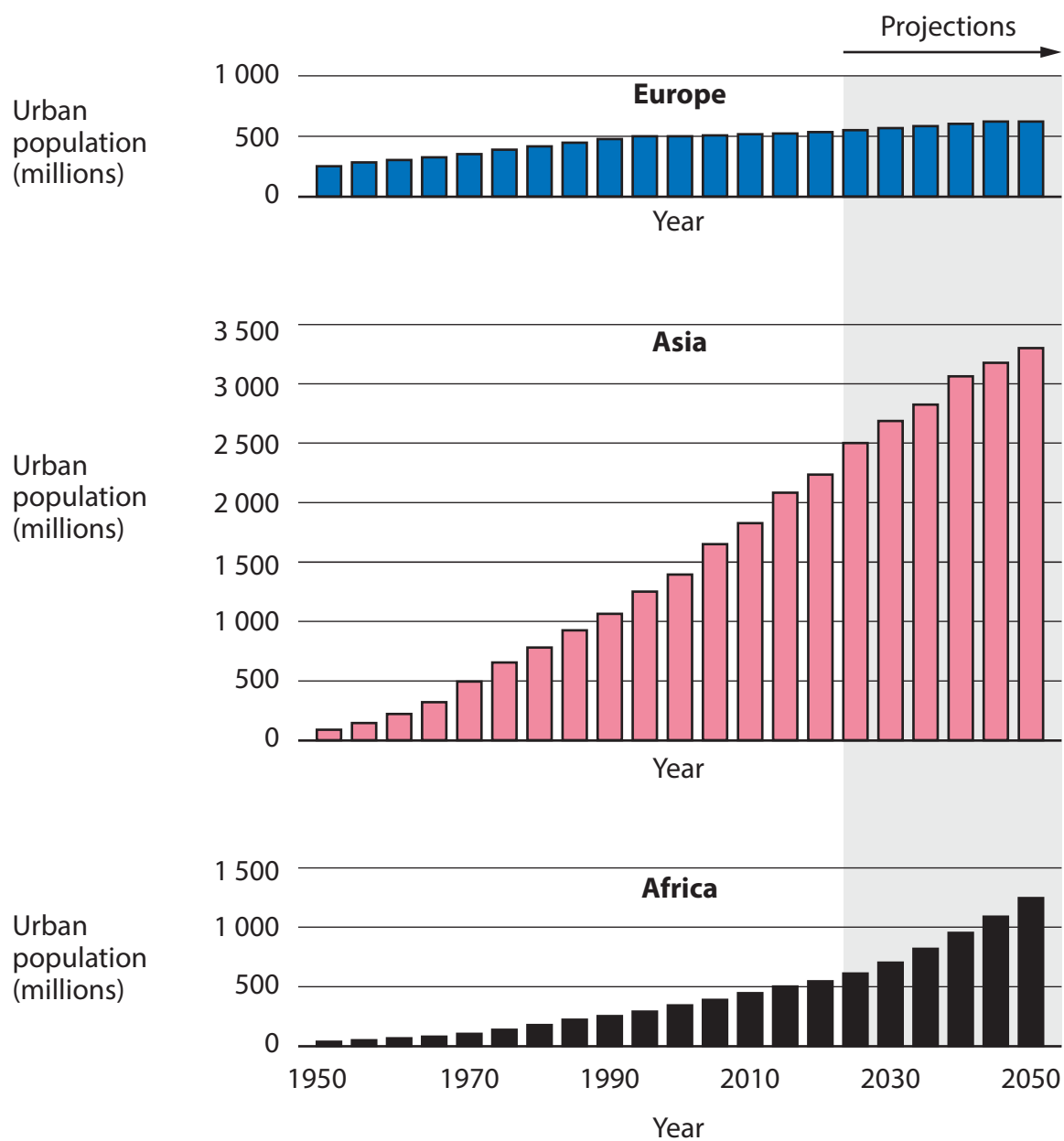


Figure 6

Urbanisation trends from 1950–2020, projected to 2050



## BLANK PAGE

### Acknowledgments

Pearson Education Ltd. gratefully acknowledges all following sources used in preparation of this paper:

Figure 1 adapted from: [https://www.preventionweb.net/files/3772\\_AvalancheazardquestionaryN3.jpg](https://www.preventionweb.net/files/3772_AvalancheazardquestionaryN3.jpg)

Figure 2 adapted from: © NASA

Figure 3 adapted from: <https://talkmarkets.com/content/global-markets/visualizing-africas-free-trade-ambitions?post=216712>

Figure 4 adapted from: <https://www.statista.com/chart/20360/premature-pollution-related-deaths/>

Figure 5 adapted from: <https://ourworldindata.org/grapher/number-of-natural-disaster-events?country=~Drought>

and <https://ourworldindata.org/grapher/number-of-natural-disaster-events?country=~Flood>

Figure 6 adapted from: © European Environment Agency