

Write your name here

Surname	Other names
---------	-------------

Pearson Edexcel
International
Advanced Level

Centre Number	Candidate Number
<input type="text"/>	<input type="text"/>

Geography
International Advanced Subsidiary
Paper 1: Global Challenges

Tuesday 15 May 2018 – Afternoon Time: 1 hour 45 minutes	Paper Reference WGE01/01
---	------------------------------------

You must have: Resource Booklet (enclosed)	Total Marks
--	-------------

Instructions

- Use **black** ink or ball-point pen.
- **Fill in the boxes** at the top of this page with your name, centre number and candidate number.
- Answer **all** questions in Section A. Answer **either** Question 5 **or** Question 6 in Section B.
- Answer the questions in the spaces provided
– *there may be more space than you need.*
- Calculators may be used.

Information

- The total mark for this paper is 90.
- The marks for **each** question are shown in brackets
– *use this as a guide as to how much time to spend on each question.*

Advice

- Read each question carefully before you start to answer it.
- Check your answers if you have time at the end.

Turn over ►

P53550A

©2018 Pearson Education Ltd.

1/1/1/1/1/1/1/1/1



Pearson

SECTION A

You must use the Resource Booklet.

Answer ALL questions in this section. Write your answers in the spaces provided.

Some questions must be answered with a cross in a box ☒. If you change your mind about an answer, put a line through the box ☒ and then mark your new answer with a cross ☒.

1 Study Figure 1 in the Resource Booklet.

(a) (i) Identify the year with the largest number of geophysical disasters.

(1)

- A 2000
- B 2004
- C 2010
- D 2016

(ii) Describe the trend in meteorological disasters between 2000 and 2016.

(2)

.....

.....

.....

.....

(iii) Suggest **one** reason for the increase in hydrological disasters, such as flooding, since 2004.

(2)

.....

.....

.....

.....

DO NOT WRITE IN THIS AREA

DO NOT WRITE IN THIS AREA

DO NOT WRITE IN THIS AREA



2 Study Figure 2 in the Resource Booklet.

(a) (i) Name the Milankovitch Cycle labelled X.

(1)

(ii) Explain **two** ways Milankovitch Cycles can change the Earth's climate.

(4)

1

2

(b) Explain how **two** sources of evidence are used to reconstruct past climates.

(4)

DO NOT WRITE IN THIS AREA

DO NOT WRITE IN THIS AREA

DO NOT WRITE IN THIS AREA



3 Study Figure 3 in the Resource Booklet.

(a) (i) Identify the correct statement about the change in the population structure of Chile between 1982 and 2016.

(1)

- A** Chile had a greater number of 0-14 year olds in 2016
- B** Chile had fewer females over 80 years old in 2016
- C** Chile had a greater number of 45-59 year olds in 2016
- D** Chile had fewer males over 80 years old in 2016

(ii) Suggest **one** reason for the change in the Chilean population aged over 80.

(2)

.....

.....

.....

.....

(iii) Explain **one** economic consequence of the change in the Chilean population structure between 1982 and 2016, as shown in Figure 3.

(3)

.....

.....

.....

.....

.....

.....

DO NOT WRITE IN THIS AREA

DO NOT WRITE IN THIS AREA

DO NOT WRITE IN THIS AREA



4 Study Figure 4 in the Resource Booklet.

(a) (i) Which province had the largest outflow of migrants? (1)

.....

(ii) Describe the pattern of net migration shown. (4)

.....

.....

.....

.....

.....

.....

.....

.....

(b) Explain the costs of emigration for source countries. (4)

.....

.....

.....

.....

.....

.....

.....

.....

DO NOT WRITE IN THIS AREA

DO NOT WRITE IN THIS AREA

DO NOT WRITE IN THIS AREA



DO NOT WRITE IN THIS AREA

DO NOT WRITE IN THIS AREA

DO NOT WRITE IN THIS AREA

Large empty rectangular area with rounded corners, intended for writing or drawing.



(b) Assess the extent to which economic costs are the most significant impact of natural disasters.

(20)

Area with horizontal dotted lines for writing.

DO NOT WRITE IN THIS AREA

DO NOT WRITE IN THIS AREA

DO NOT WRITE IN THIS AREA



DO NOT WRITE IN THIS AREA

DO NOT WRITE IN THIS AREA

DO NOT WRITE IN THIS AREA

Large writing area with horizontal dotted lines.



DO NOT WRITE IN THIS AREA

DO NOT WRITE IN THIS AREA

DO NOT WRITE IN THIS AREA

(Total for Question 5 = 30 marks)



DO NOT WRITE IN THIS AREA

DO NOT WRITE IN THIS AREA

DO NOT WRITE IN THIS AREA

If you answer Question 6 put a cross in the box .

- 6 Study Figure 6 in the Resource Booklet.
 - (a) Explain the contribution Special Economic Zones have made to globalisation in countries such as India.

(10)

Area with horizontal dotted lines for writing the answer to Question 6(a).



DO NOT WRITE IN THIS AREA

DO NOT WRITE IN THIS AREA

DO NOT WRITE IN THIS AREA

Blank writing area with horizontal dotted lines.



(b) Assess the extent to which the growth of megacities creates more challenges than opportunities.

(20)

DO NOT WRITE IN THIS AREA

DO NOT WRITE IN THIS AREA

DO NOT WRITE IN THIS AREA

Area with horizontal dotted lines for writing.



P 5 3 5 5 0 A 0 1 7 2 0

DO NOT WRITE IN THIS AREA

DO NOT WRITE IN THIS AREA

DO NOT WRITE IN THIS AREA

Large empty area with horizontal dotted lines for writing.



DO NOT WRITE IN THIS AREA

DO NOT WRITE IN THIS AREA

DO NOT WRITE IN THIS AREA

Area with horizontal dotted lines for writing.

(Total for Question 6 = 30 marks)

TOTAL FOR SECTION B = 30 MARKS
TOTAL FOR PAPER = 90 MARKS



DO NOT WRITE IN THIS AREA

DO NOT WRITE IN THIS AREA

DO NOT WRITE IN THIS AREA

BLANK PAGE



Pearson Edexcel
International Advanced Level

Geography

International Advanced Subsidiary
Paper 1: Global Challenges

Tuesday 15 May 2018 – Afternoon
Resource Booklet

Paper Reference

WGE01/01

Do not return this Resource Booklet with the question paper.

Turn over ►

P53550A

©2018 Pearson Education Ltd.

1/1/1/1/1/1/1/1/1




Pearson

SECTION A

The following resource relates to Question 1.

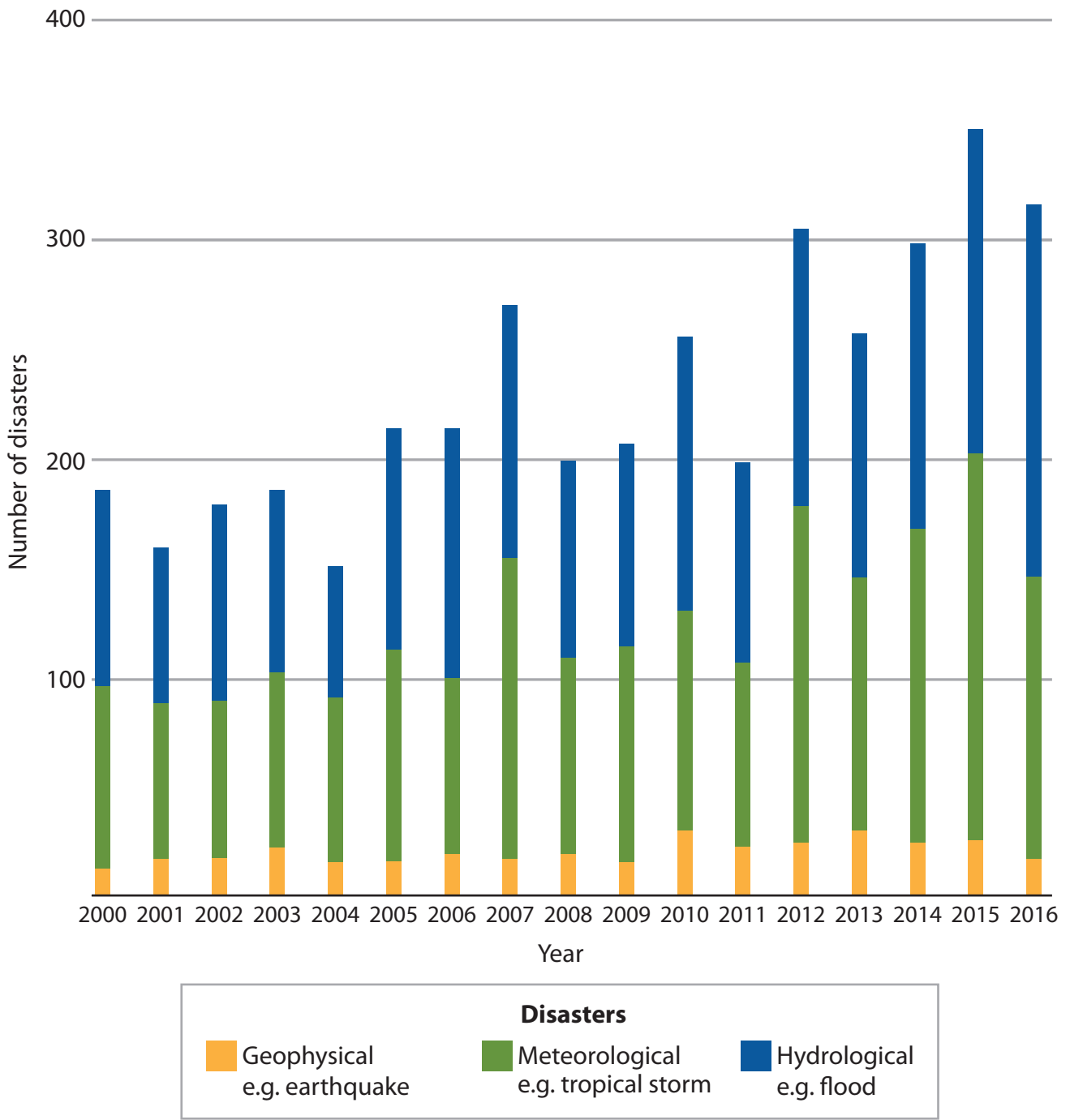


Figure 1

Number of disasters worldwide 2000-2016

The following resource relates to Question 2.

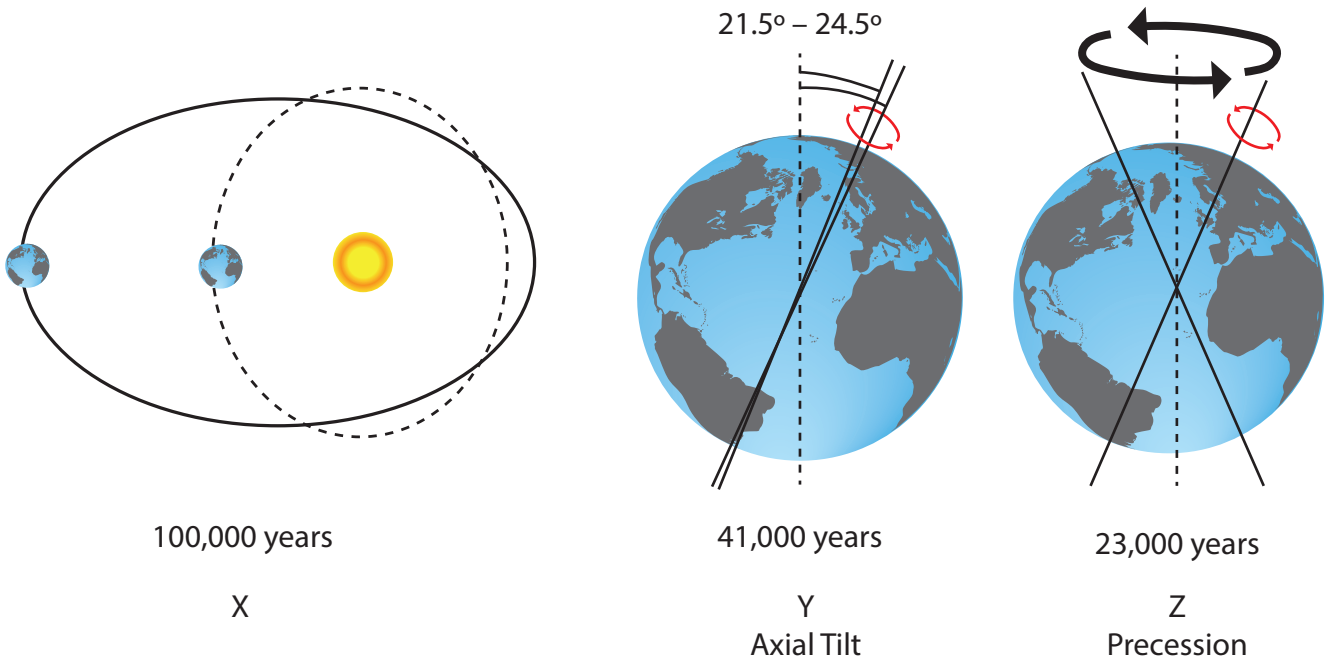


Figure 2
The Milankovitch Cycles

The following resource relates to Question 3.

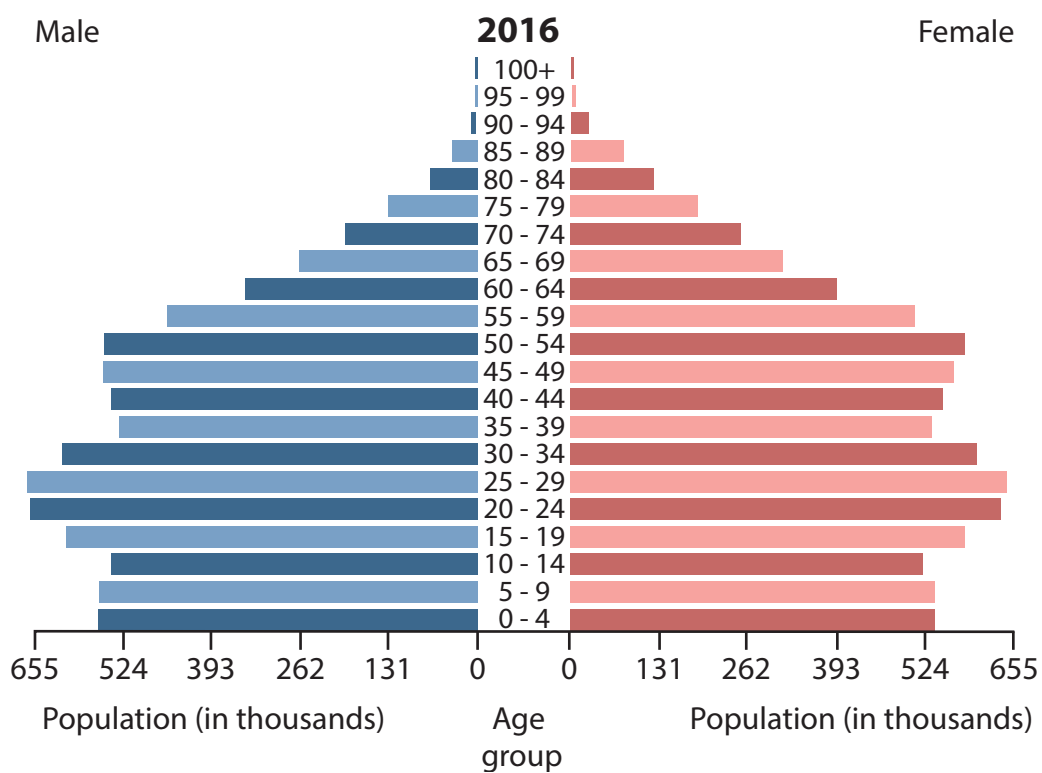
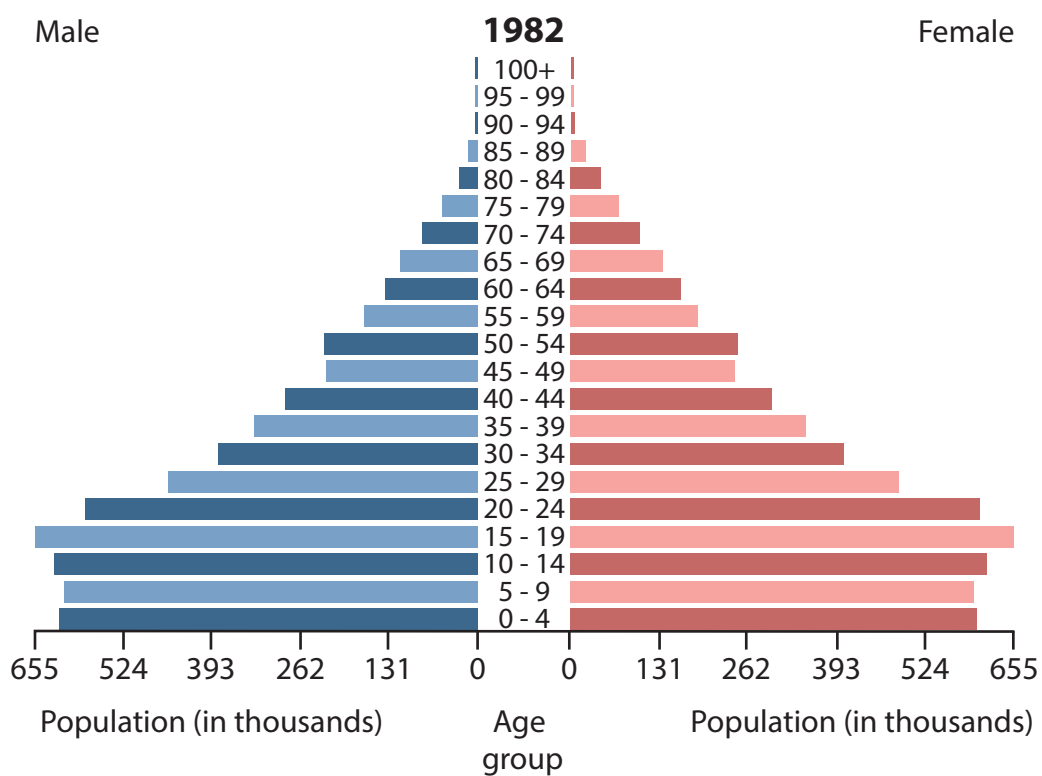


Figure 3
Population pyramids for Chile in 1982 and 2016

The following resource relates to Question 4.



Figure 4

Net internal migration between Chinese provinces from 1990 to 2005

SECTION B

The following resource relates to question 5.

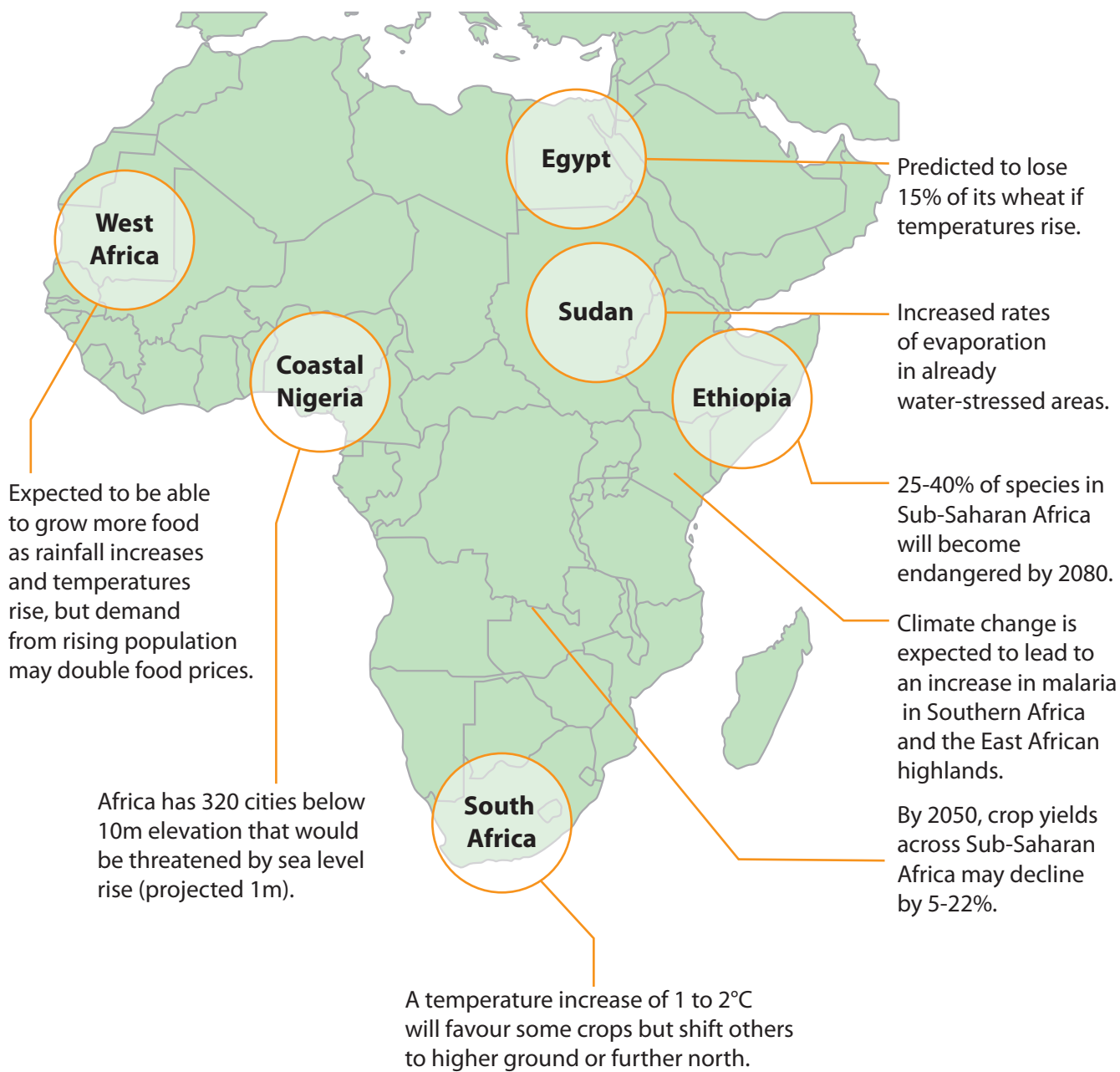
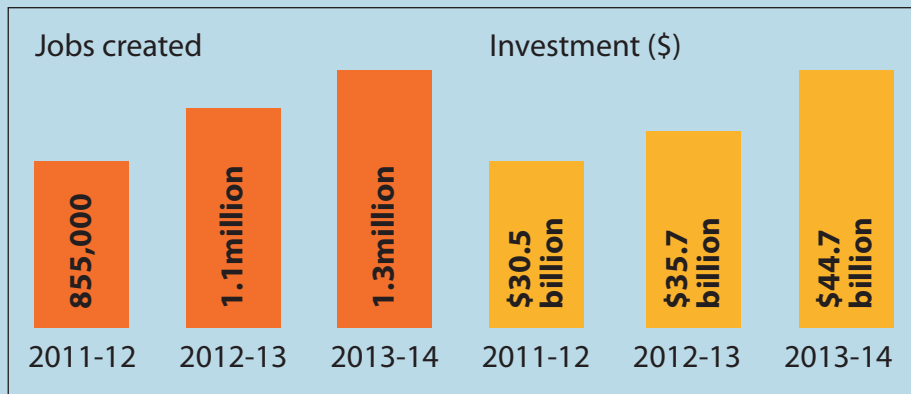


Figure 5

Possible impacts of climate change on Africa if temperatures rise by 2°C

The following resource is for Question 6.

Key facts about SEZs in India



SEZ status in India

565 SEZs
Planning approved

388 SEZs
Under construction

185 SEZs
Open for business

SEZs' share in India's overall exports %

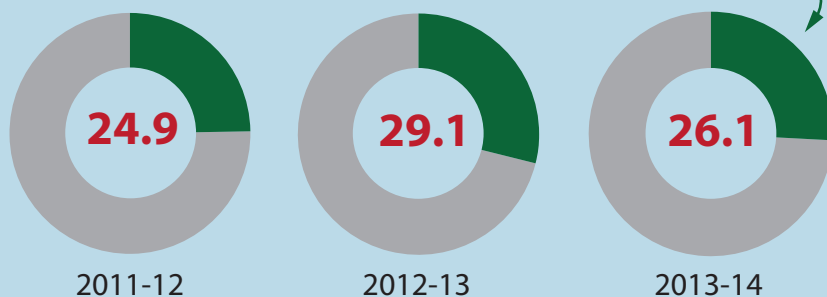


Figure 6

Key facts about Special Economic Zones (SEZs) in India

BLANK PAGE

Figure 2 – Source from: <http://www.earthmagazine.org/sites/earthmagazine.org/files/2016-04/Milankovitch.png>

Figure 3 – Source from: <https://populationpyramid.net/chile/1960/>

Figure 5 – © Guardian News and Media Services

Every effort has been made to contact copyright holders to obtain their permission for the use of copyright material. Pearson Education Ltd. will, if notified, be happy to rectify any errors or omissions and include any such rectifications in future editions.