



UNIVERSITY OF CAMBRIDGE INTERNATIONAL EXAMINATIONS
General Certificate of Education Advanced Subsidiary Level and Advanced Level

GEOGRAPHY

9696/22

Paper 2 Advanced Physical Options

October/November 2009

INSERT 1

1 hour 30 minutes

READ THESE INSTRUCTIONS FIRST

This Insert contains all the Figures and the Table referred to in the questions.

This document consists of **3** printed pages and **1** blank page.



Fig. 1 for Question 2

Data for two types of tropical climate

Fig 1A

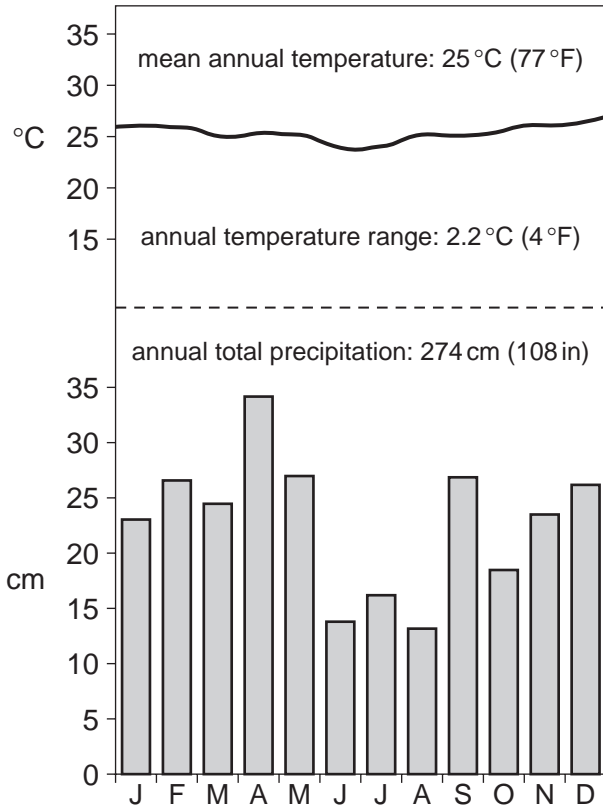


Fig 1B

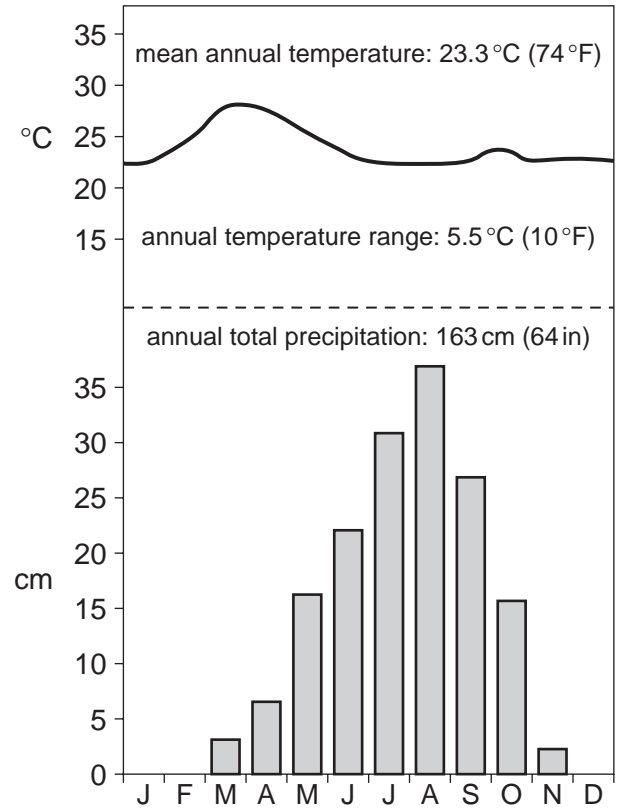


Fig. 2 for Question 4

Movement of water in sea waves

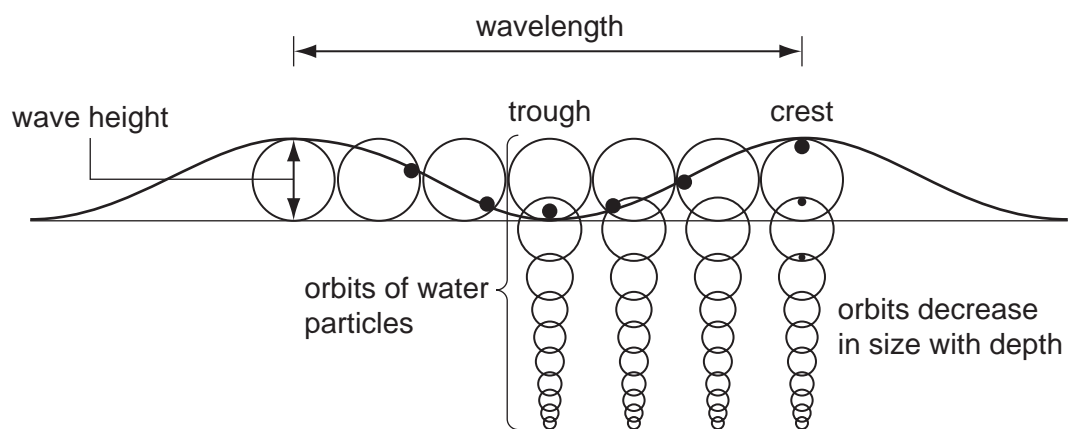


Table 1 for Question 6

Selected major earthquakes 2001–2008

year	location	magnitude (Richter scale)	fatalities
2001	India (Gujarat)	7.7	20 085
2001	Peru (coast)	8.4	75
2002	USA (Alaska)	7.9	0
2002	Algeria (Boumerdes)	6.8	2266
2003	Japan (Hokaido)	8.3	0
2003	USA (California)	6.6	2
2004	Iran (Bam)	6.6	31 000
2004	Indonesia (off coast of Sumatra)	9.3	300 000
2008	China (Sichuan)	8.0	65 000

BLANK PAGE

Permission to reproduce items where third-party owned material protected by copyright is included has been sought and cleared where possible. Every reasonable effort has been made by the publisher (UCLES) to trace copyright holders, but if any items requiring clearance have unwittingly been included, the publisher will be pleased to make amends at the earliest possible opportunity.

University of Cambridge International Examinations is part of the Cambridge Assessment Group. Cambridge Assessment is the brand name of University of Cambridge Local Examinations Syndicate (UCLES), which is itself a department of the University of Cambridge.