



UNIVERSITY OF CAMBRIDGE INTERNATIONAL EXAMINATIONS
General Certificate of Education Advanced Subsidiary Level and Advanced Level

GEOGRAPHY

9696/21

Paper 2 Advanced Physical Options

May/June 2013

INSERT

1 hour 30 minutes

READ THESE INSTRUCTIONS FIRST

This Insert contains all the Figures and the Photographs referred to in the questions.

This document consists of **5** printed pages and **3** blank pages.



2

Photographs A and B for Question 2**Areas of tropical rainforest and savanna vegetation****A Tropical rainforest vegetation****B Savanna vegetation**

Fig. 1 for Question 4

Cartoon showing some threats to coral reefs



Fig. 2 for Question 6

Percentage deaths from different impacts of tropical storms in Bangladesh

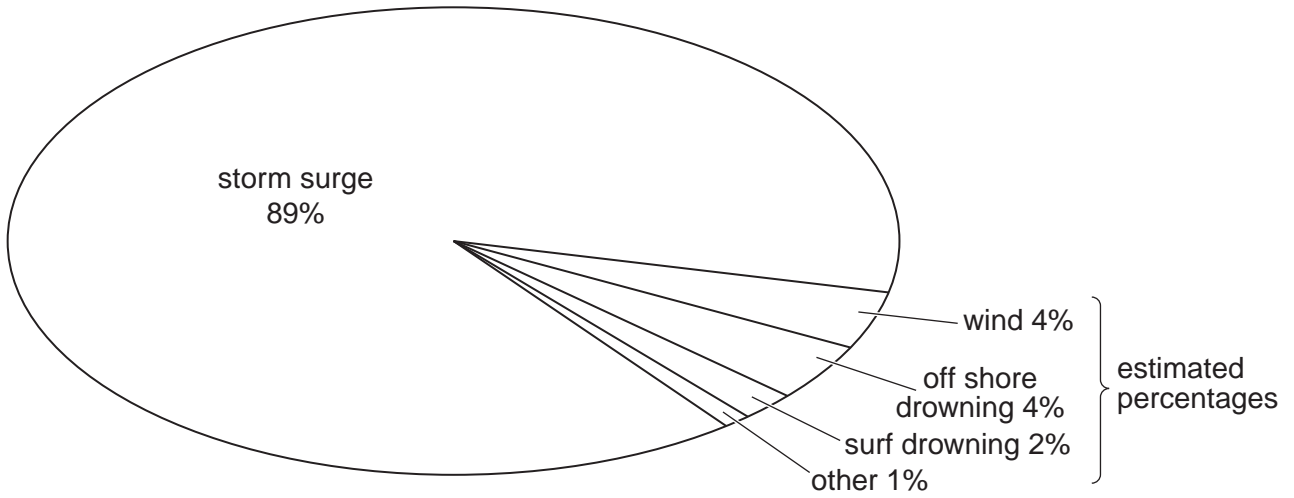


Fig. 3 for Question 6

Map to show the location of Bangladesh

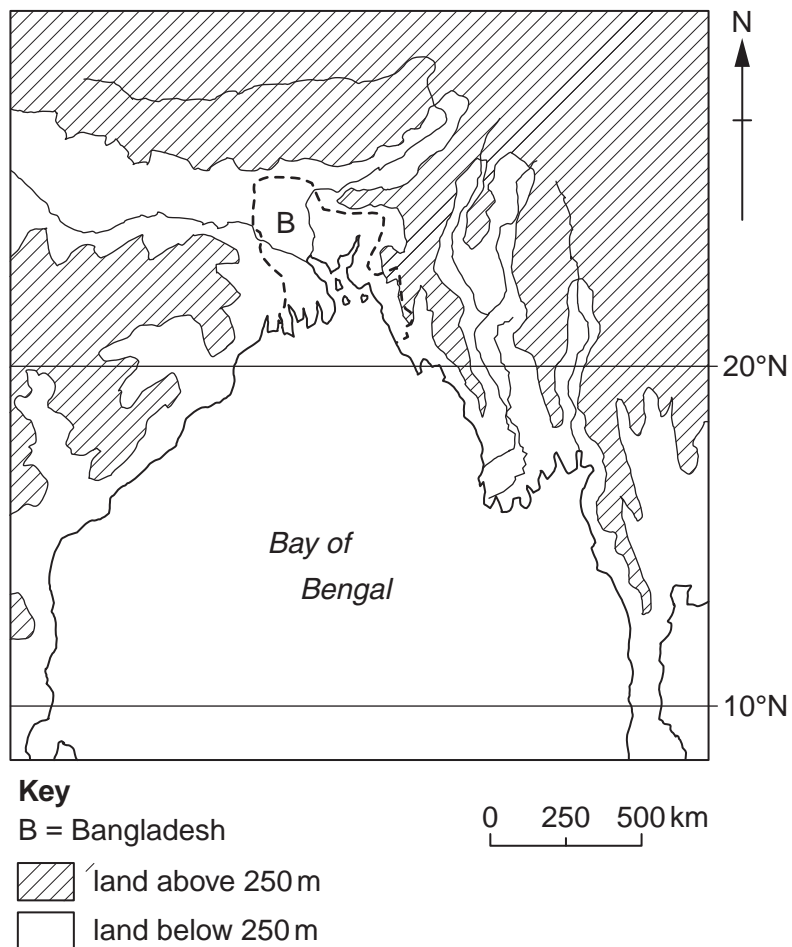
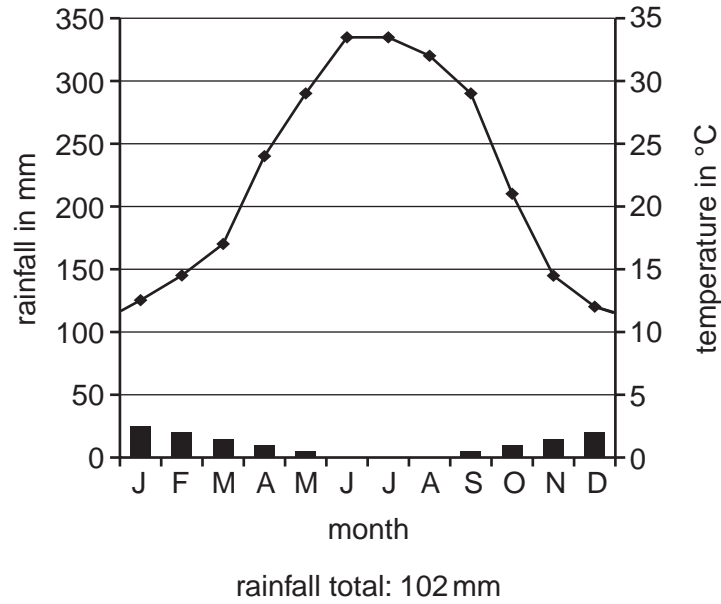


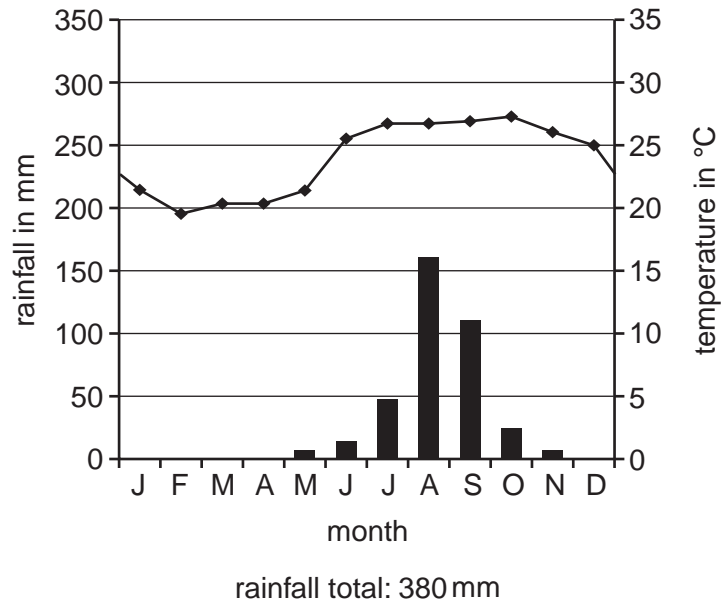
Fig. 4 for Question 8

Climate graphs for a hot arid environment and a semi-arid environment

A Hot arid (Latitude 25° N)



B Semi-arid (Latitude 15° N)



BLANK PAGE

BLANK PAGE

BLANK PAGE

Permission to reproduce items where third-party owned material protected by copyright is included has been sought and cleared where possible. Every reasonable effort has been made by the publisher (UCLES) to trace copyright holders, but if any items requiring clearance have unwittingly been included, the publisher will be pleased to make amends at the earliest possible opportunity.

University of Cambridge International Examinations is part of the Cambridge Assessment Group. Cambridge Assessment is the brand name of University of Cambridge Local Examinations Syndicate (UCLES), which is itself a department of the University of Cambridge.