

Cambridge
International
AS & A Level

Cambridge International Examinations
Cambridge International Advanced Subsidiary and Advanced Level

GEOGRAPHY

9696/13

Paper 1 Core Geography

October/November 2014

INSERT

3 hours

READ THESE INSTRUCTIONS FIRST

This Insert contains all the Figures and the Tables referred to in the questions.



This document consists of **6** printed pages and **2** blank pages.

Fig. 1 for Question 1

Storm hydrographs for a drainage basin before and after deforestation

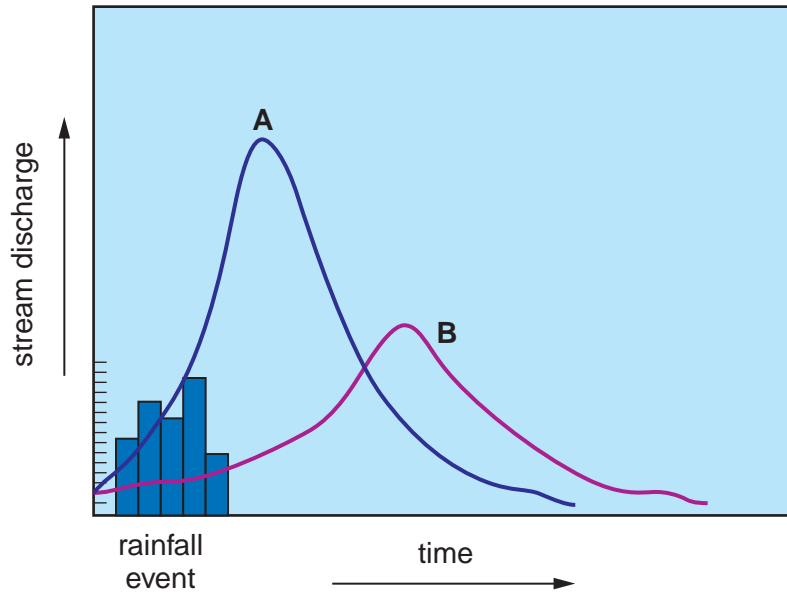


Fig. 2 for Question 2

Night time temperatures for the city of Sydney, Australia, on 6 February 2009

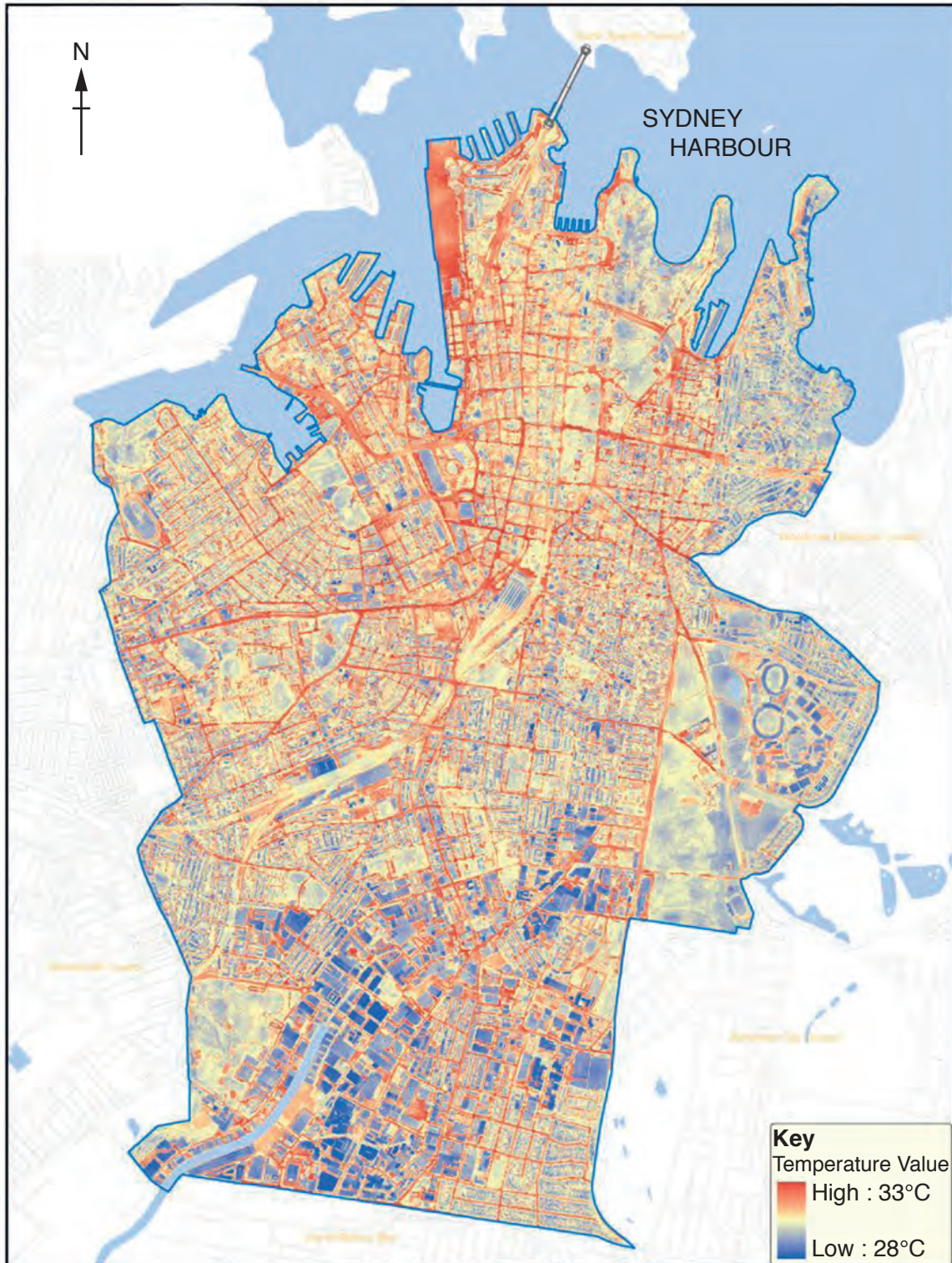
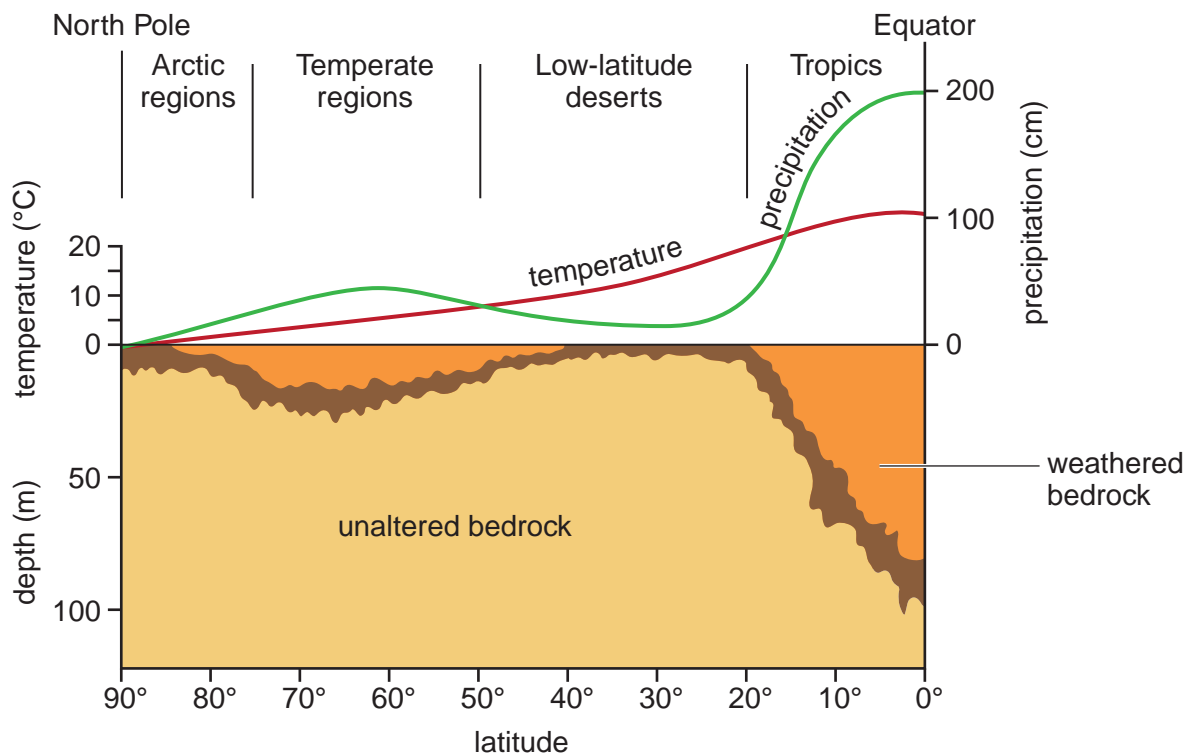


Fig. 3 for Question 3

Variation of temperature, precipitation and depth of weathering with latitude



Tables 1A and 1B for Question 4

The birth rates and death rates for selected countries in Western Europe and East Africa, 2010

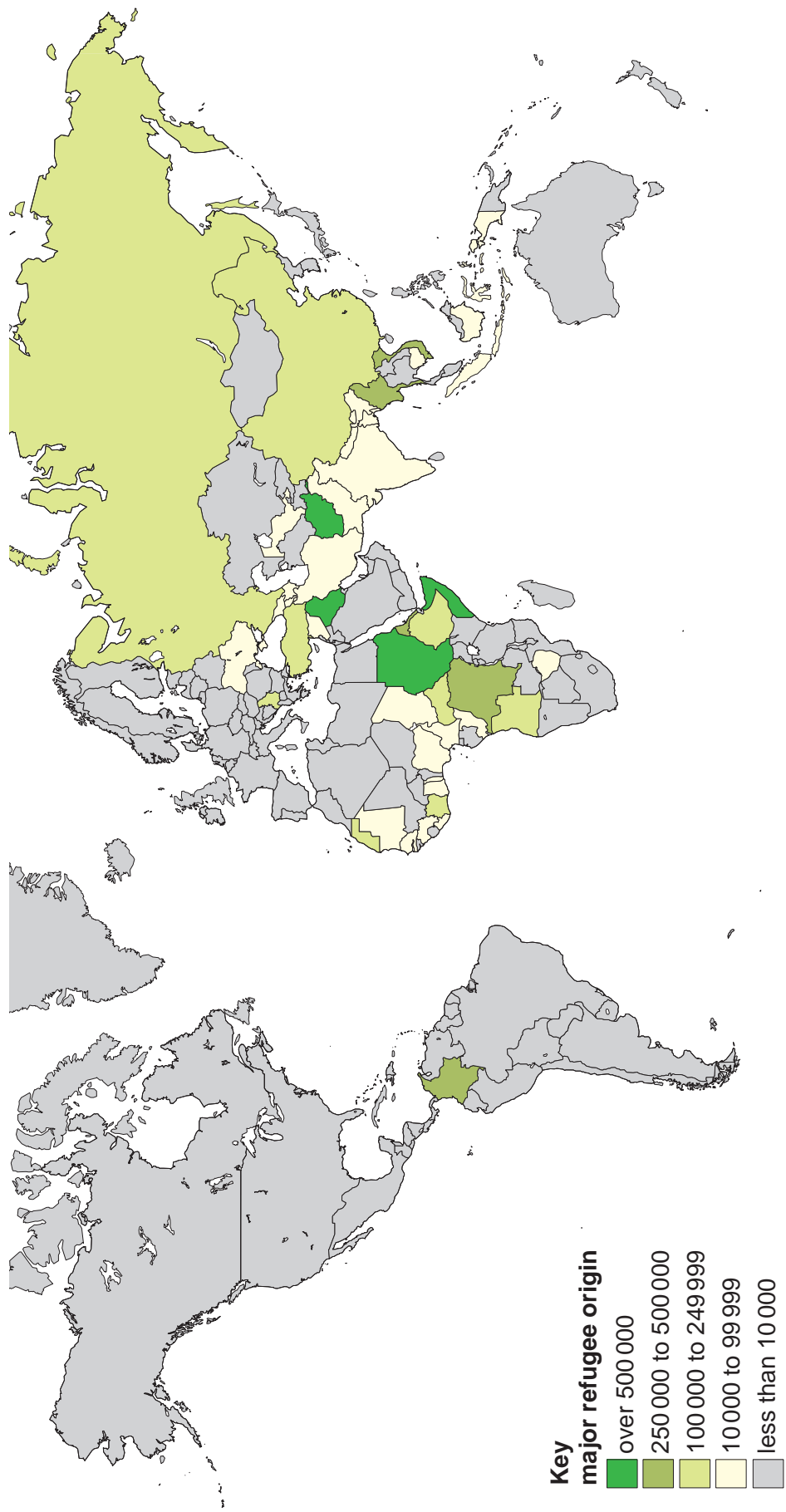
Table 1A Western Europe

country	birth rate (per 1000)	death rate (per 1000)
Belgium	11.4	10.3
Germany	8.7	10.9
Italy	9.1	10.2
Portugal	8.8	10.1

Table 1B East Africa

country	birth rate (per 1000)	death rate (per 1000)
Malawi	44.5	11.9
Tanzania	41.0	9.6
Uganda	43.9	11.7
Zambia	46.5	14.9

Fig. 4 for Question 5
Main source countries of refugees in 2011



Figs 5A and 5B for Question 6

Percentages of rural and urban populations for Nigeria and Burkina Faso, 1970 to 2050

Fig. 5A Nigeria

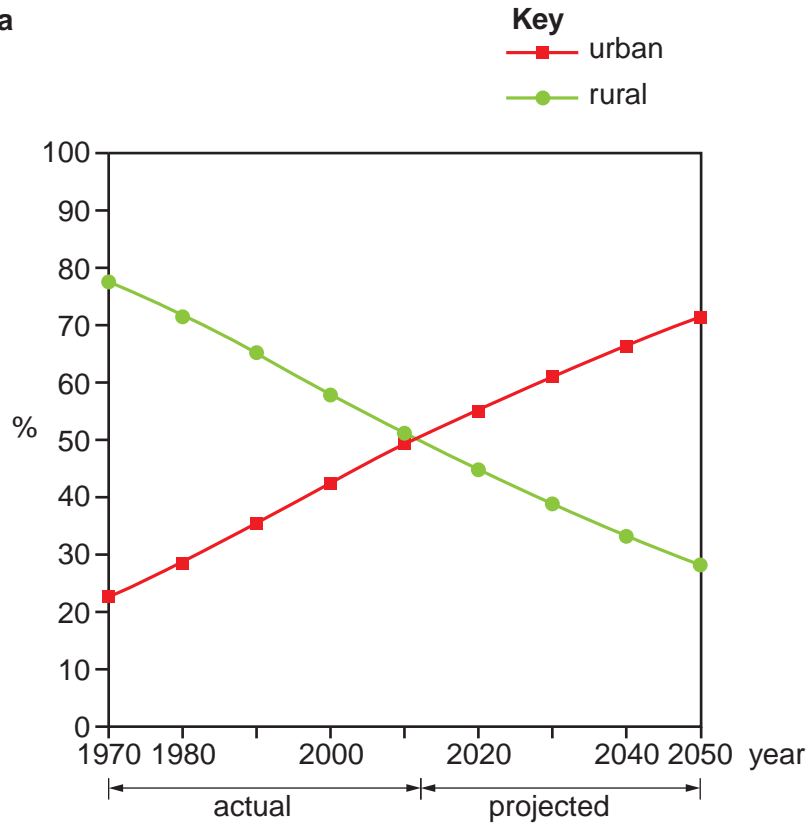
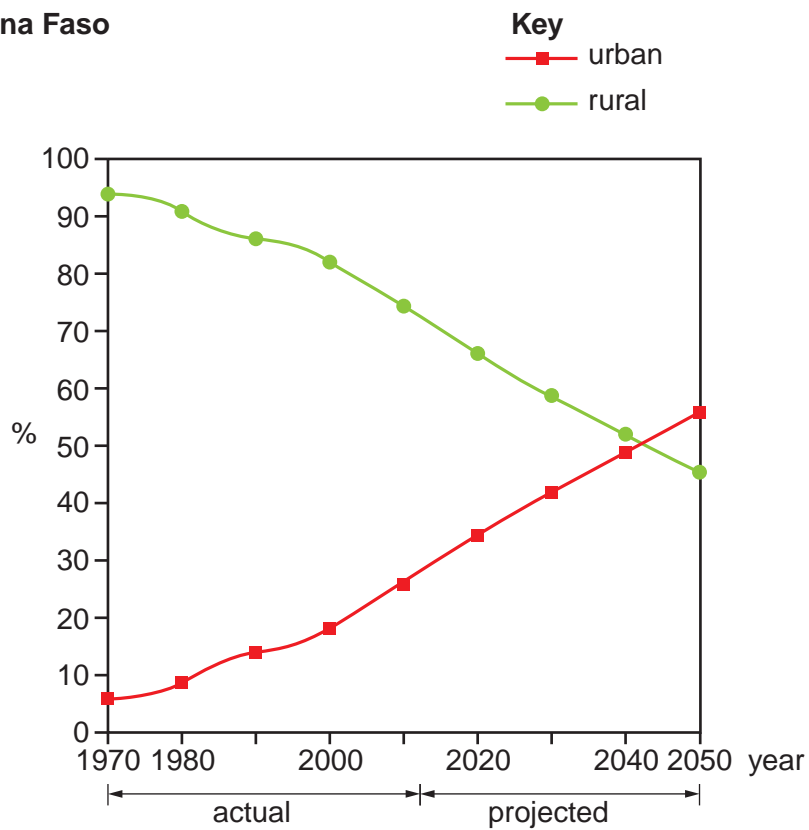


Fig. 5B Burkina Faso



BLANK PAGE

BLANK PAGE

Copyright Acknowledgements:

Question 2 Fig. 2	© City of Sydney Council; http://www.cityofsydney.nsw.gov.au/vision/sustainability/sustainable-city-living/urban-heat-island .
Question 3 Fig. 3	© http://www.geol.umd.edu/~piccoli/100/Image78.jpg .
Question 4 Tables 1A & 1B	© United Nations; www.un.org/esa/population/unpop.htm .
Question 5 Fig. 4	© UNHCR; http://www.unhcr.org/4fd6f87f9.html .
Question 6 Figs 5A & 5B	© United Nations; www.un.org/esa/population/unpop.htm .

Permission to reproduce items where third-party owned material protected by copyright is included has been sought and cleared where possible. Every reasonable effort has been made by the publisher (UCLES) to trace copyright holders, but if any items requiring clearance have unwittingly been included, the publisher will be pleased to make amends at the earliest possible opportunity.

Cambridge International Examinations is part of the Cambridge Assessment Group. Cambridge Assessment is the brand name of University of Cambridge Local Examinations Syndicate (UCLES), which is itself a department of the University of Cambridge.