



UNIVERSITY OF CAMBRIDGE INTERNATIONAL EXAMINATIONS  
General Certificate of Education Advanced Subsidiary Level and Advanced Level

---

**GEOGRAPHY**

**9696/11**

Paper 1 Core Geography

**October/November 2013**

INSERT

**3 hours**

---

**READ THESE INSTRUCTIONS FIRST**

This Insert contains all the Figures and the Photographs referred to in the questions.

---

This document consists of **7** printed pages and **1** blank page.



Fig. 1 for Question 1

A cross-section of a meandering river channel

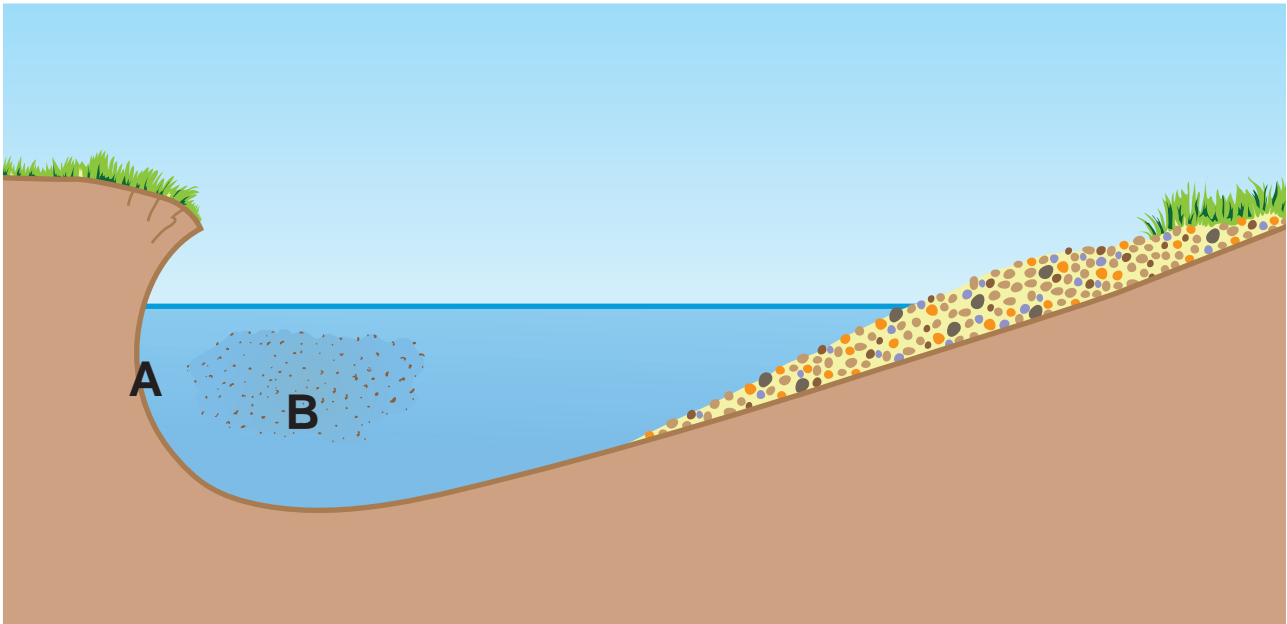
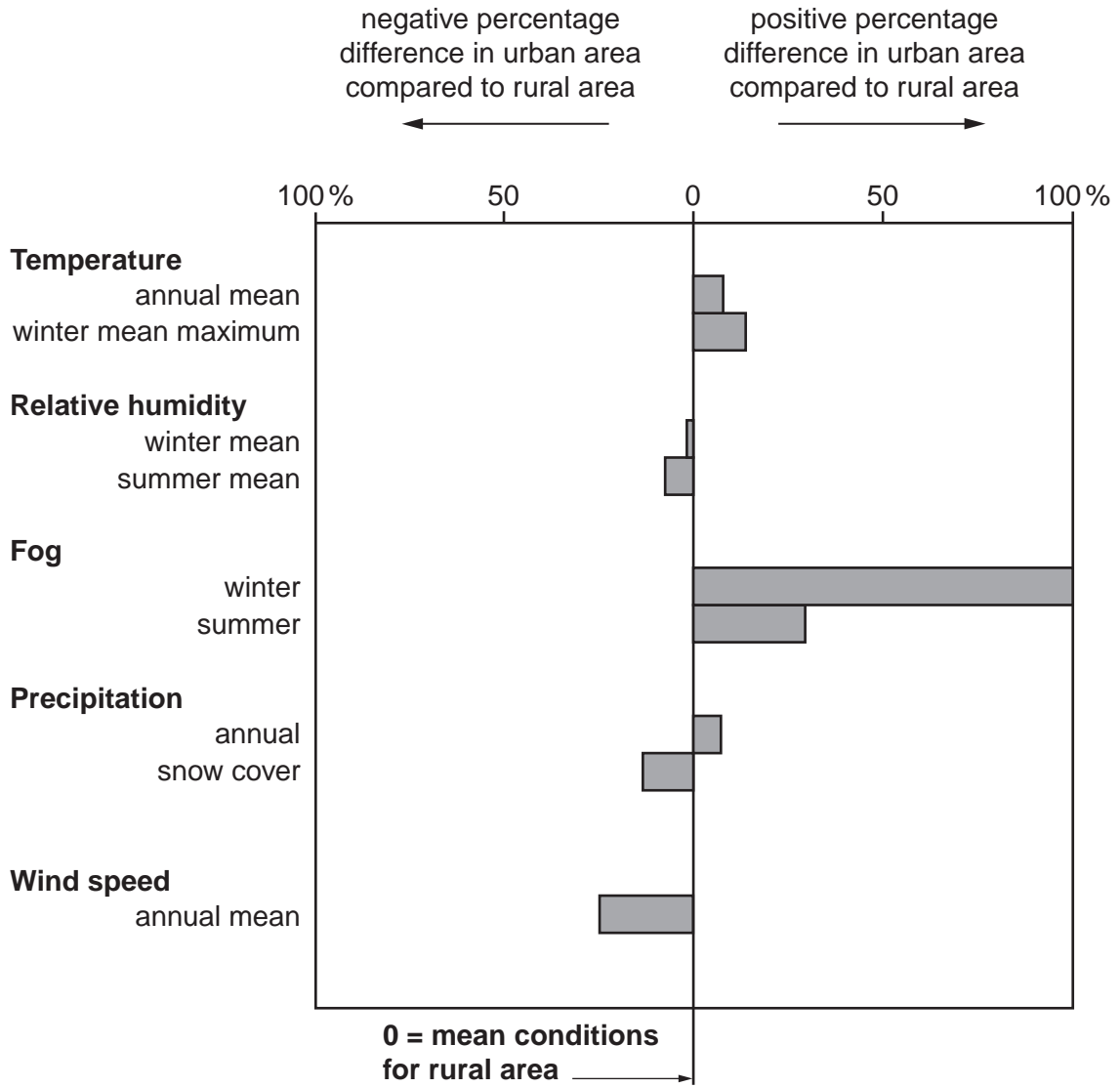


Fig. 2 for Question 2

Weather differences between a large urban area and a nearby rural area



4

## Photograph A for Question 3

## Mass movement in East Yorkshire, UK



Fig. 3 for Question 4

Fertility rate and GDP per person, 2007

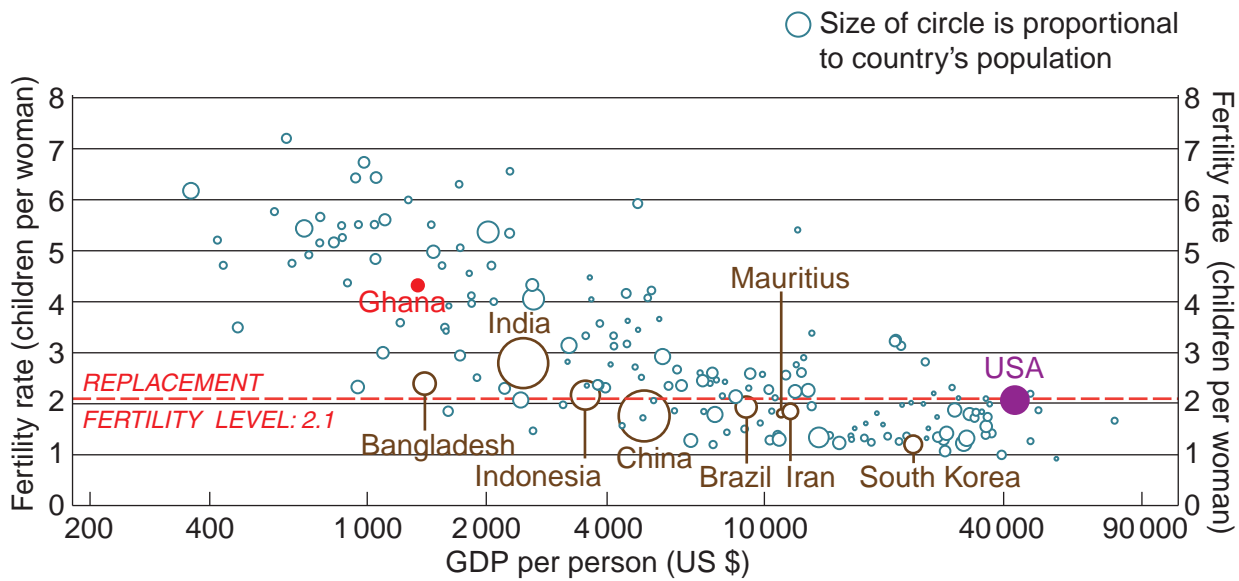


Fig. 4 for Question 5

## Top 10 source countries of refugees, 2006



## Key

**Vietnam** source country  
370 000 estimated number of refugees



Photograph B for Question 6

Part of Rio de Janeiro, Brazil, an NIC in South America



**BLANK PAGE**

---

Permission to reproduce items where third-party owned material protected by copyright is included has been sought and cleared where possible. Every reasonable effort has been made by the publisher (UCLES) to trace copyright holders, but if any items requiring clearance have unwittingly been included, the publisher will be pleased to make amends at the earliest possible opportunity.

University of Cambridge International Examinations is part of the Cambridge Assessment Group. Cambridge Assessment is the brand name of University of Cambridge Local Examinations Syndicate (UCLES), which is itself a department of the University of Cambridge.