

Cambridge
International
AS & A Level

Cambridge International Examinations
Cambridge International Advanced Subsidiary and Advanced Level

GEOGRAPHY

9696/23

Paper 2 Advanced Physical Options

October/November 2014

INSERT

1 hour 30 minutes

READ THESE INSTRUCTIONS FIRST

This Insert contains all the Figures and the Photograph referred to in the questions.



This document consists of **5** printed pages and **3** blank pages.

2

Fig. 1 for Question 1

Outline soil profiles

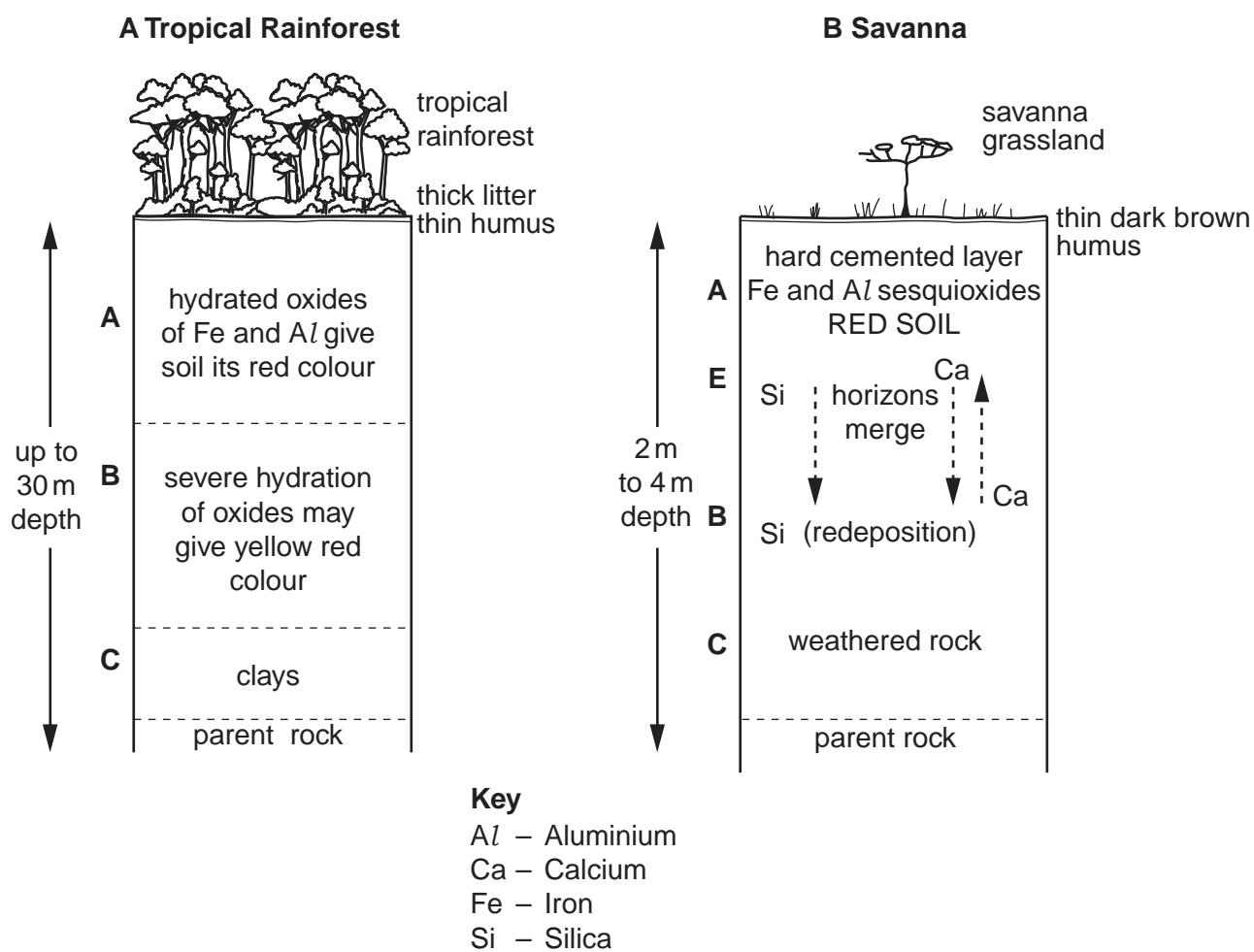
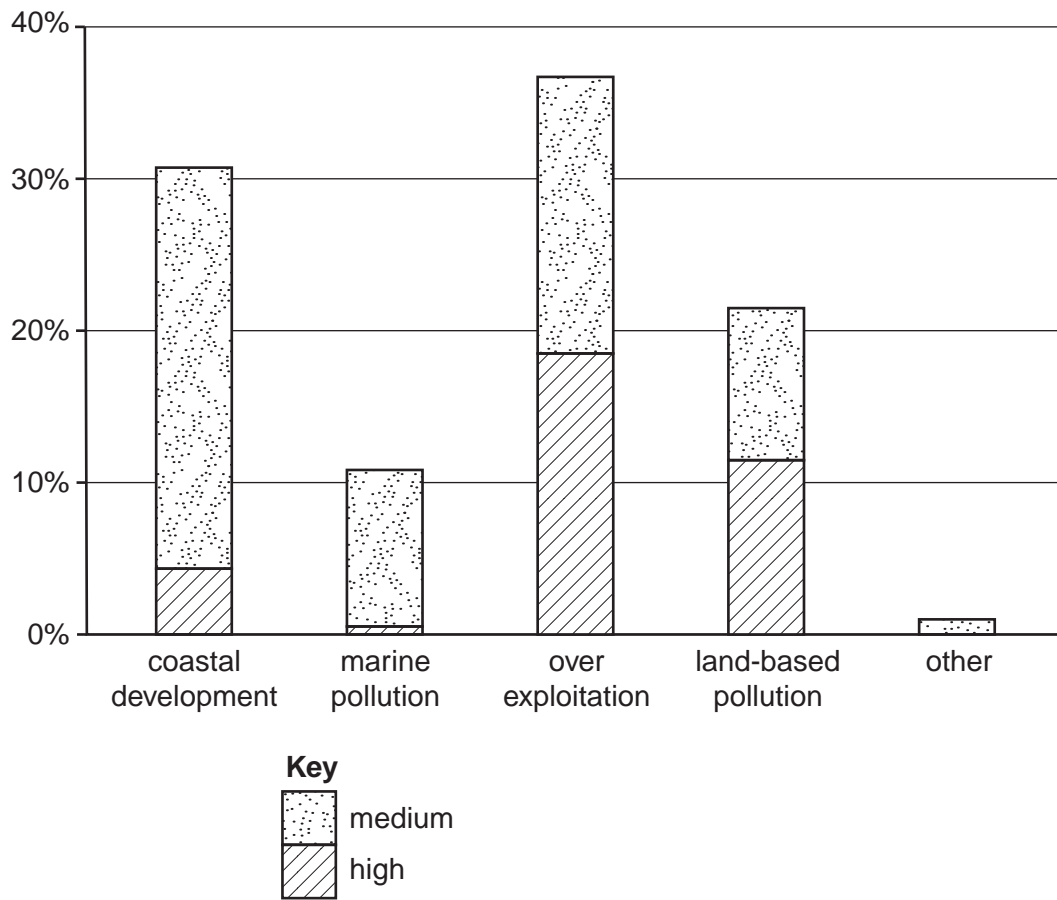


Fig. 2 for Question 4

Percentage of coral reefs threatened by changes to the conditions necessary for coral growth



4


Photograph A for Question 6**Satellite image of a tropical storm, 'hurricane Ivan'**

Fig. 3 for Question 7

Main hot semi-arid environments of the world



BLANK PAGE

BLANK PAGE

BLANK PAGE

Copyright Acknowledgements:

Question 6 Photograph A © <http://environment.nationalgeographic.com/environment/natural-disasters/hurricane-profile/>
Question 7 Fig. 3 © M.C. Peel, B.L. Finlayson & T. A. McMahon; Koppen_World_Map_Hi-Res.png.

Permission to reproduce items where third-party owned material protected by copyright is included has been sought and cleared where possible. Every reasonable effort has been made by the publisher (UCLES) to trace copyright holders, but if any items requiring clearance have unwittingly been included, the publisher will be pleased to make amends at the earliest possible opportunity.

Cambridge International Examinations is part of the Cambridge Assessment Group. Cambridge Assessment is the brand name of University of Cambridge Local Examinations Syndicate (UCLES), which is itself a department of the University of Cambridge.