

Cambridge
International
AS & A Level

Cambridge International Examinations
Cambridge International Advanced Subsidiary and Advanced Level

GEOGRAPHY

9696/23

Paper 2 Advanced Physical Options

May/June 2016

INSERT

1 hour 30 minutes

READ THESE INSTRUCTIONS FIRST

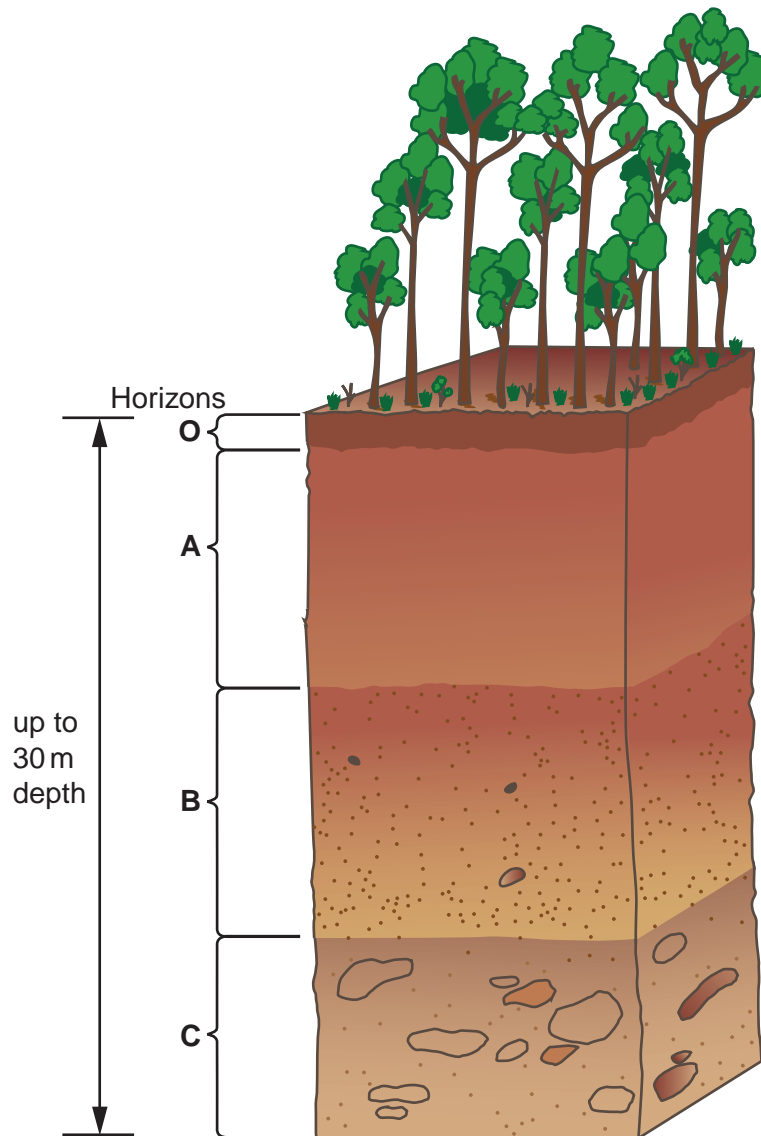
This Insert contains all the Figures and the Photograph referred to in the questions.



This document consists of **5** printed pages and **3** blank pages.

Fig. 1 for Question 2

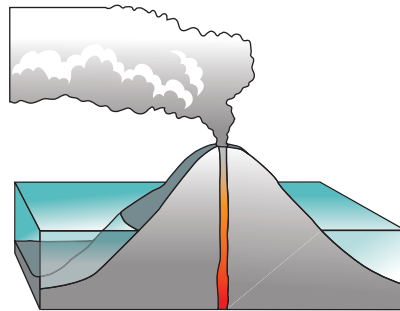
A soil profile of a latosol



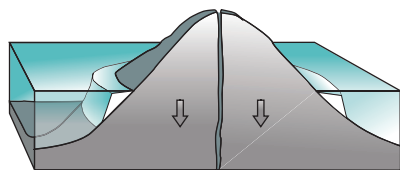
3

Fig. 2 for Question 3

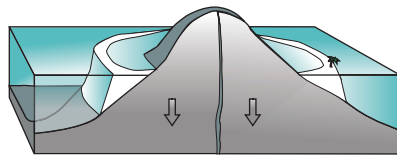
A theory of atoll formation



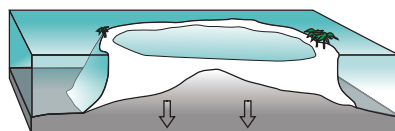
Stage 1



Stage 2



Stage 3



Stage 4

Photograph A for Question 5

A snow avalanche


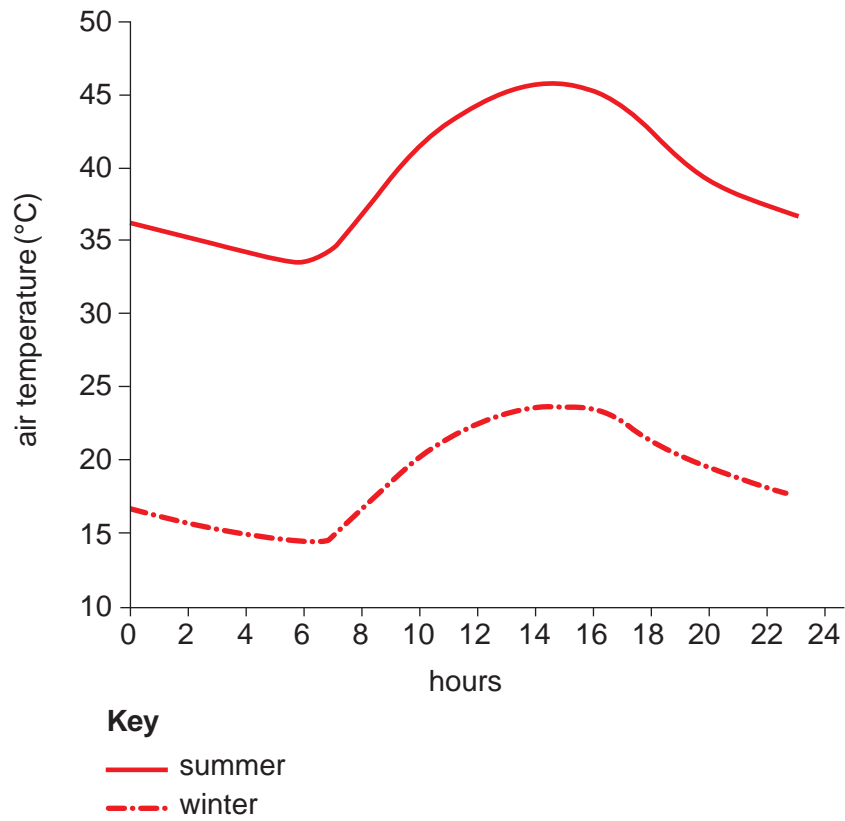


Fig. 3 for Question 7

Diurnal temperatures for winter and summer, Al Ahsa Oasis, Saudi Arabia



BLANK PAGE

BLANK PAGE

BLANK PAGE

Permission to reproduce items where third-party owned material protected by copyright is included has been sought and cleared where possible. Every reasonable effort has been made by the publisher (UCLES) to trace copyright holders, but if any items requiring clearance have unwittingly been included, the publisher will be pleased to make amends at the earliest possible opportunity.

To avoid the issue of disclosure of answer-related information to candidates, all copyright acknowledgements are reproduced online in the Cambridge International Examinations Copyright Acknowledgements Booklet. This is produced for each series of examinations and is freely available to download at www.cie.org.uk after the live examination series.

Cambridge International Examinations is part of the Cambridge Assessment Group. Cambridge Assessment is the brand name of University of Cambridge Local Examinations Syndicate (UCLES), which is itself a department of the University of Cambridge.