

Cambridge  
International  
AS & A Level

**Cambridge International Examinations**  
Cambridge International Advanced Subsidiary and Advanced Level

---

**GEOGRAPHY**

**9696/21**

Paper 2 Advanced Physical Options

**May/June 2016**

INSERT

**1 hour 30 minutes**

---

**READ THESE INSTRUCTIONS FIRST**

This Insert contains all the Figures and the Photograph referred to in the questions.



---

This document consists of **5** printed pages and **3** blank pages.

Fig. 1 for Question 2

Annotated Gersmehl diagram for a tropical rainforest

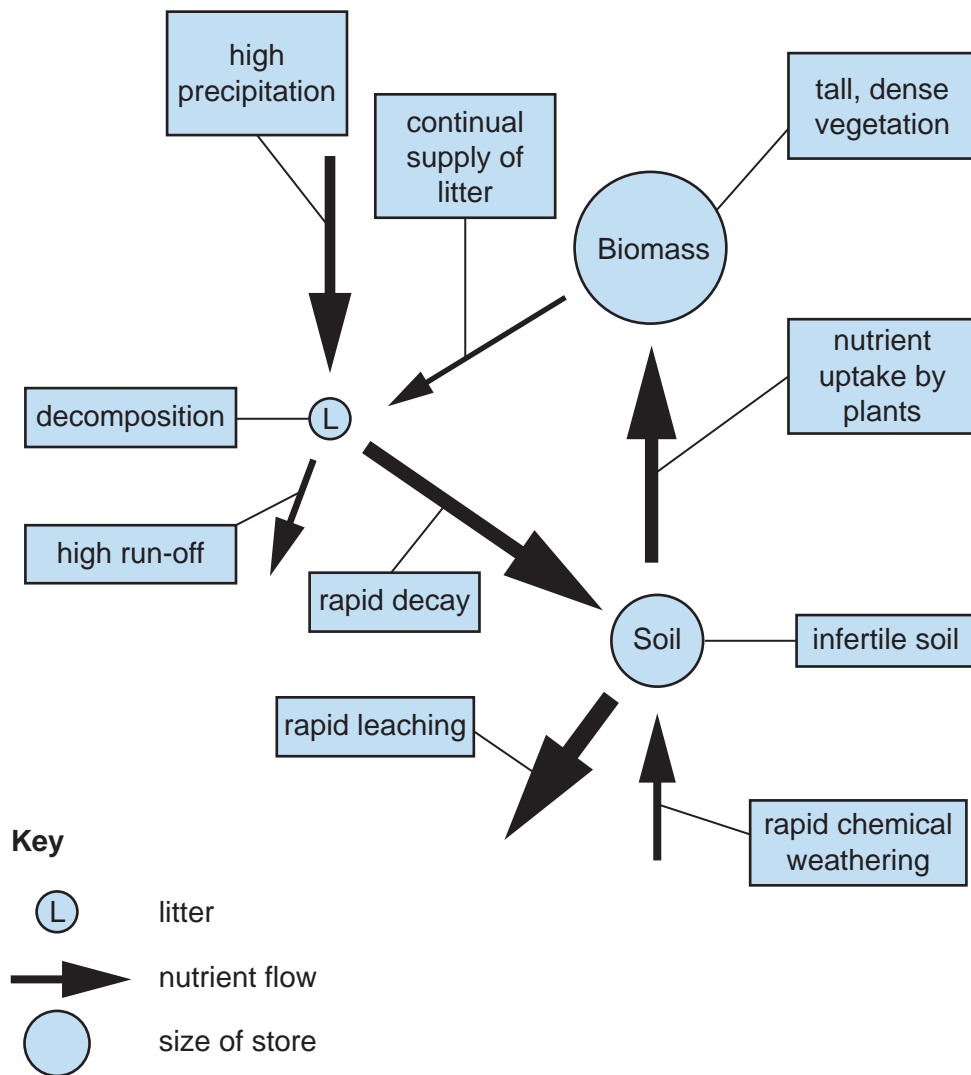
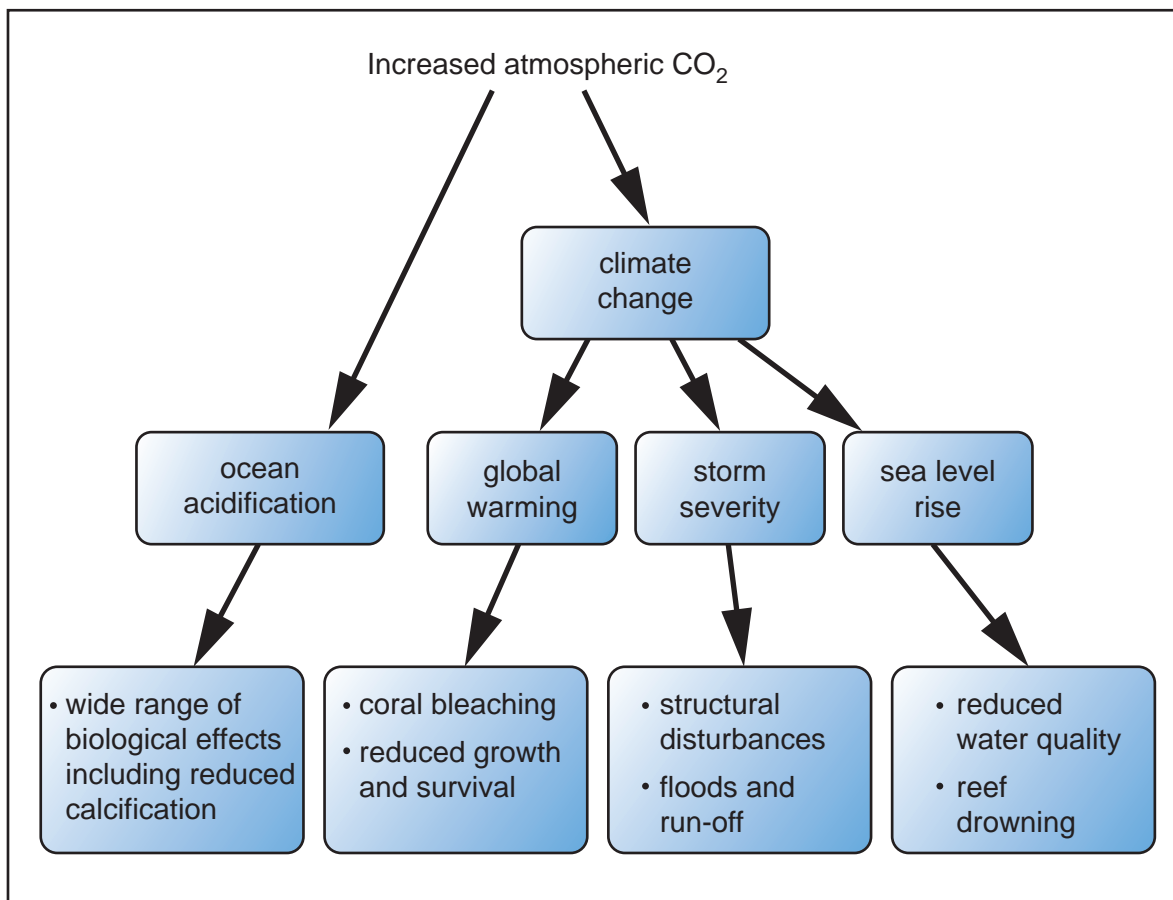


Fig. 2 for Question 3

## Threats from ocean acidification and climate change and possible impacts on coral reefs



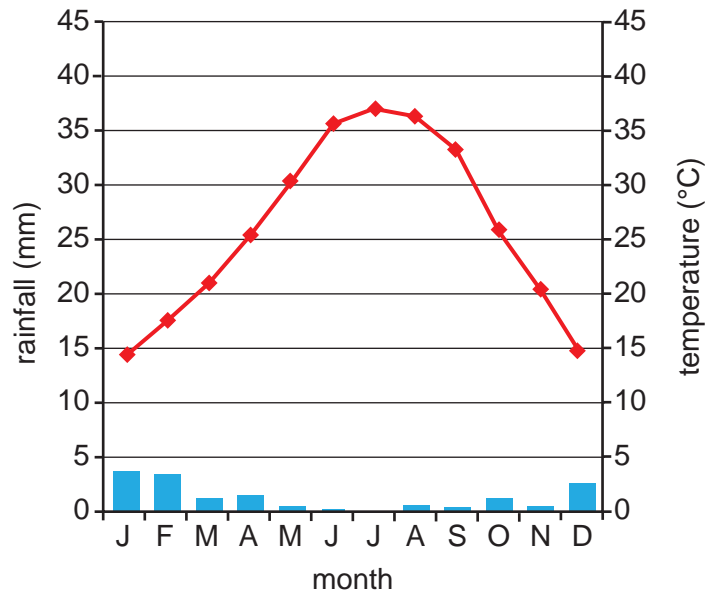
## Photograph A for Question 5

Some effects of tropical storm (cyclone) Sidr in Bangladesh, November 2007



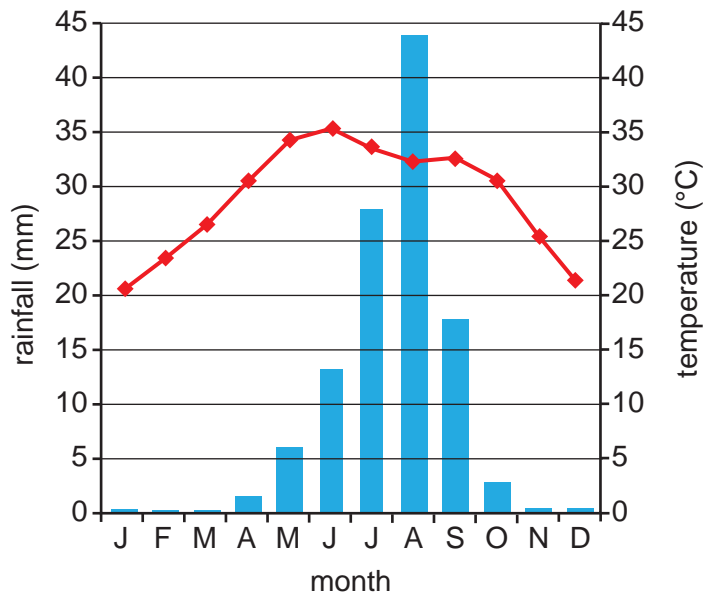
Fig. 3 for Question 7

Fig. 3A Climate graph for a hot arid environment



In Salah, Algeria (Latitude 27.2°N, 269m altitude, annual rainfall total 16 mm)

Fig. 3B Climate graph for a semi-arid environment



Kidal, Mali (Latitude 18.5°N, 459m altitude, annual rainfall total 114 mm)

**BLANK PAGE**

**BLANK PAGE**

**BLANK PAGE**

---

Permission to reproduce items where third-party owned material protected by copyright is included has been sought and cleared where possible. Every reasonable effort has been made by the publisher (UCLES) to trace copyright holders, but if any items requiring clearance have unwittingly been included, the publisher will be pleased to make amends at the earliest possible opportunity.

To avoid the issue of disclosure of answer-related information to candidates, all copyright acknowledgements are reproduced online in the Cambridge International Examinations Copyright Acknowledgements Booklet. This is produced for each series of examinations and is freely available to download at [www.cie.org.uk](http://www.cie.org.uk) after the live examination series.

Cambridge International Examinations is part of the Cambridge Assessment Group. Cambridge Assessment is the brand name of University of Cambridge Local Examinations Syndicate (UCLES), which is itself a department of the University of Cambridge.