

Cambridge
International
AS & A Level

Cambridge International Examinations
Cambridge International Advanced Subsidiary and Advanced Level

GEOGRAPHY

9696/13

Paper 1 Core Geography

May/June 2016

INSERT

3 hours

READ THESE INSTRUCTIONS FIRST

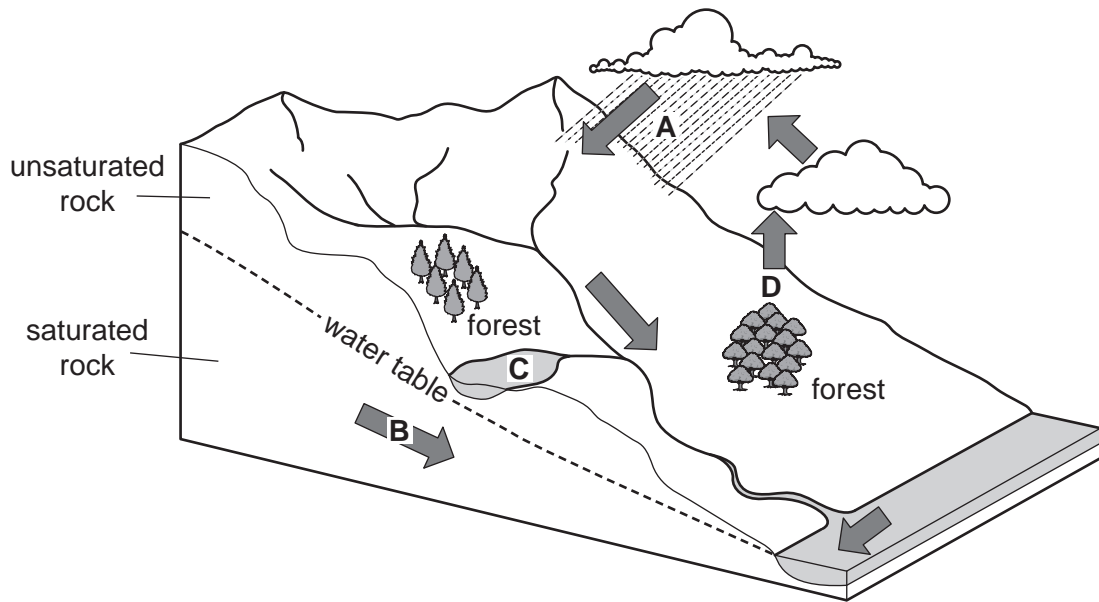
This Insert contains all the Figures and the Photograph referred to in the questions.



This document consists of **7** printed pages and **1** blank page.

Fig. 1 for Question 1

The hydrological cycle



3

Photograph A for Question 2

Early morning mist in a valley



Fig. 2 for Question 3

Types of mass movement

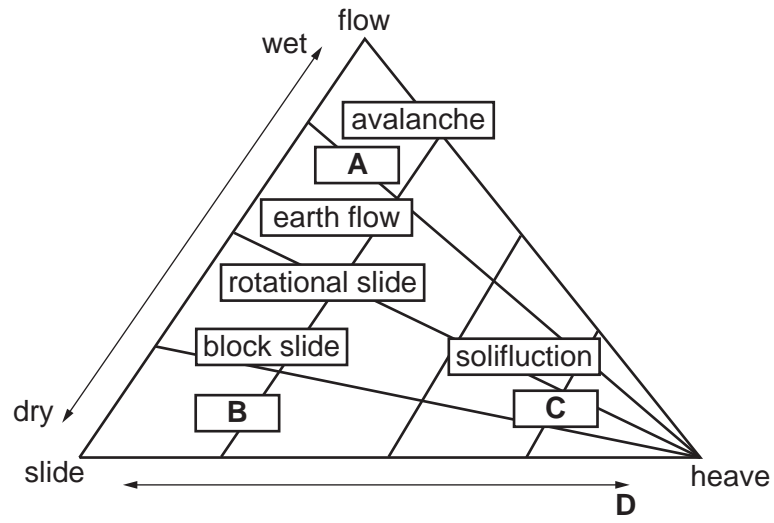


Fig. 3 for Question 4

A simplified age/sex pyramid for an MEDC, 2013

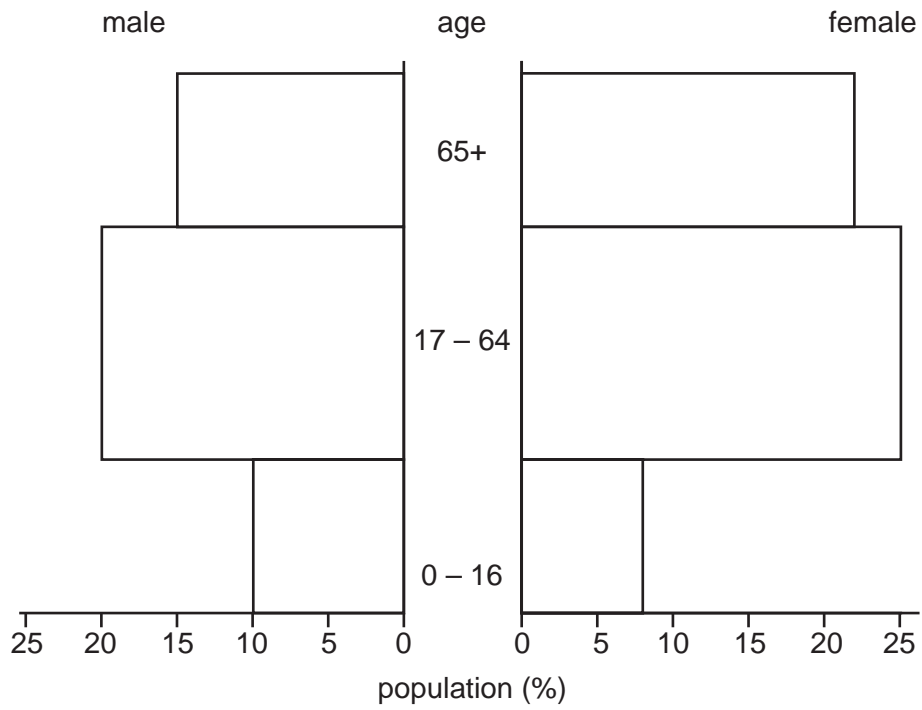
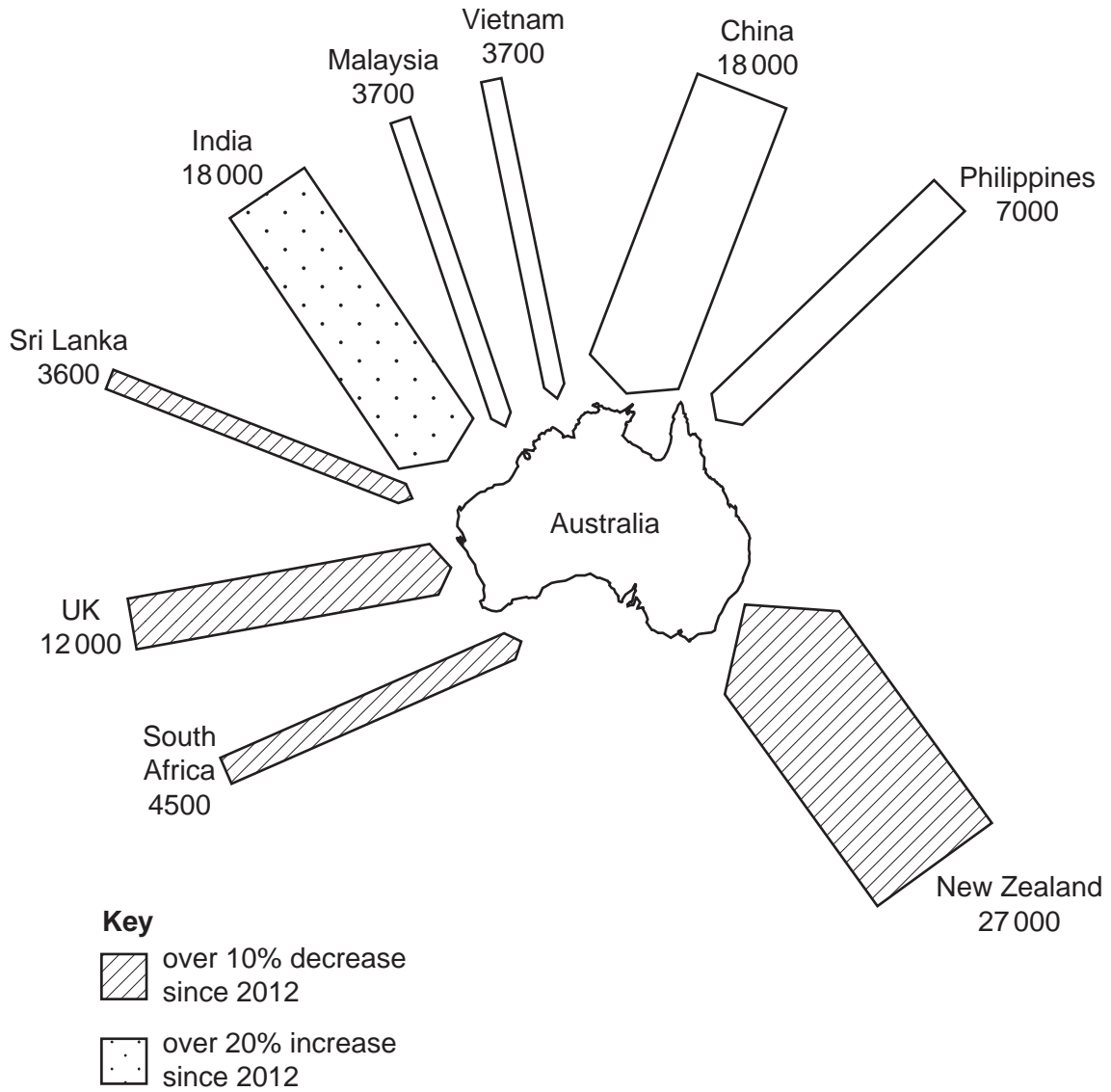


Fig. 4 for Question 5

The main origins of international migrants into Australia, an MEDC, 2013

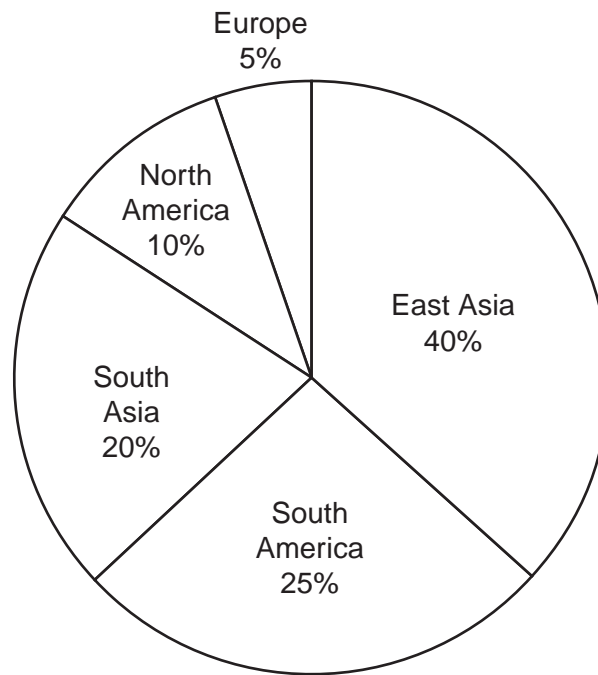


Width of arrow is proportional to number of migrants.

7

Fig. 5 for Question 6

Location of the top 20 world cities with most high-rise buildings, 2013



High-rise buildings are buildings with more than 12 storeys.

BLANK PAGE

Permission to reproduce items where third-party owned material protected by copyright is included has been sought and cleared where possible. Every reasonable effort has been made by the publisher (UCLES) to trace copyright holders, but if any items requiring clearance have unwittingly been included, the publisher will be pleased to make amends at the earliest possible opportunity.

To avoid the issue of disclosure of answer-related information to candidates, all copyright acknowledgements are reproduced online in the Cambridge International Examinations Copyright Acknowledgements Booklet. This is produced for each series of examinations and is freely available to download at www.cie.org.uk after the live examination series.

Cambridge International Examinations is part of the Cambridge Assessment Group. Cambridge Assessment is the brand name of University of Cambridge Local Examinations Syndicate (UCLES), which is itself a department of the University of Cambridge.