



UNIVERSITY OF CAMBRIDGE INTERNATIONAL EXAMINATIONS
General Certificate of Education Advanced Subsidiary Level and Advanced Level

GEOGRAPHY

9696/01

Paper 1 Core Geography

May/June 2009

INSERT

3 hours

READ THESE INSTRUCTIONS FIRST

This Insert contains all the Figures referred to in the questions.

This document consists of **6** printed pages and **2** blank pages.



Fig. 1 for Question 1

Transportation of sediment within a river channel

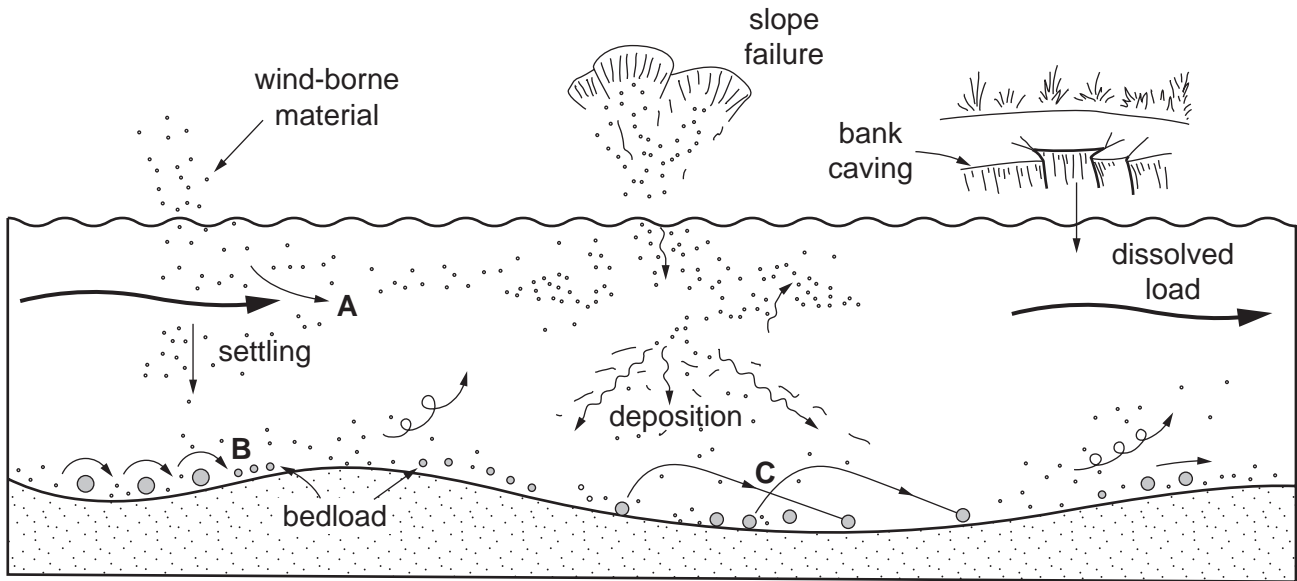
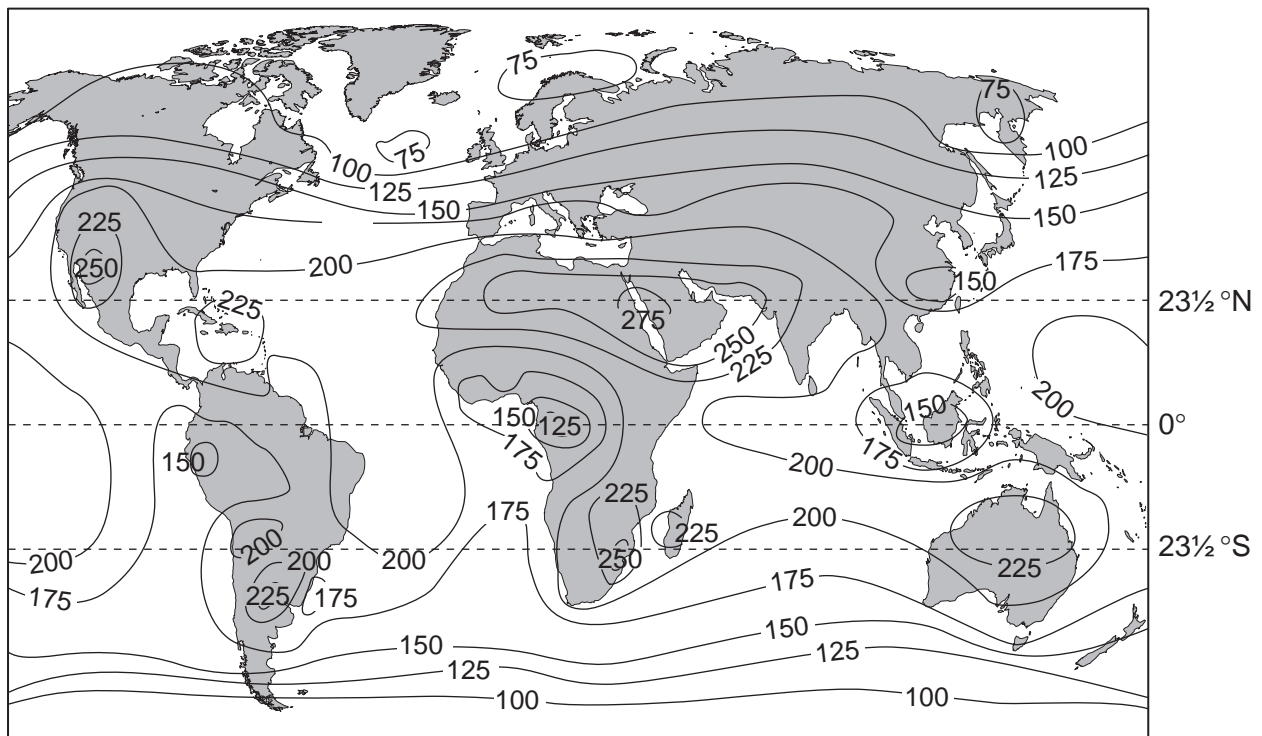


Fig. 2 for Question 2

Incoming solar radiation (insolation) at the earth's surface



The higher the insolation value, the greater the average annual solar radiation. Insolation values as measured on a horizontal surface at ground level in watts/m².

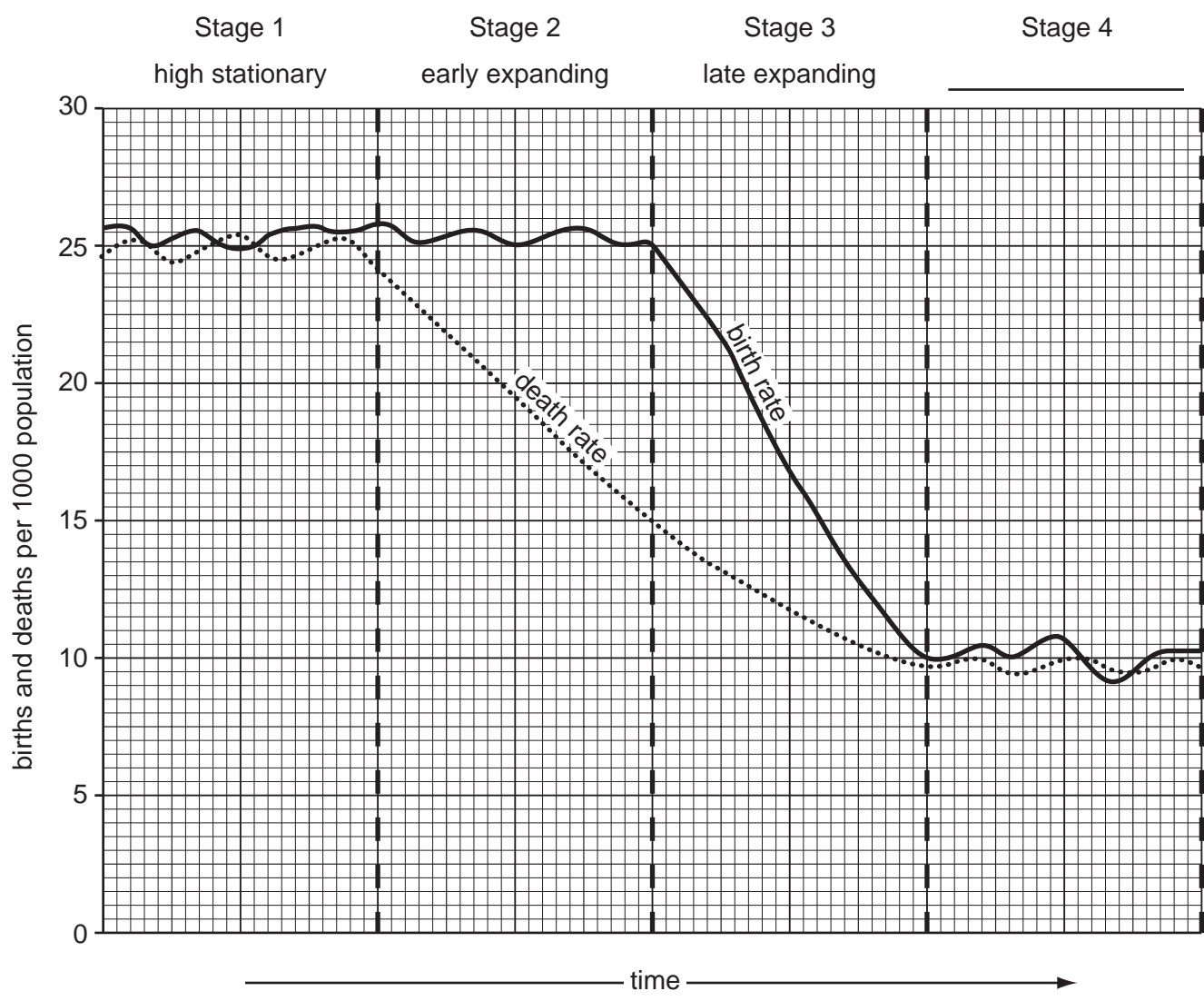
CANDIDATE NAME

CENTRE NUMBER

CANDIDATE NUMBER

Fig. 3 for Question 3

The demographic transition model



BLANK PAGE

Fig. 4 for Question 4

Newspaper cutting about migrants to the UK granted citizenship

NEWS
THE TIMES WEDNESDAY MAY 18 2005

140,000 new citizens

By Richard Ford
Home Correspondent

A RECORD number of migrants were given a British passport in 2004 bringing the overall number given citizenship since 1997 to more than 700,000.

Tony McNulty, the Immigration Minister, said: "The citizenship figures show that many people who have settled in the UK want to make a commitment to UK society."

AREA OF PREVIOUS NATIONALITY

Area of Previous Nationality	Percentage
Africa	32%
Indian sub-continent	24%
Europe outside EU	11%
Rest of Asia	12%
Americas	9%
Middle East	5%
Oceania	3%
EU	2%
Other	2%

AGE OF PEOPLE GRANTED CITIZENSHIP

Age Group	Percentage
Under 16	19%
16-24	11%
25-34	29%
35-44	24%
45-59	13%
60 and over	4%

Fig. 5 for Question 5

Planned layout of the central area of Portland, Oregon, USA

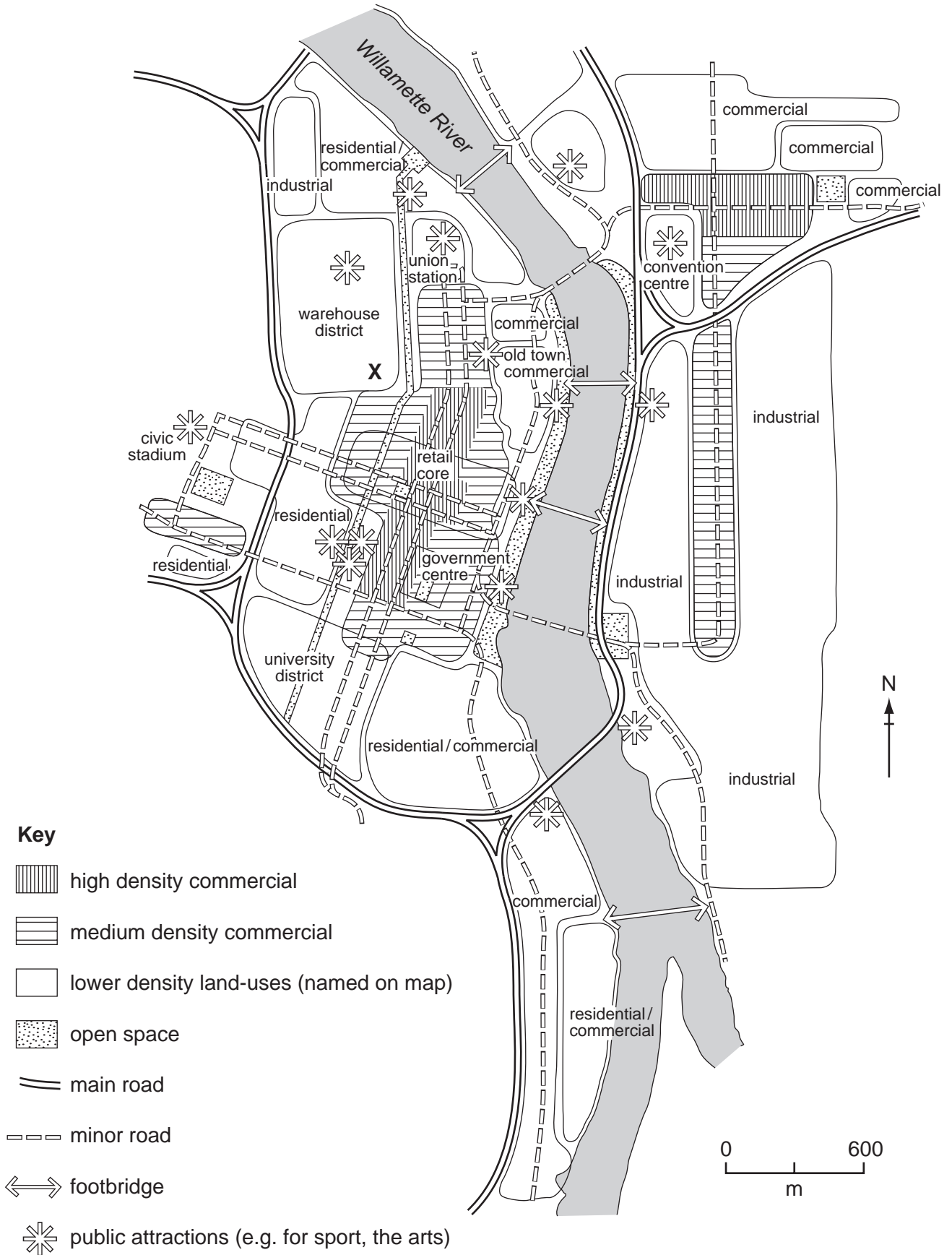
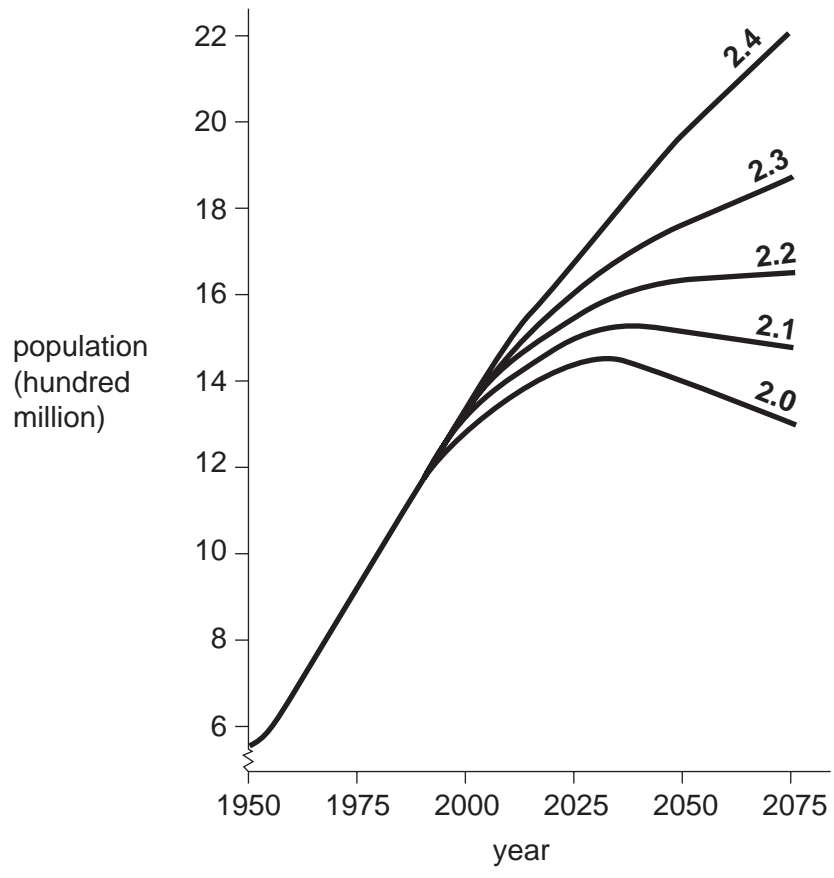


Fig. 6 for Question 9

Projections for China's population based on different fertility rates



Key
2.4 fertility rate

BLANK PAGE

Permission to reproduce items where third-party owned material protected by copyright is included has been sought and cleared where possible. Every reasonable effort has been made by the publisher (UCLES) to trace copyright holders, but if any items requiring clearance have unwittingly been included, the publisher will be pleased to make amends at the earliest possible opportunity.

University of Cambridge International Examinations is part of the Cambridge Assessment Group. Cambridge Assessment is the brand name of University of Cambridge Local Examinations Syndicate (UCLES), which is itself a department of the University of Cambridge.