


OCR

Oxford Cambridge and RSA

Monday 15 May 2023 – Morning**AS Level Economics****H060/01 Microeconomics****Time allowed: 1 hour 30 minutes****You can use:**

- a scientific or graph calculator

Please write clearly in black ink. **Do not write in the barcodes.**

Centre number

--	--	--	--	--

Candidate number

--	--	--	--

First name(s)

Last name

INSTRUCTIONS

- Use black ink. You can use an HB pencil, but only for graphs and diagrams.
- Write your answer to each question in the space provided. If you need extra space use the lined pages at the end of this booklet. The question numbers must be clearly shown.
- Answer **all** the questions in Sections A and B and **one** question in Section C.

INFORMATION

- The total mark for this paper is **60**.
- The marks for each question are shown in brackets [].
- Quality of extended response will be assessed in questions marked with an asterisk (*).
- This document has **20** pages.

ADVICE

- Read each question carefully before you start your answer.

2
SECTION A

Write your answer to each question in the box provided.

1 Which of these contains all the four factors of production?

- A** Capital, enterprise, labour, land
- B** Capital, labour, profit, rent
- C** Enterprise, interest, land, wages
- D** Interest, profit, rent, wages

Your answer

[1]

2 What is the income elasticity of demand if a 10% increase in consumer income leads to a 40% decrease in quantity demanded?

- A** -4.00
- B** -0.25
- C** +0.25
- D** +4.00

Your answer

[1]

3 Which of these is an example of a normative statement?

- A** Taxes on cigarettes provide the government with tax revenue
- B** The government should raise taxes even higher on cigarettes
- C** The tax on cigarettes accounts for 80% of the price of cigarettes
- D** VAT is one of the taxes charged on cigarettes

Your answer

[1]

4 Opportunity cost is defined as the value of:

- A** all alternative goods foregone
- B** the cost of other goods and services
- C** the cost imposed on a third party
- D** the next best alternative foregone

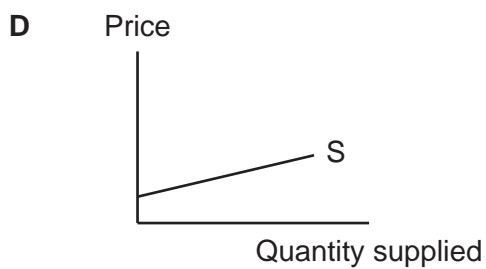
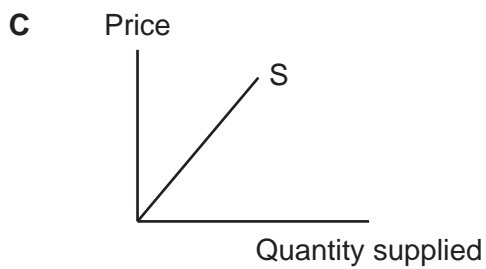
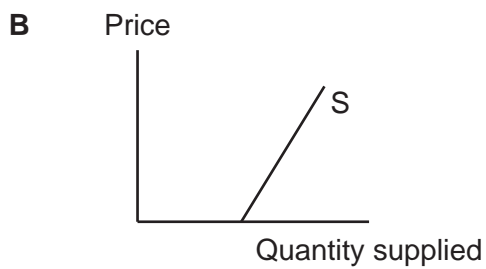
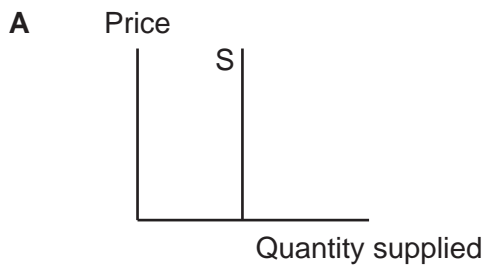
Your answer

[1]

3

5 The diagrams show the relationship between price and quantity supplied of a product.

Which supply curve shows unit price elasticity of supply along the curve?



Your answer

[1]

4

6 Which item is **most** likely to be used as a medium of exchange in the UK?

- A A fifty pound bank note
- B A gold wedding ring
- C A government bond
- D A savings account

Your answer

[1]

7 The table shows the quantity demanded and quantity supplied of a product at different prices.

Price	Quantity Demanded	Quantity Supplied
£10	100	20
£15	80	30
£20	75	50
£25	60	60
£30	40	80

At the equilibrium price, what is the total revenue?

- A £1000
- B £1200
- C £1500
- D £2400

Your answer

[1]

8 Which of these is a cause of market failure?

- A Positive externalities
- B Positive income elasticity of demand
- C Positive price elasticity of supply
- D Positive private costs

Your answer

[1]

9 Which of these would lead to a negative externality?

- A A new firm which creates jobs for local people
- B A new firm which processes coal, releasing carbon emissions
- C Information on the effects of smoking cigarettes
- D Subsidy for solar-powered electricity

Your answer

[1]

5

10 When will a subsidy have the most effect on quantity demanded?

- A Demand is perfectly inelastic
- B Demand is elastic
- C Demand is inelastic
- D Demand is unitary elastic

Your answer

[1]

11 Which of these defines an inferior good?

- A Quantity demanded decreases when incomes decrease
- B Quantity demanded decreases when incomes increase
- C Quantity demanded decreases when prices increase
- D Quantity demanded increases when prices increase

Your answer

[1]

12 The price elasticity of demand of widgets is -1.0 .

If the firm raises the price of widgets by 5%, this is likely to have what impact on the firm's total revenue?

- A Decrease by 5%
- B Decrease by more than 5%
- C Increase by less than 5%
- D No change

Your answer

[1]

13 The quantity demanded for oranges falls from 600 to 300 when the price of apples falls by 25%.

In relation to the price of apples, what is the cross elasticity of demand for oranges?

- A 12.5
- B 6.0
- C 2.0
- D 0.5

Your answer

[1]

6

14 A firm has successfully introduced division of labour in its factory.

Which of these is the **most** likely outcome?

- A Decrease in quantity supplied and decrease in equilibrium price
- B Decrease in quantity supplied and increase in equilibrium price
- C Increase in quantity supplied and decrease in equilibrium price
- D Increase in quantity supplied and increase in equilibrium price

Your answer

[1]

15 Which of these would lead to a fall in consumer surplus for a good?

- A Decrease in cost of production
- B Decrease in indirect tax
- C Increase in price
- D Increase in subsidy

Your answer

[1]

SECTION B

Flour Mills Worked Round The Clock To Meet Demand

©The Hustle, www.thehustle.co/baking-bread-at-home. Item removed due to third party copyright restrictions.


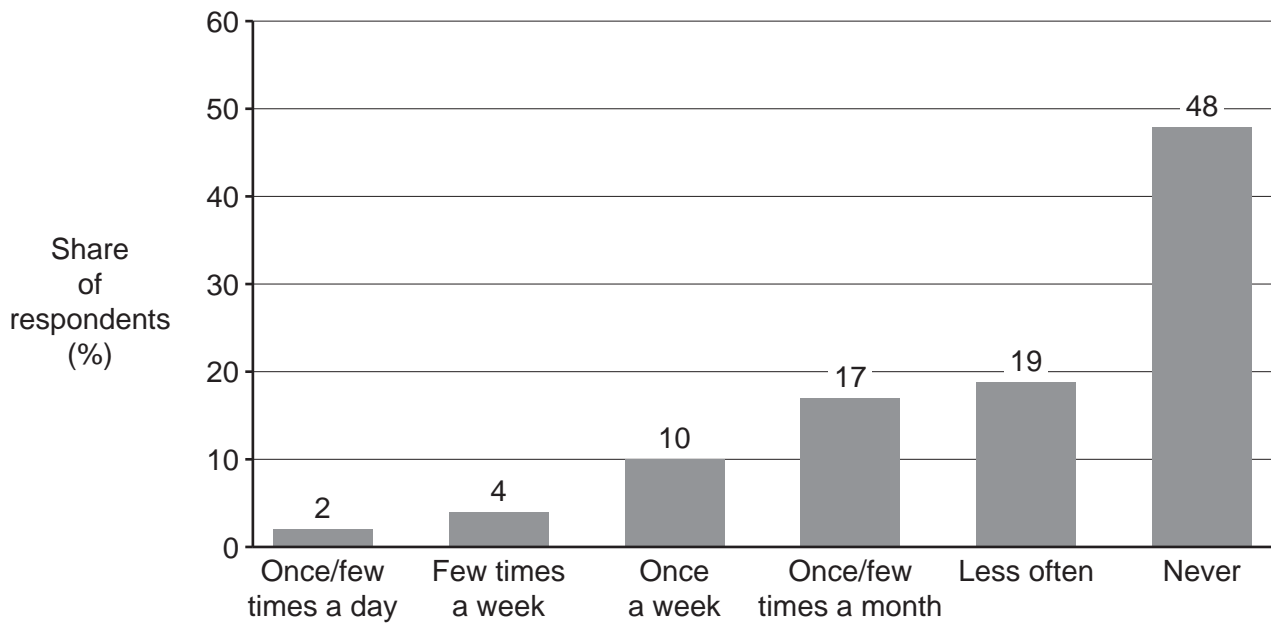


Fig. 1
Frequency of baking at home from scratch 2017



16 (a) Using Fig. 1, state what percentage of people baked at home from scratch once a week or more often in 2017.

.....
..... [1]

(b) (i) Using the information in the case study, explain why there was an increase in demand for flour.

.....
.....
.....
..... [2]

(ii) Explain what the price elasticity of supply is likely to be for flour.

.....
.....
.....
..... [2]

(iii) Using the information in the case study, explain what impact the change in demand for yeast would have had on Red Star Yeast's producer surplus.

.....
.....
.....
..... [2]

(c) Using a diagram, explain the disequilibrium that existed in the flour market in 2020.

.....
.....
.....
..... [4]

(d) Explain how a buffer stock system can be used to regulate the **market supply** of a product such as flour.

.....
.....
.....
.....
.....
.....
.....
.....
..... [4]

(e)* Evaluate, using an appropriate diagram(s), the effectiveness of a government policy that can be used to encourage UK flour millers to increase supply. [10]

.....

.....

.....

.....

.....

.....

.....

.....

.....

.....

.....

.....

.....

.....

.....

.....

.....

.....

.....

.....

.....

.....

.....

.....

A series of 25 horizontal dotted lines spanning the width of the page, intended for writing.

A series of horizontal dotted lines for writing, spanning the width of the page.

SECTION C

Answer Question 17 **or** Question 18.

17* Palm oil companies have been destroying rainforests and habitat for wildlife because they want more land to grow palm oil trees.

Around 24 million hectares of rainforest were destroyed in Indonesia between 1990 and 2015 – an area the size of the UK.

Evaluate, using an appropriate diagram(s), the effectiveness of imposing a tax on palm oil production to reduce negative externalities. **[20]**

OR

18* For decades China used a planned economy to allocate resources before transitioning to an economy which incorporates some functions of a market economy.

Evaluate, using an appropriate diagram(s), whether a country would benefit from moving from a planned to a market economy. **[20]**

Question No.

.....

.....

.....

.....

.....

.....

.....

.....

.....

.....

.....

.....

.....

.....

.....

.....

.....

.....

.....

.....

.....

.....

.....

.....

.....

.....

.....

A series of 25 horizontal dotted lines for writing.

A series of horizontal dotted lines for writing, spanning the width of the page.

END OF QUESTION PAPER

ADDITIONAL ANSWER SPACE

If additional space is required, you should use the following lined page(s). The question number(s) must be clearly shown in the margin(s).

A large rectangular area with a vertical solid line on the left side and horizontal dotted lines extending across the page, providing space for writing answers.

A series of horizontal dotted lines for writing, spanning the width of the page.

A large rectangular area for writing, defined by a vertical solid line on the left and horizontal dotted lines extending to the right. The page contains 25 horizontal rows, each starting from the left margin and ending at the right edge of the dotted line area.

A large rectangular area with a solid vertical line on the left and horizontal dotted lines, intended for writing answers.

OCR

Oxford Cambridge and RSA

Copyright Information

OCR is committed to seeking permission to reproduce all third-party content that it uses in its assessment materials. OCR has attempted to identify and contact all copyright holders whose work is used in this paper to avoid the issue of disclosure of answer-related information to candidates. All copyright acknowledgements are reproduced in the OCR Copyright Acknowledgements Booklet, which is produced for each series of examinations and is freely available to download from our public website (www.ocr.org.uk) after the live examination series.

OCR has unwittingly failed to correctly acknowledge or clear any third-party content in this assessment material. OCR will be happy to correct its mistake at the earliest possible opportunity.

For queries or further information please contact the OCR Copyright Team, Triangle Building, Shaftesbury Road, Cambridge CB2 8EA.

OCR is part of Cambridge University Press & Assessment, which is itself a department of the University of Cambridge.