

Please check the examination details below before entering your candidate information

Candidate surname					Other names			
Centre Number					Candidate Number			
Pearson Edexcel Level 1/Level 2 GCSE (9–1)					<input type="text"/> <input type="text"/> <input type="text"/> <input type="text"/> <input type="text"/>			
Monday 11 May 2020								
Morning (Time: 1 hour 40 minutes)					Paper Reference 1CP1/01			
Computer Science Paper 1: Principles of Computer Science								
You do not need any other materials.							Total Marks	

Instructions

- Use **black** ink or ball-point pen.
- **Fill in the boxes** at the top of this page with your name, centre number and candidate number.
- Answer **all** questions.
- Answer the questions in the spaces provided
– *there may be more space than you need.*
- You are not allowed to use a calculator.

Information

- The total mark for this paper is 80.
- The marks for **each** question are shown in brackets
– *use this as a guide as to how much time to spend on each question.*

Advice

- Read each question carefully before you start to answer it.
- Try to answer every question.
- Check your answers if you have time at the end.

Turn over ►

P60935A

©2020 Pearson Education Ltd.

1/1/1



Pearson

Answer ALL questions.

Some questions must be answered with a cross ☒. If you change your mind about an answer, put a line through the box ☒ and then mark your new answer with a cross ☒.

1 A computer game designer is creating a new game.

(a) Colours in the game are represented in hexadecimal.

Convert the binary numbers in this table to hexadecimal.

(3)

	Hexadecimal
1101 1110	
1010 1111	
1100 0100	

(b) Convert the hexadecimal number 12 to binary and the result from binary to denary.

(2)

Binary

.....

.....

Denary

.....

.....

DO NOT WRITE IN THIS AREA

DO NOT WRITE IN THIS AREA

DO NOT WRITE IN THIS AREA



DO NOT WRITE IN THIS AREA

DO NOT WRITE IN THIS AREA

DO NOT WRITE IN THIS AREA

(c) State what is meant by the term 'image resolution'.

(1)

.....

.....

(d) Computers use binary to represent colour.

Compare the use of 8 bits and 24 bits to represent colour.

(3)

.....

.....

.....

.....

.....

.....

(e) The game uses black and white as well as colour images.

Explain the effects of using a run-length encoding (RLE) algorithm on the black and white images used in the game.

(3)

.....

.....

.....

.....

.....

.....

(Total for Question 1 = 12 marks)



2 There are security concerns associated with cloud storage.

(a) State **one** way in which providers of cloud storage could prevent security breaches by their own employees.

(1)

DO NOT WRITE IN THIS AREA

(b) Identify **one** way in which cloud storage users can improve the security of their data.

(1)

- A Authentication
- B Compression
- C Decomposition
- D Virtualisation

(c) Explain why data on networks is encrypted.

(2)

DO NOT WRITE IN THIS AREA

(d) Describe how a Caesar cipher algorithm works.

(2)

DO NOT WRITE IN THIS AREA



(e) Explain why cloud storage companies often locate their servers in cold countries to protect the environment.

(3)

.....

.....

.....

.....

.....

.....

.....

(Total for Question 2 = 9 marks)

DO NOT WRITE IN THIS AREA

DO NOT WRITE IN THIS AREA

DO NOT WRITE IN THIS AREA



3 Gemma manages a network for an organisation.

(a) Two computers are assigned the same IP address.

Explain why Gemma must change the IP address of one of the computers.

(2)

.....

.....

.....

.....

(b) Identify the network topology that requires a server.

(1)

- A Bus
- B Mesh
- C Ring
- D Star

(c) The network transfers data at 3 Gbps.

Construct an expression to show how many bytes can be transmitted in 10 seconds.

You do not need to carry out the calculation.

(3)

.....

.....

.....

.....

.....

.....

DO NOT WRITE IN THIS AREA

DO NOT WRITE IN THIS AREA

DO NOT WRITE IN THIS AREA



(d) Identify the number of bits in a nibble.

(1)

- A** 2
- B** 4
- C** 8
- D** 16

(e) Identify the type of software used to compress files.

(1)

- A** Backup
- B** Utility
- C** Security
- D** Network

(f) Identify the email protocol.

(1)

- A** FTP
- B** HTTP
- C** SMTP
- D** TCP/IP


(g) State the role of an ISP.

(1)




- (h) A search engine selects information taken from the results of a search for 'Pearson'. The information is displayed here as a 'knowledge graph'.

Pearson
Publishing company



Pearson

 [pearson.com](https://www.pearson.com)

Pearson plc is a British multinational publishing and education company.

Stock price: PSON (LON) 927.60 GBX -1.80 (-0.19%)
24 Aug, 16:35 BST – Disclaimer


Headquarters: London

CEO: John Fallon (1 Jan 2013–)

Founder: Samuel Pearson

Founded: 1844

Profiles


Twitter

Identify the property of the data that allows this information to be selected.

(1)

- A Formatted
- B Hyperlinked
- C Structured
- D Virtualised

(Total for Question 3 = 11 marks)



- 4 (a) When developing a computer system, requirements are investigated.

State **one** requirement that must be investigated.

(1)

- (b) Complete this truth table.

(4)

A	B	NOT (A OR B)
1	1	
0		0
		1
1	0	

- (c) Name the type of main memory used to store a computer's startup process.

(1)

- (d) Give **two** examples of where software is used to simulate or model aspects of the real world.

(2)

1

2

- (e) Explain why solid state storage is the best choice for a fitness tracker.

(2)

(Total for Question 4 = 10 marks)



5 (a) Identify **one** component common to all computers.

(1)

- A Disk drive
- B Graphics card
- C Processor
- D Screen

(b) State **two** components of the CPU.

(2)

1

2

(c) Describe how the CPU and main memory work together.

(4)

.....
.....
.....
.....
.....
.....
.....
.....
.....

DO NOT WRITE IN THIS AREA

DO NOT WRITE IN THIS AREA

DO NOT WRITE IN THIS AREA



(d) Compare the use of a compiler with the use of an interpreter to translate code.

(6)

DO NOT WRITE IN THIS AREA

DO NOT WRITE IN THIS AREA

DO NOT WRITE IN THIS AREA

Area with horizontal dotted lines for writing the answer.

(Total for Question 5 = 13 marks)



P 6 0 9 3 5 A 0 1 1 1 6

6 Joe plays online games using the world wide web.

(a) A sequence of processes is required to open a web page.

Describe this sequence of processes.

(4)

.....

.....

.....

.....

.....

.....

.....

.....

.....

.....

(b) The web page uses a merge sort to display high scores.

Describe how a merge sort works.

(4)

.....

.....

.....

.....

.....

.....

.....

.....

.....

.....

DO NOT WRITE IN THIS AREA

DO NOT WRITE IN THIS AREA

DO NOT WRITE IN THIS AREA



(c) A bubble sort is carried out on this list.

5	2	4	1	9	3	7
---	---	---	---	---	---	---

(i) State the number of comparisons that will be made on the first pass. (1)

(ii) State the number of swaps that will be made on the first pass. (1)

(iii) State the number of passes that will be made. (1)

(iv) State the condition that will cause the algorithm to end. (1)

(d) A sorted data set contains millions of items.

State why a binary search algorithm would be preferable to a linear search algorithm for use with this data set.

(1)

(Total for Question 6 = 13 marks)

DO NOT WRITE IN THIS AREA

DO NOT WRITE IN THIS AREA

DO NOT WRITE IN THIS AREA



P 6 0 9 3 5 A 0 1 3 1 6

7 A computer operates as a binary digital device.

(a) Explain why binary is used to represent computer data.

(2)

.....

.....

.....

.....

(b) 8-bit two's complement is used to represent the denary numbers -8 and -1.

Complete the table to show the binary addition on these two negative numbers.

(2)

-8								
-1								
Result								

(c) Explain why it is **not** possible to apply two's complement to the 8-bit unsigned integer 1111 1101.

(2)

.....

.....

.....

.....

DO NOT WRITE IN THIS AREA

DO NOT WRITE IN THIS AREA

DO NOT WRITE IN THIS AREA



(d) A musician wants to store hundreds of audio files to cloud storage.

She wants to compress the files before she stores them.

Compare using a lossless compression algorithm with using a lossy compression algorithm for this purpose.

(6)

DO NOT WRITE IN THIS AREA

DO NOT WRITE IN THIS AREA

DO NOT WRITE IN THIS AREA

Area with horizontal dotted lines for writing.



DO NOT WRITE IN THIS AREA

DO NOT WRITE IN THIS AREA

DO NOT WRITE IN THIS AREA

(Total for Question 7 = 12 marks)

TOTAL FOR PAPER = 80 MARKS

