



Cambridge International AS & A Level


CANDIDATE
NAME

CENTRE
NUMBER

--	--	--	--	--

CANDIDATE
NUMBER

--	--	--	--



COMPUTER SCIENCE

9618/22

Paper 2 Fundamental Problem-solving and Programming Skills

May/June 2021

2 hours

You must answer on the question paper.

You will need: Insert (enclosed)

INSTRUCTIONS

- Answer **all** questions
- Use a black or dark blue pen.
- Write your name, centre number and candidate number in the boxes at the top of the page.
- Write your answer to each question in the space provided.
- Do **not** use an erasable pen or correction fluid.
- Do **not** write on any bar codes.
- You may use an HB pencil for any diagrams, graphs or rough working.
- Calculators must **not** be used in this paper.

INFORMATION

- The total mark for this paper is 75.
- The number of marks for each question or part question is shown in brackets [].
- No marks will be awarded for using brand names of software packages or hardware.
- The insert contains all the resources referred to in the questions.

This document has **16** pages. Any blank pages are indicated.

Refer to the **insert** for the list of pseudocode functions and operators.

- 1 (a) (i) Complete the following table by giving the appropriate data type in each case.

Variable	Example data value	Data type
Name	"Catherine"	
Index	100	
Modified	FALSE	
Holiday	25/12/2020	

[4]

- (ii) Evaluate each expression in the following table by using the initial data values shown in part (a)(i).

Expression	Evaluates to
Modified OR Index > 100	
LENGTH("Student: " & Name)	
INT(Index + 2.9)	
MID(Name, 1, 3)	

[4]

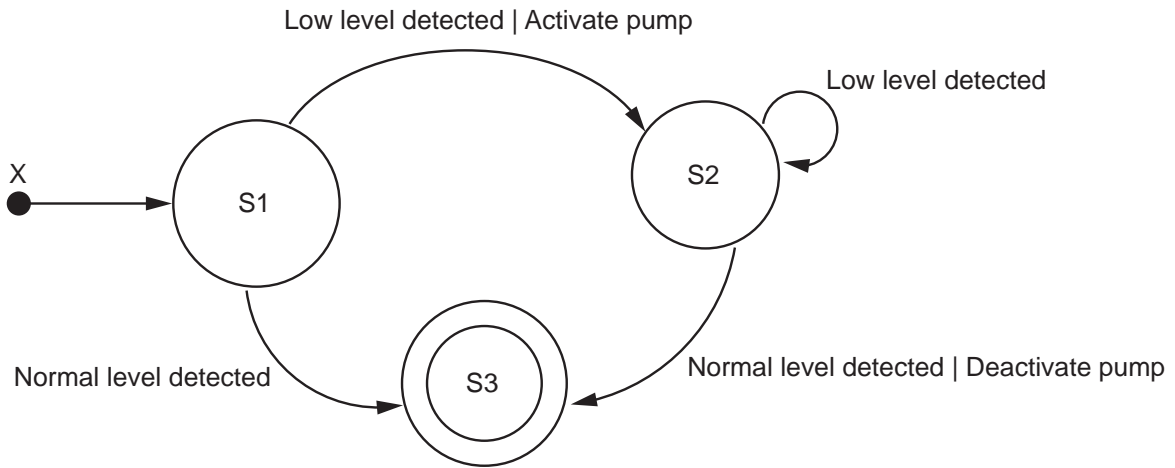
- (b) Each pseudocode statement in the following table contains an example of selection, assignment or iteration.

Put **one** tick (✓) in the appropriate column for each statement.

Statement	Selection	Assignment	Iteration
Index ← Index + 1			
IF Modified = TRUE THEN			
ENDWHILE			

[3]

2 (a) Examine the following state-transition diagram.



(i) Complete the table with reference to the diagram.

Answer

The number of transitions that result in a different state	
The number of transitions with associated outputs	
The label that should replace 'X'	
The final or halting state	

[4]

(ii) The current state is S1. The following inputs occur.

1. Low level detected
2. Low level detected
3. Low level detected
4. Low level detected

Give the number of outputs and the current state.

Number of outputs

Current state

[2]

(b) A system is being developed to help manage book loans in a library.

Registered users may borrow books from the library for a period of time.

(i) State **three** items of data that must be stored for each loan.

- 1
- 2
- 3 [2]

(ii) State **one** item of data that will be required in the library system but does not need to be stored for each loan.

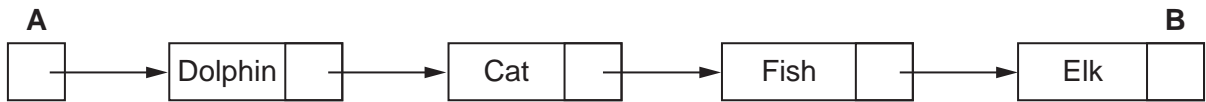
..... [1]

(iii) One operation that manipulates the data stored for each loan, would produce a list of all overdue books.

Identify **two other** operations.

- Operation 1
-
- Operation 2
- [2]

3 The following diagram represents an Abstract Data Type (ADT).



(a) Identify this type of ADT.

..... [1]

(b) Give the technical term for the item labelled **A** in the diagram.

..... [1]

(c) Give the technical term for the item labelled **B** in the diagram.

Explain the meaning of the value given to this item.

Term

Meaning

.....
.....

[2]

(d) Complete the diagram to show the ADT after the data has been sorted in alphabetical order.



[2]

(b) The following is a pseudocode function.

Line numbers are given for reference only.

```

01  FUNCTION StringClean(InString : STRING) RETURNS STRING
02
03      DECLARE NextChar : CHAR
04      DECLARE OutString : STRING
05      DECLARE Counter : INTEGER
06
07      OutString ← ""
08
09      FOR Counter ← 1 TO LENGTH(InString)
10          NextChar ← MID(InString, Counter, 1)
11          NextChar ← LCASE(NextChar)
12          IF NOT((NextChar < 'a') OR (NextChar > 'z')) THEN
13              OutString ← OutString & NextChar
14          ENDIF
15      NEXT Counter
16
17      RETURN OutString
18
19  ENDFUNCTION

```

(i) Examine the pseudocode and complete the following table.

Answer

Give a line number containing an example of an initialisation statement.	
Give a line number containing the start of a repeating block of code.	
Give a line number containing a logic operation.	
Give the number of parameters to the function MID().	

[4]

(ii) Write a simplified version of the statement in line 12.

.....

..... [2]

BLANK PAGE

.....

.....

.....

.....

..... [8]

7 A procedure, `FormatName()`:

- is called with a string containing words and spaces as its parameter. In this context, a word is any sequence of characters that does not contain a space character.
- creates a new formatted string from this string with the following requirements:
 1. Any leading spaces removed (spaces before the first word).
 2. Any trailing spaces removed (spaces after the last word).
 3. Any multiple spaces between words converted to a single space.
 4. All characters converted to lower case.

The `FormatName()` procedure has been written in a programming language and is to be tested using the black-box method.

(a) Give a test string that could be used to show that all **four** formatting requirements have been applied correctly.

Use the symbol '∇' to represent a space character.

..... [3]

(b) The `FormatName()` procedure should assign a value to the global variable `FString`.

There is a fault in the program, which means that the assignment does not always take place.

Explain **two** ways of exposing the fault.

.....

.....

.....

.....

..... [2]

12

- 8 A program is needed to take a string containing a full name and to produce a new string of initials.

Some words in the full name will be ignored. For example, “the”, “and”, “of”, “for” and “to” may all be ignored.

Each letter of the new string must be upper case.

For example:

Full name	Initials
Integrated Development Environment	IDE
The American Standard Code for Information Interchange	ASCII

The programmer has decided to use the following global variables:

- a ten element 1D array `IgnoreList` of type `STRING` to store the ignored words
- a string `FNString` to store the full name string.

Assume that:

- each alphabetic character in the full name string may be either upper or lower case
- the full name string contains at least one word.

The programmer has started to define program modules as follows:

Module	Description
<code>GetStart()</code>	<ul style="list-style-type: none"> • Called with an <code>INTEGER</code> as its parameter, representing the number of a word in <code>FNString</code> • Returns the character start position of that word in <code>FNString</code> or returns <code>-1</code> if that word does not exist • For example: <code>GetStart(3)</code> applied to "hot and cold" returns 9
<code>GetWord()</code>	<ul style="list-style-type: none"> • Called with the position of the first character of a word in <code>FNString</code> as its parameter • Returns the word from <code>FNString</code> • For example: if <code>FNString</code> contains the string "hot and cold", <code>GetWord(9)</code> returns "cold"
<code>IgnoreWord()</code>	<ul style="list-style-type: none"> • Called with a <code>STRING</code> parameter representing a word • Searches for the word in the <code>IgnoreList</code> array • Returns <code>TRUE</code> if the word is found, otherwise returns <code>FALSE</code>
<code>GetInitials()</code>	<ul style="list-style-type: none"> • Processes the sequence of words in the full name one word at a time • Calls <code>GetStart()</code>, <code>GetWord()</code> and <code>IgnoreWord()</code> to process each word to form the new string • Outputs the new string

BLANK PAGE

Permission to reproduce items where third-party owned material protected by copyright is included has been sought and cleared where possible. Every reasonable effort has been made by the publisher (UCLES) to trace copyright holders, but if any items requiring clearance have unwittingly been included, the publisher will be pleased to make amends at the earliest possible opportunity.

To avoid the issue of disclosure of answer-related information to candidates, all copyright acknowledgements are reproduced online in the Cambridge Assessment International Education Copyright Acknowledgements Booklet. This is produced for each series of examinations and is freely available to download at www.cambridgeinternational.org after the live examination series.

Cambridge Assessment International Education is part of the Cambridge Assessment Group. Cambridge Assessment is the brand name of the University of Cambridge Local Examinations Syndicate (UCLES), which itself is a department of the University of Cambridge.