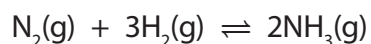


- 1 When nitrogen and hydrogen react to form ammonia, the reaction can reach a dynamic equilibrium.



- (a) Explain what is meant by a **dynamic equilibrium**.

(2)

.....

.....

.....

.....

- (b) In industry, the reaction between nitrogen and hydrogen is affected by the conditions used.

- (i) The pressure used is 250 atmospheres.

Explain how the use of a higher pressure would affect the equilibrium yield of ammonia.

(2)

.....

.....

.....

.....

- (ii) The reaction between nitrogen and hydrogen to form ammonia is exothermic. The temperature used is 450 °C.

Explain how the use of a lower temperature would affect the equilibrium yield of ammonia.

(2)

.....

.....

.....

.....

(iii) Even at 450 °C, the reaction is very slow.

State what is used in industry to overcome this problem.

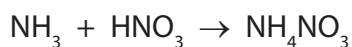
(1)

(c) (i) Calculate the minimum volume of hydrogen required to completely convert 1000 dm³ of nitrogen into ammonia.

(1)

volume of hydrogen = dm³

(ii) Ammonia is reacted with excess nitric acid, HNO₃, to make ammonium nitrate, NH₄NO₃.



Calculate the mass of ammonium nitrate produced by the complete reaction of 34 g of ammonia.

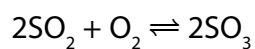
(Relative atomic masses H = 1.0, N = 14, O = 16)

(3)

mass of ammonium nitrate produced = g

(Total for Question 1 = 11 marks)

2 Sulfur trioxide is produced by reacting sulfur dioxide with oxygen.



- (a) (i) This reaction takes place in industry at 1–2 atm pressure and can reach a dynamic equilibrium.

Explain the effect on the rate of attainment of equilibrium, if the process is carried out at a pressure higher than 1–2 atm.

(3)

.....

.....

.....

.....

.....

.....

- (ii) What volume of oxygen, in cm^3 , would react completely with 500 cm^3 sulfur dioxide?

(1)

- A 500
- B 500
- C 500
- D 500

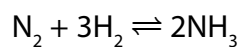
- (b) When there are alternative methods of producing a product, the final pathway is chosen by considering atom economy, cost of energy, yield of product and rates of reactions.

State another factor that should also be considered.

(1)

.....

*(c) The reaction between nitrogen and hydrogen is exothermic.



If nitrogen and hydrogen were reacted at 150 atm pressure and 300 °C, without a catalyst, some ammonia would be formed.

In the Haber process a pressure of 150 atm and a temperature of 450 °C are used, in the presence of an iron catalyst.

Explain why the conditions used in the Haber process are better than the first set of conditions for the manufacture of ammonia.

(6)

.....

.....

.....

.....

.....

.....

.....

.....

.....

.....

.....

.....

.....

.....

.....

.....

.....

.....

.....

.....

.....

.....

(Total for Question 2 = 11 marks)
