

1 Acid-base reactions are examples of proton

(a) Ethylamine is a weak base and sodium hydroxide transfer. is a strong base.

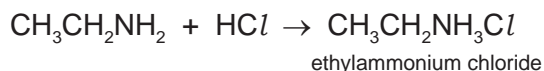
(i) In terms of proton transfer, explain what is meant by the term *weak base*.....

..... [2]


(ii) Given aqueous solutions of both bases, describe how you could show that sodium hydroxide is the stronger base. How could you ensure a 'fair' comparison between the two solutions?

.....  
.....  
.....  
..... [3]

(b) Ethylamine reacts with acids to form salts.



(i) Complete the equation for the reaction between sulfuric acid and ethylamine. Name the salt formed.



name of salt ..... [3]

(ii) Amines and their salts have similar chemical properties to ammonia and ammonium salts.

Suggest a reagent that could be used to displace the weak base, ethylamine, from its salt ethylammonium chloride.

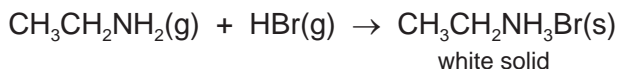
..... [1]

(c) Gases diffuse, which means that they move to occupy the total available volume.

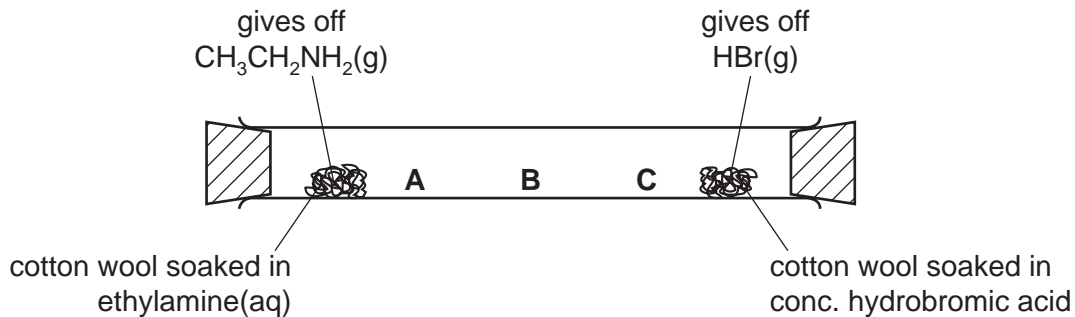
(i) Explain, using kinetic particle theory, why gases diffuse.

.....  
.....  
..... [2]

(ii) When the colourless gases hydrogen bromide and ethylamine come into contact, a white solid is formed.



The following apparatus can be used to compare the rates of diffusion of the two gases ethylamine and hydrogen bromide.



Predict at which position, **A**, **B** or **C**, the white solid will form. Explain your choice.

.....  
.....  
..... [3]

[Total: 14]

2 The halogens are a collection of diatomic non-metals in Group VII.

(a) Define the term *diatomic*.

..... [1]

(ii) What do the electron distributions of the halogens have in common?

..... [1]

(iii) How do their electron distributions differ?

..... [1]

(iv) Complete the table.

halogen	solid, liquid or gas at room temperature	colour
chlorine	.....	.....
bromine	.....	.....
iodine	.....	.....

[2]

(b) The halogens react with other non-metals to form covalent compounds.

Draw a diagram which shows the arrangement of the valency electrons in one molecule of the covalent compound arsenic trifluoride.

The electron distribution of an arsenic atom is  $2 + 8 + 18 + 5$ .

Use x to represent an electron from an arsenic atom.

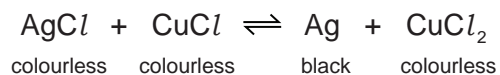
Use o to represent an electron from a fluorine atom.

[3]

- (c) Photochromic glass is used in sunglasses. In bright light, the glass darkens reducing the amount of light reaching the eye. When the light is less bright, the glass becomes colourless increasing the amount of light reaching the eye.

Photochromic glass contains very small amounts of the halides silver(I) chloride and copper(I) chloride.

The reaction between these two chlorides is photochemical.



How does photochromic glass work?

.....

.....

..... [3]

[Total: 11]

3 Selenium and sulfur are in Group VI. They have similar properties.

(a) One of the main uses of selenium is in photoelectric cells. These cells can change light into electrical energy.

(i) Name a process which can change light into chemical energy.

.....

(ii) Name a device which can change chemical energy into electrical energy.

..... [2]

(b) The electron distribution of a selenium atom is  $2 + 8 + 18 + 6$ .

(i) Selenium forms an ionic compound with potassium. Draw a diagram which shows the formula of this ionic compound, the charges on the ions and the arrangement of the **valency** electrons around the negative ion.

Use o to represent an electron from an atom of potassium.

Use x to represent an electron from an atom of selenium.

[3]

- (ii) Draw a diagram showing the arrangement of the valency electrons in one molecule of the covalent compound selenium chloride.  
Use x to represent an electron from an atom of selenium.  
Use o to represent an electron from an atom of chlorine.

[3]

- (iii) Predict **two** differences in the physical properties of these two compounds.

.....  
..... [2]

- (c) The selenide ion reacts with water.



What type of reagent is the selenide ion in this reaction? Give a reason for your choice.

.....  
..... [3]

[Total: 13]

4 Chlorine reacts with phosphorus to form phosphorus trichloride.

- (a) Draw a diagram showing the arrangement of the **valency** electrons in one molecule of the covalent compound, phosphorus trichloride.  
Use x to represent an electron from a phosphorus atom.  
Use o to represent an electron from a chlorine atom.

[2]

(b) Phosphorus trichloride reacts with water to form two acids.

- (i) Balance the equation for this reaction.



[1]

- (ii) Describe how you could show that phosphorus acid,  $H_3PO_3$ , is a weaker acid than hydrochloric acid.

.....  
.....  
..... [3]

- (iii) Two salts of phosphorus acid are its sodium salt, which is soluble in water, and its calcium salt which is insoluble in water. Suggest a method of preparation for each of these salts from aqueous phosphorus acid. Specify any other reagent needed and briefly outline the method.

sodium salt .....

.....

.....

..... [2]

calcium salt .....

.....

.....

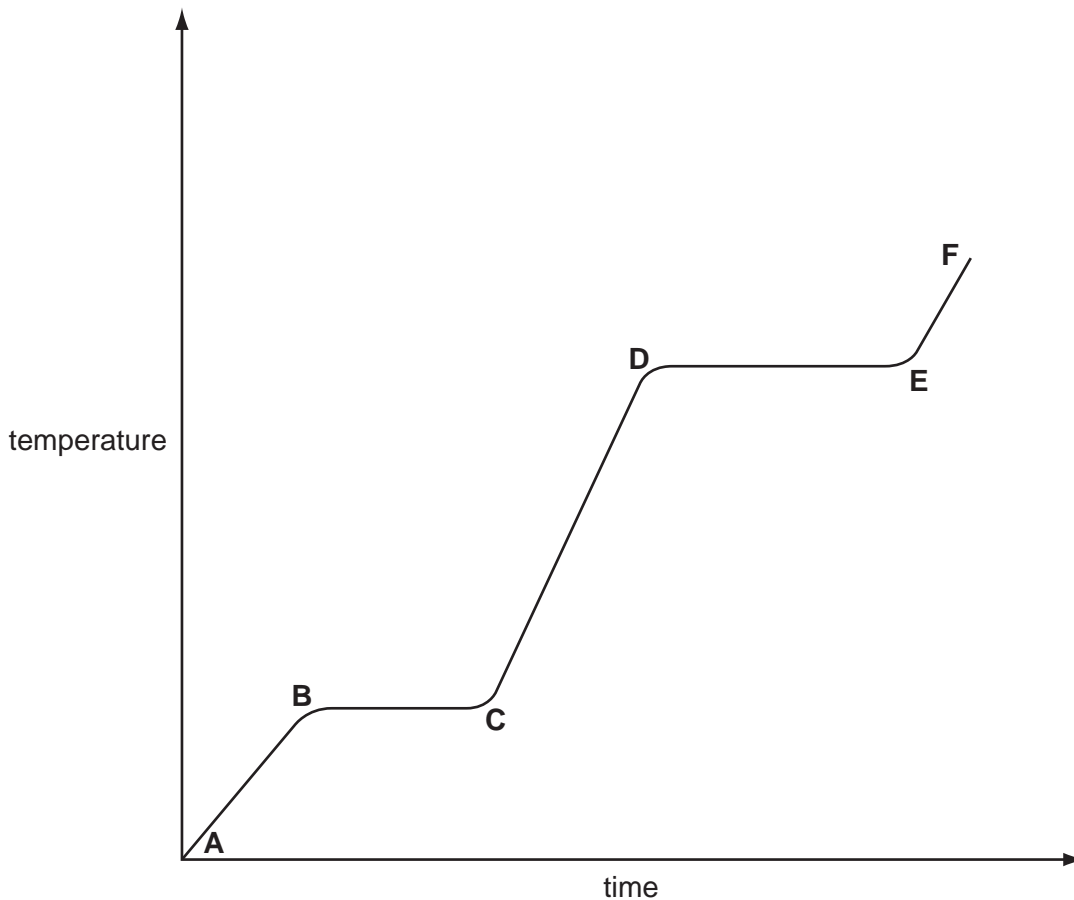
..... [2]

[Total: 10]



5 Ethanoic acid is a colourless liquid at room temperature. It has the typical acid properties and forms compounds called ethanoates.

(a) A pure sample of ethanoic acid is slowly heated from  $0^{\circ}\text{C}$  to  $150^{\circ}\text{C}$  and its temperature is measured every minute. The results are represented on the graph below.



(i) Name the change that occurs in the region **D** to **E**.  
..... [1]

(ii) What would be the difference in the region **B** to **C** if an impure sample had been used?  
..... [1]

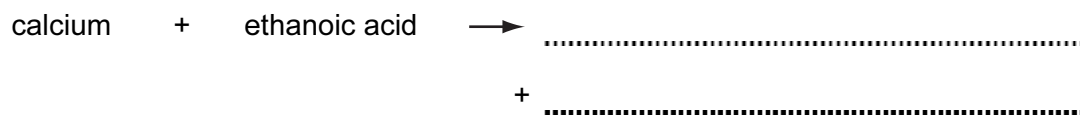
(iii) Sketch on the graph how the line would continue if the acid was heated to a higher temperature. [1]

(iv) Complete the following table that compares the separation and movement of the molecules in regions **C** to **D** with those in **E** to **F**.

	<b>C to D</b>	<b>E to F</b>
separation (distance between particles)	.....	.....
movement of particles	random and slow	..... .....
Can particles move apart to fill any volume?	.....	.....

[5]

(b) Complete the word equations for the reactions of ethanoic acid.



(c) Write the symbol equation for the reaction between ethanoic acid and sodium hydroxide.

..... [2]