

**Q1.** This question is about the temperature of the Earth's atmosphere.

(a) Give **one** reason why it is difficult to produce models for future climate change.

.....  
.....

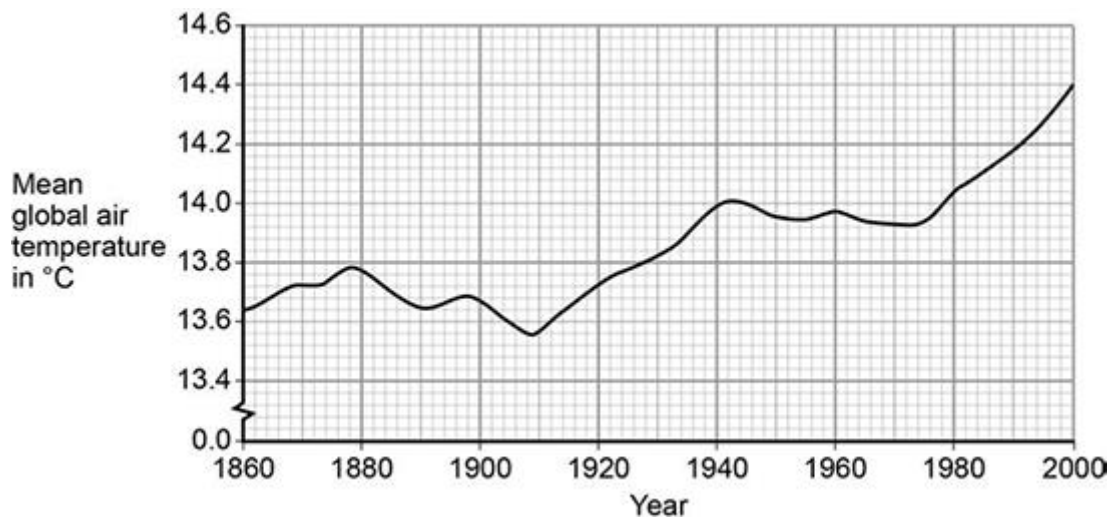
(1)

(b) Describe how carbon dioxide helps to maintain temperatures on Earth.

.....  
.....  
.....  
.....  
.....  
.....

(3)

(c) The figure below shows the change in mean global air temperature from 1860 to 2000.



Explain how human activities have contributed to the main trend shown from 1910 in the figure above.

.....

.....

.....

.....

.....

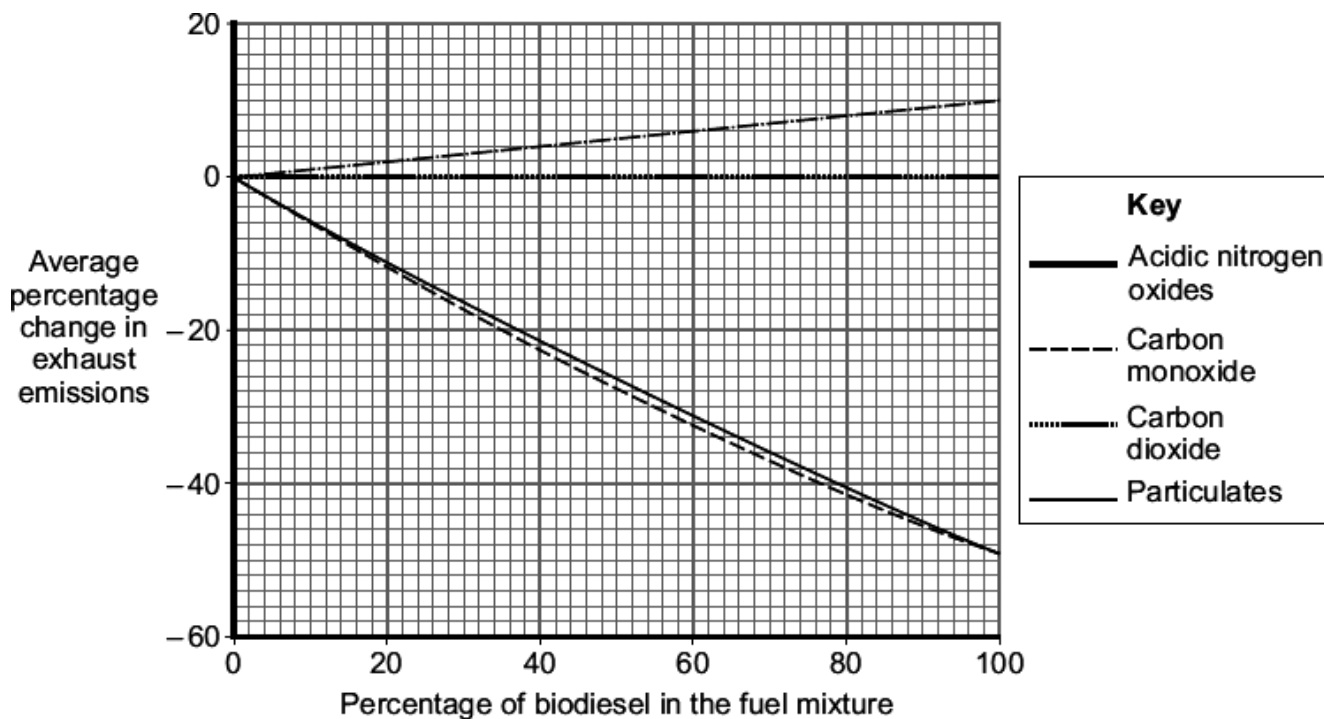
(3)  
(Total 7 marks)

**Q2.** Petroleum diesel is produced from crude oil.

Most vehicles that use petroleum diesel as fuel can also use biodiesel or a mixture of these two fuels. In the UK (in 2010) there must be 5 % biodiesel in all petroleum diesel fuel.

Biodiesel is produced from plant oils such as soya. The crops used to produce biodiesel can also be used to feed humans. The benefit that biodiesel is 'carbon neutral' is outweighed by the increasing demand for crops. This increasing demand is causing forests to be burnt to provide land for crops to produce biodiesel. Only a huge fall in the price of petroleum diesel would halt the increasing use of biodiesel.

The graph shows the average percentage change in exhaust emissions from vehicles using different mixtures of petroleum diesel and biodiesel.



There is no difference in carbon dioxide emissions for all mixtures of petroleum diesel and biodiesel.

Use the information and your knowledge and understanding to evaluate the use of plant oils to produce biodiesel.

Remember to give a conclusion to your evaluation.

.....

.....

.....

.....

.....

.....

.....

.....

.....

.....

.....

.....

.....

.....

.....

.....

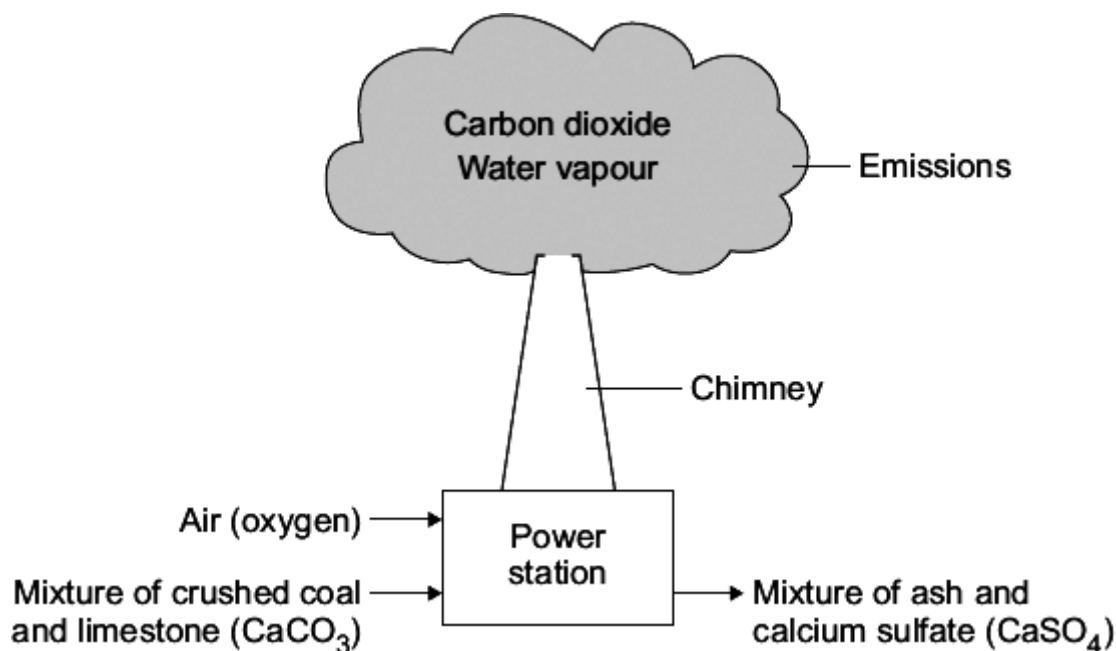
.....

.....

.....

(5)  
(Total 5 marks)

- Q3.** Most power stations burn coal to generate electricity. Burning coal gives off sulfur dioxide gas which can be removed from the waste gases by using limestone. This prevents sulfur dioxide from entering the atmosphere and causing acid rain. One disadvantage of using limestone in a power station is that it releases 'locked up carbon dioxide' into the atmosphere.



(a) How does the limestone used in a power station:

(i) release carbon dioxide

.....  
 .....

(1)

(ii) remove sulfur dioxide?

.....  
 .....

(1)

(b) The waste gases from the chimney are monitored. One toxic gas that should not be released is carbon monoxide.

Explain how carbon monoxide would be formed.

.....  
.....  
.....  
.....

(2)

(c) The use of limestone in a power station releases 'locked up carbon dioxide' into the atmosphere.

(i) Explain the meaning of 'locked up carbon dioxide'.

.....  
.....  
.....  
.....

(2)

(ii) Why does the release of this carbon dioxide cause an environmental problem?

.....  
.....  
.....

(1)

(Total 7 marks)

**Q4.** Since 2000 there has been a lot more research into alternative, environmentally-friendly fuels for road transport.

Several pollutants are found in the exhaust emissions produced when fossil fuels are used for road transport.

Carbon monoxide (CO) interferes with the way that red blood cells carry oxygen. Carbon dioxide (CO<sub>2</sub>) increases the level of carbon dioxide in the atmosphere and causes global warming.

Oxides of nitrogen (NO<sub>x</sub>) are produced at high temperatures when nitrogen and oxygen from the atmosphere combine.

Sulfur dioxide (SO<sub>2</sub>) is produced when sulfur impurities in the fuel combine with oxygen in the atmosphere.

Tiny particles of solids are produced when the fuel does not burn completely.

This increases the level of particulates (PM10) in the atmosphere.

(a) Name the environmental effect caused by:

(i) oxides of nitrogen (NO<sub>x</sub>) and sulfur dioxide (SO<sub>2</sub>)

.....

(1)

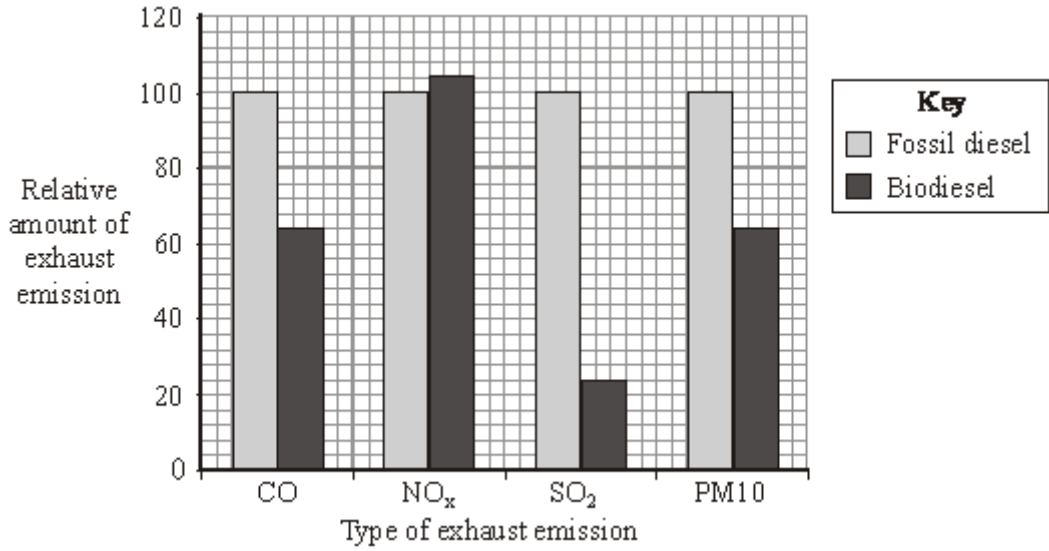
(ii) the increased level of particulates (PM10).

.....

(1)

(b) Diesel obtained from crude oil is often called fossil diesel. Biodiesel can be made from many vegetable oils. One research project compared the exhaust emissions when fossil diesel or biodiesel were used as fuels.

Some of the relative amounts of these exhaust emissions are shown in the bar chart.



- (i) Use your knowledge and the information above to explain the environmental benefits of using biodiesel as a sustainable, low pollution fuel.

.....

.....

.....

.....

.....

.....

(3)

- (ii) Biodiesel is called a green fuel.

This is because the life-cycle emission of carbon dioxide from biodiesel is less than that from fossil diesel.

Use your knowledge and the information above to explain why biodiesel's contribution to global warming is considered to be much less than that of fossil diesel.

.....

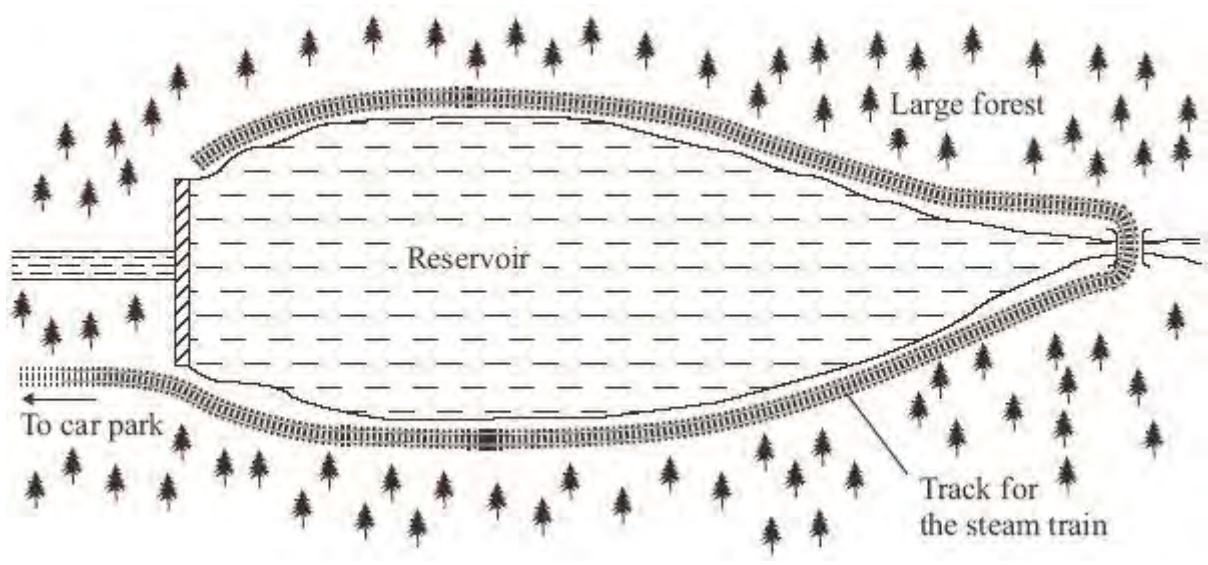
.....



.....  
.....  
.....  
.....

(3)  
(Total 8 marks)

**Q5.** A large reservoir is surrounded by trees. Planners need to protect the environment. The distance around the reservoir is many kilometres. There will be only one road access to a car park a few kilometres from the reservoir. From the car park people would be transported to accommodation, activities or places of interest by steam train.



(a) Coal contains carbon and small amounts of sulfur. The steam train would cause environmental problems if coal were used as the fuel.

Explain why.

.....

.....

.....

.....

.....

.....

.....

.....

(4)

- (b) The planners have stated that, as a result of using the steam train, there must be no overall increase of carbon dioxide added to the atmosphere. The steam train would be considered as 'carbon neutral' if wood, from the surrounding forest, were used as the fuel.

Suggest why.

.....

.....

.....

.....

.....

.....

(3)  
(Total 7 marks)

**Q6.** (a) For the last 200 million years the amount of carbon dioxide in the atmosphere has remained almost the same.

Describe the natural processes which remove carbon dioxide from the atmosphere.

To gain full marks in this question you should write your ideas in good English. Put them into a sensible order and use the correct scientific words.

.....

.....

.....

.....

.....

.....

.....

.....

.....

.....

.....

(4)

(b) The amount of carbon dioxide in the atmosphere has increased over the last one hundred years. Suggest **two** reasons why this has happened.

1 .....

.....

2 .....

.....

(2)

(Total 6 marks)

**Q7.** For 200 million years the proportions of the different gases in the atmosphere have been much the same as today. Over the past 150 years the amount of carbon dioxide in the atmosphere has increased from 0.03% to 0.04%.

(a) Describe how carbon dioxide is released into the atmosphere:

(i) by human and industrial activity;

.....  
.....  
.....  
.....

(2)

(ii) from carbonate rocks by geological activity.

.....  
.....  
.....  
.....

(2)

(b) Explain how the seas and oceans can decrease the amount of carbon dioxide in the atmosphere.

.....  
.....  
.....  
.....  
.....  
.....

(3)

(c) (i) Give **one** reason why the amount of carbon dioxide in the atmosphere is increasing gradually.

.....  
.....

(1)

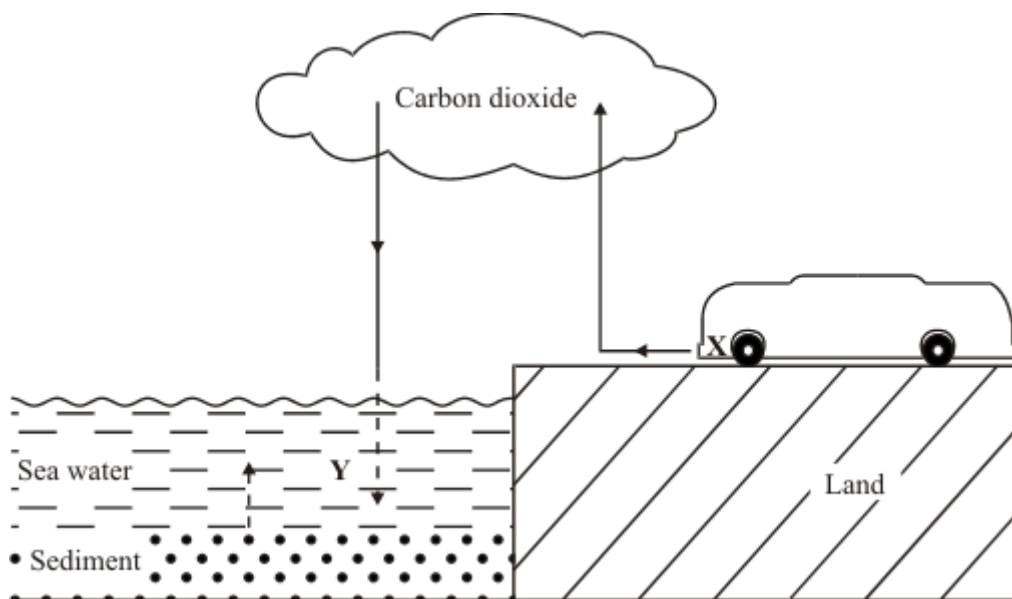
(ii) Give **one** effect that increasing levels of carbon dioxide in the atmosphere may have on the environment.

.....  
.....

(1)

(Total 9 marks)

**Q8.** The amount of carbon dioxide in the atmosphere is increased by reactions that occur in internal combustion engines (**X**) and is decreased by reactions in sea water (**Y**).



Describe, in as much detail as you can, the reactions which take place at **X** and **Y**.

(a) **X** .....

.....

.....

.....

(2)

(b) **Y** .....

.....

.....

.....

(3)

(Total 5 marks)