

Q1. A mixture of petrol and air is burned in a car engine.
Petrol is a mixture of alkanes. Air is a mixture of gases.

The tables give information about the composition of petrol and the composition of air.

Petrol		Air	
Alkane	Formula	Gas	Percentage (%)
hexane	C ₆ H ₁₄	nitrogen	78
heptane		oxygen	21
octane	C ₈ H ₁₈	carbon dioxide	0.035
nonane	C ₉ H ₂₀	Small amounts of other gases and water vapour	
decane	C ₁₀ H ₂₂		

(a) Use the information above to answer these questions.

(i) Give the formula for heptane

.....



(1)

(ii) Complete the general formula of alkanes.
n = number of carbon atoms



(1)

(b) Alkanes in petrol burn in air.
The equations represent two reactions of hexane burning in air.



Reaction 2 produces a different carbon compound to **Reaction 1**.

(i) Name the carbon compound produced in **Reaction 2**.

.....

(1)

(ii) Give a reason why the carbon compounds produced are different.

.....
.....

(1)

(c) The table shows the percentages of some gases in the exhaust from a petrol engine.

Name of gas	Percentage (%)
nitrogen	68
carbon dioxide	15
carbon monoxide	1.0
oxygen	0.75
nitrogen oxides	0.24
hydrocarbons	0.005
sulfur dioxide	0.005
other gases	

(i) What is the percentage of the other gases in the table?

.....

(1)

(ii) What is the name of the compound that makes up most of the other gases?

.....

(1)

(iii) Give a reason why sulfur dioxide is produced in a petrol engine.

.....
.....

(1)

(iv) State how nitrogen oxides are produced in a petrol engine.

.....
.....
.....
.....

(2)

(d) Many scientists are concerned about the carbon dioxide released from burning fossil fuels such as petrol.

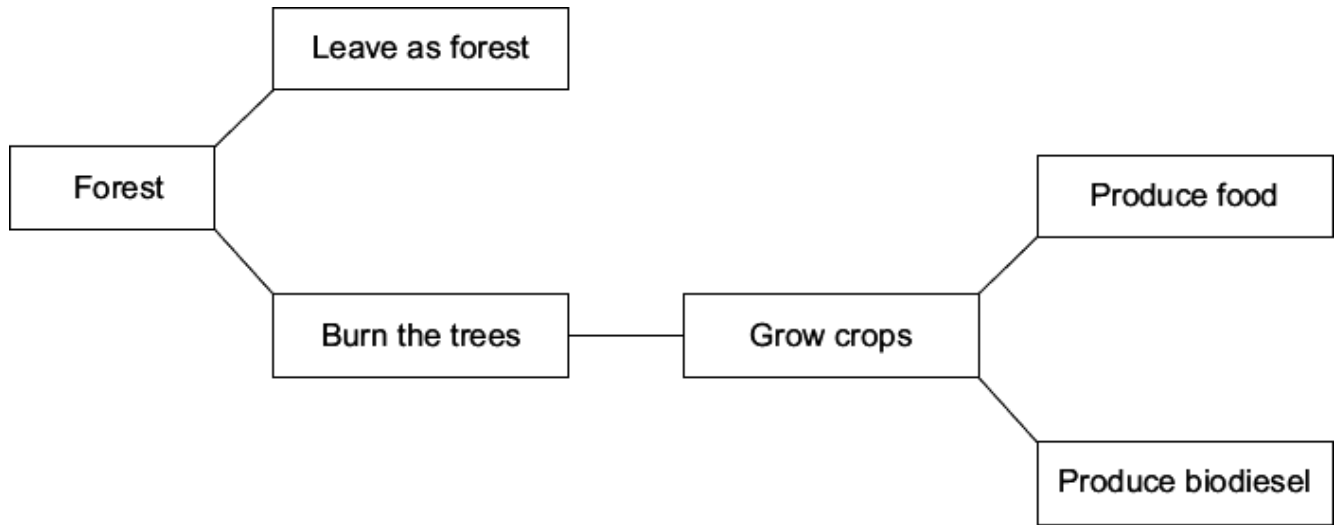
Explain why.

.....
.....
.....
.....

(2)

(Total 11 marks)

Q2. Petroleum diesel is a fuel made from crude oil.
 Biodiesel is a fuel made from vegetable oils.
 To make biodiesel, large areas of land are needed to grow crops from which the vegetable oils are extracted.
 Large areas of forest are cleared by burning the trees to provide more land for growing these crops.



(a) Use this information and your knowledge and understanding to answer these questions.

(i) Carbon neutral means that there is no increase in the amount of carbon dioxide in the atmosphere.

Suggest why adverts claim that using biodiesel is carbon neutral.

.....

.....

.....

.....

.....

.....

.....

(2)

(ii) Explain why clearing large areas of forest has an environmental impact on the atmosphere.

.....

.....
.....
.....
.....
.....

(2)

(b) Why is there an increasing demand for biodiesel?

.....
.....

(1)

(c) Suggest why producing biodiesel from crops:

(i) causes ethical concerns

.....
.....

(1)

(ii) causes economic concerns.

.....
.....

(1)

(Total 7 marks)

Q3. About 3000 million years ago, carbon dioxide was one of the main gases in the Earth's atmosphere.

About 400 million years ago, plants and trees grew on most of the land. When the plants and trees died they were covered by sand and slowly decayed to form coal.

(a) Describe and explain how the composition of the Earth's atmosphere was changed by the formation of coal.

.....
.....
.....
.....
.....
.....
.....
.....

(3)

(b) Today, coal is burned in power stations to release the energy needed by industry. Carbon dioxide, water and sulfur dioxide are produced when this coal is burned.

Name **three** elements that are in this coal.

.....
.....
.....

(2)

(c) In some power stations coal is mixed with calcium carbonate (limestone). The mixture is crushed before it is burned.

(i) Many chemical reactions happen when this mixture is burned. The chemical equation represents one of these reactions.

Balance the chemical equation.



(1)

(ii) Explain how the use of calcium carbonate in the mixture:

increases atmospheric pollution

.....
.....
.....
.....

decreases atmospheric pollution.

.....
.....
.....
.....

(4)

(Total 10 marks)

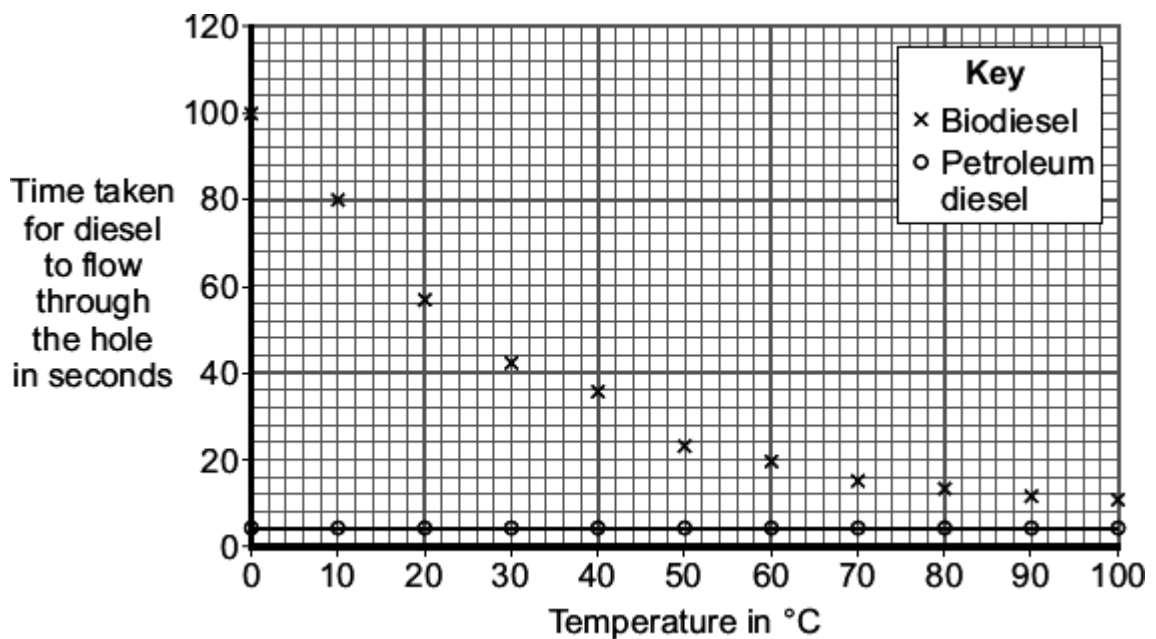
Q4. There are two main types of diesel fuel used for cars:

- biodiesel, made from vegetable oils
- petroleum diesel, made from crude oil.

(a) A scientist compared the viscosity of biodiesel with petroleum diesel at different temperatures.

The scientist measured the time for the same volume of diesel to flow through a small hole in a cup.

The scientist's results are plotted on the grid.



(i) Draw a line of best fit for the biodiesel results.

(1)

(ii) What conclusions can the scientist make about the viscosity of biodiesel compared with the viscosity of petroleum diesel at different temperatures?

.....

.....

.....

.....

(2)

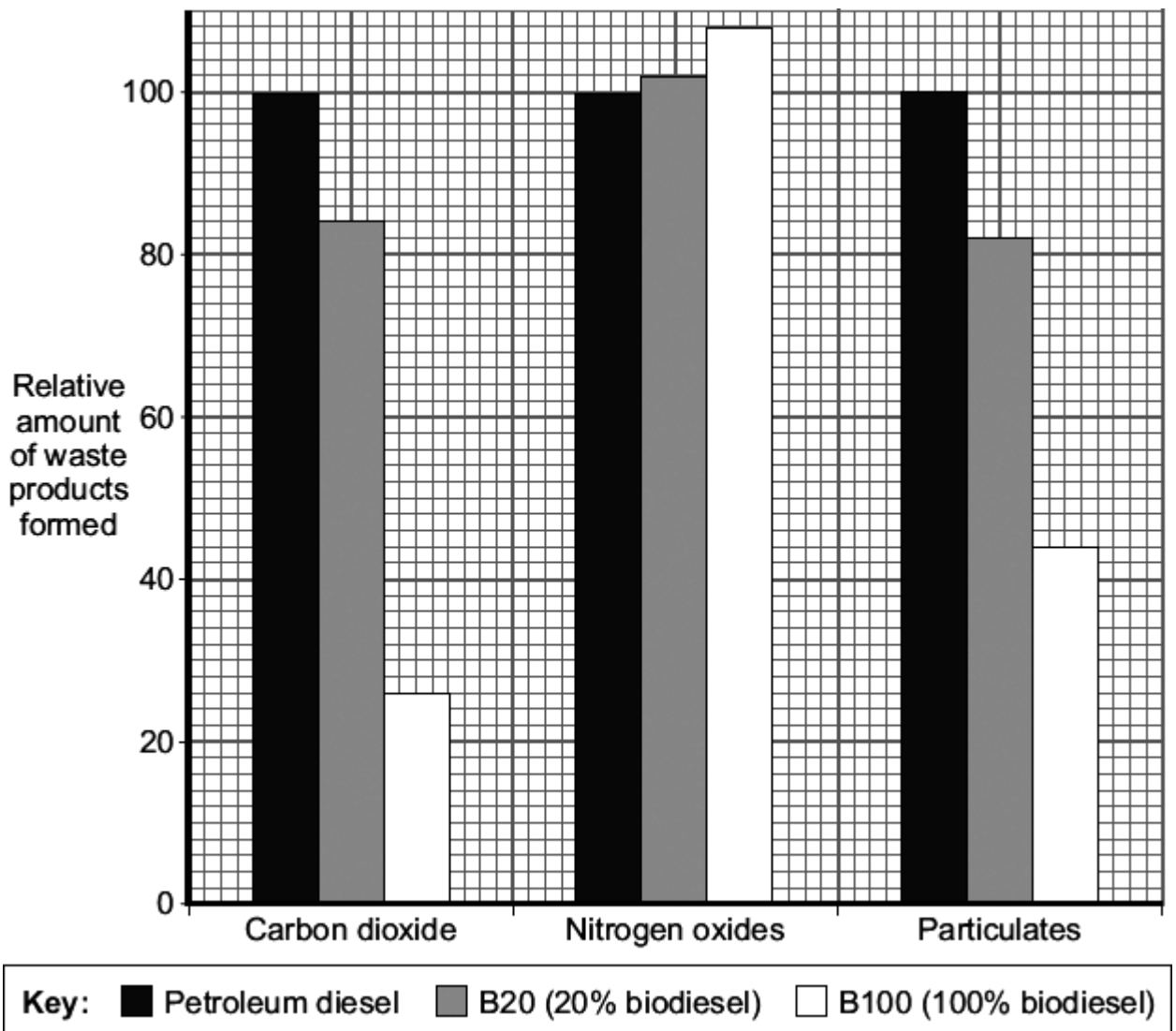
- (iii) Biodiesel may be less suitable than petroleum diesel as a fuel for cars.
Use these results to suggest **one** reason why.

.....

.....

(1)

- (b) Biodiesel can be mixed with petroleum diesel to make a fuel for cars.
In a car engine, the diesel fuel burns in air.
The waste products leave the car engine through the car exhaust system.
The bar chart compares the relative amounts of waste products made when three different types of diesel fuel burn in a car engine.



Nitrogen oxides and sulfur dioxide cause a similar environmental impact.

(i) What environmental impact do particulates from car exhaust systems cause?

.....

(1)

(ii) What is the percentage reduction in particulates when using B100 instead of petroleum diesel?

..... %

(1)

(iii) Replacing petroleum diesel with biodiesel increases one type of environmental pollution.

Use the bar chart and the information given to explain why.

.....
.....
.....
.....

(2)

(iv) A carbon neutral fuel does **not** add extra carbon dioxide to the atmosphere.

Is biodiesel a carbon neutral fuel?

Use the bar chart and your knowledge to explain your answer.

.....
.....
.....
.....

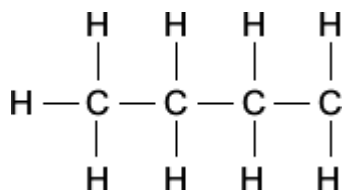
(2)

(Total 10 marks)

Q5. Crude oil is a mixture of hydrocarbons. Most of these hydrocarbons are alkanes.

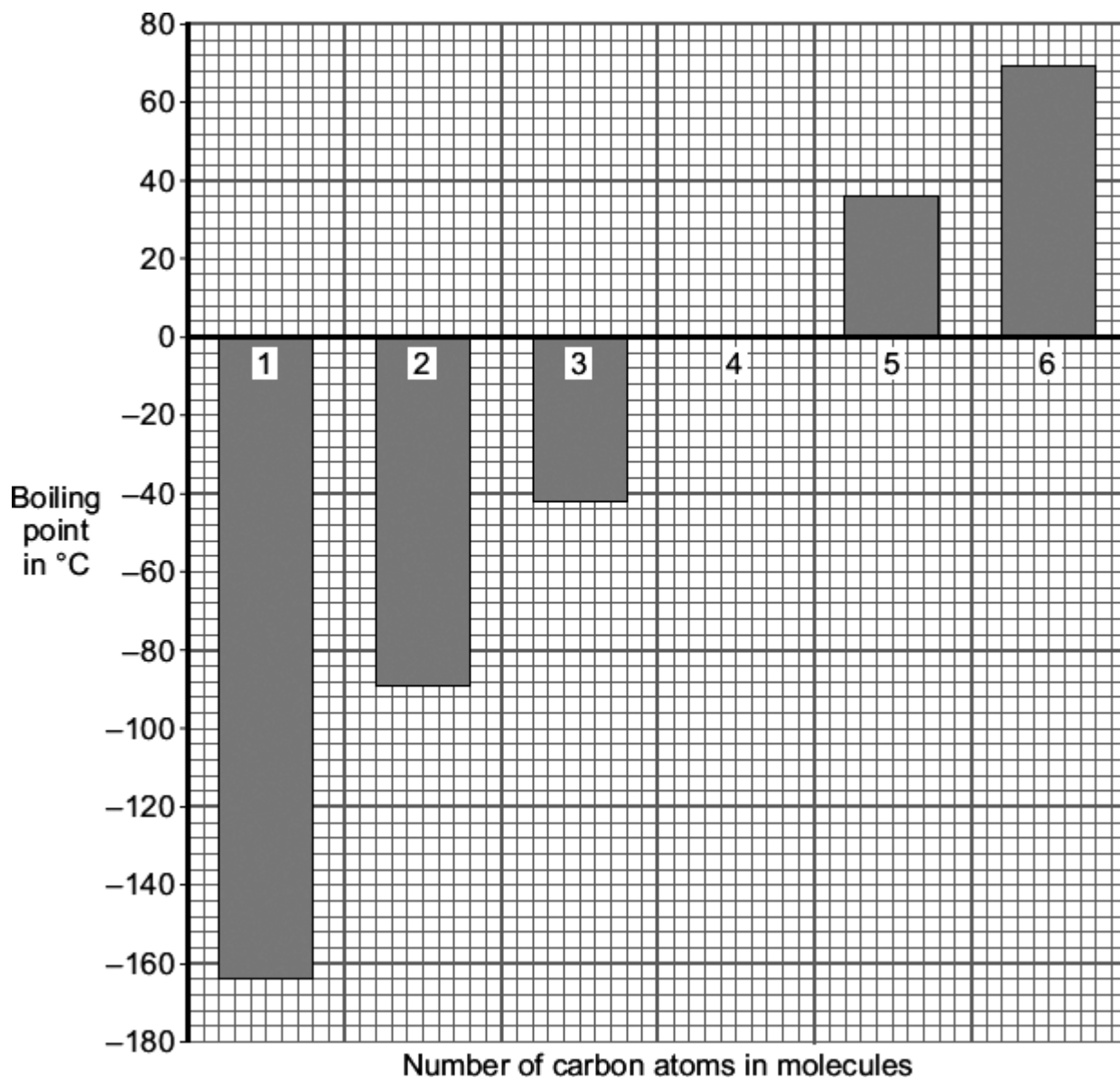
(a) The general formula of an alkane is C_nH_{2n+2}

Complete the structural formula for the alkane that has **six** carbon atoms in its molecules.



(1)

(b) The boiling points of alkanes are linked to the number of carbon atoms in their molecules.



- (i) Describe the link between the number of carbon atoms in an alkane molecule and its boiling point.

.....
.....

(1)

- (ii) Suggest **two** reasons why all of the alkanes in the bar chart are better fuels than the alkane with the formula $C_{30}H_{62}$

1

.....

2

.....

(2)


- (c) During the last 200 million years the carbon cycle has maintained the percentage of carbon dioxide in the atmosphere at about 0.03 %.

Over the last 100 years the percentage of carbon dioxide in the atmosphere has increased to about 0.04 %.

Most of this increase is caused by burning fossil fuels to heat buildings, to generate electricity and to power our transport.

Fossil fuels contain carbon that has been locked up for millions of years.

- (i) Burning fossil fuels, such as petrol, releases this locked up carbon. Balance the chemical equation for the combustion of one of the alkanes in petrol.



(1)

- (ii) Where did the carbon that is locked up in fossil fuels come from?

.....

.....

(1)

- (iii) The burning of fossil fuels has caused the percentage of carbon dioxide in the atmosphere to increase to above 0.03 %.
Explain why.

.....

.....

.....

.....

.....

.....

(2)
(Total 8 marks)

Q6. Many human activities result in carbon dioxide emissions.
Our carbon footprint is a measure of how much carbon dioxide we each cause to be produced.

(a) Why should we be concerned about our carbon footprint?

.....
.....
.....

(1)

(b) Most power stations in the UK burn coal.
Coal was formed from tree-like plants over millions of years.

Suggest why burning wood instead of coal would help to reduce our carbon footprint.

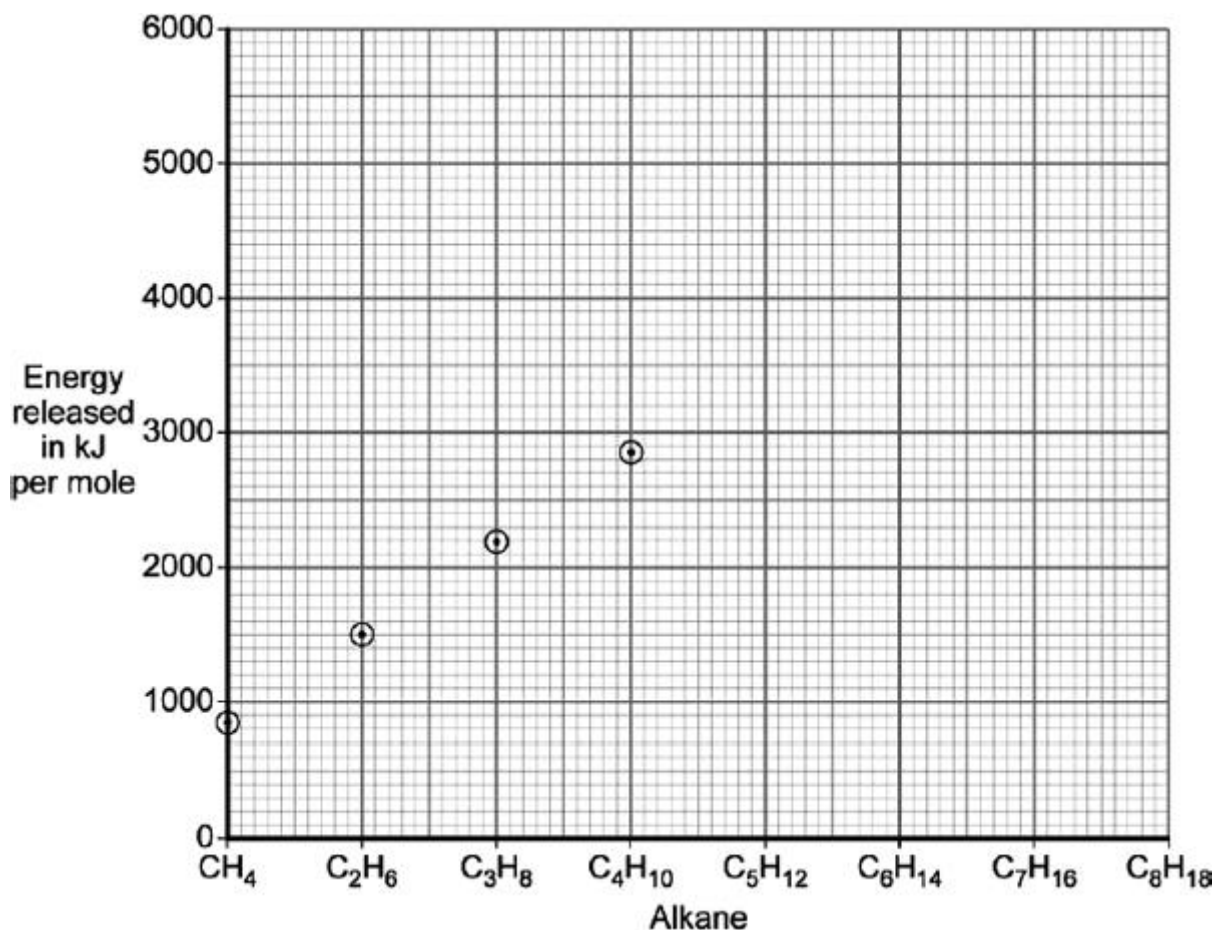
.....
.....
.....
.....
.....
.....
.....
.....
.....

(3)

(Total 4 marks)

Q7. (a) Alkanes are important hydrocarbon fuels. They have the general formula C_nH_{2n+2}

The points on the graph show the amount of energy released when 1 mole of methane (CH_4), ethane (C_2H_6), propane (C_3H_8) and butane (C_4H_{10}) are burned separately.



(i) Draw a line through the points and extend your line to the right-hand edge of the graph.

(1)

(ii) Use the graph to estimate the amount of energy released when 1 mole of octane (C_8H_{18}) is burned.

Energy released = kJ

(1)

(iii) Suggest why we can make a good estimate for the energy released by 1 mole of pentane (C_5H_{12}).

.....

(1)

- (iv) A student noticed that octane (C₈H₁₈) has twice as many carbon atoms as butane (C₄H₁₀), and made the following prediction:

“When burned, 1 mole of octane releases twice as much energy as 1 mole of butane.”

Use the graph to decide if the student’s prediction is correct. You **must** show your working to gain credit.

.....

(2)

- (b) Some information about four fuels is given in the table.

Fuel	Type	Heat released in kJ per g	Combustion products			Type of flame
			CO ₂	SO ₂	H ₂ O	
Bio-ethanol	Renewable	29	✓		✓	Not smoky
Coal	Non-renewable	31	✓	✓	✓	Smoky
Hydrogen	Renewable	142			✓	Not smoky
Natural gas	Non-renewable	56	✓		✓	Not smoky

From this information a student made two conclusions.

For each conclusion, state if it is correct **and** explain your answer.

- (i) “Renewable fuels release more heat per gram than non-renewable fuels.”

.....
.....
.....
.....

(2)

(ii) "Non-renewable fuels are better for the environment than renewable fuels."

.....
.....
.....
.....
.....
.....
.....
.....

(2)

(Total 9 marks)