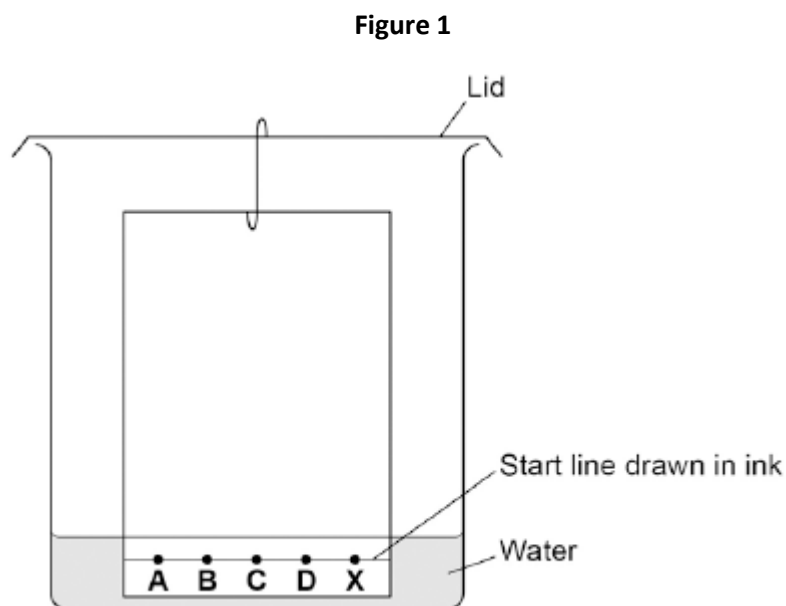


Q1. A student investigated food dyes using paper chromatography.

This is the method used.

1. Put a spot of food colouring **X** on the start line.
2. Put spots of four separate dyes, **A**, **B**, **C** and **D**, on the start line.
3. Place the bottom of the paper in water and leave it for several minutes.

Figure 1 shows the apparatus the student used.



- (a) Write down **two** mistakes the student made in setting up the experiment and explain what problems one of the mistakes would cause.

.....

.....

.....

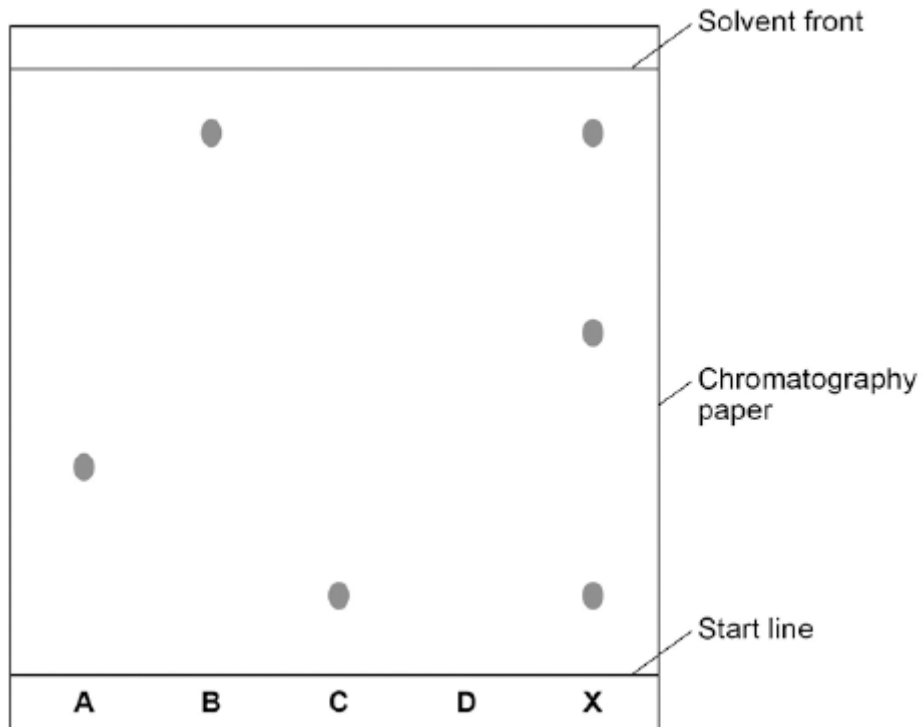
.....

(2)

- (b) Another student set up the apparatus correctly.

Figure 2 shows the student's results. The result for dye **D** is not shown.

Figure 2



Calculate the R_f value of dye **A**

Give your answer to two significant figures.

.....

.....

.....

.....

R_f value =

(3)

(c) Dye **D** has an R_f value of 0.80. Calculate the distance that dye **D** moved on the chromatography paper.

.....

.....

Distance moved by dye **D** =

(1)

(d) Explain how the different dyes in X are separated by paper chromatography.

.....

.....

.....

.....

.....

.....

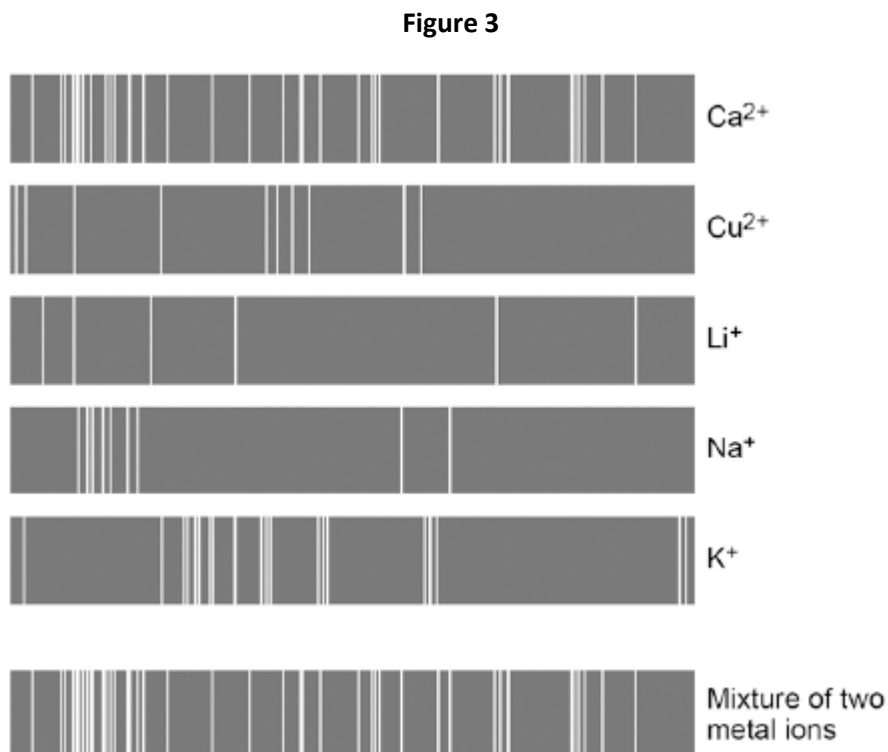
.....

.....

(4)

(e) Flame emission spectroscopy can be used to analyse metal ions in solution.

Figure 3 gives the flame emission spectra of five metal ions, and of a mixture of two metal ions.



Use the spectra to identify the **two** metal ions in the mixture.

.....
.....

(2)

(f) Explain why a flame test could **not** be used to identify the two metal ions in the mixture.

.....
.....
.....
.....

(2)

(g) Two students tested a green compound **X**.
The students added water to compound **X**.
Compound **X** did not dissolve.

The students then added a solution of ethanoic acid to compound **X**.
A gas was produced which turned limewater milky.

Student **A** concluded that compound **X** was sodium carbonate.
Student **B** concluded that compound **X** was copper chloride.

Which student, if any, was correct?

Explain your reasoning.

.....
.....
.....
.....
.....
.....
.....
.....
.....

(4)

(Total 18 marks)

Q2. This is part of an article about food additives.

THE PERIL OF FOOD ADDITIVES

Some orange drinks contain the additives E102 (Tartrazine), E104 (Quinoline Yellow) and E110 (Sunset Yellow). These three coloured additives are thought to cause hyperactivity in children.

(a) State **two** reasons that a manufacturer might give to justify the use of these additives.

- 1
-
- 2
-

(2)

(b) Some scientists asked 4000 twelve-year-old children to help them investigate if there is a link between these three coloured additives and hyperactivity.

How would the scientists use these 4000 children to investigate if there is a link between these three coloured additives and hyperactivity in children?

-
-
-
-
-
-
-
-

(4)

(c) A manufacturer used an independent scientist to show that their orange drink did not contain these three coloured additives.

(i) Suggest why the manufacturer would use a scientist who was independent instead of using their own scientist.

.....
.....

(1)

(ii) The scientist had samples of E102, E104 and E110 and the orange drink. The scientist used paper chromatography for the test.

Describe how the scientist could use the results to show if the orange drink contained any of these three coloured additives.

You may include a diagram of the paper chromatography results.

.....
.....
.....
.....
.....
.....

(2)

(Total 9 marks)