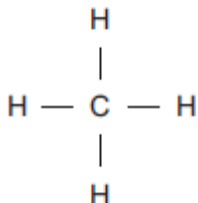


**Q1.** Methane (CH<sub>4</sub>) is used as a fuel.

(a) The displayed structure of methane is:



Draw a ring around a part of the displayed structure that represents a covalent bond.

(1)

(b) Why is methane a compound?

Tick (✓) **one** box.

Methane contains atoms of two elements, combined chemically.

Methane is not in the periodic table.

Methane is a mixture of two different elements.

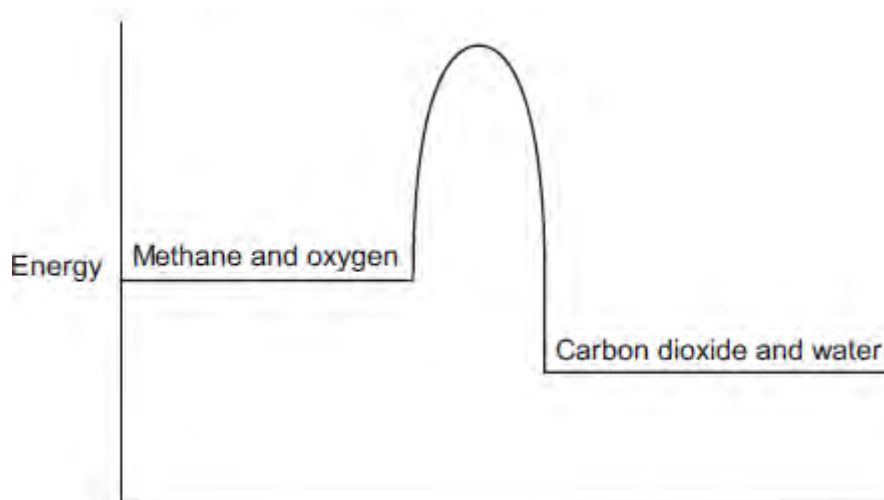
(1)

(c) Methane burns in oxygen.

(i) The diagram below shows the energy level diagram for the complete combustion of methane.

Draw and label arrows on the diagram to show:

- the activation energy
- the enthalpy change,  $\Delta H$ .



(2)

(ii) Complete and balance the symbol equation for the complete combustion of methane.



(2)

(iii) Explain why the **incomplete** combustion of methane is dangerous.

.....

.....

.....

.....

(2)

(iv) Explain why, in terms of the energy involved in bond breaking and bond making, the combustion of methane is exothermic.

.....

.....

.....

.....

.....  
.....

(3)

(d) Methane reacts with chlorine in the presence of sunlight.

The equation for this reaction is:



Some bond dissociation energies are given in the table.

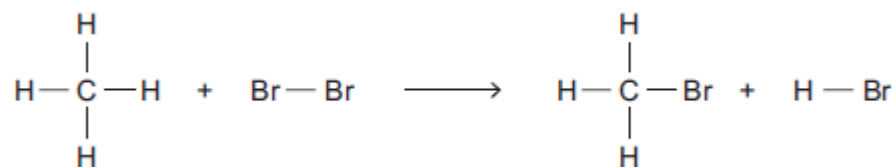
Bond	Bond dissociation energy in kJ per mole
C-H	413
C-Cl	327
Cl-Cl	243
H-Cl	432

(i) Show that the enthalpy change,  $\Delta H$ , for this reaction is  $-103$  kJ per mole.

.....  
.....  
.....  
.....  
.....  
.....

(3)

(ii) Methane also reacts with bromine in the presence of sunlight.



This reaction is less exothermic than the reaction between methane and chlorine.

The enthalpy change,  $\Delta H$ , is  $-45$  kJ per mole.

What is a possible reason for this?

Tick (✓) **one** box.

$\text{CH}_3\text{Br}$  has a lower boiling point than  $\text{CH}_3\text{Cl}$

The C-Br bond is weaker than the C-Cl bond.

The H-Cl bond is weaker than the H-Br bond.

Chlorine is more reactive than bromine.

(1)  
(Total 15 marks)

**Q2.**Crude oil is a fossil fuel.

(a) Describe how crude oil is separated into fractions.

.....

.....

.....

.....

.....

.....

.....

.....

.....

.....

.....

**(4)**

(b) Fuel oil is one of the fractions from crude oil.

Power stations burn fuel oil to generate electricity. The waste gases from the combustion of fuel oil contain carbon dioxide, water vapour, sulfur dioxide and oxides of nitrogen.

The waste gases are passed through a suspension of limestone in water. Limestone is mainly calcium carbonate.

Suggest how the use of a suspension of limestone decreases one of the environmental impacts that the waste gases would cause.

.....

.....

.....

.....

.....

.....

.....

.....

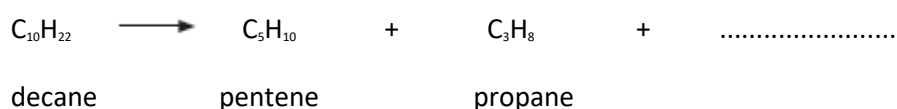
(3)

(c) Some fractions from crude oil contain large hydrocarbon molecules.

(i) Hydrocarbon molecules, such as decane, can be cracked to produce smaller, more useful molecules.

Write the correct formula of the third product to complete the chemical equation.

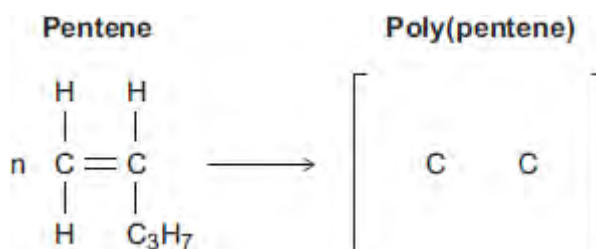
You do not need to give the name of this product.



(1)

(ii) Pentene is used to produce poly(pentene).

Complete the equation and the displayed structure of poly(pentene).



(3)

(iii) Some polymers are described as smart polymers.

Suggest **one** property of a smart polymer that is different to that of an ordinary polymer.

.....  
.....

(1)

(Total 12 marks)

**Q3.** Scientists study the atmosphere on planets and moons in the Solar System to understand how the Earth's atmosphere has changed.

- (a) Millions of years ago the Earth's atmosphere was probably just like that of Mars today.

The table shows data about the atmosphere of Mars and Earth today.

Mars today		Earth today	
nitrogen	3%	nitrogen	78%
oxygen	trace	oxygen	21%
water	trace	water	trace
Carbon dioxide	95%	Carbon dioxide	trace
Average surface temperature $-23^{\circ}\text{C}$		Average surface temperature $15^{\circ}\text{C}$	

The percentages of some gases in the Earth's atmosphere of millions of years ago have changed to the percentages in the Earth's atmosphere today.

For **two** of these gases describe how the percentages have changed **and** suggest what caused this change.

.....

.....

.....

.....

(2)

- (b) Titan is the largest moon of the planet Saturn.  
Titan has an atmosphere that contains mainly nitrogen.  
Methane is the other main gas.

Main gases in Titan's atmosphere	Percentage (%)	Boiling point in $^{\circ}\text{C}$
Nitrogen	95	$-196$
Methane	5	$-164$

Average surface temperature  $-178^{\circ}\text{C}$

When it rains on Titan, it rains methane!

Use the information above and your knowledge and understanding to explain why.

.....  
.....  
.....  
.....  
.....  
.....

(2)

- (c) Ultraviolet radiation from the Sun produces simple alkenes, such as ethene ( $\text{C}_2\text{H}_4$ ) and propene ( $\text{C}_3\text{H}_6$ ) from methane in Titan's atmosphere.

State the general formula for alkenes.

.....

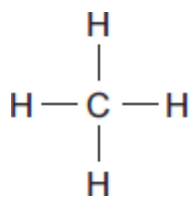
(1)

(Total 5 marks)



**Q4.** Saturated hydrocarbons, for example methane and octane, are often used as fuels.

(a) Methane can be represented as:



(i) The formula of methane is .....

(1)

(ii) Draw a ring around the correct answer to complete the sentence.

In a saturated hydrocarbon molecule all of the bonds are

double.
ionic.
single.

(1)

(iii) Draw a ring around the correct answer to complete the sentence.

The homologous series that contains methane and octane is called the

alcohols.
alkanes.
alkenes.

(1)

(b) (i) The complete combustion of petrol produces carbon dioxide, water vapour and sulfur dioxide.

Name **three** elements petrol must contain.

1 .....

2 .....

3 .....

(3)

(ii) The exhaust gases from cars can contain oxides of nitrogen.

Complete the sentence.

Nitrogen in the oxides of nitrogen comes from .....

(1)

(iii) The sulfur dioxide and oxides of nitrogen from cars cause an environmental problem.

Name the problem and describe **one** effect of the problem.

Name of problem .....

Effect of problem .....

.....

(2)

(c) When a fuel burns without enough oxygen, there is incomplete combustion.

One gaseous product of incomplete combustion is carbon monoxide.

Name **one** solid product of incomplete combustion.

.....

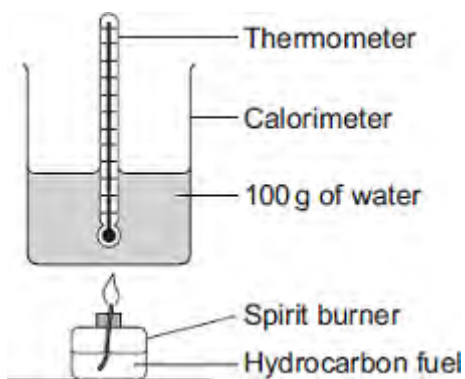
(1)

(d) A student investigated how well different hydrocarbon fuels would heat up 100 g of water.

Her hypothesis was:

<b>The more carbon atoms there are in a molecule of any fuel, the better the fuel is.</b>
---

The apparatus the student used is shown in the diagram.



She burned each hydrocarbon fuel for 2 minutes.

Her results are shown in the table.

Name of hydrocarbon fuel	Number of carbon atoms in a molecule of hydrocarbon fuel	Temperature change of water in °C after 2 minutes	Temperature change per g of fuel burned	Observations
Pentane	5	30	60	no smoke
Hexane	6	40	57	very small amount of smoke
Octane	8	55	55	small amount of smoke
Decane	10	57	52	large amount of smoke
Dodecane	12	60	43	very large amount of smoke

The student investigated only hydrocarbons.

Look carefully at her results.

How well do the student's results support her hypothesis?

**The more carbon atoms there are in a molecule of any fuel, the better the fuel is.**

Give reasons for your answer.

.....  
.....  
.....  
.....  
.....  
.....  
.....  
.....  
.....  
.....  
.....  
.....  
.....  
.....  
.....  
.....  
.....  
.....  
.....  
.....  
.....

(4)

(e) A 0.050 mol sample of a hydrocarbon was burned in excess oxygen.

The products were 3.60 g of water and 6.60 g of carbon dioxide.

(i) Calculate the number of moles of carbon dioxide produced.

Relative atomic masses: C = 12; O = 16.

.....  
.....

Moles of carbon dioxide = .....

(2)

(ii) When the hydrocarbon was burned 0.20 mol of water were produced.

How many moles of hydrogen atoms are there in 0.20 mol of water?

.....

Moles of hydrogen atoms = .....

(1)

(iii) The amount of hydrocarbon burned was 0.050 mol.

Use this information and your answers to parts **(e) (i)** and **(e) (ii)** to calculate the molecular formula of the hydrocarbon.

If you could not answer parts **(e) (i)** or **(e) (ii)** use the values of 0.20 moles carbon dioxide and 0.50 moles hydrogen. These are **not** the answers to parts **(e) (i)** and **(e) (ii)**.

.....  
.....  
.....  
.....

Formula = .....

(2)

(Total 19 marks)