

Please check the examination details below before entering your candidate information

Candidate surname					Other names				
Centre Number					Candidate Number				
<input type="text"/>	<input type="text"/>	<input type="text"/>	<input type="text"/>	<input type="text"/>	<input type="text"/>	<input type="text"/>	<input type="text"/>	<input type="text"/>	<input type="text"/>

Pearson Edexcel International GCSE (9–1)

Time 2 hours

Paper reference **4CH1/1C 4SD0/1C**

Chemistry

UNIT: 4CH1

Science (Double Award) 4SD0

PAPER: 1C

You must have:
Calculator, ruler

Total Marks

Instructions

- Use **black** ink or ball-point pen.
- If pencil is used for diagrams/sketches/graphs it must be dark (HB or B).
- **Fill in the boxes** at the top of this page with your name, centre number and candidate number.
- Answer **all** questions.
- Answer the questions in the spaces provided
– *there may be more space than you need.*
- Show all the steps in any calculations and state the units.

Information

- The total mark for this paper is 110.
- The marks for **each** question are shown in brackets
– *use this as a guide as to how much time to spend on each question.*

Advice

- Read each question carefully before you start to answer it.
- Write your answers neatly and in good English.
- Try to answer every question.
- Check your answers if you have time at the end.

Turn over ►

P71892A

©2023 Pearson Education Ltd.

J:1/1/1/1/1/1/




Pearson

The Periodic Table of the Elements

1	2	3	4	5	6	7	0										
7 Li lithium 3	9 Be beryllium 4	11 Na sodium 11	12 Mg magnesium 12	13 Al aluminium 13	14 N nitrogen 7	15 P phosphorus 15	16 S sulfur 16	17 Cl chlorine 17	18 Ar argon 18								
19 K potassium 19	20 Ca calcium 20	21 Sc scandium 21	22 Ti titanium 22	23 V vanadium 23	24 Cr chromium 24	25 Mn manganese 25	26 Fe iron 26	27 Co cobalt 27	28 Ni nickel 28	29 Cu copper 29	30 Zn zinc 30	31 Ga gallium 31	32 Ge germanium 32	33 As arsenic 33	34 Se selenium 34	35 Br bromine 35	36 Kr krypton 36
37 Rb rubidium 37	38 Sr strontium 38	39 Y yttrium 39	40 Zr zirconium 40	41 Nb niobium 41	42 Mo molybdenum 42	43 Tc technetium 43	44 Ru ruthenium 44	45 Rh rhodium 45	46 Pd palladium 46	47 Ag silver 47	48 Cd cadmium 48	49 In indium 49	50 Sn tin 50	51 Sb antimony 51	52 Te tellurium 52	53 I iodine 53	54 Xe xenon 54
55 Cs caesium 55	56 Ba barium 56	57 La* lanthanum 57	72 Hf hafnium 72	73 Ta tantalum 73	74 W tungsten 74	75 Re rhenium 75	76 Os osmium 76	77 Ir iridium 77	78 Pt platinum 78	79 Au gold 79	80 Hg mercury 80	81 Tl thallium 81	82 Pb lead 82	83 Bi bismuth 83	84 Po polonium 84	85 At astatine 85	86 Rn radon 86
[223] Fr francium 87	[226] Ra radium 88	[227] Ac* actinium 89	[261] Rf rutherfordium 104	[262] Db dubnium 105	[266] Sg seaborgium 106	[264] Bh bohrium 107	[277] Hs hassium 108	[268] Mt meitnerium 109	[271] Ds darmstadtium 110	[272] Rg roentgenium 111	Elements with atomic numbers 112–116 have been reported but not fully authenticated						

1	H
	hydrogen
	1

relative atomic mass
atomic symbol
name
atomic (proton) number

* The lanthanoids (atomic numbers 58–71) and the actinoids (atomic numbers 90–103) have been omitted.
The relative atomic masses of copper and chlorine have not been rounded to the nearest whole number.

DO NOT WRITE IN THIS AREA

DO NOT WRITE IN THIS AREA

DO NOT WRITE IN THIS AREA



DO NOT WRITE IN THIS AREA

DO NOT WRITE IN THIS AREA

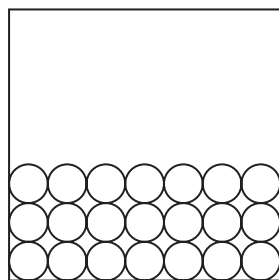
DO NOT WRITE IN THIS AREA

Answer ALL questions.


Some questions must be answered with a cross in a box ☒. If you change your mind about an answer, put a line through the box ☒ and then mark your new answer with a cross ☒.

1 This question is about the three states of matter, solid, liquid and gas.

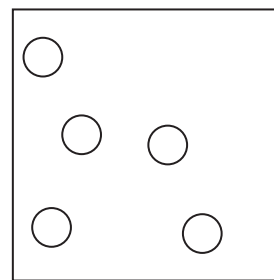
(a) The diagram shows how particles of a substance are arranged in two of these states.



solid



liquid



gas

(i) Complete the diagram to show how particles are arranged in the liquid state.

(1)

(ii) Identify the state of matter that contains particles with the least energy.

(1)

(b) The table shows two changes of state.

Complete the table by giving the name of each change of state.

(2)

Change of state	Name
solid to liquid	
solid to gas	

(c) Explain why hot water evaporates more quickly than cold water.

(2)

.....

.....

.....

.....

(Total for Question 1 = 6 marks)



P 7 1 8 9 2 A 0 3 2 8

2 This question is about elements, mixtures and compounds.

(a) Which of these is the formula of a molecule of an element?

(1)

- A O
- B Cl₂
- C HCl
- D H₂O

(b) Which method can be used to separate an insoluble solid from a liquid?

(1)


- A crystallisation
- B evaporation
- C filtration
- D simple distillation

(c) Give the name of a method used to separate a mixture of liquids with different boiling points.


(1)

(d) A student adds a crystal of substance X to some water in a beaker and leaves the beaker for one day.

The diagram shows the beaker immediately after adding the crystal, and after one day.



immediately after
adding crystal



after one day

DO NOT WRITE IN THIS AREA

DO NOT WRITE IN THIS AREA

DO NOT WRITE IN THIS AREA



(i) Which equation gives the correct state symbols for a process that occurs in the beaker? (1)

- A $X(s) \rightarrow X(l)$
- B $X(s) \rightarrow X(g)$
- C $X(aq) \rightarrow X(s)$
- D $X(s) \rightarrow X(aq)$

(ii) Which other process occurs in the beaker? (1)

- A boiling
- B condensing
- C diffusion
- D sublimation

(iii) After one day the student does two tests on the liquid in the beaker.

The table shows the student's results.

Test	Result
flame test	lilac flame
addition of acidified barium chloride solution	white precipitate

Identify substance X. (2)

(Total for Question 2 = 7 marks)

DO NOT WRITE IN THIS AREA

DO NOT WRITE IN THIS AREA

DO NOT WRITE IN THIS AREA



P 7 1 8 9 2 A 0 5 2 8

3 This question is about gases.

(a) (i) Name the gas that is about 1% of dry air by volume.

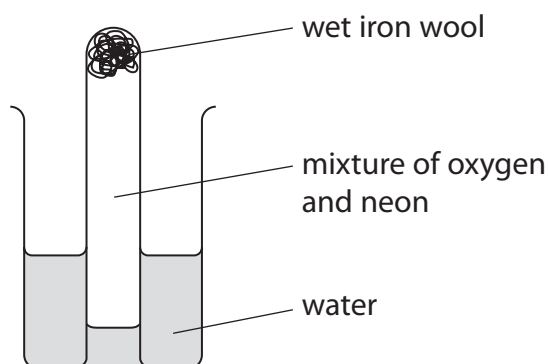
(1)

(ii) Which is the most abundant gas in dry air by volume?

(1)

- A carbon dioxide
- B methane
- C nitrogen
- D oxygen

(b) A student uses this apparatus to find the percentage by volume of oxygen in a mixture of oxygen and neon.



This is the student's method.

- measure the initial length of the column of gas in the inverted test tube
- leave the test tube in the beaker for a week
- measure the final length of the column of gas in the test tube

DO NOT WRITE IN THIS AREA

DO NOT WRITE IN THIS AREA

DO NOT WRITE IN THIS AREA



- (i) Some of the iron wool rusts.

Give the chemical name for rust.

(1)

- (ii) Give a reason why neon does not react with the iron wool.

(1)

- (iii) The table shows the student's results.

initial length of column of gas	75 mm
final length of column of gas	30 mm

Use the results to calculate the percentage of oxygen in the mixture of oxygen and neon.

(2)

percentage of oxygen =%

(Total for Question 3 = 6 marks)

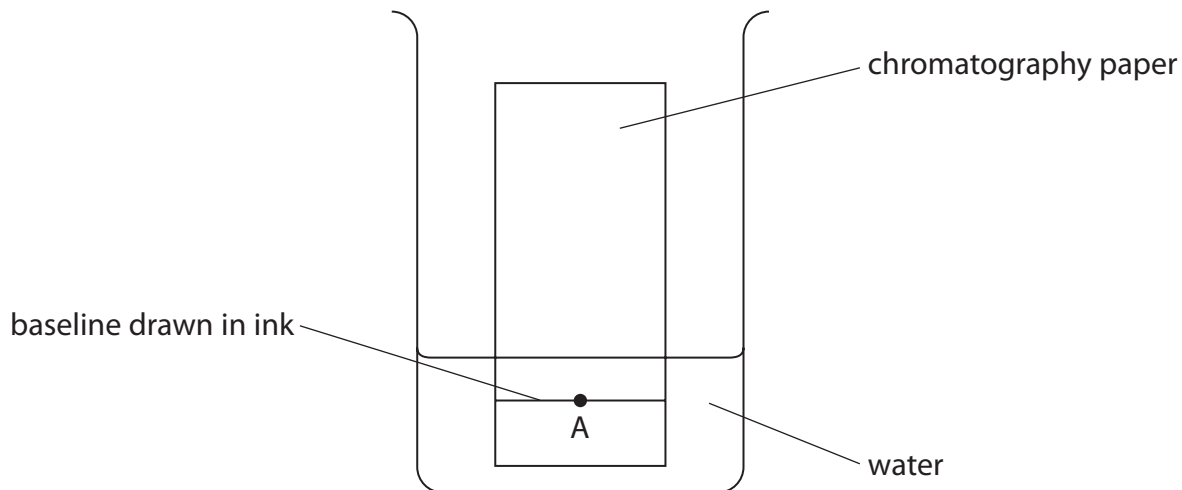
DO NOT WRITE IN THIS AREA

DO NOT WRITE IN THIS AREA

DO NOT WRITE IN THIS AREA



4 A student uses this apparatus to investigate the dyes in a food colouring A.



DO NOT WRITE IN THIS AREA

DO NOT WRITE IN THIS AREA

DO NOT WRITE IN THIS AREA

(a) Explain two mistakes that the student makes when setting up the apparatus.

(4)

1

.....

.....

.....

2

.....

.....

.....




(b) The student repeats the experiment, but with no mistakes.

The table shows the R_f values for the two dyes in food colouring A.

Dye	R_f value
blue	0.50
yellow	0.25

(i) Complete the chromatogram for food colouring A by adding and labelling the dyes.

(2)



(ii) Give a reason why the blue dye has a larger R_f value than the yellow dye.

(1)

(Total for Question 4 = 7 marks)

DO NOT WRITE IN THIS AREA

DO NOT WRITE IN THIS AREA

DO NOT WRITE IN THIS AREA



5 A student investigates the reactivities of four metals, aluminium, magnesium, copper and metal X.

- (a) The student adds pieces of magnesium ribbon to aqueous solutions of the sulfates of each metal.

After a few minutes the student removes the pieces of magnesium ribbon and records the appearance of each piece of magnesium.

Table 1 shows the student's results.

Solution	Appearance
aluminium sulfate	grey coating on magnesium
magnesium sulfate	no change
copper(II) sulfate	brown coating on magnesium
sulfate of metal X	grey coating on magnesium

Table 1

- (i) Name the substance that causes the brown coating on the magnesium.

(1)

- (ii) State why there is no change with magnesium sulfate solution.

(1)

DO NOT WRITE IN THIS AREA

DO NOT WRITE IN THIS AREA

DO NOT WRITE IN THIS AREA



- (b) The student repeats the experiment with pieces of metal X instead of pieces of magnesium.

Table 2 shows the student's results.

Solution	Appearance
aluminium sulfate	no change
magnesium sulfate	no change
copper(II) sulfate	brown coating on metal X
sulfate of metal X	no change

Table 2

- (i) Use the information from both tables to deduce the order of reactivity of aluminium, magnesium, copper and metal X.

(2)

most reactive

.....


.....

least reactive

- (ii) Give a possible identity for metal X.

(1)

- (c) This ionic equation represents the reaction between magnesium and aluminium nitrate.



Explain, in terms of electrons, which species acts as a reducing agent in this reaction.

(2)

(Total for Question 5 = 7 marks)

DO NOT WRITE IN THIS AREA

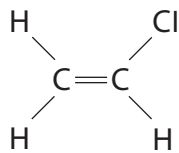
DO NOT WRITE IN THIS AREA

DO NOT WRITE IN THIS AREA



6 This question is about polymers.

(a) This is the structure of a monomer.

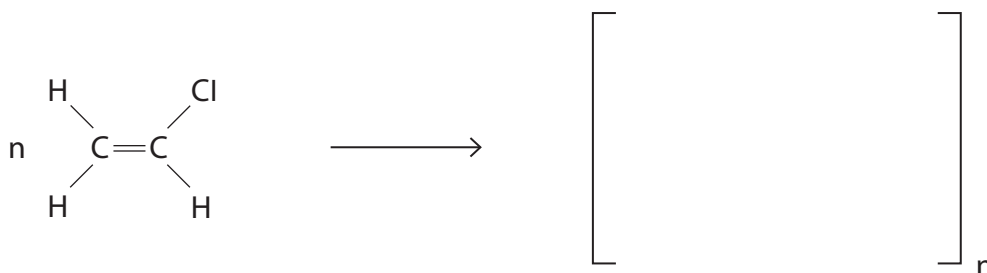


What is the name of this monomer?

- A chloroethane
- B chloroethene
- C chloropropane
- D chloropropene

(1)

(b) Complete the equation to show the repeat unit of the polymer that forms from this monomer.



(1)

(c) A typical molecule of the polymer has a relative molecular mass (M_r) of 2 490 000

Show that the number of monomer molecules needed to make this typical molecule is about 40 000

[for C, $A_r = 12$ for Cl, $A_r = 35.5$]

(2)

DO NOT WRITE IN THIS AREA

DO NOT WRITE IN THIS AREA

DO NOT WRITE IN THIS AREA



7 The table shows the displayed formulae of some organic compounds.

<p>V</p> <pre> H H H H H H H H H — C — C — C — C — C — C — C — H H H H H H H H H </pre>			<p>W</p> <pre> H H H — C — C — H H — C — C — H H H </pre>
<p>X</p> <pre> H H H H H — C — C — C — C — O — H H H H H </pre>	<p>Y</p> <pre> H H H H \ C = C — C — C — H / H H H </pre>	<p>Z</p> <pre> H H H H H — C — C — C — C — H H H H H </pre>	

(a) Give a reason why compound **X** is **not** a hydrocarbon.

(1)

(b) Give the letter of the compound that is a saturated hydrocarbon with the empirical formula CH_2

(1)

(c) Give the letter of the compound that produces nine moles of water when one mole undergoes complete combustion.

(1)

(d) Give the structural formula of compound **Y**.

(1)

DO NOT WRITE IN THIS AREA

DO NOT WRITE IN THIS AREA

DO NOT WRITE IN THIS AREA



(e) Explain why compounds **W** and **Y** are isomers.

(2)

(f) Compound **Z** reacts with bromine in the presence of ultraviolet radiation.

(i) Write a chemical equation for this reaction.

(2)

(ii) What is the name for this type of reaction?

(1)

- A** addition
- B** combustion
- C** substitution
- D** thermal decomposition

(g) Describe how the combustion of sulfur-free petrol in a car engine produces gases that can cause acid rain.

Do not refer to carbon dioxide in your answer.

(3)

(Total for Question 7 = 12 marks)

DO NOT WRITE IN THIS AREA

DO NOT WRITE IN THIS AREA

DO NOT WRITE IN THIS AREA



P 7 1 8 9 2 A 0 1 5 2 8

8 This question is about ionic compounds.

(a) The table gives the formulae of some positive and negative ions, and the formulae of some compounds containing these ions.

	Na^+	Mg^{2+}
Cl^-		
O^{2-}	Na_2O	MgO
N^{3-}	Na_3N	

(i) Complete the table by giving the missing formulae. (3)

(ii) Give the name of the compound with the formula MgO (1)

(iii) Calculate the relative formula mass (M_r) of Na_3N
 [for Na, $A_r = 23$ for N, $A_r = 14$] (1)

$M_r = \dots\dots\dots$

DO NOT WRITE IN THIS AREA

DO NOT WRITE IN THIS AREA

DO NOT WRITE IN THIS AREA

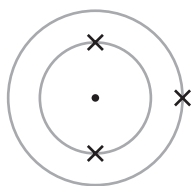


DO NOT WRITE IN THIS AREA

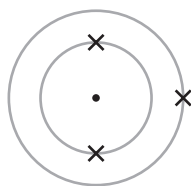
DO NOT WRITE IN THIS AREA

DO NOT WRITE IN THIS AREA

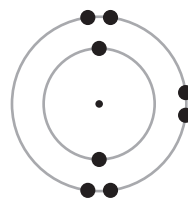
(b) The diagram shows the arrangement of electrons in atoms of lithium and in an atom of oxygen.



lithium atom



lithium atom



oxygen atom

(i) Describe the changes in the electron configurations of lithium and oxygen when these atoms form lithium oxide, Li_2O

(2)

.....

.....

.....

.....

.....

.....

.....

.....

(ii) Lithium oxide has a giant ionic structure.

Explain why lithium oxide has a high melting point.

(3)

.....

.....

.....

.....

.....

.....

.....

.....

.....

.....

.....

.....

.....

.....

.....

.....

.....

.....

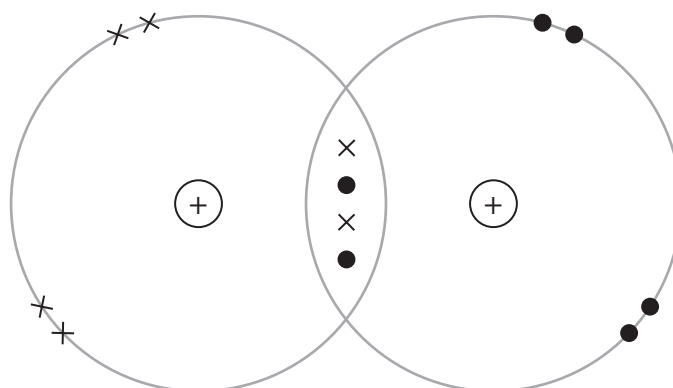
(Total for Question 8 = 10 marks)



P 7 1 8 9 2 A 0 1 7 2 8

9 This question is about substances that contain covalent bonds.

(a) The diagram represents a molecule of oxygen.



Describe the forces of attraction in a covalent bond.

(2)

.....

.....

.....

.....

(b) The table shows the boiling points of three Group 7 elements.

	Boiling point in °C
fluorine	-188
chlorine	-34
bromine	59

Explain the trend in the boiling points.

(3)

.....

.....

.....

.....

.....

.....



(c) Graphite is a naturally-occurring form of carbon.

Explain why graphite is soft and conducts electricity.

Refer to structure and bonding in your answer.

(5)

DO NOT WRITE IN THIS AREA

DO NOT WRITE IN THIS AREA

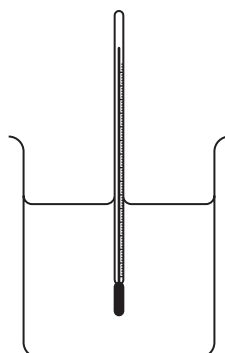
DO NOT WRITE IN THIS AREA

Area with horizontal dotted lines for writing the answer.

(Total for Question 9 = 10 marks)



- 10 A student uses this apparatus to record the maximum temperature in the reaction between solutions of hydrochloric acid and sodium hydroxide.



This is the student's method.

- add 25 cm^3 of hydrochloric acid to the beaker
- add 25 cm^3 of sodium hydroxide solution to the beaker
- stir the mixture
- record the maximum temperature reached

(a) Name a suitable piece of apparatus to add 25 cm^3 of solution to the beaker.

(1)

DO NOT WRITE IN THIS AREA

DO NOT WRITE IN THIS AREA

DO NOT WRITE IN THIS AREA



(b) Before the reaction, both solutions have a temperature of 21.0°C.

The heat energy change, Q , for the reaction is 2880 J.

- (i) Calculate the theoretical maximum temperature reached by the mixture, which has a mass of 50 g.

[specific heat capacity of mixture, $c = 4.2 \text{ J/g/}^\circ\text{C}$]

(4)

temperature = °C

- (ii) Give a reason why the maximum temperature recorded by the student is lower than the theoretical maximum temperature calculated.

(1)

- (iii) In the reaction, 0.0500 mol of hydrochloric acid completely react.

Calculate the molar enthalpy change, ΔH , in kilojoules per mole of hydrochloric acid.

Include a sign in your answer.

(3)

$\Delta H = \dots\dots\dots$ kJ/mol

(Total for Question 10 = 9 marks)

DO NOT WRITE IN THIS AREA

DO NOT WRITE IN THIS AREA

DO NOT WRITE IN THIS AREA




P 7 1 8 9 2 A 0 2 1 2 8

11 This question is about the reaction between magnesium and dilute nitric acid.

- (a) A student reacts dilute nitric acid with an excess of magnesium powder as a first step in the preparation of dry crystals of hydrated magnesium nitrate.

This is the equation for the reaction.



- (i) Explain why it is important that magnesium is in excess.

(2)

.....

.....

.....

.....

- (ii) The student adds 0.75 g of magnesium to 0.025 mol of nitric acid.

Calculate the mass of magnesium, in grams, that remains at the end of the reaction.

[for magnesium, $A_r = 24$]

(3)

mass of magnesium = g

DO NOT WRITE IN THIS AREA

DO NOT WRITE IN THIS AREA

DO NOT WRITE IN THIS AREA



(iii) Describe how the student can obtain dry crystals of hydrated magnesium nitrate from the mixture at the end of the reaction.

(5)

DO NOT WRITE IN THIS AREA

DO NOT WRITE IN THIS AREA

DO NOT WRITE IN THIS AREA

Area for writing the answer, consisting of multiple horizontal dotted lines.



P 7 1 8 9 2 A 0 2 3 2 8

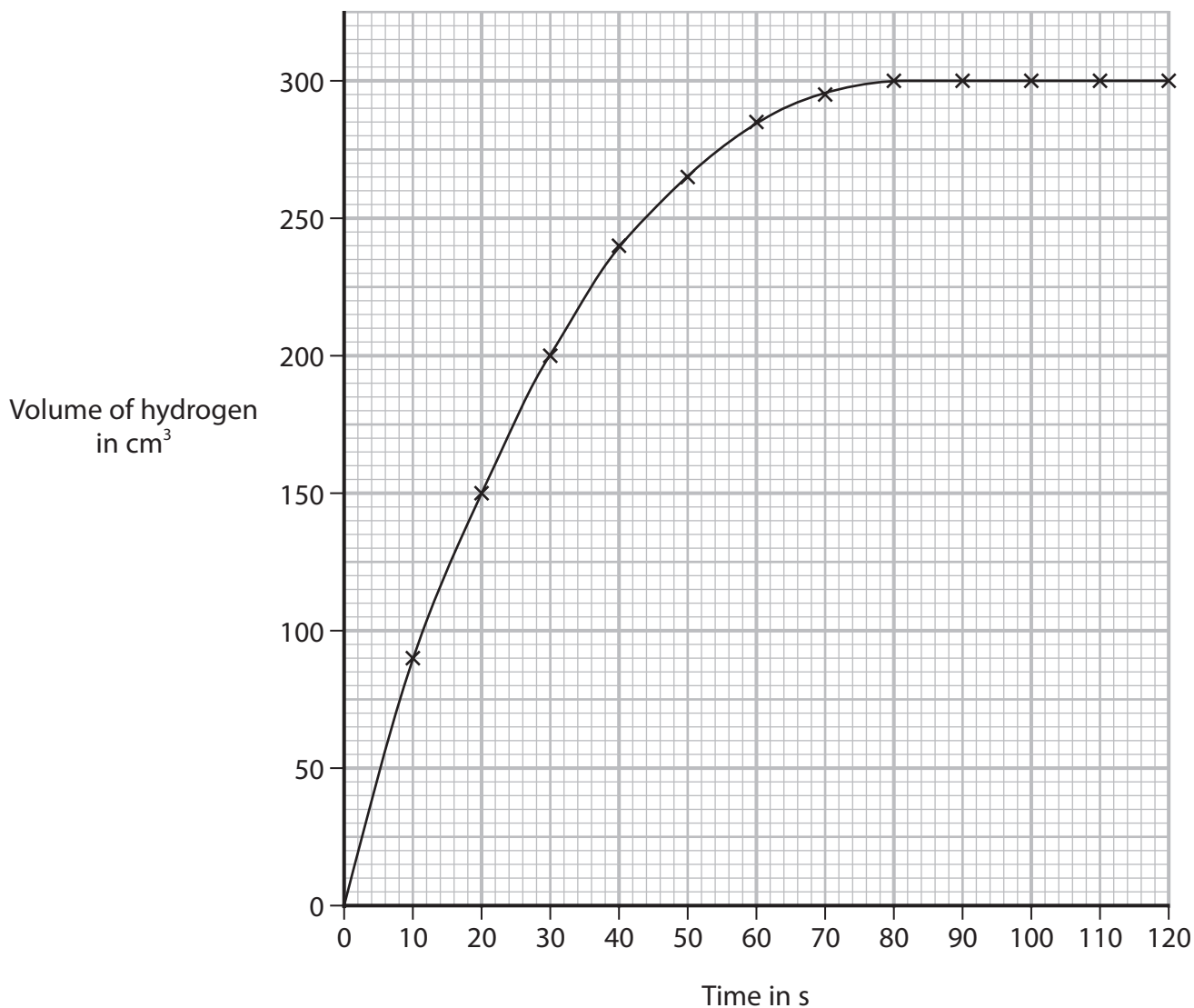
DO NOT WRITE IN THIS AREA

DO NOT WRITE IN THIS AREA

DO NOT WRITE IN THIS AREA

(b) The student repeats the experiment and records the volume of hydrogen gas collected.

The graph shows the student's results.



Use the graph to calculate the rate of reaction, in cm³/s, at t = 40s.

Show your working on the graph.

(3)

rate of reaction = cm³/s

(Total for Question 11 = 13 marks)



DO NOT WRITE IN THIS AREA

DO NOT WRITE IN THIS AREA

DO NOT WRITE IN THIS AREA

BLANK PAGE

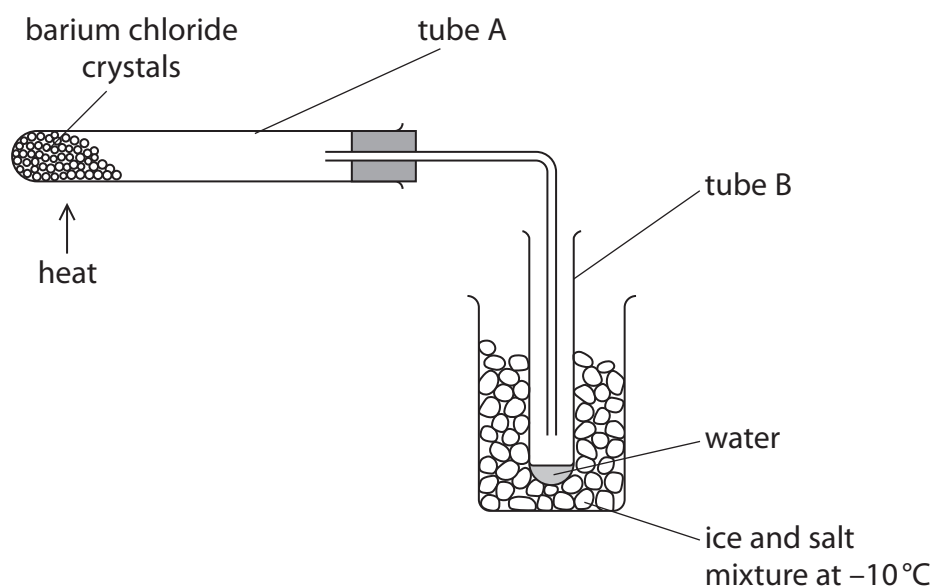


P 7 1 8 9 2 A 0 2 5 2 8

12 This question is about hydrated compounds.

Crystals of hydrated barium chloride ($\text{BaCl}_2 \cdot x\text{H}_2\text{O}$) contain water of crystallisation.

A student uses this apparatus to remove and collect the water from some crystals.



This is the student's method.

Step 1 record mass of tube A when empty

Step 2 place a sample of hydrated barium chloride crystals in tube A and record new mass

Step 3 heat tube A

Step 4 allow tube A to cool and record mass

Repeat steps 3 and 4 until the mass recorded in step 4 is constant.

These are the student's results.

mass of tube A = 10.55 g

mass of tube A and $\text{BaCl}_2 \cdot x\text{H}_2\text{O}$ = 16.65 g

final mass of tube A and BaCl_2 = 15.75 g

(a) (i) Give a reason why the student repeats steps 3 and 4 until the mass is constant.

(1)

DO NOT WRITE IN THIS AREA

DO NOT WRITE IN THIS AREA

DO NOT WRITE IN THIS AREA



(ii) Calculate the mass of BaCl_2 that forms in tube A.

(1)

(iii) Calculate the mass of water lost.

(1)

(iv) Determine the value of x in $\text{BaCl}_2 \cdot x\text{H}_2\text{O}$

Show your working.

[for BaCl_2 , $M_r = 208$ for H_2O , $M_r = 18$]

(3)

$x =$

(b) Describe a physical test to show that the water in tube B is pure.

(2)

QUESTION 12 CONTINUES ON NEXT PAGE



- (c) A sample containing 0.02 mol of hydrated copper(II) sulfate is heated using the same apparatus.

The products of the reaction are anhydrous copper(II) sulfate and water.

This is the equation for the reaction.



- (i) Give the meaning of the symbol \rightleftharpoons (1)

- (ii) Describe how the reaction can be used to show that a liquid contains water. (2)

- (iii) Calculate the maximum number of water molecules in tube B after the sample of hydrated copper(II) sulfate has completely reacted.

One mole of any substance contains 6×10^{23} particles. (2)

maximum number of molecules =

(Total for Question 12 = 13 marks)

TOTAL FOR PAPER = 110 MARKS

