

# **WJEC Chemistry A-level**

## **3.9: Acid-base Equilibria**

### **Practice Questions**

Wales Specification

1.

- (a) Write an expression for the ionic product of water,  $K_w$ , giving its units, if any. [2]

$$K_w =$$

Units .....

- (b) (i) The value for  $K_w$  at 298 K is  $1.0 \times 10^{-14}$ . Explain why the pH of pure water at this temperature has a value of 7. [2]

-----

-----

-----

- (ii) Calculate the pH of the final solution if  $10 \text{ cm}^3$  of  $0.10 \text{ mol dm}^{-3}$  hydrochloric acid is added to  $990 \text{ cm}^3$  of pure water. [2]

pH = .....

- (c) Calculate the pH of a solution which is  $0.010 \text{ mol dm}^{-3}$  with respect to ethanoic acid and  $0.020 \text{ mol dm}^{-3}$  with respect to sodium ethanoate at 298 K. [3]

[ $K_a$  for ethanoic acid =  $1.78 \times 10^{-5} \text{ mol dm}^{-3}$  at 298 K]

pH = .....

2. Vinegar is a dilute solution of a weak acid.

(a) State what is meant by an **acid**.

[1]

---

---

(b) Suggest a pH value for vinegar.

[1]

---

**(Total 2)**

3.

Read the passage below and then answer the questions in the spaces provided.

### Acids Through The Ages

The ancient Greeks started to classify materials as salt-tasting, sweet-tasting, sour-tasting and bitter-tasting. In this classification acids were those considered to be sour-tasting – the name comes from the Latin *acere*.

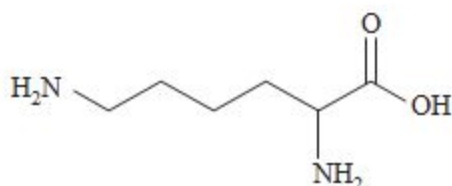
5 Taste continued to be an important consideration – even today many people would think of the sour taste of a lemon as being typical of an acid. However it was found that, as well as taste, these compounds had other properties in common. The dye litmus had been extracted from lichens and it was found that acids changed the colour of this to red. They also corroded metals.

10 Many acids were identified – citric acid could be extracted from citrus fruit and methanoic acid could be extracted, by distillation, from red ants. Methanoic acid used to be called formic acid since the biological term for an ant is *formica*.

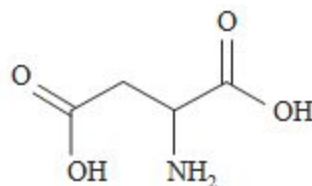
The modern classification of acids is based on the theory suggested by Lowry and Brønsted although more recent classifications, based on electron pair donation, have been suggested by Lewis.

15 Using the Lowry-Brønsted classification both citric acid and methanoic acid are described as being weak. For methanoic acid, HCOOH, the value of the acid dissociation constant,  $K_a$ , is  $1.75 \times 10^{-4} \text{ mol dm}^{-3}$ .

20 Acids have a wide variety of uses in modern chemistry. They can, for example, be used as catalysts in hydrolysis reactions and work is currently being done to investigate the possibility of obtaining biofuels by the hydrolysis of farm waste such as straw. In some situations however acids can destroy catalytic effects. The tertiary structure and therefore the shape of the active sites of some enzyme catalysts can be maintained by ionic attractions. This could arise, for example, when the enzyme involves the amino acids lysine and aspartic acid. The  $\text{NH}_2$  on the lysine can be protonated to give a positive ion, whilst the  $\text{COOH}$  can be deprotonated to give  
25 a negative ion. Attraction between oppositely charged ions holds the shape but if the pH is altered and one of the charges is lost the shape can change and the enzyme becomes denatured.



lysine



aspartic acid

30 The possible alteration of the shapes of molecules in biological systems means that it is important that the pH of, for example shampoos, is maintained within a small range. For best results shampoo should stay at a pH just below 7.

- End of passage -

(a) State what is meant by a Lowry-Brønsted acid. (*line 12*)

[1]

---

---

(b) Define pH.

[1]

---

---

(c) David and Peter were discussing acids and bases. David said that you could decide whether an acid was strong or weak by measuring the pH of the acid solution. He said that the strong acid would have a lower pH. Peter said that he felt that the strength of the acid was not the only factor that affected pH.

Discuss the factors that affect pH.

[4] QWC [1]

---

---

---

---

---

---

---

---

(d) Methanoic acid is a weak acid.

(i) Write the expression for the acid dissociation constant,  $K_a$ , of methanoic acid. [1]

(ii) Using the information in *lines 16* and *17* of the article, calculate the pH of  $0.10 \text{ mol dm}^{-3}$  methanoic acid. [3]

pH = .....

(e) The article (*line 29*) states that it is important to maintain the pH of shampoo within a small range.

(i) What name is given to a system designed to maintain pH within a small range?

[1]

---

(ii) The pH of a shampoo is maintained within a small range by using a weak acid, RCOOH, and its sodium salt, RCOONa

Explain how this mixture maintains pH within a small range.

[3]

---

---

---

---

---

---

**(Total 15)**

4. The leaves of the rhubarb plant are rich in ethanedioic acid (oxalic acid) which is a poisonous compound. A solution containing ethanedioate ions can be formed by boiling rhubarb leaves with water. It can be separated and samples titrated against acidified potassium manganate(VII) to find the concentration of the ethanedioate solution.

(a) Suggest how the ethanedioate solution could be separated from the rhubarb leaves.

[1]

---

---

(b) Write an ion-electron half-equation for the reduction of acidified manganate(VII) ions,  $\text{MnO}_4^-$ . [1]

---

---

(c) The ion-electron half-equation for the oxidation of ethanedioate ions is given below.



- (i) Give the oxidation states for carbon at the start and end of this reaction. [1]
- (ii) Write an equation for the reaction of acidified manganate(VII) ions with ethanedioate ions. [1]

---

---

---

---

(d) Give a reason why an indicator is not needed in this titration.

[1]

---

---

(e) Four samples of 25.00 cm<sup>3</sup> of the ethanedioate solution were titrated against acidified potassium manganate(VII) solution of concentration 0.0200 mol dm<sup>-3</sup>. The volumes of potassium manganate(VII) solution required for complete reaction are listed below.

|  | 1     | 2     | 3     | 4     |
|--|-------|-------|-------|-------|
| Volume of KMnO <sub>4</sub> (aq) / cm <sup>3</sup> | 28.80 | 27.95 | 28.00 | 27.80 |

Use the information given to calculate the concentration of the ethanedioate solution. [4]

(f) Heating ethanedioic acid in glycerol produces methanoic acid, HCOOH.

- (i) Write the expression for the acid dissociation constant,  $K_a$ , for methanoic acid. [1]
- (ii) The value of  $K_a$  for methanoic acid is  $1.8 \times 10^{-4}$  mol dm<sup>-3</sup>. Calculate the pH of a solution of methanoic acid of concentration 0.2 mol dm<sup>-3</sup>. [3]

---

---

---

---

(iii) A mixture of methanoic acid and sodium methanoate can be used as a buffer solution. State what is meant by a *buffer solution* and explain how a mixture of methanoic acid and sodium methanoate acts as a buffer.

[3] QWC [1]

---

---

---

---

(g) Acidified potassium dichromate,  $K_2Cr_2O_7$ , is also an oxidising agent.

(i) Give the colour change that occurs when acidified potassium dichromate acts as an oxidising agent

[1]

---

---

(ii) When sodium hydroxide is added to a solution of potassium dichromate, a colour change occurs without a redox reaction occurring. Give the formula of the new chromium-containing ion and the colour of the solution formed.

[2]

---

---

---

---

**(Total 20)**

5. In 2011 a man was detained at Moscow Airport when he tried to smuggle samples containing a radioactive isotope of sodium,  $^{22}Na$ , onto an aircraft.

(i) This isotope is made from an aluminium isotope by loss of an  $\alpha$ -particle.

State what is meant by an  $\alpha$ -particle.

[1]

---



- (ii)  $^{22}\text{Na}$  decays by the loss of a positron. This may occur by the breakdown of a proton into a neutron and a positron, giving the product,  $^b\text{X}$ .

Deduce the mass number (b) and the chemical symbol (X) of this product. [2]

b .....

X .....

- (iii) The half-life of the isotope  $^{22}\text{Na}$  is 2.6 years. The mass of a sample of this isotope is 48 mg.

Calculate the time taken for the mass of  $^{22}\text{Na}$  to fall to 3 mg

[1]

*Time taken* = .....years

- (b) The visible emission spectrum of sodium shows a strong yellow-orange line at a wavelength of 589 nm and a weaker green line at 569 nm.

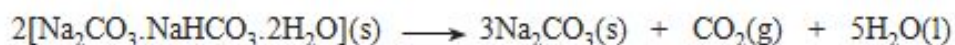
Complete the sentences below by using the words **higher** or **lower** as appropriate.

The frequency of the green line at 569 nm is .....than the frequency of the yellow-orange line at 589 nm. Another line is seen at 424 nm. This is caused by an electronic transition of .....energy than the line at 569 nm.

(c) Trona is a naturally-occurring 'sodium carbonate' mineral. It has the formula  $\text{Na}_2\text{CO}_3 \cdot \text{NaHCO}_3 \cdot 2\text{H}_2\text{O}$ .

(i) Show that the relative molecular mass of trona is 226. [1]

(ii) On heating, trona loses water and carbon dioxide giving sodium carbonate.



Calculate the atom economy of this reaction, assuming that sodium carbonate is the only required product. [2]

Atom economy = ..... %

(iii) The above reaction is used commercially to obtain sodium carbonate.

Suggest **one** environmental disadvantage of this reaction as indicated by the equation, and state what could be done to overcome this problem. [2]

-----  
-----  
-----  
-----

(d) When sodium carbonate is added to water, some of the carbonate ions react with the water to give an alkaline solution.



(i) Explain why this reaction is considered to be an acid-base reaction. [2]

-----  
-----  
-----  
-----

(ii) The pH of a sodium carbonate solution is 11.4.  
How would you explain the meaning of the pH scale to a member of the public?  
[3]

-----  
-----  
-----  
-----  
-----

Total [15]