

- (b) Use data from part (a)(ii) and the entropy data given below to calculate the lowest temperature at which the following reaction becomes feasible.



	BaCl ₂ (s)	Ba(s)	Cl ₂ (g)
$S^\ominus / \text{J K}^{-1} \text{mol}^{-1}$	124	63	223

.....

.....

.....

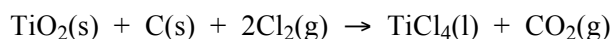
.....

.....

(4)

(Total 13 marks)

7. (a) The following reaction occurs in the high-temperature preparation of titanium(IV) chloride.



- (i) Use the data given below to calculate the standard enthalpy change and the standard entropy change for this reaction.

Substance	TiO ₂ (s)	C(s)	Cl ₂ (g)	TiCl ₄ (l)	CO ₂ (g)
$\Delta H_f^\ominus / \text{kJ mol}^{-1}$	-940	0	0	-804	-394
$S^\ominus / \text{J K}^{-1} \text{mol}^{-1}$	49.9	5.7	223	252	214

Standard enthalpy change

.....

.....

.....

Standard entropy change

.....

.....

.....

- (ii) Calculate the temperature at which this reaction ceases to be feasible.

.....

.....

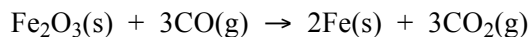
(9)

(Total 9 marks)

8. Use the data in the table below to answer the questions which follow.

Substance	Fe ₂ O ₃ (s)	Fe(s)	C(s)	Co(g)	CO ₂ (g)
$\Delta H_f^\ominus / \text{kJ mol}^{-1}$	-824.2	0	0	-110.5	-393.5
$S^\ominus / \text{J K}^{-1} \text{mol}^{-1}$	87.4	27.3	5.7	197.6	213.6

(a) The following equation shows one of the reactions which can occur in the extraction of iron.



(i) Calculate the standard enthalpy change and the standard entropy change for this reaction.

Standard enthalpy change

.....

Standard entropy change

.....

(ii) Explain why this reaction is feasible at all temperatures.

.....

(9)

(b) The reaction shown by the following equation can also occur in the extraction of iron.



The standard entropy change, ΔS^\ominus , for this reaction is $+542.6 \text{ J K}^{-1} \text{ mol}^{-1}$

Use this information to calculate the temperature at which this reaction becomes feasible.

.....

(3)

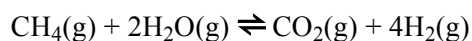
(c) Calculate the temperature at which the standard free-energy change, ΔG^\ominus has the same value for the reactions in parts (a) and (b).

.....

(3)

(Total 15 marks)

9. Hydrogen used in the manufacture of ammonia is produced by the reaction between methane and steam shown in the following equation.



Use the data given below to answer the questions which follow.

	CH ₄ (g)	H ₂ O(g)	CO ₂ (g)	H ₂ (g)
$\Delta H_f / \text{kJ mol}^{-1}$	-74.8	-241.8	-393.5	0
$S / \text{J K}^{-1} \text{ mol}^{-1}$	186.2	188.7	213.6	130.6

(a) Calculate the standard enthalpy change, ΔH^\ominus , for this reaction.

.....

(3)

(b) (i) Explain, in terms of disorder, why entropy increases in this reaction.

.....
.....

(ii) Calculate the standard entropy change for this reaction.

.....
.....
.....

(5)

(c) (i) Calculate the temperature at which the free-energy change, ΔG , for the above reaction is zero. (Assume that ΔH and ΔS do not vary with temperature.)

.....
.....
.....

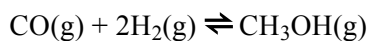
(ii) What is the significance of this temperature?

.....
.....

(5)

(Total 13 marks)

10. Methanol can be synthesised from carbon monoxide and hydrogen according to the equation



Use the thermodynamic data below to answer the questions that follow.

Substance	$\Delta H_f^\ominus / \text{kJ mol}^{-1}$	$S^\ominus / \text{J K}^{-1} \text{mol}^{-1}$
CO(g)	-110	198
H ₂ (g)	0	131
CH ₃ OH(g)	-201	240

(a) Determine the standard enthalpy change and the standard entropy change for the synthesis of methanol from carbon monoxide and hydrogen.

ΔH^\ominus

.....

.....

.....

ΔS^\ominus

.....

.....

.....

(4)

(b) Explain what is meant by the term feasible reaction and determine the temperature at which the methanol synthesis reaction is no longer feasible.

Feasible reaction.....

.....

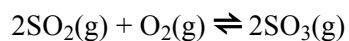
Temperature.....

.....

(3)

(Total 7 marks)

11. Sulphur dioxide reacts with oxygen to form sulphur trioxide according to the equation



Data for this reaction are shown in the table below.

	$\Delta H_f^\ominus / \text{kJ mol}^{-1}$	$S^\ominus / \text{J K}^{-1} \text{ mol}^{-1}$
$\text{SO}_3(\text{g})$	-396	+257
$\text{SO}_2(\text{g})$	-297	+248
$\text{O}_2(\text{g})$	0	+204

(a) Determine the standard enthalpy, the standard entropy and standard free energy changes at 298 K for this reaction.

ΔH_{298}

.....

.....

.....

ΔS_{298}

.....

.....

.....

ΔG_{298}

.....

.....

.....

(7)

- (b) The reaction is said to be feasible. In terms of free energy change, explain the meaning of the term *feasible*. Calculate the temperature at which the reaction between sulphur dioxide and oxygen ceases to be feasible.


Feasible reaction.....

Temperature.....

.....

(3)
 (Total 10 marks)

12. Sulphuric acid is manufactured by the Contact Process. One stage of the process is the oxidation of sulphur dioxide according to the equation:



Typical operating conditions are a temperature of about 450 °C, close to atmospheric pressure and the presence of a catalyst. The use of a converter containing four catalyst beds results in a 99.5% conversion.

The value of the entropy change, ΔS , for the reaction between sulphur dioxide and oxygen $-188 \text{ J mol}^{-1} \text{ K}^{-1}$.

- (i) Explain why there is a decrease in entropy of the system.

.....

(2)

- (ii) Use the equation

$$\Delta G = \Delta H - T\Delta S$$

to calculate the value of ΔG for the reaction between sulphur dioxide and oxygen at 25 °C. Explain the significance of the sign of the value obtained.

Calculation

Explanation

.....

(4)
 (Total 6 marks)

13. (a) (i) Construct a Born-Haber cycle for the formation of calcium chloride, CaCl_2 , from its elements. Name each step in the cycle and mark on the cycle each species involved together with its state symbol.
- (ii) When calcium reacts with chlorine under normal laboratory conditions CaCl_2 is formed not CaCl . Identify the stages in the Born-Haber cycle for the formation of CaCl which differ from those in the cycle for the formation of CaCl_2

(11)

- (b) (i) Use the data given below to calculate the standard enthalpy of solution of CaCl_2 .

$$\text{Lattice dissociation enthalpy of } \text{CaCl}_2 = +2255 \text{ kJ mol}^{-1}$$

$$\text{Hydration enthalpy of calcium ions} = -1650 \text{ kJ mol}^{-1}$$

$$\text{Hydration enthalpy of chloride ions} = -384 \text{ kJ mol}^{-1}$$

- (ii) Using your answer to part (b)(i), deduce how the solubility of CaCl_2 changes as temperature is increased. Explain your answer.

(6)

(Total 17 marks)

14. Construct a Born-Haber cycle for the formation of the hypothetical crystalline solid magnesium(I) chloride, MgCl(s).

The table below shows values of standard enthalpies for some processes involving magnesium and chlorine. Use these values to calculate the standard enthalpy of formation of the hypothetical MgCl(s).

Use your answer to calculate the standard enthalpy change for the reaction



given that the standard enthalpy of formation of MgCl₂(s), ΔH_f^\ominus , is -653 kJ mol^{-1}

Explain why the standard entropy change in this reaction is likely to be negligibly small. Comment on the stability of MgCl(s) relative to that of MgCl₂(s).

			$\Delta H^\ominus \text{ kJ mol}^{-1}$
Mg ⁺ (g) + Cl ⁻ (g)	→	MgCl(s)	-753
Cl(g) + e ⁻	→	Cl ⁻ (g)	-364
$\frac{1}{2} \text{Cl}_2\text{(g)}$	→	Cl(g)	+121
Mg(s)	→	Mg(g)	+146
Mg(s)	→	Mg ⁺ (g) + e ⁻	+736

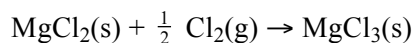
(Total 10 marks)

15. (a) State what is meant by the term *enthalpy change*. (2)
- (b) Construct a fully-labelled Born-Haber cycle for the formation of MgO and use the data given below to calculate a value for the enthalpy of lattice formation of this oxide.

Process	$\Delta H^\ominus / \text{kJ mol}^{-1}$
$\text{Mg(s)} + \frac{1}{2} \text{O}_2(\text{g}) \rightarrow \text{MgO(s)}$	-602
$\text{Mg(s)} \rightarrow \text{Mg(g)}$	+148
$\text{Mg(g)} \rightarrow \text{Mg}^+(\text{g}) + \text{e}^-$	+738
$\text{Mg}^+(\text{g}) \rightarrow \text{Mg}^{2+}(\text{g}) + \text{e}^-$	+1451
$\text{O}_2(\text{g}) \rightarrow 2\text{O(g)}$	+498
$\text{O(g)} + \text{e}^- \rightarrow \text{O}^-(\text{g})$	-141
$\text{O}^-(\text{g}) + \text{e}^- \rightarrow \text{O}^{2-}(\text{g})$	+798

(8)

- (c) By consideration of the entropy changes in the reaction and the data given below, explain why the following reaction is never feasible.



Compound	$\Delta H_f^\ominus / \text{kJ mol}^{-1}$
$\text{MgCl}_2(\text{s})$	-653
$\text{MgCl}_3(\text{s})$	+3904

(5)

(Total 15 marks)

16. Ethyl ethanoate can be prepared by the reactions shown below.

Reaction 1



Reaction 2



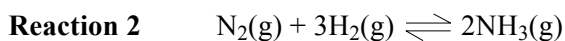
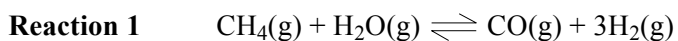
Use the information given above and the data below to calculate values for the standard entropy change, ΔS^\ominus , and the standard free-energy change, ΔG^\ominus , for **Reaction 2** at 298 K.

	$\text{CH}_3\text{COCl(l)}$	$\text{C}_2\text{H}_5\text{OH(l)}$	$\text{CH}_3\text{COOC}_2\text{H}_5(\text{l})$	HCl(g)
$S^\ominus / \text{J K}^{-1} \text{mol}^{-1}$	201	161	259	187

(6)

(Total 6 marks)

17. The equations for two industrial equilibrium reactions are given below.



- (a) Use the information in the table below to calculate the temperatures at which the free-energy change for each reaction is equal to zero.

	$\text{CH}_4(\text{g})$	$\text{H}_2\text{O}(\text{g})$	$\text{CO}(\text{g})$	$\text{H}_2(\text{g})$	$\text{N}_2(\text{g})$	$\text{NH}_3(\text{g})$
$\Delta H_f / \text{kJ mol}^{-1}$	-74.8	-241.8	-110.5	0	0	-46.1
$S / \text{J K}^{-1} \text{mol}^{-1}$	186.2	188.7	197.6	130.6	191.6	192.3

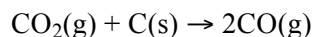
(10)

- (b) In industry, **Reaction 1** and **Reaction 2** are carried out at high temperatures. State how, using temperatures higher than those calculated in part (a), the yields of products are altered in **Reaction 1** and in **Reaction 2**. In each case, explain why a high temperature is used in practice.

(5)

(Total 15 marks)

18. (a) The reaction given below does not occur at room temperature.




Use the data given below to calculate the lowest temperature at which this reaction becomes feasible.

	C(s)	CO(g)	CO ₂ (g)
$\Delta H_f^\ominus / \text{kJ mol}^{-1}$	0	-110.5	-393.5
$S^\ominus / \text{J K}^{-1} \text{ mol}^{-1}$	5.7	197.6	213.6

(8)

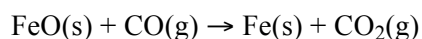
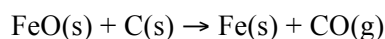
- (b) When an electrical heating coil was used to supply 3675 J of energy to a sample of water which was boiling at 373 K, 1.50 g water were vaporised. Use this information to calculate the entropy change for the process



(3)

(Total 11 marks)

19. Iron (II) oxide can be reduced to iron both by carbon, which is oxidised to carbon monoxide, and by carbon monoxide, which is oxidised to carbon dioxide, as shown in the equations below.



- (a) Use the data given below to deduce the free energy change, ΔG^\ominus , measured at 450 K, for **each** of these reduction processes.

(Assume that the enthalpy change and the entropy change in each of these reactions remain the same if the temperature is raised from 298 K to 450 K.)

	FeO(s)	Fe(s)	C(s)	CO(g)	CO ₂ (g)
$\Delta H_f^\ominus / \text{kJ mol}^{-1}$	-271.9	0	0	-110.5	-393.5
$S^\ominus / \text{J K}^{-1} \text{ mol}^{-1}$	58.5	27.3	5.7	197.6	213.6

(10)

- (b) Deduce how an increase in temperature will affect the feasibility of each of the processes in which iron(II) oxide is reduced to iron.

(5)

(Total 15 marks)