

Alcohols

1. Alcohols can be used to prepare organic compounds with different functional groups.

$\text{HO}(\text{CH}_2)_4\text{OH}$ can be oxidised to form $\text{HOOC}(\text{CH}_2)_2\text{COOH}$.

- i. State the reagents and conditions and write an equation for this oxidation.

In the equation, use [O] for the oxidising agent.

Reagents and conditions:

Equation:

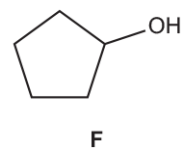
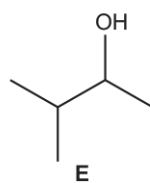
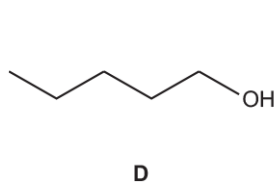
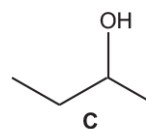
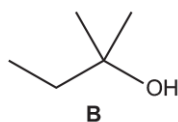
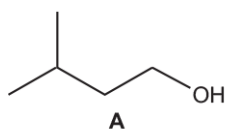
[3]

- ii. $\text{HOOC}(\text{CH}_2)_2\text{COOH}$ is soluble in water.

Explain, using a labelled diagram, why $\text{HOOC}(\text{CH}_2)_2\text{COOH}$ is soluble in water.

[2]

2. This question is about the alcohols **A–F** shown below.




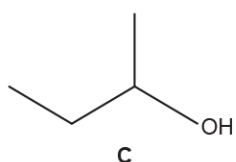
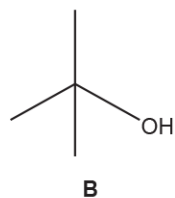
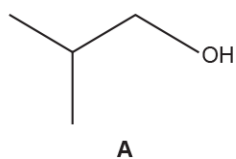
Which of the alcohols **A–F** are secondary alcohols?

----- [2]

3. This question is about alcohols and alkanes.

Three alcohols **A**, **B** and **C** are structural isomers of $C_4H_{10}O$.
Each alcohol is refluxed with acidified dichromate(VI), $H^+/Cr_2O_7^{2-}$.

- i. Draw the structures for the organic products.
If there is no reaction, write '**NONE**'.




[3]

- ii. Write the systematic name for alcohol **C**.

----- [1]

- iii. Complete the equation below for the complete combustion of alcohol **A**.



4. This question is about reactions involving alcohols.

Three reactions of an alcohol **E** are shown in **Fig. 25.1**.

- i. Complete **Fig. 25.1** to show the structures of the organic products formed in the reactions.

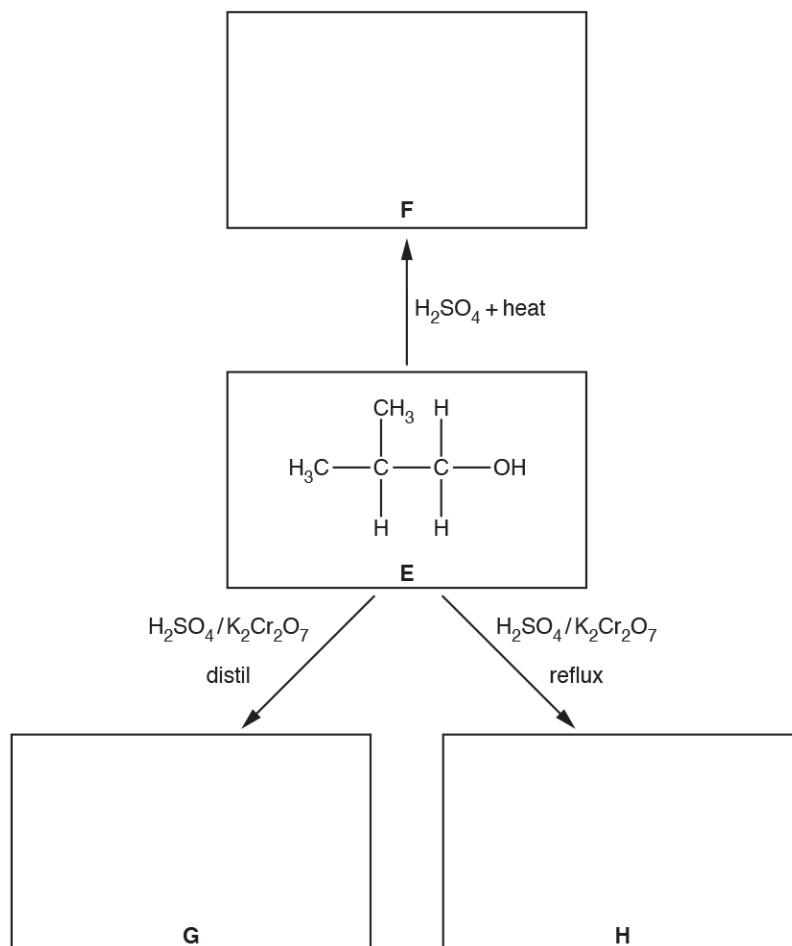
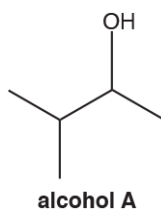


Fig. 25.1

[3]

6(a). This question is about reactions of organic compounds containing carbon, hydrogen and oxygen.

A chemist investigates two reactions of alcohol **A**, shown below.



i. What is the systematic name of alcohol **A**?

----- [1]

ii. What is the structural formula of alcohol **A**?

----- [1]

iii. The chemist heats alcohol **A** with an acid catalyst to form a mixture containing **two** alkenes.

Draw the structures of the **two** alkenes formed in this reaction.

--	--

[2]

iv. The chemist heats alcohol **A** with sodium chloride and sulfuric acid.

Construct a balanced equation for this reaction.
Show structures for the organic compounds in your equation.

[2]

[6]

10(a). This question is about alcohols.

Construct an equation for the complete combustion of an unsaturated alcohol with 5 carbon atoms.

[1]

(b). Many alcohols, including ethanol, are soluble in water.

- i. Explain, with the aid of a diagram, why ethanol is soluble in water. Include relevant dipoles and lone pairs.

[2]

- ii. The solubility of hexan-1-ol and hexane-1,6-diol in water is shown below in **Table 19.1**.

Alcohol	Solubility in water / g dm⁻³
hexan-1-ol	5.9
hexane-1,6-diol	500

Table 19.1

Explain the difference in solubility of hexan-1-ol and hexane-1,6-diol.

[1]

- (c). Butan-1-ol can be oxidised to form two different organic products, depending on the reaction conditions used.

Describe both oxidation reactions of butan-1-ol.

For each reaction include

- the structure of the organic product
- a balanced equation
- the essential reaction conditions.

In your equations you may use [O] to represent the oxidising agent.

[5]

- 11(a).** At room temperature and pressure, the first four members of the alkanes are all gases but the first four alcohols are all liquids.

Explain this difference in terms of intermolecular forces.

[2]

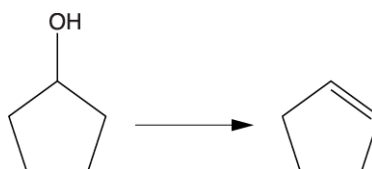
- (b).** The boiling points of 2-methylpropan-1-ol and butan-1-ol are shown below.

Alcohol	Boiling point / °C
2-methylpropan-1-ol	108
butan-1-ol	117

Explain why the boiling points are different.

[2]

- (c).** Alkenes can be prepared from alcohols. Cyclopentene can be prepared from cyclopentanol as shown in the equation below.



A student plans to prepare 5.00 g of cyclopentene from cyclopentanol. The percentage yield of this reaction is 45.0%.

- i. What is the name of this type of reaction?

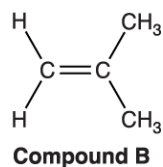
[1]

- ii. Calculate the mass of cyclopentanol that the student should use.

Show your working.

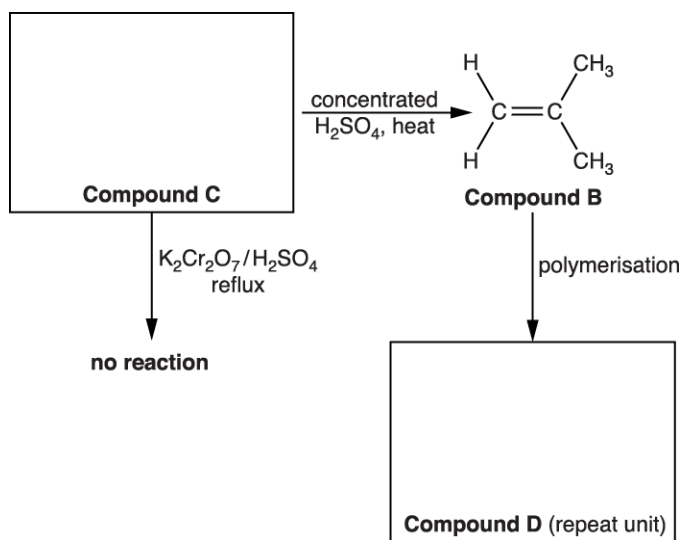
mass of cyclopentanol = g [3]

12. Compound **B**, shown below, can be used to synthesise organic compounds with different functional groups.



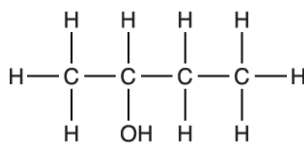
Some reactions involving compound **B** are shown in the flowchart below.

Complete the flowchart, showing the structures of organic compounds **C** and **D**.



[2]

13(a). This question is about the properties and reactions of butan-2-ol.



Some properties of butan-2-ol are listed in the table.

Melting point	-115 °C
Boiling point	99.5 °C


Butan-2-ol can be oxidised by heating with an oxidising agent.

- i. Write an equation for the reaction.

Use [O] to represent the oxidising agent and show the structure of the organic product.

[2]

- ii. A student plans to carry out this oxidation using the apparatus shown in the diagram.



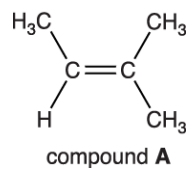
Give **one** reason why the apparatus is **not** suitable and describe a more suitable way of carrying out this oxidation.

[2]

- (b). Why is butan-2-ol classified as a secondary alcohol?

----- [1]

14. Compound **A** is an alkene.



Compound **A** can be made from alcohol **B** by heating with an acid catalyst.

Suggest **two** possible structures for alcohol **B**.

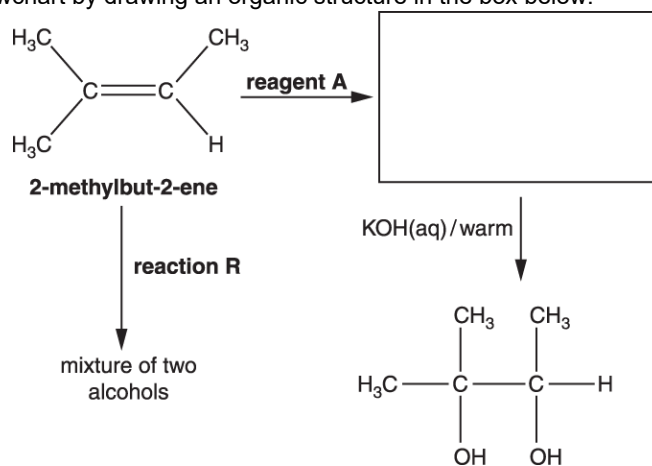
--	--

[2]

[6]

17(a). The flowchart shows how 2-methylbut-2-ene can be converted into a number of organic products.

Complete the flowchart by drawing an organic structure in the box below.



[1]

(b). Identify reagent **A**.

[1]

(c). In the flowchart, **reaction R** forms a mixture of two alcohols that are structural isomers of $C_5H_{12}O$.

i. State the reagents and conditions needed for **reaction R**.

[1]

18(a). Compound **F** has the molecular formula C_4H_8 .

Compound **F** is reacted with steam in the presence of an acid catalyst, to form a mixture of three alcohols, **G**, **H** and **I**.

Compound **G** is oxidised with acidified potassium dichromate(VI) to form compound **J**.

Compound **J** reacts with Tollens' reagent to form compound **K**.

Compounds **H** and **I** are optical isomers.

Draw the structures of the compounds **F**, **G**, **H**, **I**, **J** and **K**.

[6]

(b). Explain, with reference to a suitable chemical test, how compound **J** could be identified.

Your answer should **not** include spectroscopy.

[3]

19. This question is about alkenes.

When alcohol **A** is heated with an acid catalyst, a reaction takes place forming alkene **B**.
The equation for this reaction is shown below as **Equation 16.1**.

