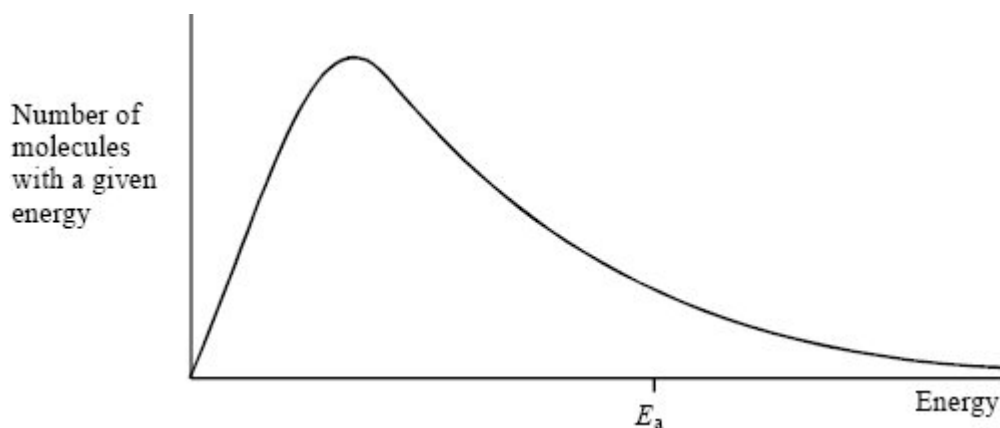


Q1. The diagram below shows the Maxwell–Boltzmann energy distribution curve for a sample of gas at a fixed temperature. E_a is the activation energy for the decomposition of this gas.



(a) On this diagram sketch the distribution curve for the same sample of gas at a higher temperature.

(3)

(b) (i) What is the effect of an increase in temperature on the rate of a chemical reaction? Explain your answer with reference to the Maxwell–Boltzmann distribution.

Effect

Explanation

.....

.....

(ii) What is the effect of the addition of a catalyst on the rate of a chemical reaction? Explain your answer with reference to the Maxwell–Boltzmann distribution.

Effect

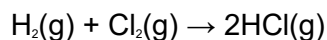
Explanation

.....

.....

(6)
(Total 9 marks)

Q2. The gas-phase reaction between hydrogen and chlorine is very slow at room temperature.



(a) Define the term *activation energy*.

.....
.....

(2)

(b) Give **one** reason why the reaction between hydrogen and chlorine is very slow at room temperature.

.....
.....

(1)

(c) Explain why an increase in pressure, at constant temperature, increases the rate of reaction between hydrogen and chlorine.

.....
.....

(2)

(d) Explain why a small increase in temperature can lead to a large increase in the rate of reaction between hydrogen and chlorine.

.....
.....

(2)

(e) Give the meaning of the term *catalyst*.

.....
.....

(1)


- (f) Suggest **one** reason why a solid catalyst for a gas-phase reaction is often in the form of a powder.

.....

(1)

(Total 9 marks)

- Q3.** (a) Below is a Maxwell–Boltzmann curve showing the distribution of molecular energies for a sample of gas at a temperature T .



- (i) Label the axes on the diagram above.
- (ii) What does the area under the curve represent?

.....

- (iii) State why this curve starts at the origin.

.....

(4)

(b) (i) State what is meant by the term *activation energy*.

.....

.....

(ii) The rate of a chemical reaction may be increased by an increase in reactant concentration, by an increase in temperature and by the addition of a catalyst.

State which, if any, of these changes involves a different activation energy. Explain your answer.

Change(s)

Explanation

.....

(5)

(Total 9 marks)

Q4. The diagram below represents a Maxwell–Boltzmann distribution curve for the particles in a sample of a gas at a given temperature. The questions below refer to this sample of particles.



(a) Label the axes on the diagram.

(2)

(b) On the diagram draw a curve to show the distribution for this sample at a **lower** temperature.

(2)

(c) In order for two particles to react they must collide. Explain why most collisions do not result in a reaction.

.....

(1)

(d) State one way in which the collision frequency between particles in a gas can be increased without changing the temperature.

.....

(1)

(e) Suggest why a small increase in temperature can lead to a large increase in the reaction rate between colliding particles.

.....

.....

.....

(2)

(f) Explain in general terms how a catalyst works.

.....

.....

.....

(2)

(Total 10 marks)

Q5. (a) Define the term *activation energy* for a chemical reaction. (2)

(b) Draw, with labelled axes, a curve to represent the Maxwell–Boltzmann distribution of molecular energies in a gas. Label this curve T_1 . On the same axes, draw a second curve to represent the same sample of gas at a lower temperature. Label this curve T_2 .

Use these curves to explain why a small decrease in temperature can lead to a large decrease in the rate of a reaction.

(8)

(c) Give **one** reason why most collisions between gas-phase reactants do not lead to a reaction. State and explain **two** ways of speeding up a gas-phase reaction other than by changing the temperature.

(5)

(Total 15 marks)