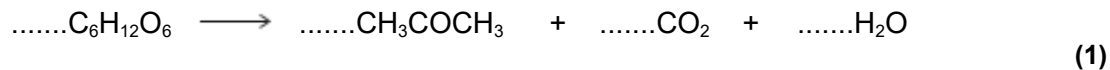


Q1.(a) Propanone can be formed when glucose comes into contact with bacteria in the absence of air.

- (i) Balance the following equation for this reaction of glucose to form propanone, carbon dioxide and water.



- (ii) Deduce the role of the bacteria in this reaction.

.....
(1)

(b) Propanone is also formed by the oxidation of propan-2-ol.

- (i) Write an equation for this reaction using [O] to represent the oxidising agent.

.....
(1)

- (ii) State the class of alcohols to which propan-2-ol belongs.

.....
(1)

(c) A student determined a value for the enthalpy change when a sample of propanone was burned. The heat produced was used to warm some water in a copper calorimeter.

The student found that the temperature of 150 g of water increased by 8.0 °C when 4.50×10^{-3} mol of pure propanone was burned in air.

Use the student's results to calculate a value, in kJ mol^{-1} , for the enthalpy change when one mole of propanone is burned.

(The specific heat capacity of water is $4.18 \text{ J K}^{-1} \text{ g}^{-1}$)

.....
.....
.....
.....
.....
.....
.....
.....

.....
.....
.....

(3)

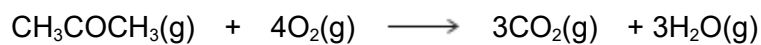
(d) Define the term **standard enthalpy of combustion**.

.....
.....
.....
.....
.....
.....

(3)

(e) Use the mean bond enthalpy data in the table and the equation given below the table to calculate a value for the standard enthalpy change when gaseous propanone is burned.

	C-H	C-C	C-O	O-H	C=O	O=O
Mean bond enthalpy / kJ mol ⁻¹	412	348	360	463	805	496



.....
.....
.....
.....
.....
.....
.....

(3)

- (f) Suggest **two** reasons why the value obtained by the student in part (c) is different from the value calculated in part (e).

Reason 1

.....

.....

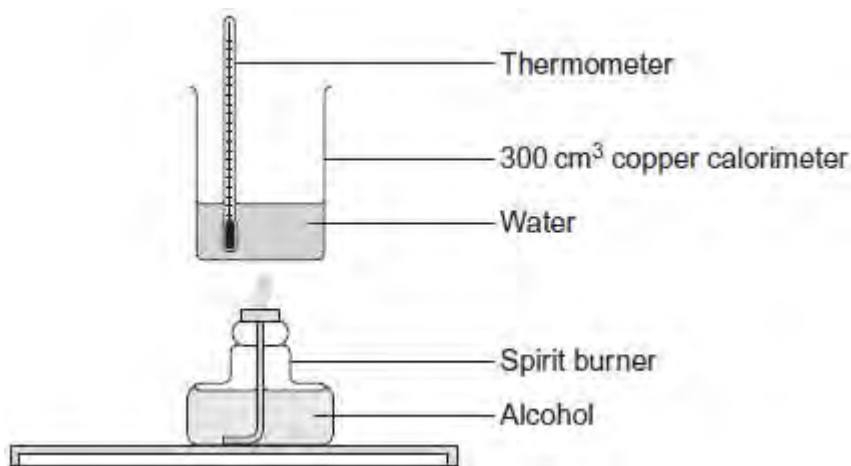
Reason 2

.....

.....

(2)
(Total 15 marks)

Q2. A value for the enthalpy of combustion of an alcohol can be determined using the apparatus shown in the diagram. The calorimeter is held in position by a clamp.



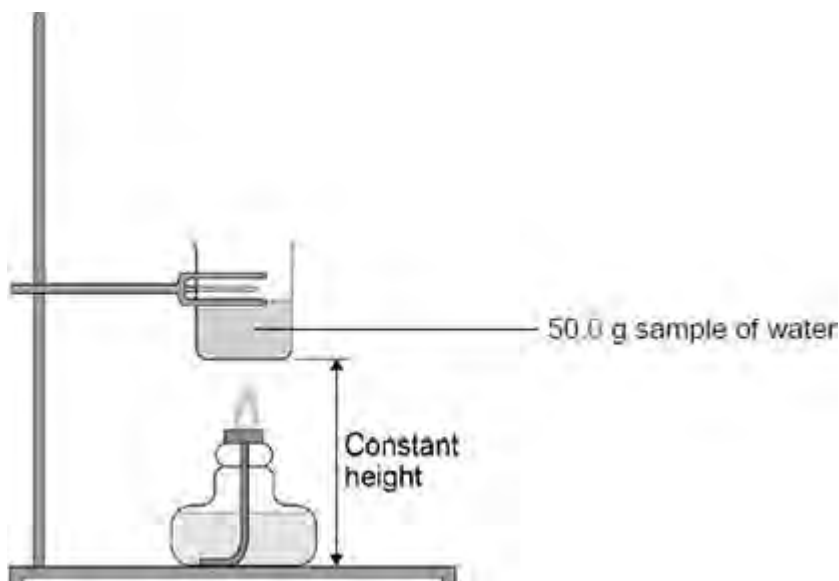
This experiment can be repeated by using a different volume of water that would result in a more accurate value for the enthalpy of combustion because there would be a reduction in the heat lost.

State a change in the volume of water that would cause a reduction in heat loss and explain your answer.

Change in volume:

Explanation:

Q3. The figure below shows apparatus used in an experiment to determine the enthalpy of combustion of leaf alcohol.



The alcohol is placed in a spirit burner and weighed. The burner is lit and the alcohol allowed to burn for a few minutes. The flame is extinguished and the burner is re-weighed. The temperature of the water is recorded before and after heating.

The following table shows the results obtained.

Initial mass of spirit burner and alcohol / g	56.38
Final mass of spirit burner and alcohol / g	55.84
Initial temperature of water / °C	20.7
Final temperature of water / °C	40.8

- (a) Write an equation for the complete combustion of leaf alcohol ($\text{CH}_3\text{CH}_2\text{CH}=\text{CHCH}_2\text{CH}_2\text{OH}$).

(1)

- (b) Use the results from the table above to calculate a value for the enthalpy of combustion of leaf alcohol. Give units in your answer.
(The specific heat capacity of water is $4.18 \text{ J K}^{-1} \text{ g}^{-1}$)

Enthalpy of combustion = Units =

(4)

- (c) State how your answer to part (b) is likely to differ from the value quoted in reference sources.
Give **one** reason for your answer.

.....
.....
.....
.....
.....

(2)

- (d) A 50.0 g sample of water was used in this experiment.
Explain how you could measure out this mass of water without using a balance.

.....
.....
.....
.....
.....

Q4. Ethanol is an important fuel.

- (a) A dilute aqueous solution of ethanol can be produced by the fermentation of an aqueous solution of glucose.
It is claimed that the ethanol obtained from this solution is a carbon-neutral biofuel.

Write an equation for this fermentation reaction.

Give **two** other essential conditions for this reaction to produce a good yield of ethanol.

Name a process used to produce a much more concentrated solution of ethanol from a dilute aqueous solution.

State the meaning of the term **carbon-neutral** in the context of this biofuel.

.....
.....
.....
.....
.....
.....
.....
.....
.....
.....
.....
.....

(Extra space)
.....
.....
.....
.....

(5)

- (b) A student carried out a laboratory experiment to determine the enthalpy change when a sample of ethanol was burned. The heat produced was used to warm some

water in a copper calorimeter. The student found that the temperature of 75.0 g of water increased by 5.50 °C when 2.40×10^{-3} mol of pure ethanol was burned in air.

Use the student's results to calculate a value, in kJ mol^{-1} , for the enthalpy change when one mole of ethanol is burned.

(The specific heat capacity of water is $4.18 \text{ J K}^{-1} \text{ g}^{-1}$)

Deduce **two** reasons why the student's value for the standard enthalpy of combustion of ethanol is different from a Data Book value of $-1279 \text{ kJ mol}^{-1}$.

.....

.....

.....

.....

.....

.....

.....

.....

.....

.....

.....

.....

.....

.....

.....

.....

.....

.....

.....

.....

.....

.....

(Extra space).....

.....

.....

.....

.....

.....

(5)

(c) Mean bond enthalpies can be used to calculate enthalpies of reaction.

(i) Give the meaning of the term **mean bond enthalpy**.

.....

.....

.....

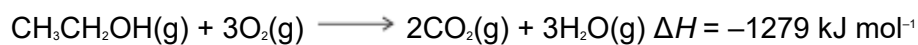
.....

.....

(ii) Consider the mean bond enthalpy data in the following table.

	C—H	C—C	C—O	O=O	C=O	O—H
Mean bond enthalpy / kJ mol ⁻¹	412	348	360	to be calculated	805	463

Use the data in the table above and the equation shown to calculate a value for the bond enthalpy for the O=O double bond in an oxygen molecule.



.....

.....

.....

.....

.....

.....

.....

.....

.....

.....

(3)
(Total 15 marks)

Q5.A 5.00 g sample of potassium chloride was added to 50.0 g of water initially at 20.0 °C. The mixture was stirred and as the potassium chloride dissolved, the temperature of the solution decreased.

(a) Describe the steps you would take to determine an accurate minimum temperature that is **not** influenced by heat from the surroundings.

.....

.....

.....
.....
.....
.....
.....
.....

(4)

(b) The temperature of the water decreased to 14.6 °C.

Calculate a value, in kJ mol⁻¹, for the enthalpy of solution of potassium chloride.

You should assume that only the 50.0 g of water changes in temperature and that the specific heat capacity of water is 4.18 J K⁻¹ g⁻¹.

Give your answer to the appropriate number of significant figures.

Enthalpy of solution = kJ mol⁻¹

(4)

(c) The enthalpy of solution of calcium chloride is -82.9 kJ mol⁻¹.
The enthalpies of hydration for calcium ions and chloride ions are -1650 and -364 kJ mol⁻¹, respectively.

Use these values to calculate a value for the lattice enthalpy of dissociation of calcium chloride.

Lattice enthalpy of dissociation = kJ mol^{-1}

(2)

- (d) Explain why your answer to part (c) is different from the lattice enthalpy of dissociation for magnesium chloride.

.....

.....

.....

.....

.....

(2)

(Total 12 marks)