

**Q1.** Norgessalpeter was the first nitrogen fertiliser to be manufactured in Norway. It has the formula  $\text{Ca}(\text{NO}_3)_2$

- (a) Norgessalpeter can be made by the reaction of calcium carbonate with dilute nitric acid as shown by the following equation.



In an experiment, an excess of powdered calcium carbonate was added to  $36.2 \text{ cm}^3$  of  $0.586 \text{ mol dm}^{-3}$  nitric acid.

- (i) Calculate the amount, in moles, of  $\text{HNO}_3$  in  $36.2 \text{ cm}^3$  of  $0.586 \text{ mol dm}^{-3}$  nitric acid. Give your answer to 3 significant figures.

.....  
.....

(1)

- (ii) Calculate the amount, in moles, of  $\text{CaCO}_3$  that reacted with the nitric acid. Give your answer to 3 significant figures.

.....  
.....

(1)

- (iii) Calculate the minimum mass of powdered  $\text{CaCO}_3$  that should be added to react with all of the nitric acid.

Give your answer to 3 significant figures.

.....  
.....  
.....

(2)

- (iv) State the type of reaction that occurs when calcium carbonate reacts with nitric acid.

.....

(1)

- (b) Norgessalt peter decomposes on heating as shown by the following equation.



A sample of Norgessalt peter was decomposed completely.

The gases produced occupied a volume of  $3.50 \times 10^{-3} \text{ m}^3$  at a pressure of 100 kPa and a temperature of  $31^\circ\text{C}$ .

(The gas constant  $R = 8.31 \text{ J K}^{-1} \text{ mol}^{-1}$ )

- (i) Calculate the total amount, in moles, of gases produced.

.....  
.....  
.....  
.....

(3)

- (ii) Hence calculate the amount, in moles, of oxygen produced.

.....  
.....

(1)

- (c) Hydrated calcium nitrate can be represented by the formula  $\text{Ca}(\text{NO}_3)_2 \cdot x\text{H}_2\text{O}$  where  $x$  is an integer.

A 6.04 g sample of  $\text{Ca}(\text{NO}_3)_2 \cdot x\text{H}_2\text{O}$  contains 1.84 g of water of crystallisation.

Use this information to calculate a value for  $x$ .

Show your working.

.....  
.....  
.....  
.....  
.....  
.....


(3)

(Total 12 marks)

- Q2.(a)** A student investigated the acid content of a different crater-lake solution. The student used a 50.0 cm<sup>3</sup> burette to measure out different volumes of this crater-lake solution. Each volume of crater-lake solution was titrated with a 0.100 mol dm<sup>-3</sup> sodium hydroxide solution. Each titration was repeated. The results are shown below.

Volume of crater-lake solution / cm <sup>3</sup>		10.0	20.0	30.0	40.0	50.0
Volume of sodium hydroxide solution / cm <sup>3</sup>	Experiment 1	5.85	17.00	20.00	26.50	32.45
	Experiment 2	6.15	13.00	19.90	26.50	32.55
Average titre / cm <sup>3</sup>		6.00	15.00	19.95	26.50	32.50

- (i) On the graph paper below, plot a graph of average titre (y-axis) against volume of crater-lake solution. Both axes must start at zero.



(3)

(ii) Draw a line of best fit on the graph.

(1)

(iii) Use the graph to determine the titre that the student would have obtained using a 25.0 cm<sup>3</sup> sample of crater-lake solution.

.....

(1)

- (iv) Excluding any anomalous points, which average titre value would you expect to be the least accurate value? Give **one** reason for your choice.

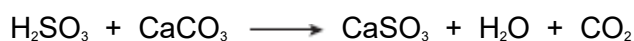
Least accurate average titre .....

Reason .....

.....

(2)

- (b) Another 100 cm<sup>3</sup> sample of crater-lake solution was reacted with an excess of powdered limestone. The gas produced was collected in a gas syringe. The equation for the reaction between the sulfuric(IV) acid in the crater-lake solution and the calcium carbonate in the powdered limestone is shown below.



The volume of gas collected from the reaction of the sulfuric(IV) acid in 100 cm<sup>3</sup> of crater-lake solution with an excess of powdered limestone was 81.0 cm<sup>3</sup> at 298 K and  $1.00 \times 10^5$  Pa.

- (i) State the ideal gas equation.

.....

(1)

- (ii) Use the ideal gas equation to calculate the amount, in moles, of carbon dioxide formed.  
Show your working.  
(The gas constant  $R = 8.31 \text{ J K}^{-1} \text{ mol}^{-1}$ )

.....

.....

.....

.....

(3)

- (iii) Use the equation for the reaction and your answer from part (b)(ii) to calculate the minimum mass of calcium carbonate needed to neutralise the sulfuric(IV) acid in 1.00 dm<sup>3</sup> of crater-lake solution.  
Show your working.

(If you could not complete the calculation in part (b)(ii) assume that the amount

of carbon dioxide is  $1.25 \times 10^{-2}$  mol. This is **not** the correct value.)

.....  
.....  
.....  
.....

(3)

- (iv) The percentage by mass of calcium carbonate in the powdered limestone was 95.0%.  
Calculate the minimum mass of this powdered limestone needed to neutralise the sulfuric(IV) acid in  $1.00 \text{ dm}^3$  of this crater-lake solution.

.....  
.....

(2)

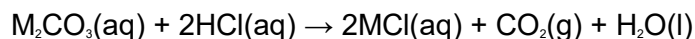
- (v) Give **one** reason, other than cost, why limestone rather than solid sodium hydroxide is often used to neutralise acidity in lakes.

.....  
.....

(1)

(Total 17 marks)

- Q3.** (a) An unknown metal carbonate reacts with hydrochloric acid according to the following equation.



A 3.44 g sample of  $\text{M}_2\text{CO}_3$  was dissolved in distilled water to make  $250 \text{ cm}^3$  of solution. A  $25.0 \text{ cm}^3$  portion of this solution required  $33.2 \text{ cm}^3$  of  $0.150 \text{ mol dm}^{-3}$  hydrochloric acid for complete reaction.

- (i) Calculate the amount, in moles, of HCl in  $33.2 \text{ cm}^3$  of  $0.150 \text{ mol dm}^{-3}$  hydrochloric acid. Give your answer to 3 significant figures.

.....  
.....

(1)

- (ii) Calculate the amount, in moles, of  $M_2CO_3$  that reacted with this amount of HCl. Give your answer to 3 significant figures.

.....  
.....

(1)

- (iii) Calculate the amount, in moles, of  $M_2CO_3$  in the 3.44 g sample. Give your answer to 3 significant figures.

.....  
.....

(1)

- (iv) Calculate the relative formula mass,  $M_r$ , of  $M_2CO_3$ . Give your answer to 1 decimal place.

.....  
.....

(1)

- (v) Hence determine the relative atomic mass,  $A_r$ , of the metal M and deduce its identity.

$A_r$  of M .....

Identity of M .....

(2)

- (b) In another experiment, 0.658 mol of  $CO_2$  was produced. This gas occupied a volume of 0.0220  $m^3$  at a pressure of 100 kPa. Calculate the temperature of this  $CO_2$  and state the units. (The gas constant  $R = 8.31 \text{ J K}^{-1} \text{ mol}^{-1}$ )

.....  
.....  
.....

.....  
.....  
.....  
.....

(3)

- (c) Suggest **one** possible danger when a metal carbonate is reacted with an acid in a sealed flask.

.....  
.....

(1)

- (d) In a different experiment, 6.27 g of magnesium carbonate were added to an excess of sulfuric acid. The following reaction occurred.



- (i) Calculate the amount, in moles, of  $\text{MgCO}_3$  in 6.27 g of magnesium carbonate.

.....  
.....

(2)

- (ii) Calculate the mass of  $\text{MgSO}_4$  produced in this reaction assuming a 95% yield.

.....  
.....  
.....  
.....

(3)

(Total 15 marks)

**Q4.** In this question give all your answers to three significant figures.



Magnesium nitrate decomposes on heating to form magnesium oxide, nitrogen dioxide and oxygen as shown in the following equation.



(a) Thermal decomposition of a sample of magnesium nitrate produced 0.741 g of magnesium oxide.

(i) Calculate the amount, in moles, of MgO in 0.741 g of magnesium oxide.

.....  
.....

(2)

(ii) Calculate the total amount, in moles, of gas produced from this sample of magnesium nitrate.

.....  
.....

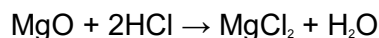
(1)

(b) In another experiment, a different sample of magnesium nitrate decomposed to produce 0.402 mol of gas. Calculate the volume, in dm<sup>3</sup>, that this gas would occupy at 333 K and 1.00 × 10<sup>5</sup> Pa.  
(The gas constant  $R = 8.31 \text{ J K}^{-1} \text{ mol}^{-1}$ )

.....  
.....  
.....  
.....

(3)

(c) A 0.0152 mol sample of magnesium oxide, produced from the decomposition of magnesium nitrate, was reacted with hydrochloric acid.



(i) Calculate the amount, in moles, of HCl needed to react completely with the 0.0152 mol sample of magnesium oxide.

.....

(1)

- (ii) This 0.0152 mol sample of magnesium oxide required 32.4 cm<sup>3</sup> of hydrochloric acid for complete reaction. Use this information and your answer to part (c) (i) to calculate the concentration, in mol dm<sup>-3</sup>, of the hydrochloric acid.

.....

.....

.....

(1)  
(Total 8 marks)