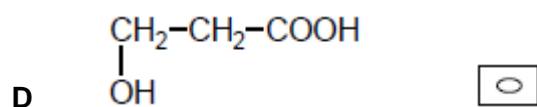
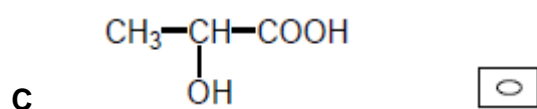
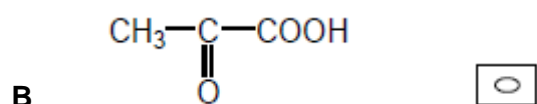
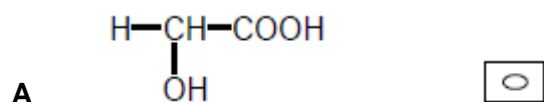


Q1. A drug is designed to simulate one of the following molecules that adsorbs onto the active site of an enzyme.

Which molecule requires the design of an optically active drug?



(Total 1 mark)