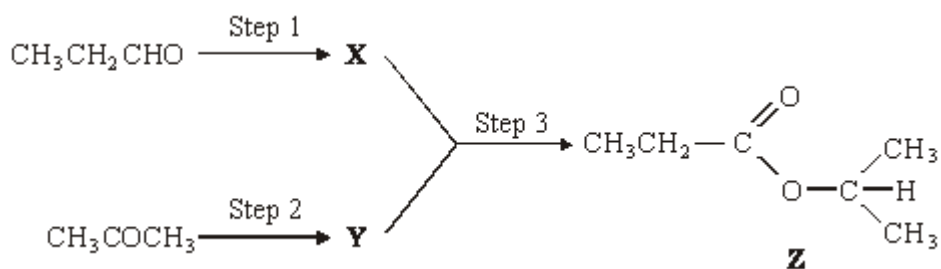


**Q1.** (a) Describe how propanal,  $\text{CH}_3\text{CH}_2\text{CHO}$ , and propanone,  $\text{CH}_3\text{COCH}_3$ , can be distinguished using

- (i) a chemical test and
- (ii) the number of peaks in their proton n.m.r. spectra.

(5)

(b) Compound **Z** can be produced by the reaction of compound **X** with compound **Y** as shown in the synthesis outlined below.



Identify compounds **X** and **Y**.

For each of the three steps in the synthesis, name the type of reaction involved and give reagents and conditions. Equations are **not** required.

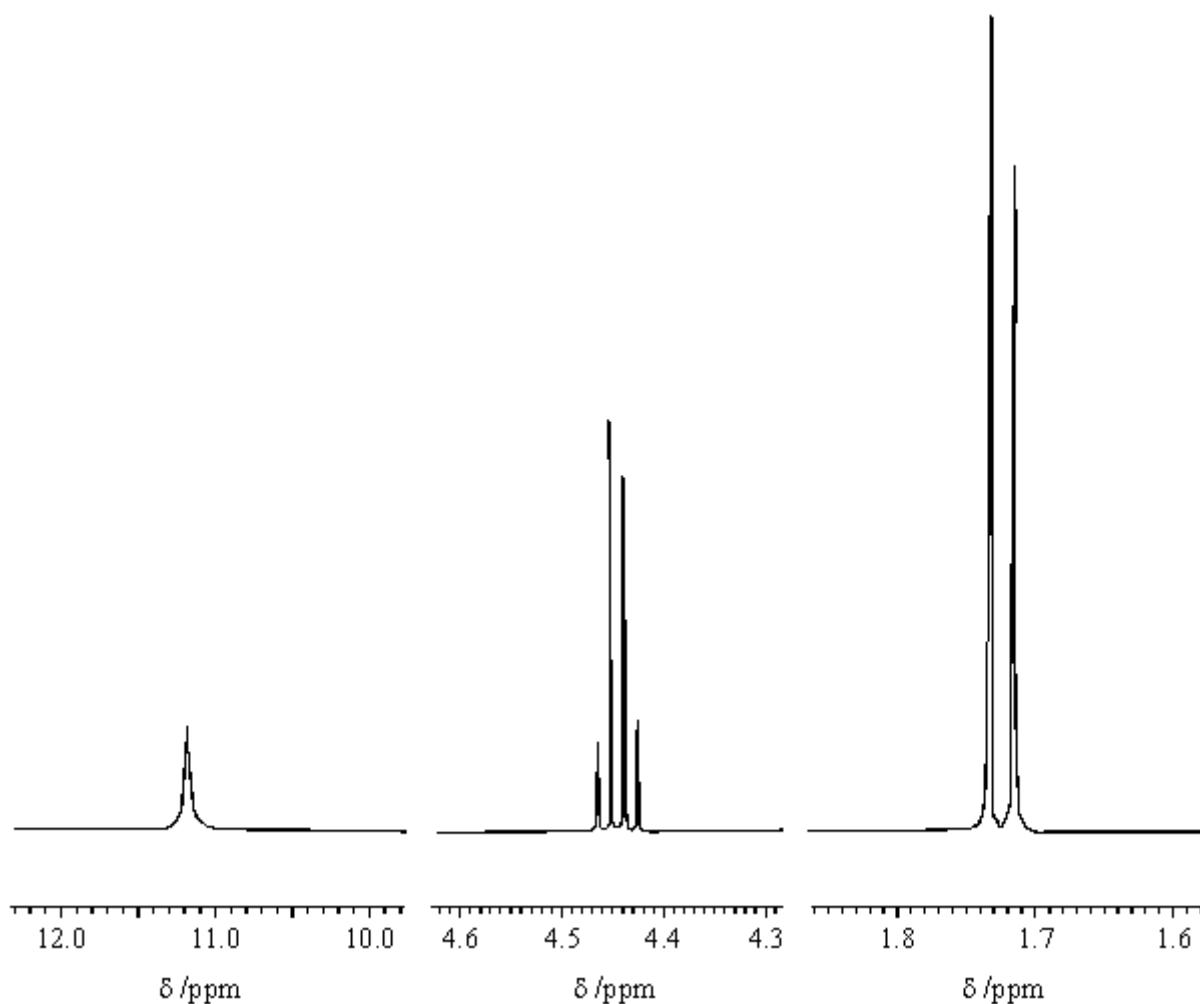
(10)  
(Total 15 marks)

**Q2.** Butan-1-ol was converted into butyl propanoate by reaction with an excess of propanoic acid. In the reaction, 6.0 g of the alcohol gave 7.4 g of the ester. The percentage yield of ester was

- A** 57
- B** 70
- C** 75
- D** 81

(Total 1 mark)

**Q3.** Three sections of the proton n.m.r. spectrum of  $\text{CH}_3\text{CHClCOOH}$  are shown below.



(a) Name the compound  $\text{CH}_3\text{CHClCOOH}$

.....

(1)

(b) Explain the splitting patterns in the peaks at  $\delta$  1.72 and  $\delta$  4.44

.....  
.....  
.....

(2)

- (c) Predict the splitting pattern that would be seen in the proton n.m.r. spectrum of the isomeric compound  $\text{ClCH}_2\text{CH}_2\text{COOH}$

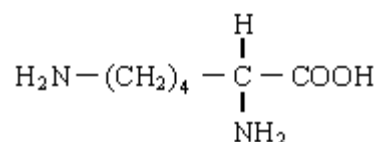
.....  
.....

(1)

- (d) The amino acid *alanine* is formed by the reaction of  $\text{CH}_3\text{CHClCOOH}$  with an excess of ammonia. The mechanism is nucleophilic substitution. Outline this mechanism, showing clearly the structure of *alanine*.

(5)

- (e) The amino acid *lysine* has the structure



Draw structures to show the product formed in each case when lysine reacts with

- (i) an excess of aqueous  $\text{HCl}$ ,

- (ii) an excess of aqueous  $\text{NaOH}$ ,

(iii) another molecule of lysine.

(3)  
(Total 12 marks)

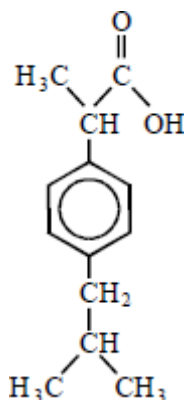
**Q4.** Which compound is formed by the reaction of ethane-1,2-diol with an acid?

- A**  $\text{H}-\overset{\text{O}}{\parallel}{\text{C}}-\text{CH}_2-\overset{\text{O}}{\parallel}{\text{C}}-\text{CH}_3$
- B**  $\text{H}-\overset{\text{O}}{\parallel}{\text{C}}-\text{O}-\text{CH}_2\text{CH}_2-\text{O}-\overset{\text{O}}{\parallel}{\text{C}}-\text{H}$
- C**  $\text{H}_3\text{C}-\overset{\text{O}}{\parallel}{\text{C}}-\text{O}-\overset{\text{O}}{\parallel}{\text{C}}-\text{CH}_3$
- D**  $\text{CH}_3\text{CH}_2-\text{O}-\text{CH}_2\text{CH}_2\text{OH}$

(Total 1 mark)

**Q5.** Ibuprofen is a drug used as an alternative to aspirin for the relief of pain, fever and inflammation.

The structure of ibuprofen is shown below.



Which one of the following statements is **not** correct?

- A It has optical isomers.
- B It liberates carbon dioxide with sodium carbonate solution.
- D It undergoes esterification with ethanol.
- D It undergoes oxidation with acidified potassium dichromate(VI).

(Total 1 mark)

**Q6.** Butenedioic acid,  $\text{HOOCCH}=\text{CHCOOH}$ , occurs as two stereoisomers. One of the isomers readily forms the acid anhydride  $\text{C}_4\text{H}_2\text{O}_3$  when warmed.

- (a) Draw the structures of the two isomers of butenedioic acid and name the type of isomerism shown. Use the structures of the two isomeric acids to suggest why only one of them readily forms an acid anhydride when warmed. Draw the structure of the acid anhydride formed.

(6)

- (b) Identify one electrophile which will react with butenedioic acid and outline a mechanism for this reaction.

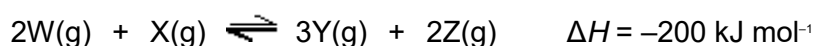
(4)

- (c) Write an equation for a reaction which occurs when butenedioic acid is treated with an excess of aqueous sodium hydroxide.

(2)

- (d) Describe and explain the appearance of the proton n.m.r. spectrum of butenedioic acid.

- Q7.** (a) The gaseous reactants **W** and **X** were sealed in a flask and the mixture left until the following equilibrium had been established.



Write an expression for the equilibrium constant,  $K_p$ , for this reaction.  
State one change in the conditions which would both increase the rate of reaction and decrease the value of  $K_p$ . Explain your answers.

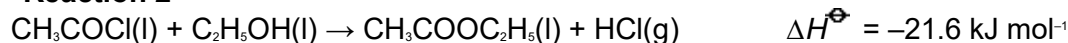
(7)

- (b) Ethyl ethanoate can be prepared by the reactions shown below.

**Reaction 1**



**Reaction 2**



- (i) Give one advantage and one disadvantage of preparing ethyl ethanoate by **Reaction 1** rather than by **Reaction 2**.

- (ii) Use the information given above and the data below to calculate values for the standard entropy change,  $\Delta S^\ominus$ , and the standard free-energy change,  $\Delta G^\ominus$ , for **Reaction 2** at 298 K.

	$\text{CH}_3\text{COCl}(\text{l})$	$\text{C}_2\text{H}_5\text{OH}(\text{l})$	$\text{CH}_3\text{COOC}_2\text{H}_5(\text{l})$	$\text{HCl}(\text{g})$
$S^\ominus / \text{JK}^{-1}\text{mol}^{-1}$	201	161	259	187

(8)  
(Total 15 marks)

