


AS Level Chemistry A

H032/01 Breadth in chemistry

Friday 27 May 2016 – Morning

Time allowed: 1 hour 30 minutes



You must have:

- the Data Sheet for Chemistry A
(sent with general stationery)

You may use:

- a scientific calculator



First name

Last name

Centre
number

Candidate
number

INSTRUCTIONS

- Use black ink. HB pencil may be used for graphs and diagrams only.
- Complete the boxes above with your name, centre number and candidate number.
- Answer **all** the questions.
- Write your answer to each question in the space provided. If additional space is required, you should use the lined page(s) at the end of this booklet. The question number(s) must be clearly shown.
- Do **not** write in the barcodes.

INFORMATION

- The total mark for this paper is **70**.
- The marks for each question are shown in brackets [].
- This document consists of **24** pages.

SECTION A

You should spend a maximum of 25 minutes on this section.

Write your answer to each question in the box provided.

Answer **all** the questions.

- 1 Which row shows the atomic structure of $^{37}\text{Cl}^-$?

	protons	neutrons	electrons
A	17	18	20
B	17	20	18
C	18	19	17
D	20	17	21

Your answer

[1]

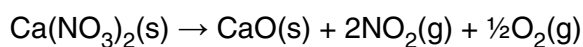
- 2 What is the formula of ammonium sulfide?

- A** NH_4S
B NH_4SO_4
C $(\text{NH}_4)_2\text{S}$
D $(\text{NH}_4)_2\text{SO}_4$

Your answer

[1]

- 3 Calcium nitrate, $\text{Ca}(\text{NO}_3)_2$, decomposes when heated, as shown below.



A student decomposes 0.00500 mol of $\text{Ca}(\text{NO}_3)_2$ and collects the gas that is produced.

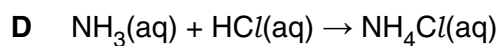
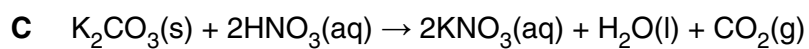
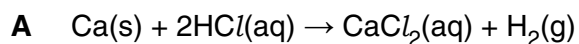
Calculate the volume of gas that the student should expect to collect, measured at room temperature and pressure.

- A** 60cm^3
B 120cm^3
C 240cm^3
D 300cm^3

Your answer

[1]

4 Which equation is **not** a neutralisation reaction?



Your answer

[1]

5 What is the oxidation number of nitrogen in $\text{Mg}(\text{NO}_3)_2$?

A -3

B +2

C +5

D +6

Your answer

[1]

6 How many orbitals are occupied in a silicon atom?

A 5

B 7

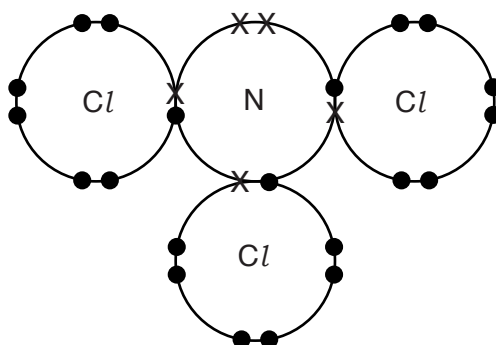
C 8

D 9

Your answer

[1]

7 A 'dot-and-cross' diagram for nitrogen trichloride, NCl_3 , is shown below.



Which row shows the correct shape and bond angle in a molecule of NCl_3 ?

	Name of shape	Bond angle
A	Pyramidal	104.5°
B	Pyramidal	107°
C	Tetrahedral	107°
D	Trigonal planar	120°

Your answer

[1]

8 What is the shape around the carbon atoms in graphene?

- A** linear
- B** pyramidal
- C** tetrahedral
- D** trigonal planar

Your answer

[1]

- 9 Electron configurations for atoms of different elements are shown below.

Which electron configuration represents the element with the largest first ionisation energy?

- A $1s^22s^2$
 B $1s^22s^22p^4$
 C $1s^22s^22p^6$
 D $1s^22s^22p^63s^2$

Your answer

[1]

- 10 Successive ionisation energies of four elements in Period 3 are shown below.

Which letter could represent magnesium?

	Ionisation energy/ kJ mol^{-1}				
	1st	2nd	3rd	4th	5th
A	1251	2298	3822	5159	6542
B	738	1451	7733	10543	13630
C	496	4563	6913	9544	13352
D	578	1817	2745	11577	14842

Your answer

[1]

- 11 A student adds aqueous sodium carbonate to one test-tube and aqueous silver nitrate to a second test-tube.
 The student adds dilute sulfuric acid to each test-tube.

Which row has the correct observations?

	Aqueous sodium carbonate	Aqueous silver nitrate
A	no change	precipitate
B	no change	no change
C	effervescence	no change
D	effervescence	precipitate

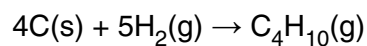
Your answer

[1]

- 12 The enthalpy change of formation of butane can be calculated using the enthalpy changes of combustion, $\Delta_c H$, below.

Substance	C(s)	H ₂ (g)	C ₄ H ₁₀ (g)
$\Delta_c H/\text{kJ mol}^{-1}$	-394	-286	-2877

Calculate the enthalpy change of formation of C₄H₁₀(g).

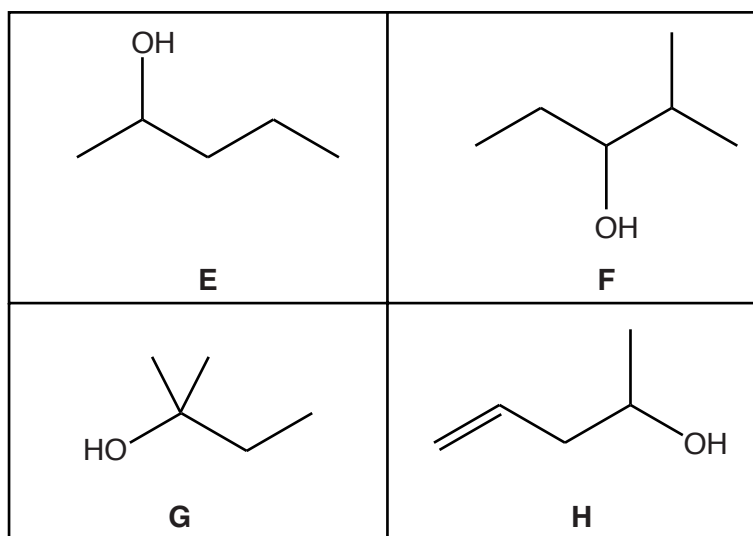


- A -2197 kJ mol⁻¹
 B -129 kJ mol⁻¹
 C +129 kJ mol⁻¹
 D +2197 kJ mol⁻¹

Your answer

[1]

- 13 The skeletal formulae of four alcohols, **E**, **F**, **G** and **H**, are shown below.



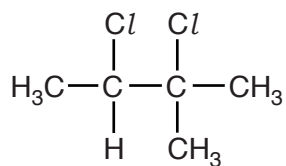
Which pair of alcohols are structural isomers of each other?

- A **E** and **F**
 B **E** and **G**
 C **E** and **H**
 D **F** and **G**

Your answer

[1]

14 What is the name of the following compound?



- A 1,2-dichloro-1,2-dimethylpropane
- B 2,3-dichloro-2,3-dimethylpropane
- C 2,3-dichloro-2-methylbutane
- D 2,3-dichloro-3-methylbutane

Your answer

[1]

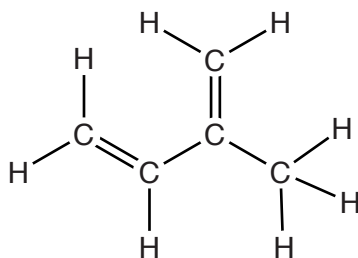
15 Which compound has non-polar molecules?

- A *E*-1,2-dichlorobut-2-ene
- B *E*-2,3-dichlorobut-2-ene
- C *Z*-2,3-dichlorobut-2-ene
- D *Z*-1,4-dichlorobut-2-ene

Your answer

[1]

16 The displayed formula for a hydrocarbon is shown below.



How many σ and π bonds are present in a molecule of this hydrocarbon?

	σ bonds	π bonds
A	2	4
B	10	2
C	10	4
D	12	2

Your answer

[1]

17 Chlorine reacts with 1-chloropropane in the presence of ultraviolet radiation via a radical substitution mechanism.

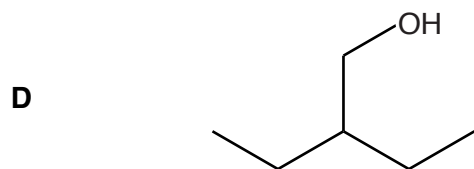
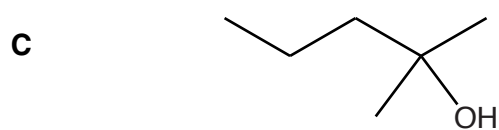
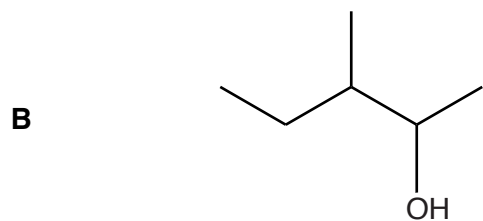
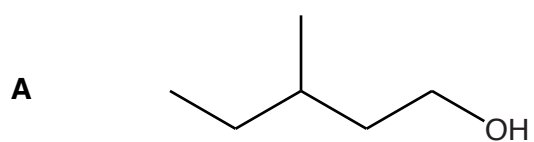
Which equation shows a propagation step in the mechanism for this reaction?

- A** $\text{Cl}_2 \rightarrow \bullet\text{Cl} + \bullet\text{Cl}$
- B** $\bullet\text{Cl} + \bullet\text{C}_3\text{H}_6\text{Cl} \rightarrow \text{C}_3\text{H}_6\text{Cl}_2$
- C** $\text{C}_3\text{H}_7\text{Cl} + \bullet\text{Cl} \rightarrow \text{C}_3\text{H}_6\text{Cl}_2 + \bullet\text{H}$
- D** $\bullet\text{Cl} + \text{C}_3\text{H}_7\text{Cl} \rightarrow \bullet\text{C}_3\text{H}_6\text{Cl} + \text{HCl}$

Your answer

[1]

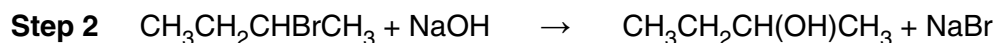
18 Which alcohol can be oxidised by $K_2Cr_2O_7$ and H_2SO_4 to form a ketone?



Your answer

[1]

19 A reaction sequence is shown below:



Which type of reaction mechanism is involved in each step?

	Step 1	Step 2
A	electrophilic addition	electrophilic substitution
B	electrophilic addition	nucleophilic substitution
C	nucleophilic addition	electrophilic substitution
D	nucleophilic addition	nucleophilic substitution

Your answer

[1]

20 When heated with NaOH(aq), 1-iodobutane is hydrolysed at a much faster rate than 1-chlorobutane.

Which statement explains the different rates?

- A** The C–I bond enthalpy is greater than the C–Cl bond enthalpy.
- B** The C–I bond is less polar than the C–Cl bond.
- C** The C–I bond has a C atom with a greater δ^+ charge than in the C–Cl bond.
- D** The C–I bond requires less energy to break than the C–Cl bond.

Your answer

[1]

11
BLANK PAGE

PLEASE DO NOT WRITE ON THIS PAGE

Turn over for the next question

12
SECTION B

Answer **all** the questions.

21 A twenty pence coin contains copper and nickel.

(a) Copper and nickel each exist as a mixture of isotopes.

State the similarities and differences between the atomic structure of isotopes of the **same** element.

Similarities

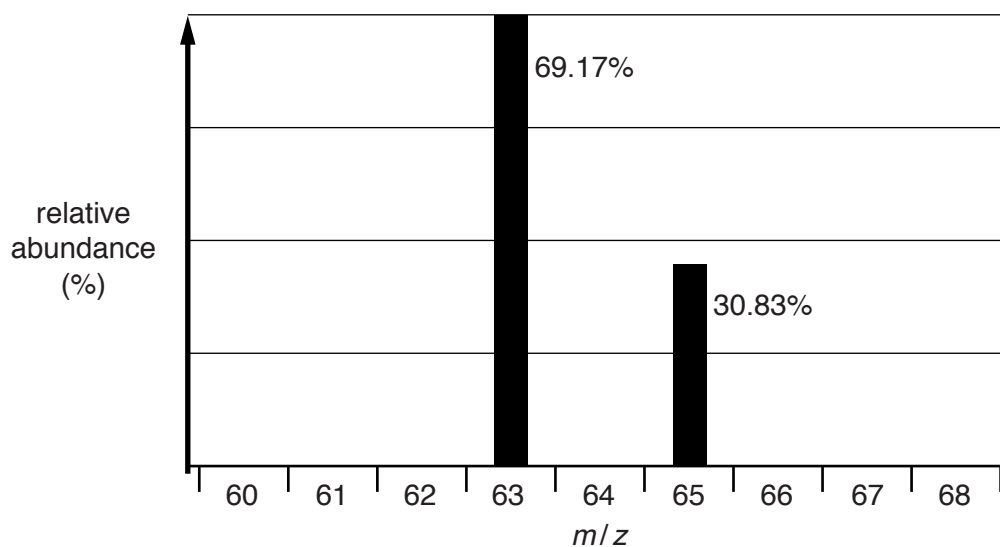
.....

Differences

.....

[2]

(b) The copper used to make a batch of coins is analysed by mass spectrometry. The mass spectrum is shown below.



(i) Calculate the relative atomic mass of the copper used to make the coins.

Give your answer to **two** decimal places.

relative atomic mass = [2]

- (ii) One coin has a mass of 5.00 g and contains 84.0% of copper, by mass.

Calculate the number of copper atoms in one coin.

Give your answer in standard form and to **three** significant figures.

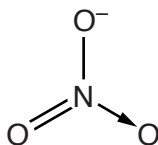
number of copper atoms = [2]

- (c) Nickel(II) nitrate, $\text{Ni}(\text{NO}_3)_2$, can be prepared by reacting nickel(II) oxide with dilute nitric acid.

- (i) Write the equation for this reaction.

..... [1]

- (ii) $\text{Ni}(\text{NO}_3)_2$ contains the NO_3^- ion. The nitrogen atom bonds to the oxygen atoms with a single covalent bond, a double covalent bond and a dative covalent bond, as shown below.



Draw the 'dot-and-cross' diagram for the NO_3^- ion, showing outer shell electrons only. Use a different symbol for the extra electron.

[2]

22 This question is about several salts.

- (a) A hydrated salt, compound **A**, is analysed and has the following percentage composition by mass:

Cr, 19.51%; Cl, 39.96%; H, 4.51%; O, 36.02%.

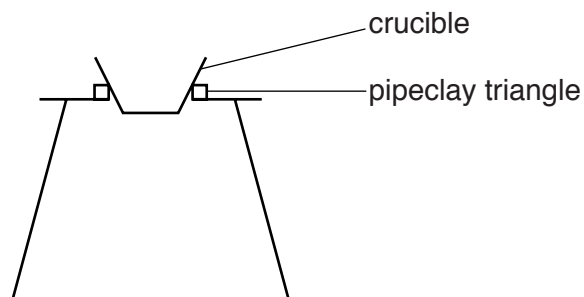
Calculate the formula of compound **A**, showing clearly the water of crystallisation.

Show your working.

formula of compound **A** = [3]

- (b) A student carries out an experiment to determine the amount of water of crystallisation in the formula of another hydrated salt. The student intends to remove the water by heating the hydrated salt.

A diagram of the apparatus used by the student is shown below.



- The student adds the hydrated salt to the crucible and weighs the crucible and contents.
- The student heats the crucible and contents and allows them to cool.
- The student weighs the crucible and residue.

The student's results are shown below.

Mass of crucible + hydrated salt/g	16.84
Mass of crucible + residue after heating/g	16.26

(i) The maximum error in each mass measurement using the balance is ± 0.005 g.

Calculate the percentage error in the mass of water removed.

percentage error = % [1]

(ii) Suggest **one** modification that the student could make to their method to reduce the percentage error in the mass of water removed.

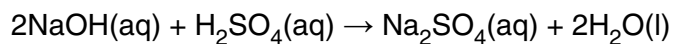
.....
.....
..... [1]

(iii) The student is not sure that all the water of crystallisation has been removed.

How could the student modify the experiment to be confident that all the water of crystallisation has been removed?

.....
.....
..... [1]

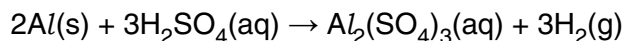
- (c) A student prepares a solution of sodium sulfate, Na_2SO_4 , by adding $6.25 \times 10^{-2} \text{ mol dm}^{-3}$ sulfuric acid, H_2SO_4 , from a burette to 25.0 cm^3 of $0.124 \text{ mol dm}^{-3}$ NaOH in a conical flask.



Calculate the minimum volume of the H_2SO_4 that the student would need to completely react with the NaOH present.

volume of $\text{H}_2\text{SO}_4 = \dots\dots\dots \text{ cm}^3$ [3]

- (d) Salts can also be prepared in redox reactions of metals with acids.
A student prepares a solution of aluminium sulfate by reacting aluminium with dilute sulfuric acid.



Using oxidation numbers, show which element has been oxidised and which has been reduced in this reaction. State the changes in oxidation numbers, including all signs.

element oxidised.....

oxidation number change: from to

element reduced

oxidation number change: from to.....

[2]

23 This question is about properties of the halogens and halide ions.

(a) Bromine can be extracted by bubbling chlorine gas through concentrated solutions containing bromide ions.

(i) Write the electron configuration of a bromide ion, in terms of sub-shells.

..... [1]

(ii) Write an ionic equation for this reaction and state why this reaction takes place in terms of reactivity of the halogens.

.....

 [2]

(b) Chlorine is used in water treatment.

State **one** benefit and **one** risk of chlorine in water treatment.

Benefit

 Risk
 [1]

(c) Precipitation reactions can be used to distinguish between halide ions.

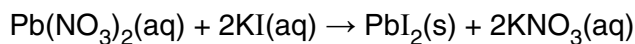
(i) State the reagent needed for these precipitation reactions.

..... [1]

(ii) How would the appearance of the precipitates allow you to distinguish between chloride, bromide and iodide ions?

Chloride
 Bromide
 Iodide [1]

- 24 Aqueous lead(II) nitrate, $\text{Pb}(\text{NO}_3)_2(\text{aq})$, and aqueous potassium iodide, $\text{KI}(\text{aq})$, react together. The equation is shown below.



A student carries out an experiment to determine the enthalpy change of reaction, $\Delta_r H$, of this reaction.

The student follows the method outlined below.

- Add 50.0 cm^3 of 1.50 mol dm^{-3} $\text{Pb}(\text{NO}_3)_2(\text{aq})$ to a polystyrene cup.
- Measure out 50.0 cm^3 of a solution of $\text{KI}(\text{aq})$, which is in excess.
- Measure the temperature of both solutions.
- Add the $\text{KI}(\text{aq})$ to the polystyrene cup, stir the mixture and record the maximum temperature.

Temperature readings

Initial temperature of both solutions	= 19.5°C
Maximum temperature of mixture	= 30.0°C

- (a) Calculate $\Delta_r H$, in kJ mol^{-1} , for the reaction shown in the equation above.

Give your answer to an **appropriate** number of significant figures.

Assume that the density of all solutions and specific heat capacity, c , of the reaction mixture is the same as for water.

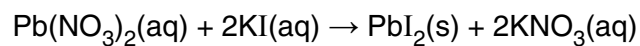
$\Delta_r H = \dots\dots\dots \text{kJ mol}^{-1}$ [4]

- (b) Write an ionic equation for the reaction that the student carries out.

Include state symbols.

..... [1]

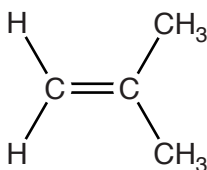
- (c) The 50.0 cm³ of KI(aq) used in the experiment contains 10% more KI than is needed to react with 50.0 cm³ of 1.50 mol dm⁻³ Pb(NO₃)₂(aq).



Calculate the concentration, in mol dm⁻³, of KI that the student used.

concentration of KI = mol dm⁻³ [2]

- 26 Compound **B**, shown below, can be used to synthesise organic compounds with different functional groups.



Compound B

- (a) (i) Compound **B** is a member of a homologous series.

Name the homologous series and state its general formula.

Homologous series

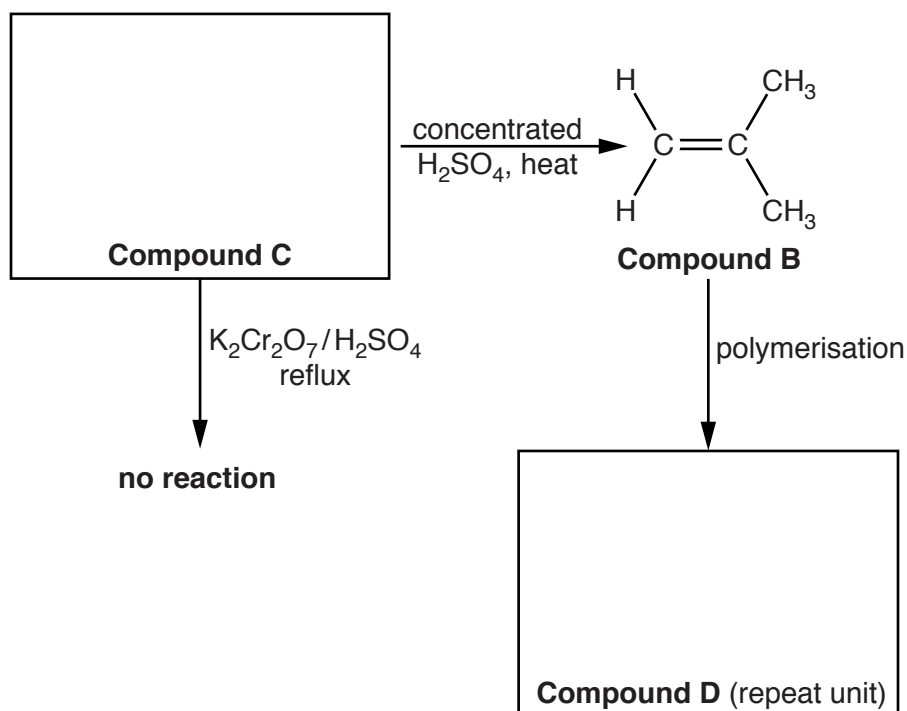
General formula [1]

- (ii) What reagents and conditions are needed to convert compound **B** into a saturated hydrocarbon?

..... [1]

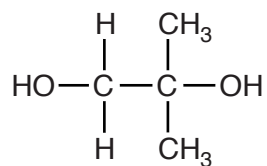
- (b) Some reactions involving compound **B** are shown in the flowchart below.

Complete the flowchart, showing the structures of organic compounds **C** and **D**.



[2]

(c) The structure of compound **F** is shown below.



Compound F

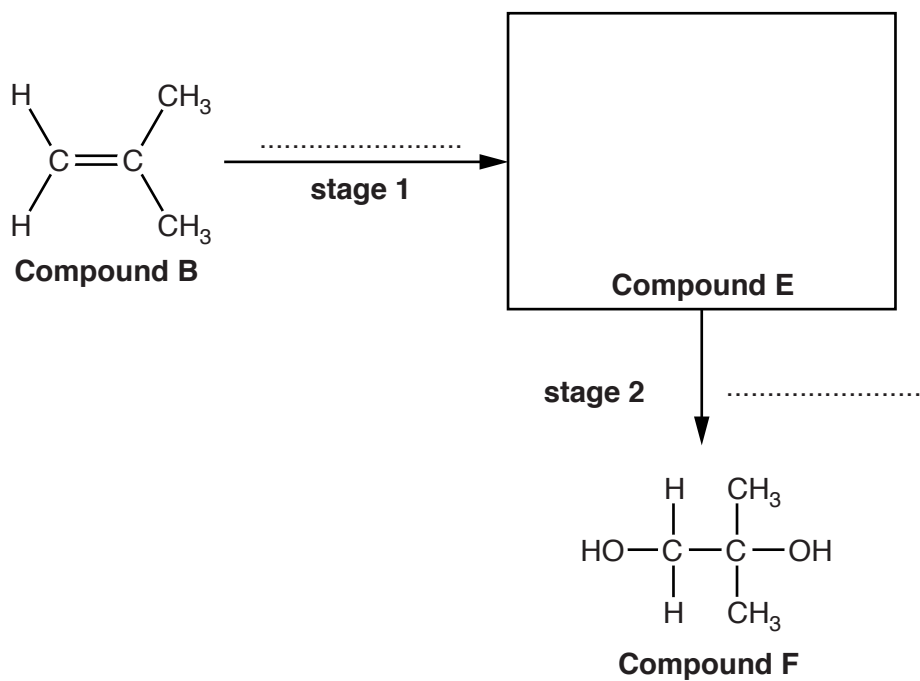
(i) What is the empirical formula of compound **F**?

..... [1]

(ii) A student plans a two-stage synthesis for preparing compound **F** from compound **B**.

The synthesis first prepares compound **E**, as shown in the flowchart.

Draw the structure of compound **E** in the box and state the reagents for each stage on the dotted lines.



[3]

END OF QUESTION PAPER

ADDITIONAL ANSWER SPACE

If additional space is required, you should use the following lined page(s). The question number(s) must be clearly shown in the margin(s).

A large rectangular area with a solid vertical line on the left side and horizontal dotted lines across the rest of the page, providing space for writing answers.



Copyright Information

OCR is committed to seeking permission to reproduce all third-party content that it uses in its assessment materials. OCR has attempted to identify and contact all copyright holders whose work is used in this paper. To avoid the issue of disclosure of answer-related information to candidates, all copyright acknowledgements are reproduced in the OCR Copyright Acknowledgements Booklet. This is produced for each series of examinations and is freely available to download from our public website (www.ocr.org.uk) after the live examination series.

If OCR has unwittingly failed to correctly acknowledge or clear any third-party content in this assessment material, OCR will be happy to correct its mistake at the earliest possible opportunity.

For queries or further information please contact the Copyright Team, First Floor, 9 Hills Road, Cambridge CB2 1GE.

OCR is part of the Cambridge Assessment Group; Cambridge Assessment is the brand name of University of Cambridge Local Examinations Syndicate (UCLES), which is itself a department of the University of Cambridge.