

Please check the examination details below before entering your candidate information

Candidate surname					Other names				
Centre Number					Candidate Number				
<input type="text"/>	<input type="text"/>	<input type="text"/>	<input type="text"/>	<input type="text"/>	<input type="text"/>	<input type="text"/>	<input type="text"/>	<input type="text"/>	<input type="text"/>

Pearson Edexcel International Advanced Level

Time 1 hour 45 minutes

Paper reference **WCH15/01**

Chemistry

International Advanced Level

UNIT 5: Transition Metals and Organic Nitrogen Chemistry

You must have:
Scientific calculator, Data Booklet, ruler

Total Marks

Instructions

- Use **black** ink or ball-point pen.
- **Fill in the boxes** at the top of this page with your name, centre number and candidate number.
- Answer **all** questions.
- Answer the questions in the spaces provided
– *there may be more space than you need.*

Information

- The total mark for this paper is 90.
- The marks for **each** question are shown in brackets
– *use this as a guide as to how much time to spend on each question.*
- In the question marked with an **asterisk (*)**, marks will be awarded for your ability to structure your answer logically, showing how the points that you make are related or follow on from each other where appropriate.
- A Periodic Table is printed on the back cover of this paper.

Advice

- Read each question carefully before you start to answer it.
- Show all your working in calculations and include units where appropriate.
- Try to answer every question.
- Check your answers if you have time at the end.

Turn over ►

P70956A

©2022 Pearson Education Ltd.

Q:1/1/1/1



Pearson

SECTION A

Answer ALL the questions in this section.

You should aim to spend no more than 20 minutes on this section.

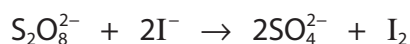
For each question, select one answer from A to D and put a cross in the box ☒. If you change your mind, put a line through the box ☒ and then mark your new answer with a cross ☒.

1 This question is about catalysts.

(a) Some standard electrode potentials are shown.

Right-hand electrode system	E^\ominus/V
$\text{Cu}^{2+} + \text{e}^- \rightleftharpoons \text{Cu}^+$	+0.15
$\text{I}_2 + 2\text{e}^- \rightleftharpoons 2\text{I}^-$	+0.54
$\text{Fe}^{3+} + \text{e}^- \rightleftharpoons \text{Fe}^{2+}$	+0.77
$\text{Cl}_2 + 2\text{e}^- \rightleftharpoons 2\text{Cl}^-$	+1.36
$\text{S}_2\text{O}_8^{2-} + 2\text{e}^- \rightleftharpoons 2\text{SO}_4^{2-}$	+2.01

Which of these ions is most likely to catalyse the reaction between $\text{S}_2\text{O}_8^{2-}$ and I^- ?



(1)

- A Cl^-
- B Fe^{2+}
- C Cu^{2+}
- D Cu^+

(b) Which term best describes the type of catalyst for the reaction in (a)?

(1)

- A autocatalyst
- B biocatalyst
- C heterogeneous
- D homogeneous



(c) Which substance is manufactured in a process involving a reaction catalysed by vanadium(V) oxide?

(1)

- A ammonia
- B nitric acid
- C sodium hydroxide
- D sulfuric acid

(Total for Question 1 = 3 marks)

2 This question is about alkaline hydrogen-oxygen fuel cells.

(a) What is the half-equation at the **negative** electrode?

(1)

- A $\text{H}_2(\text{g}) + 2\text{OH}^-(\text{aq}) \rightarrow 2\text{H}_2\text{O}(\text{l}) + 2\text{e}^-$
- B $2\text{H}_2\text{O}(\text{l}) + 2\text{e}^- \rightarrow \text{H}_2(\text{g}) + 2\text{OH}^-(\text{aq})$
- C $\text{O}_2(\text{g}) + 2\text{H}_2\text{O}(\text{l}) + 4\text{e}^- \rightarrow 4\text{OH}^-(\text{aq})$
- D $4\text{OH}^-(\text{aq}) \rightarrow \text{O}_2(\text{g}) + 2\text{H}_2\text{O}(\text{l}) + 4\text{e}^-$

(b) Which statement is correct for an alkaline hydrogen-oxygen fuel cell when compared with an acidic hydrogen-oxygen fuel cell?

(1)

- A E_{cell}^\ominus is greater
- B $\Delta S_{\text{total}}^\ominus$ is greater
- C the catalyst is more efficient
- D K_c is greater

(Total for Question 2 = 2 marks)

Use this space for rough working. Anything you write in this space will gain no credit.

DO NOT WRITE IN THIS AREA

DO NOT WRITE IN THIS AREA

DO NOT WRITE IN THIS AREA



P 7 0 9 5 6 A 0 3 3 2

- 3 Excess aqueous sodium thiosulfate is added to an aqueous solution of ammonium vanadate(V).

What colour is the mixture when the reaction is complete?

Refer to page 10 of the Data Booklet.

- A yellow
- B blue
- C green
- D violet

(Total for Question 3 = 1 mark)

Use this space for rough working. Anything you write in this space will gain no credit.

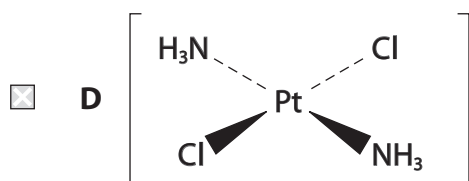
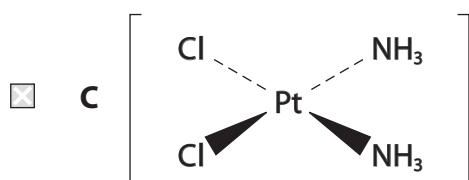
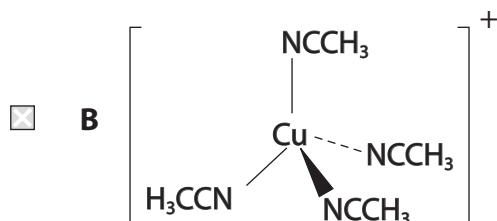
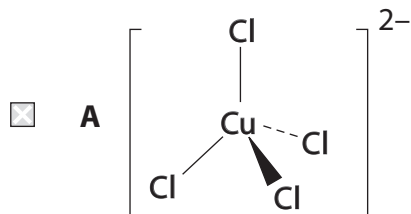
DO NOT WRITE IN THIS AREA

DO NOT WRITE IN THIS AREA

DO NOT WRITE IN THIS AREA



4 Which transition metal complex is commonly used as a treatment for cancer?



(Total for Question 4 = 1 mark)

5 Which reagent, when added to aqueous sodium dichromate(VI), $\text{Na}_2\text{Cr}_2\text{O}_7(\text{aq})$, causes a shift in equilibrium resulting in the formation of a yellow solution?

- A $\text{NaOH}(\text{aq})$
 B $\text{HCl}(\text{aq})$
 C $\text{Zn}(\text{s})$
 D $\text{H}_2\text{O}_2(\text{aq})$

(Total for Question 5 = 1 mark)

DO NOT WRITE IN THIS AREA

DO NOT WRITE IN THIS AREA

DO NOT WRITE IN THIS AREA



P 7 0 9 5 6 A 0 5 3 2

- 6 A titre has an uncertainty of 0.32%.
The uncertainty of each burette reading is $\pm 0.05 \text{ cm}^3$.

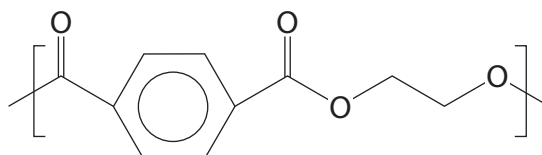
What is the most likely value of the titre in cm^3 ?

- A 6.40
 B 15.60
 C 31.25
 D 32.00

(Total for Question 6 = 1 mark)

- 7 This question is about polymers.

(a) A repeat unit of the polymer PET has the structure shown.



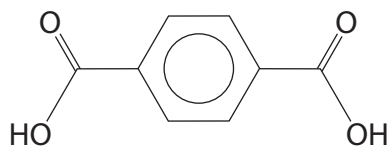
What is the percentage by mass of carbon in the repeat unit?

(1)

- A 57.1 %
 B 62.5 %
 C 65.2 %
 D 66.7 %



(b) One of the monomers used to make PET is benzene-1,4-dicarboxylic acid.

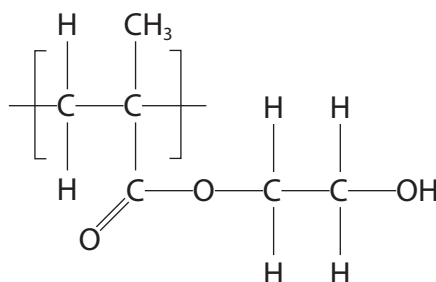


How many peaks are there in the ^{13}C NMR spectrum of benzene-1,4-dicarboxylic acid?

(1)

- A 2
- B 3
- C 4
- D 6

(c) The repeat unit of another polymer has the structure shown.



This polymer is formed from

(1)

- A a single type of monomer by an addition reaction
- B a single type of monomer by a condensation reaction
- C two different types of monomer by an addition reaction
- D two different types of monomer by a condensation reaction

(Total for Question 7 = 3 marks)

Use this space for rough working. Anything you write in this space will gain no credit.

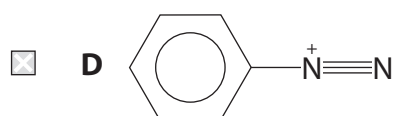
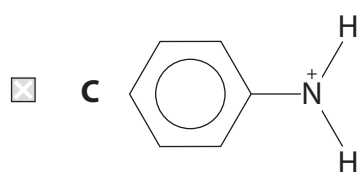
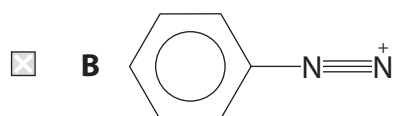
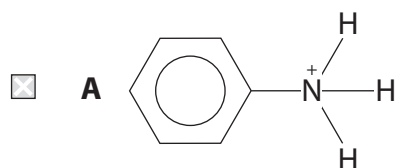
DO NOT WRITE IN THIS AREA

DO NOT WRITE IN THIS AREA

DO NOT WRITE IN THIS AREA



8 Which ion is formed when a mixture of sodium nitrite, NaNO_2 , and dilute hydrochloric acid reacts with phenylamine at a temperature of 5°C ?



(Total for Question 8 = 1 mark)

Use this space for rough working. Anything you write in this space will gain no credit.

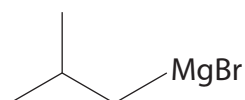
DO NOT WRITE IN THIS AREA

DO NOT WRITE IN THIS AREA

DO NOT WRITE IN THIS AREA



9 This question is about a Grignard reagent, 2-methylpropylmagnesium bromide.



This Grignard reagent can be prepared by refluxing 1-bromo-2-methylpropane with magnesium in a flask containing a dry solvent and anti-bumping granules.

(a) Which solvent is used in this preparation?

(1)

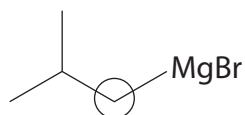
- A ethanol
- B ether
- C pentane
- D propanone

(b) Why are anti-bumping granules added to the flask?

(1)

- A to lower the boiling temperature of the solvent
- B to prevent the solvent evaporating
- C because the solvent is highly flammable
- D to ensure the solvent boils smoothly

(c) The structure of 2-methylpropylmagnesium bromide is shown.



Which statement best describes the circled carbon atom?

(1)

- A positive and electrophilic
- B positive and nucleophilic
- C negative and electrophilic
- D negative and nucleophilic

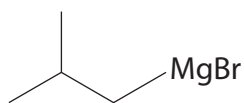
DO NOT WRITE IN THIS AREA

DO NOT WRITE IN THIS AREA

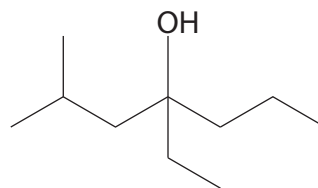
DO NOT WRITE IN THIS AREA



(d) Which compound reacts with 2-methylpropylmagnesium bromide to form 4-ethyl-2-methylheptan-4-ol?



2-methylpropylmagnesium bromide



4-ethyl-2-methylheptan-4-ol

(1)

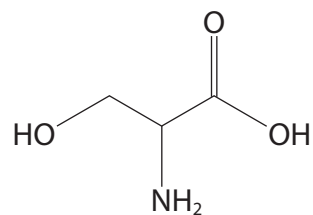
- A hexan-3-one
- B hexan-2-one
- C hexan-3-ol
- D hexan-2-ol

(Total for Question 9 = 4 marks)

Use this space for rough working. Anything you write in this space will gain no credit.



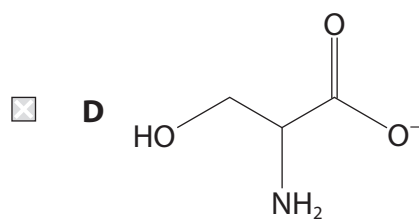
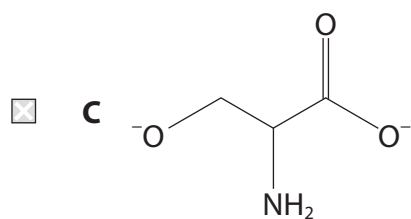
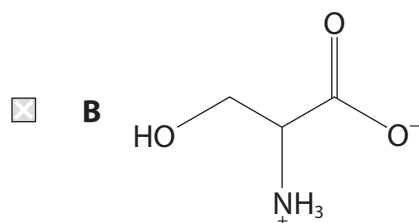
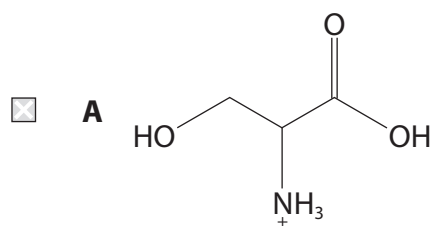
10 This question is about the amino acid serine.



serine

(a) Which ion is most likely to form if serine is dissolved in sodium carbonate solution?

(1)



DO NOT WRITE IN THIS AREA

DO NOT WRITE IN THIS AREA

DO NOT WRITE IN THIS AREA



(b) Serine has a melting temperature in the region of 200–300 °C.

This high melting temperature is mainly due to the formation of

(1)

- A hydrogen bonds
- B ionic bonds
- C London forces
- D peptide bonds

(Total for Question 10 = 2 marks)

11 Which is correct for the reaction of bromine with phenol when compared with benzene?

	Reactivity of phenol	Electron density of the ring in phenol
<input type="checkbox"/> A	more reactive	higher electron density
<input type="checkbox"/> B	more reactive	lower electron density
<input type="checkbox"/> C	less reactive	higher electron density
<input type="checkbox"/> D	less reactive	lower electron density

(Total for Question 11 = 1 mark)

TOTAL FOR SECTION A = 20 MARKS



DO NOT WRITE IN THIS AREA

DO NOT WRITE IN THIS AREA

DO NOT WRITE IN THIS AREA

BLANK PAGE



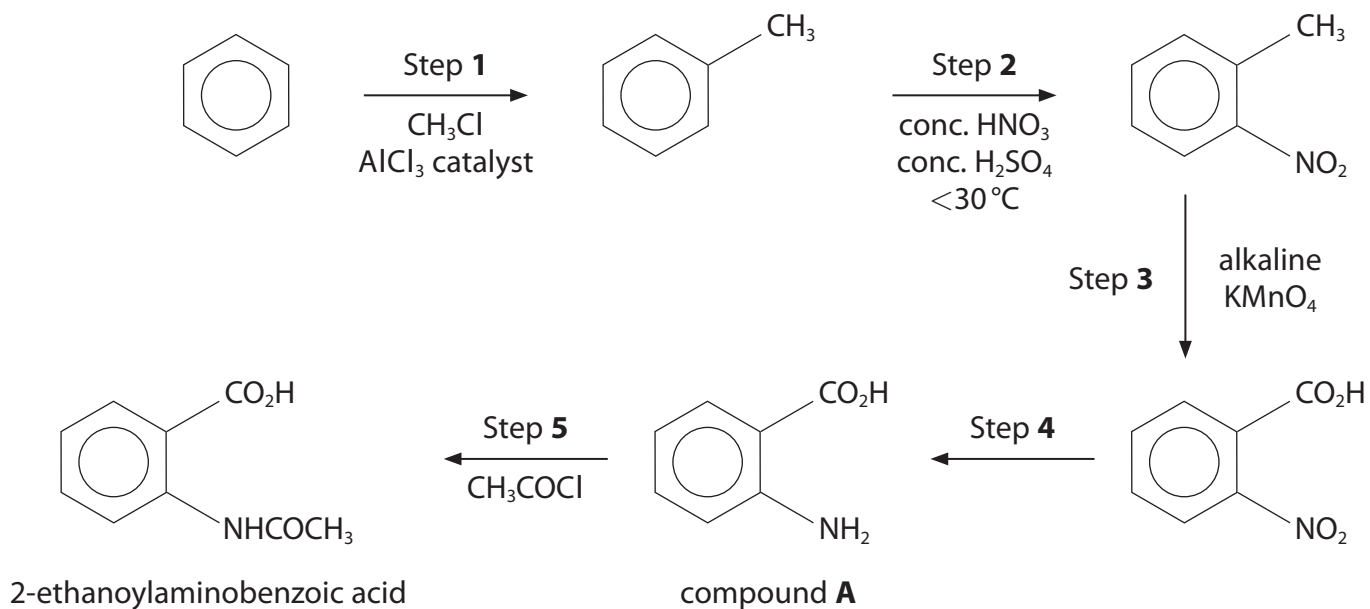
SECTION B

Answer ALL the questions. Write your answers in the spaces provided.

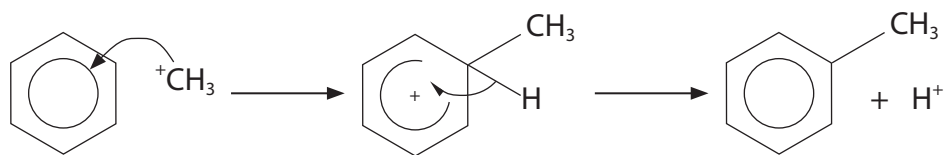

12 This question is about 2-ethanoylamino benzoic acid.

Crystals of this compound emit flashes of light when crushed.

2-ethanoylamino benzoic acid can be synthesised using benzene as a starting material.



(a) A student proposed a mechanism for Step 1.



(i) Identify **two** errors in the mechanism by circling them.

(2)



(ii) State how the errors identified in (a)(i) should be corrected.
Justify your answer in terms of the structures involved.

(2)

.....

.....

.....

.....

.....

.....

.....

.....

(b) Give a reason why it is important to keep the temperature below 30°C in Step 2.

(1)

.....

.....

.....

(c) State the type of reaction in Step 3.

(1)

.....

(d) Identify, by name or formula, the reagents needed for Step 4.

(1)

.....

.....

DO NOT WRITE IN THIS AREA

DO NOT WRITE IN THIS AREA

DO NOT WRITE IN THIS AREA



P 7 0 9 5 6 A 0 1 5 3 2

- (e) Explain how the structures of ethanoyl chloride, CH_3COCl , and compound **A** enable them to react forming 2-ethanoylaminobenzoic acid in Step 5.

(3)

.....

.....

.....

.....

.....

.....

.....

.....

- (f) Calculate the volume of benzene required to form 5.92 g of 2-ethanoylaminobenzoic acid, assuming the overall yield for the synthesis is 28.2%.

Give your answer to an appropriate number of significant figures.

[Density of benzene = 0.879 g cm^{-3}]

(4)

(Total for Question 12 = 14 marks)



DO NOT WRITE IN THIS AREA

DO NOT WRITE IN THIS AREA

DO NOT WRITE IN THIS AREA

BLANK PAGE



***13** Compare and contrast the reactions in aqueous solution of nickel(II) sulfate with sodium hydroxide and with ammonia.

For each reaction include

- what would be seen
- the equation (state symbols are not required)
- the type of reaction.

(6)

DO NOT WRITE IN THIS AREA

DO NOT WRITE IN THIS AREA

DO NOT WRITE IN THIS AREA



DO NOT WRITE IN THIS AREA

DO NOT WRITE IN THIS AREA

DO NOT WRITE IN THIS AREA

Large area with horizontal dotted lines for writing.

(Total for Question 13 = 6 marks)



14 A compound, **Q**, is a pale yellow liquid that is the main constituent of cinnamon oil. **Q** contains the elements carbon, hydrogen and oxygen only.

- (a) Complete combustion of 6.02 g of **Q** produces 18.07 g of carbon dioxide and 3.30 g of water.

Determine the empirical formula of **Q**.

(4)

DO NOT WRITE IN THIS AREA

DO NOT WRITE IN THIS AREA

DO NOT WRITE IN THIS AREA



15 This question is about transition metal compounds and their quantitative analysis.

- (a) Potassium dichromate(VI), $K_2Cr_2O_7$, is present in very small amounts in cement, to help increase the time for the cement to set.

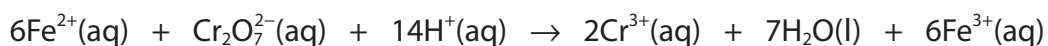
A 50.0 g sample of cement was washed with portions of deionised water to dissolve the potassium dichromate(VI). Any insoluble residues were removed by filtration and the filtrate was transferred to a volumetric flask. The volume was made up to 100.0 cm^3 , using 2 mol dm^{-3} sulfuric acid.

50.0 cm^3 of this solution was transferred to a conical flask and titrated with a solution of ammonium iron(II) sulfate, $(NH_4)_2Fe(SO_4)_2(aq)$, of concentration $3.24 \times 10^{-4}\text{ mol dm}^{-3}$.

The indicator *N*-phenylanthranilic acid was used, which gave an intense red-violet colour at the end-point.

The mean titre of ammonium iron(II) sulfate was 10.90 cm^3 .

The ionic equation for the redox reaction in the titration is shown.



- (i) State the colour of each chromium species in the reaction. (1)

$Cr_2O_7^{2-}$

Cr^{3+}

- (ii) Suggest a reason why an indicator is needed in this titration. (1)

.....

.....

DO NOT WRITE IN THIS AREA

DO NOT WRITE IN THIS AREA

DO NOT WRITE IN THIS AREA



(iii) Calculate the percentage by mass of potassium dichromate(VI) in the cement sample.

(5)

DO NOT WRITE IN THIS AREA

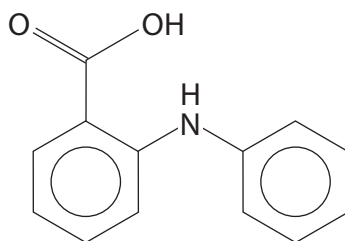
DO NOT WRITE IN THIS AREA

DO NOT WRITE IN THIS AREA



P 7 0 9 5 6 A 0 2 3 3 2

(b) *N*-phenylanthranilic acid has the structure shown.



The solution used as an indicator was prepared by mixing 100 mg of this acid in 5 cm³ of sodium hydroxide solution, NaOH(aq).

The mixture was then diluted to 100 cm³ with deionised water.

Explain why the *N*-phenylanthranilic acid is added to the sodium hydroxide solution before it is mixed with water in the preparation of this solution.

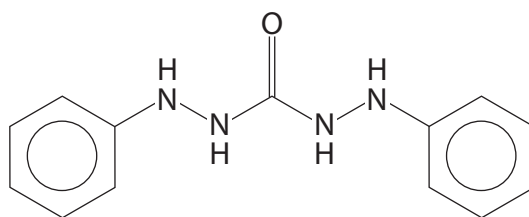
(2)

(c) The concentration of chromium(VI) in aqueous solution may also be determined using a colorimeter.

On adding 1,5-diphenylcarbazide, DPC, to a solution of chromium(VI) ions, an intensely coloured octahedral complex forms.

The formula of the complex is Cr(DPC)₃⁶⁺.

(i) The structure of DPC is shown.



Describe how DPC is able to act as a bidentate ligand, using your diagram to show the atoms involved.

(3)



- (ii) The intense colour of this complex is due to the transfer of electrons from the ligand to the chromium(VI) ion.

Suggest a possible reason why the colour is **not** due to the transfer of electrons between split d-orbitals in the ion.

Refer to the electronic configuration of the chromium(VI) ion.

(1)

.....

.....

.....

.....

- (d) The concentration of nickel(II) ions, $\text{Ni}^{2+}(\text{aq})$, can be determined by forming a complex with the ligand dimethylglyoxime, $\text{C}_4\text{H}_8\text{N}_2\text{O}_2$.



Explain why the formation of the dimethylglyoxime complex is favoured, in terms of entropy.

(2)

.....

.....

.....

.....

.....

.....

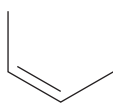
.....

(Total for Question 15 = 15 marks)

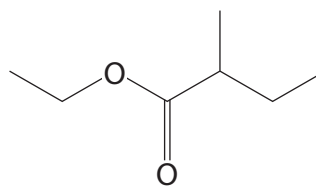


16 The ester ethyl 2-methylbutanoate is found in wild berries such as bilberries.

Devise a synthesis to convert but-2-ene into ethyl 2-methylbutanoate in **four** steps.



but-2-ene



ethyl 2-methylbutanoate

Include the reagents and essential conditions for each step and the name or structure of each of the intermediate compounds.

Details of practical procedures are not required.

(Total for Question 16 = 6 marks)

TOTAL FOR SECTION B = 51 MARKS

DO NOT WRITE IN THIS AREA

DO NOT WRITE IN THIS AREA

DO NOT WRITE IN THIS AREA



SECTION C

Answer ALL the questions. Write your answers in the spaces provided.

17

Gilding Metal

Gilding metal is a type of brass alloy that consists of copper and a small amount of zinc, ranging from 5 % to 11 % by mass. Copper is very malleable and is hardened by the addition of zinc.


Gilding metal is much less susceptible to cracking due to corrosion than brasses with a higher percentage of zinc.

It has a warm, golden colour and can be used to coat materials using electrolysis. It is also used to make test pieces in jewellery manufacture because it has similar properties to silver but is less expensive.

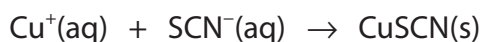
The proportions of copper and zinc determine the exact properties of the gilding metal and can be determined by chemical analysis.

- (a) 2.72 g of a type of brass is dissolved in excess concentrated nitric acid, forming a solution containing both Cu^{2+} and Zn^{2+} ions.

A solution containing hydrogensulfate(IV) ions, HSO_3^- , is then added.



The addition of ammonium thiocyanate, NH_4SCN , gives a precipitate of copper(I) thiocyanate, CuSCN .



The precipitate of copper(I) thiocyanate is collected, dried and found to have a mass of 4.69 g.

- (i) Determine whether or not this type of brass is a gilding metal, by calculating its percentage by mass of copper.

(4)



P 7 0 9 5 6 A 0 2 7 3 2

- (ii) Explain, by considering both thermodynamic and kinetic factors, why HSO_3^- reduces Cu^{2+} to Cu^+ but does **not** then reduce Cu^+ to Cu . Use the data in the table.

(3)

Right-hand electrode system	E^\ominus/V
$\text{Cu}^{2+} + \text{e}^- \rightleftharpoons \text{Cu}^+$	+0.15
$\text{HSO}_4^- + 2\text{H}^+ + 2\text{e}^- \rightleftharpoons \text{HSO}_3^- + \text{H}_2\text{O}$	+0.17
$\text{Cu}^+ + \text{e}^- \rightleftharpoons \text{Cu}$	+0.52

.....

.....

.....

.....

.....

.....

.....

.....

.....

DO NOT WRITE IN THIS AREA

DO NOT WRITE IN THIS AREA

DO NOT WRITE IN THIS AREA



(b) After the copper(I) thiocyanate is precipitated, Zn^{2+} ions remain in solution.

A student suggested that these Zn^{2+} ions can be precipitated by adding a large **excess** of aqueous sodium hydroxide.

Comment on this suggestion by describing the reactions that take place as a large **excess** of aqueous sodium hydroxide is **gradually** added.

(4)

.....

.....

.....

.....

.....

.....

.....

.....

.....

.....

.....

.....

.....

.....

.....

.....

.....

.....

.....

.....

.....

.....

(c) Suggest why gilding metals are less malleable than pure copper, by considering their structure.

(2)

.....

.....

.....

.....

.....

.....

.....

.....

.....

.....

.....

.....

.....

.....

.....

.....

.....

.....

.....

.....

.....

.....

DO NOT WRITE IN THIS AREA

DO NOT WRITE IN THIS AREA

DO NOT WRITE IN THIS AREA



(d) Zinc and copper are also used in electrochemical cells.

- (i) Draw a labelled diagram of the apparatus used to measure the emf of a cell with copper and zinc electrodes under standard conditions.

(3)

DO NOT WRITE IN THIS AREA

DO NOT WRITE IN THIS AREA

DO NOT WRITE IN THIS AREA



- (ii) The Nernst equation describes the relationship between the concentration of metal ions in a half-cell and its electrode potential.

$$E = E^{\ominus} + \frac{0.0260}{z} \times \ln [\text{ion}]$$

E = electrode potential under non-standard concentrations

z = the number of positive charges on the metal ion

A cell is set up with Cu^{2+} ions of concentration 1.00 mol dm^{-3} and Zn^{2+} ions of unknown concentration. The emf of the cell is $+1.09 \text{ V}$.

Calculate the concentration of the zinc ions.

Use the data on page 10 of the Data Booklet.

(3)

(Total for Question 17 = 19 marks)

TOTAL FOR SECTION C = 19 MARKS
TOTAL FOR PAPER = 90 MARKS



The Periodic Table of Elements

1 2 3 4 5 6 7 0 (8) (18)

1.0	H	hydrogen	1
-----	---	----------	---

Key

relative atomic mass
atomic symbol
name
atomic (proton) number

(1)	(2)	(3)	(4)	(5)	(6)	(7)	(8)	(9)	(10)	(11)	(12)	(13)	(14)	(15)	(16)	(17)	(18)																																																																																																																		
6.9 Li lithium 3	9.0 Be beryllium 4	23.0 Na sodium 11	24.3 Mg magnesium 12	39.1 K potassium 19	40.1 Ca calcium 20	45.0 Sc scandium 21	47.9 Ti titanium 22	47.9 Ti titanium 22	50.9 V vanadium 23	50.9 V vanadium 23	52.0 Cr chromium 24	54.9 Mn manganese 25	54.9 Mn manganese 25	55.8 Fe iron 26	55.8 Fe iron 26	58.9 Co cobalt 27	58.9 Co cobalt 27	58.9 Co cobalt 27	58.7 Ni nickel 28	58.7 Ni nickel 28	63.5 Cu copper 29	63.5 Cu copper 29	65.4 Zn zinc 30	65.4 Zn zinc 30	69.7 Ga gallium 31	69.7 Ga gallium 31	72.6 Ge germanium 32	72.6 Ge germanium 32	74.9 As arsenic 33	74.9 As arsenic 33	74.9 As arsenic 33	79.0 Br bromine 35	79.0 Br bromine 35	79.0 Br bromine 35	83.8 Kr krypton 36	83.8 Kr krypton 36	83.8 Kr krypton 36	85.5 Rb rubidium 37	87.6 Sr strontium 38	88.9 Y yttrium 39	88.9 Y yttrium 39	88.9 Y yttrium 39	91.2 Zr zirconium 40	91.2 Zr zirconium 40	91.2 Zr zirconium 40	92.9 Nb niobium 41	92.9 Nb niobium 41	92.9 Nb niobium 41	95.9 Mo molybdenum 42	95.9 Mo molybdenum 42	95.9 Mo molybdenum 42	101.1 Ru ruthenium 44	101.1 Ru ruthenium 44	101.1 Ru ruthenium 44	102.9 Rh rhodium 45	102.9 Rh rhodium 45	102.9 Rh rhodium 45	106.4 Pd palladium 46	106.4 Pd palladium 46	106.4 Pd palladium 46	107.9 Ag silver 47	107.9 Ag silver 47	107.9 Ag silver 47	112.4 Cd cadmium 48	112.4 Cd cadmium 48	112.4 Cd cadmium 48	114.8 In indium 49	114.8 In indium 49	114.8 In indium 49	118.7 Sn tin 50	118.7 Sn tin 50	118.7 Sn tin 50	121.8 Sb antimony 51	121.8 Sb antimony 51	121.8 Sb antimony 51	127.6 Te tellurium 52	127.6 Te tellurium 52	127.6 Te tellurium 52	126.9 I iodine 53	126.9 I iodine 53	126.9 I iodine 53	131.3 Xe xenon 54	131.3 Xe xenon 54	131.3 Xe xenon 54	132.9 Cs caesium 55	137.3 Ba barium 56	138.9 La* lanthanum 57	138.9 La* lanthanum 57	138.9 La* lanthanum 57	178.5 Hf hafnium 72	178.5 Hf hafnium 72	178.5 Hf hafnium 72	180.9 Ta tantalum 73	180.9 Ta tantalum 73	180.9 Ta tantalum 73	183.8 W tungsten 74	183.8 W tungsten 74	183.8 W tungsten 74	186.2 Re rhenium 75	186.2 Re rhenium 75	186.2 Re rhenium 75	190.2 Os osmium 76	190.2 Os osmium 76	190.2 Os osmium 76	192.2 Ir iridium 77	192.2 Ir iridium 77	192.2 Ir iridium 77	195.1 Pt platinum 78	195.1 Pt platinum 78	195.1 Pt platinum 78	197.0 Au gold 79	197.0 Au gold 79	197.0 Au gold 79	200.6 Hg mercury 80	200.6 Hg mercury 80	200.6 Hg mercury 80	204.4 Tl thallium 81	204.4 Tl thallium 81	204.4 Tl thallium 81	207.2 Pb lead 82	207.2 Pb lead 82	207.2 Pb lead 82	209.0 Po polonium 84	209.0 Po polonium 84	209.0 Po polonium 84	[210] At astatine 85	[210] At astatine 85	[210] At astatine 85	[222] Rn radon 86	[222] Rn radon 86	[222] Rn radon 86

Elements with atomic numbers 112-116 have been reported but not fully authenticated

140 Ce cerium 58	141 Pr praseodymium 59	144 Nd neodymium 60	147 Pm promethium 61	150 Sm samarium 62	152 Eu europium 63	157 Gd gadolinium 64	163 Dy dysprosium 66	165 Ho holmium 67	167 Er erbium 68	169 Tm thulium 69	173 Yb ytterbium 70	175 Lu lutetium 71
232 Th thorium 90	231 Pa protactinium 91	238 U uranium 92	237 Np neptunium 93	242 Pu plutonium 94	243 Am americium 95	247 Cm curium 96	251 Cf californium 98	254 Es einsteinium 99	253 Fm fermium 100	256 Md mendelevium 101	254 No nobelium 102	257 Lr lawrencium 103

* Lanthanide series

* Actinide series

DO NOT WRITE IN THIS AREA

DO NOT WRITE IN THIS AREA

DO NOT WRITE IN THIS AREA

