



Please write clearly in block capitals.

Centre number

--	--	--	--	--

Candidate number

--	--	--	--

Surname

Forename(s)

Candidate signature

A-level CHEMISTRY

Paper 1 Inorganic and Physical Chemistry

Tuesday 4 June 2019

Afternoon

Time allowed: 2 hours

Materials

For this paper you must have:

- the Periodic Table/Data Sheet, provided as an insert (enclosed)
- a ruler with millimetre measurements
- a scientific calculator, which you are expected to use where appropriate.

Instructions

- Use black ink or black ball-point pen.
- Fill in the boxes at the top of this page.
- Answer **all** questions.
- You must answer the questions in the spaces provided. Do **not** write outside the box around each page or on blank pages.
- All working must be shown.
- Do all rough work in this book. Cross through any work you do not want to be marked.

Information

- The marks for questions are shown in brackets.
- The maximum mark for this paper is 105.

For Examiner's Use	
Question	Mark
1	
2	
3	
4	
5	
6	
7	
8	
9	
TOTAL	



J U N 1 9 7 4 0 5 1 0 1

IB/G/Jun19/E16

7405/1

Answer **all** questions in the spaces provided.

Do not write
outside the
box

0 1

Figure 1 shows an incomplete Born–Haber cycle for the formation of caesium iodide. The diagram is not to scale.

Figure 1




Table 1 gives values of some standard enthalpy changes.

Table 1

Name of enthalpy change	$\Delta H^\ominus / \text{kJ mol}^{-1}$
Enthalpy of atomisation of caesium	+79
First ionisation energy of caesium	+376
Electron affinity of iodine	-314
Enthalpy of lattice formation of caesium iodide	-585
Enthalpy of formation of caesium iodide	-337

0 1 . 1

Complete **Figure 1** by writing the formulas, including state symbols, of the appropriate species on each of the two blank lines.

[2 marks]

0 1 . 2

Use **Figure 1** and the data in **Table 1** to calculate the standard enthalpy of atomisation of iodine.

[2 marks]

Standard enthalpy of atomisation of iodine _____ kJ mol^{-1}



- 0 1 . 3** The enthalpy of lattice formation for caesium iodide in **Table 1** is a value obtained by experiment.
The value obtained by calculation using the perfect ionic model is -582 kJ mol^{-1}

Deduce what these values indicate about the bonding in caesium iodide.

[1 mark]

- 0 1 . 4** Use data from **Table 2** to show that this reaction is **not** feasible at 298 K

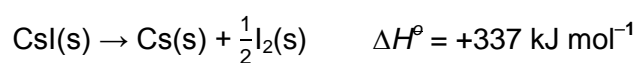


Table 2

	CsI(s)	Cs(s)	I₂(s)
S° / J K⁻¹ mol⁻¹	130	82.8	117

[4 marks]

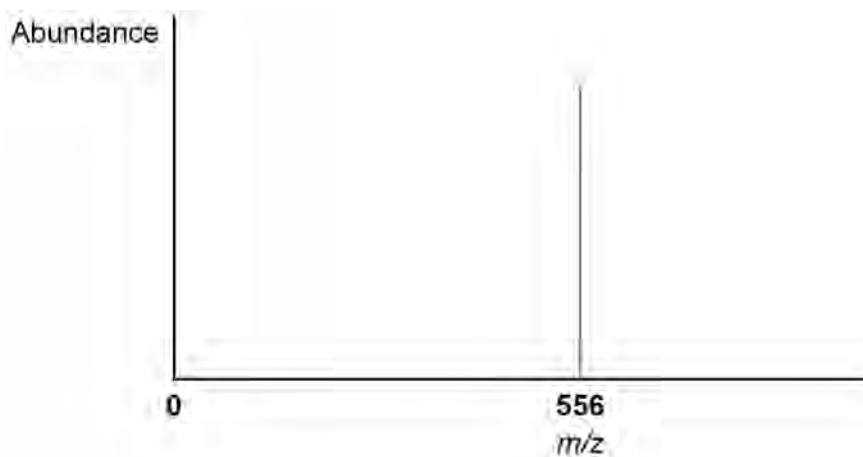


0 2

Time of flight (TOF) mass spectrometry can be used to analyse large molecules such as the pentapeptide, leucine enkephalin (**P**).

P is ionised by electrospray ionisation and its mass spectrum is shown in **Figure 2**.

Figure 2



0 2 . 1

Describe the process of electrospray ionisation.

Give an equation to represent the ionisation of **P** in this process.

[4 marks]

Description _____

Equation

Do not write
outside the
box



Do not write
outside the
box

0 2 . 2 What is the relative molecular mass of **P**?
Tick (✓) **one** box.

[1 mark]

555

556

557

0 2 . 3 A molecule **Q** is ionised by electron impact in a TOF mass spectrometer.
The **Q**⁺ ion has a kinetic energy of $2.09 \times 10^{-15} \text{ J}$
This ion takes $1.23 \times 10^{-5} \text{ s}$ to reach the detector.
The length of the flight tube is 1.50 m

Calculate the relative molecular mass of **Q**.

$$KE = \frac{1}{2}mv^2 \quad \text{where } m = \text{mass (kg) and } v = \text{speed (m s}^{-1}\text{)}$$

The Avogadro constant, $L = 6.022 \times 10^{23} \text{ mol}^{-1}$

[5 marks]

Relative molecular mass _____

10

Turn over ►



0 3 This question is about periodicity, the Period 4 elements and their compounds.

0 3 . 1 State the meaning of the term periodicity.

[1 mark]

0 3 . 2 Identify the element in Period 4 with the highest electronegativity value.

[1 mark]

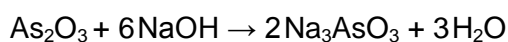
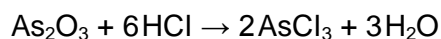
0 3 . 3 Identify the element in Period 4 with the largest atomic radius.
Explain your answer.

[3 marks]

Element _____

Explanation _____

0 3 . 4 The equations for two reactions of arsenic(III) oxide are shown.



Name the property of arsenic(III) oxide that describes its ability to react in these two ways.

[1 mark]

0 3 . 5 Complete the equation for the formation of arsenic hydride.

[1 mark]

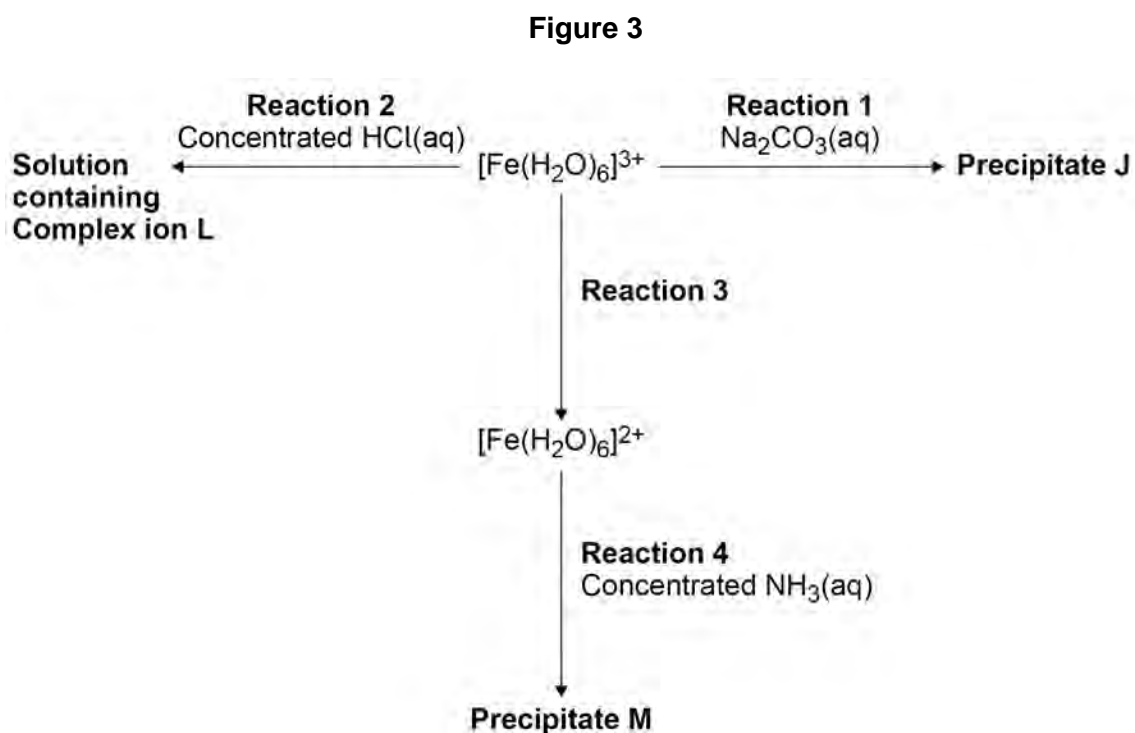


7



0 4

Figure 3 shows some reactions of aqueous iron ions.



0 4 . 1

Give the formula of **Precipitate J** and state its colour.
Give an equation for **Reaction 1**.

[3 marks]

Formula of J _____

Colour _____

Equation _____

0 4 . 2

Give the formula of **L** and an equation for **Reaction 2**.

[2 marks]

Formula of L _____

Equation _____

0 4 . 3

Suggest a reagent for **Reaction 3**.

[1 mark]

Turn over ►



0 5

This question is about some Group 7 compounds.

0 5 . 1

Solid sodium chloride reacts with concentrated sulfuric acid.

Give an equation for this reaction.

State the role of the sulfuric acid in this reaction.

[2 marks]

Equation

Role

0 5 . 2

Fumes of sulfur dioxide are formed when sodium bromide reacts with concentrated sulfuric acid.

For **this** reaction

- give an equation
- give **one** other observation
- state the role of the sulfuric acid.

[3 marks]

Equation

Observation

Role

0 5 . 3

Chlorine reacts with hot aqueous sodium hydroxide as shown in the equation.

Give the oxidation state of chlorine in NaClO_3 and in NaCl **[1 mark]** NaClO_3

 NaCl



0 5 . 4 State, in terms of redox, what happens to chlorine in the reaction in Question **05.3**.
[1 mark]

0 5 . 5 Solution **Y** contains **two** different negative ions.

To a sample of solution **Y** in a test tube a student adds

- silver nitrate solution
- then an excess of dilute nitric acid
- finally an excess of concentrated ammonia solution.

The observations after each addition are recorded in **Table 3**.

Table 3

Reagent added to solution Y	Observation
silver nitrate solution	cream precipitate containing compound D and compound E
excess dilute nitric acid	cream precipitate D and bubbles of gas F
excess concentrated ammonia solution	colourless solution containing complex ion G

Give the formulas of **D**, **E** and **F**.

Give an **ionic** equation to show the formation of **E**.

Give an equation to show the conversion of **D** into **G**.

[6 marks]

Formula of **D** _____

Formula of **E** _____

Formula of **F** _____

Ionic equation to form **E**

Equation to show the conversion of **D** into **G**



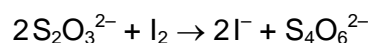
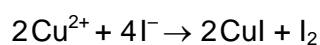
0 6

A student does an experiment to determine the percentage of copper in an alloy.

The student

- reacts 985 mg of the alloy with concentrated nitric acid to form a solution (all of the copper in the alloy reacts to form aqueous copper(II) ions)
- pours the solution into a volumetric flask and makes the volume up to 250 cm³ with distilled water
- shakes the flask thoroughly
- transfers 25.0 cm³ of the solution into a conical flask and adds an excess of potassium iodide
- uses exactly 9.00 cm³ of 0.0800 mol dm⁻³ sodium thiosulfate (Na₂S₂O₃) solution to react with all the iodine produced.

The equations for the reactions are

**0 6 . 1**

Calculate the percentage of copper by mass in the alloy.

Give your answer to the appropriate number of significant figures.

[6 marks]

% copper _____



0 6 . 2

Suggest **two** ways that the student could reduce the percentage uncertainty in the measurement of the volume of sodium thiosulfate solution, using the same apparatus as this experiment.

[2 marks]

1 _____

2 _____

0 6 . 3

State the role of iodine in the reaction with sodium thiosulfate.

[1 mark]

0 6 . 4

Give the full electron configuration of a copper(II) ion.

[1 mark]

0 6 . 5

Copper(I) iodide is a white solid.

Explain why copper(I) iodide is white.

[2 marks]

Question 6 continues on the next page**Turn over ►**

0 6 . 6 Iodine vaporises easily.

Calculate the volume, in cm^3 , that 5.00 g of iodine vapour occupies at $185\text{ }^\circ\text{C}$ and 100 kPa

The gas constant $R = 8.31\text{ J K}^{-1}\text{ mol}^{-1}$

Give your answer to 3 significant figures.

[4 marks]


Volume _____ cm^3

16



0 7

Sulfur trioxide decomposes on heating to form an equilibrium mixture containing sulfur dioxide and oxygen.

**0 7 . 1**

A sample of sulfur trioxide was heated and allowed to reach equilibrium at a given temperature.

The equilibrium mixture contained 6.08 g of sulfur dioxide.

Calculate the mass, in g, of oxygen gas in the equilibrium mixture.


[2 marks]

Mass _____ g

Question 7 continues on the next page**Turn over ►**

07.2

A different mass of sulfur trioxide was heated and allowed to reach equilibrium at 1050 K



The amounts of each substance in the equilibrium mixture are shown in **Table 4**.

Table 4

Substance	Amount at equilibrium / mol
sulfur trioxide	0.320
sulfur dioxide	1.20
oxygen	0.600

For this reaction at 1050 K the equilibrium constant, $K_p = 7.62 \times 10^5 \text{ Pa}$

Calculate the mole fraction of each substance at equilibrium.

Give the expression for the equilibrium constant, K_p

Calculate the total pressure, in Pa, of this equilibrium mixture.

[4 marks]

Mole fraction SO_3 _____

Mole fraction SO_2 _____

Mole fraction O_2 _____

K_p

Total pressure _____ Pa

Do not write
outside the
box



07.3

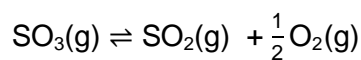
For this reaction at 1050 K the equilibrium constant, $K_p = 7.62 \times 10^5 \text{ Pa}$
 For this reaction at 500 K the equilibrium constant, $K_p = 3.94 \times 10^4 \text{ Pa}$

Explain how this information can be used to deduce that the forward reaction is endothermic.

[2 marks]

07.4

Use data from Question **07.3** to calculate the value of K_p , at 500 K, for the equilibrium represented by this equation.
 Deduce the units of K_p



[2 marks]

K_p _____

Units _____

10

Turn over for the next question

Turn over ►



0 8

This question is about structure and bonding.

0 8 . 1

Draw a diagram to show the strongest type of interaction between two molecules of ethanol ($\text{C}_2\text{H}_5\text{OH}$) in the liquid phase.

Include all lone pairs and partial charges in your diagram.

[3 marks]

0 8 . 2

Methoxymethane (CH_3OCH_3) is an isomer of ethanol.

Table 5 shows the boiling points of ethanol and methoxymethane.

Table 5

Compound	Boiling point / °C
ethanol	78
methoxymethane	-24

In terms of the intermolecular forces involved, explain the difference in boiling points.

[3 marks]



Extra space _____

Do not write
 outside the
 box

0 8 . 3

Draw the shape of the POCl_3 molecule and the shape of the ClF_4^- ion.
 Include any lone pairs of electrons that influence the shapes.

In a POCl_3 molecule the oxygen atom is attached to the phosphorus atom by a double bond that uses two electrons from phosphorus.

Name each shape.

Suggest a value for the bond angle in ClF_4^-

Shape of POCl_3

Shape of ClF_4^-

[5 marks]

Name of shape of POCl_3 _____

Name of shape of ClF_4^- _____

Bond angle in ClF_4^- _____

11

Turn over for the next question

Turn over ►



There are no questions printed on this page

*Do not write
outside the
box*

**DO NOT WRITE ON THIS PAGE
ANSWER IN THE SPACES PROVIDED**



0	9
---	---

This question is about different pH values.

0	9	.	1
---	---	---	---

For pure water at 40 °C, pH = 6.67
A student thought that the water was acidic.

Explain why the student was incorrect.

Determine the value of K_w at this temperature.

[4 marks]

Explanation _____

K_w _____ $\text{mol}^2 \text{dm}^{-6}$

Question 9 continues on the next page

Turn over ►



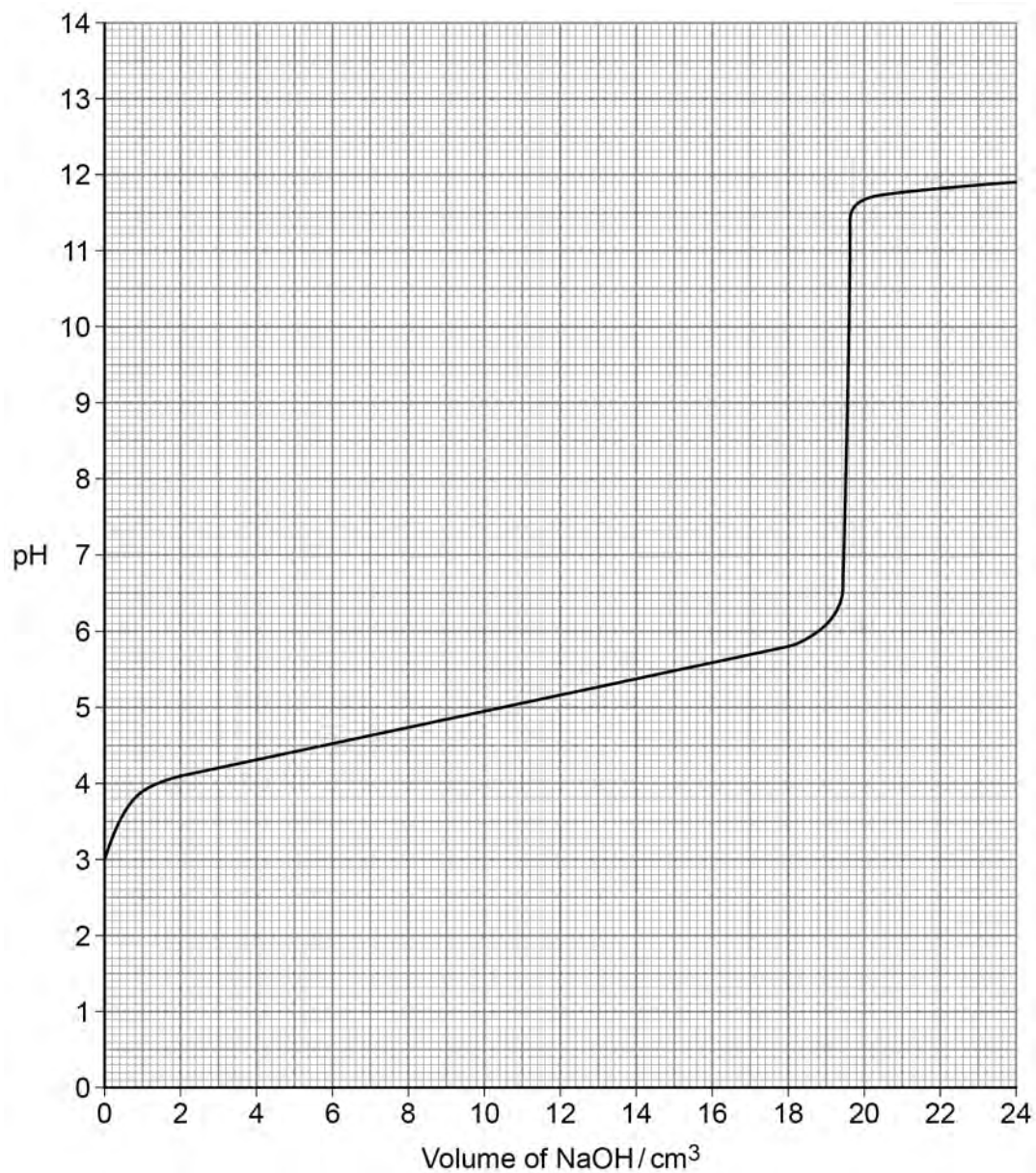
09.2

Sodium hydroxide solution was added gradually from a burette to 25 cm³ of 0.080 mol dm⁻³ propanoic acid at 25 °C
The pH was measured and recorded at regular intervals.

Do not write
outside the
box

The results are shown in **Figure 4**.

Figure 4



Use **Figure 4** to determine the value of K_a for propanoic acid at 25 °C

Show your working.

[3 marks]

K_a _____ mol dm⁻³

0 9 . 3

Suggest which indicator is the most appropriate for the reaction in Question **09.2?**

Tick (✓) **one** box.

[1 mark]

Indicator	pH range	Tick (✓) one box
methyl orange	3.1 – 4.4	
bromothymol blue	6.0 – 7.6	
cresolphthalein	8.2 – 9.8	
indigo carmine	11.6 – 13.0	

Question 9 continues on the next page

Turn over ►



0 9 . 4

A student prepared a buffer solution by adding 0.0136 mol of a salt KX to 100 cm³ of a 0.500 mol dm⁻³ solution of a weak acid HX and mixing thoroughly.

The student then added 3.00×10^{-4} mol of potassium hydroxide to the buffer solution.

Calculate the pH of the buffer solution after adding the potassium hydroxide.

For the weak acid HX at 25 °C the value of the acid dissociation constant, $K_a = 1.41 \times 10^{-5}$ mol dm⁻³.

Give your answer to two decimal places.

[6 marks]

pH _____



09.5

A buffer solution has a constant pH even when diluted.

Use a mathematical expression to explain this.

[1 mark]

Do not write
outside the
box

15

END OF QUESTIONS



There are no questions printed on this page

*Do not write
outside the
box*

**DO NOT WRITE ON THIS PAGE
ANSWER IN THE SPACES PROVIDED**



There are no questions printed on this page

*Do not write
outside the
box*

**DO NOT WRITE ON THIS PAGE
ANSWER IN THE SPACES PROVIDED**



There are no questions printed on this page

*Do not write
outside the
box*

**DO NOT WRITE ON THIS PAGE
ANSWER IN THE SPACES PROVIDED**

Copyright information

For confidentiality purposes, from the November 2015 examination series, acknowledgements of third-party copyright material will be published in a separate booklet rather than including them on the examination paper or support materials. This booklet is published after each examination series and is available for free download from www.aqa.org.uk after the live examination series.

Permission to reproduce all copyright material has been applied for. In some cases, efforts to contact copyright-holders may have been unsuccessful and AQA will be happy to rectify any omissions of acknowledgements. If you have any queries please contact the Copyright Team, AQA, Stag Hill House, Guildford, GU2 7XJ.

Copyright © 2019 AQA and its licensors. All rights reserved.



2 8



1 9 6 A 7 4 0 5 / 1

IB/G/Jun19/7405/1