

Please write clearly in block capitals.

Centre number

|  |  |  |  |  |
|--|--|--|--|--|
|  |  |  |  |  |
|--|--|--|--|--|

Candidate number

|  |  |  |  |
|--|--|--|--|
|  |  |  |  |
|--|--|--|--|

Surname

---

Forename(s)

---

Candidate signature

---

I declare this is my own work.

# AS CHEMISTRY

## Paper 1 Inorganic and Physical Chemistry

Time allowed: 1 hour 30 minutes

### Materials

For this paper you must have:

- the Periodic Table/Data Sheet, provided as an insert (enclosed)
- a ruler with millimetre measurements
- a scientific calculator, which you are expected to use where appropriate.

### Instructions

- Use black ink or black ball-point pen.
- Fill in the boxes at the top of this page.
- Answer **all** questions.
- You must answer the questions in the spaces provided. Do **not** write outside the box around each page or on blank pages.
- If you need extra space for your answer(s), use the lined pages at the end of this book. Write the question number against your answer(s).
- All working must be shown.
- Do all rough work in this book. Cross through any work you do not want to be marked.

### Information

- The marks for questions are shown in brackets.
- The maximum mark for this paper is 80.

### Advice

You are advised to spend about 65 minutes on **Section A** and 25 minutes on **Section B**.

| For Examiner's Use |      |
|--------------------|------|
| Question           | Mark |
| 1                  |      |
| 2                  |      |
| 3                  |      |
| 4                  |      |
| 5                  |      |
| 6                  |      |
| 7                  |      |
| 8                  |      |
| Section B          |      |
| <b>TOTAL</b>       |      |



**Section A**Answer **all** questions in this section.**0 1**

This question is about ionisation energies of Group 2 elements.

**0 1 . 1**

Explain why the first ionisation energy of the Group 2 elements decreases down the group.

**[2 marks]**

---

---

---

---

---

**0 1 . 2**

Give an equation, including state symbols, to represent the process that occurs when the third ionisation energy of magnesium is measured.

**[1 mark]**

---

**0 1 . 3**

Explain why the third ionisation energy of magnesium is much higher than the second ionisation energy of magnesium.

**[2 marks]**

---

---

---

---

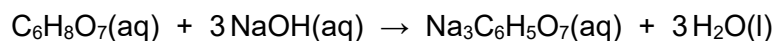
---

**5**

**0 2**

This question is about acid–base titrations.

Citric acid reacts with sodium hydroxide.

**0 2 . 1**

A student makes a solution of citric acid by dissolving some solid citric acid in water.

Describe a method to add an accurately known mass of solid to a beaker to make a solution.

**[2 marks]**

---

---

---

---

---

**0 2 . 2**

The student dissolves 0.834 g of citric acid in water and makes the solution up to 500 cm<sup>3</sup>

Calculate the concentration, in mol dm<sup>-3</sup>, of citric acid in this solution.

**[3 marks]**Concentration \_\_\_\_\_ mol dm<sup>-3</sup>**Turn over ►**





**0 2 . 4** **Table 1** shows the student's burette readings after the mistakes in the practical procedure have been corrected.

**Table 1**

|                                       | <b>Rough</b> | <b>Run 1</b> | <b>Run 2</b> | <b>Run 3</b> |
|---------------------------------------|--------------|--------------|--------------|--------------|
| <b>Final reading / cm<sup>3</sup></b> | 23.65        | 22.95        | 46.05        | 26.30        |
| <b>Start reading / cm<sup>3</sup></b> | 0.00         | 0.00         | 22.95        | 3.40         |
| <b>Titre / cm<sup>3</sup></b>         | 23.65        |              |              |              |

Complete **Table 1**.

Use the data in **Table 1** to calculate the mean titre.

**[2 marks]**

Mean titre \_\_\_\_\_ cm<sup>3</sup>

**0 2 . 5** The total uncertainty in the use of the burette is  $\pm 0.15 \text{ cm}^3$

Calculate the percentage uncertainty in the use of the burette in **Run 1**.

**[1 mark]**

Percentage uncertainty \_\_\_\_\_



0 3

This question is about shapes of molecules.

Complete **Table 2** by drawing the shapes of both the  $\text{AsF}_5$  and  $\text{KrF}_2$  molecules, showing all lone pairs of electrons that influence the shape.

Deduce the bond angle(s) in  $\text{AsF}_5$

[3 marks]

Table 2

|                  | $\text{AsF}_5$ | $\text{KrF}_2$ |
|------------------|----------------|----------------|
| Diagram of shape |                |                |
| Bond angle(s)    |                |                |

3

Turn over for the next question

Turn over ►



0 4

This question is about intermolecular forces.

0 4 . 1

Complete the diagram to show how one molecule of ammonia can form a hydrogen bond with one molecule of ethanol. Include all lone pairs of electrons and partial charges on atoms involved in the hydrogen bond.

[3 marks]

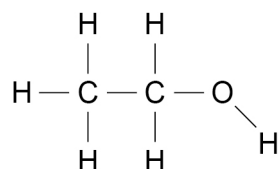


Table 3 shows the electronegativity values of atoms of some elements.

Table 3

|                   |     |     |     |     |     |
|-------------------|-----|-----|-----|-----|-----|
| Atom              | H   | C   | N   | O   | Br  |
| Electronegativity | 2.1 | 2.5 | 3.0 | 3.5 | 2.8 |

0 4 . 2

Define the term electronegativity.

[1 mark]

---



---



---

0 4 . 3

Deduce the **two** atoms from Table 3 that will form the most polar bond.

[1 mark]

---





0 4 . 4 The C–Br bond is polar.

Explain why  $\text{CBr}_4$  is **not** a polar molecule.

[2 marks]

---

---

---

---

0 4 . 5 Suggest, in terms of the intermolecular forces for each compound, why  $\text{CBr}_4$  has a higher boiling point than  $\text{CHBr}_3$

[3 marks]

---

---

---

---

---

---

---

10

Turn over for the next question

Turn over ►



0 5

A sample of antimony is analysed in a time of flight (TOF) mass spectrometer and is found to contain two isotopes,  $^{121}\text{Sb}$  and  $^{123}\text{Sb}$

After electron impact ionisation, all of the ions are accelerated to the same kinetic energy ( $KE$ ) and then travel through a flight tube that is 1.05 m long. A  $^{121}\text{Sb}^+$  ion takes  $5.93 \times 10^{-4}$  s to travel through the flight tube.

The kinetic energy of an ion is given by the equation  $KE = \frac{1}{2}mv^2$

$KE$  = kinetic energy / J

$m$  = mass / kg

$v$  = speed /  $\text{m s}^{-1}$

Calculate the mass, in kg, of one  $^{121}\text{Sb}^+$  ion.

Calculate the time taken for a  $^{123}\text{Sb}^+$  ion to travel through the same flight tube.

The Avogadro constant,  $L = 6.022 \times 10^{23} \text{ mol}^{-1}$

**[5 marks]**

Mass of one  $^{121}\text{Sb}^+$  ion \_\_\_\_\_ kg

Time taken by a  $^{123}\text{Sb}^+$  ion \_\_\_\_\_ s

5



0 6

Iodide ions can be oxidised to iodine using oxidising agents such as iodate(V) ions ( $\text{IO}_3^-$ ) and concentrated sulfuric acid.

0 6 . 1

State, in terms of electrons, the meaning of the term oxidising agent.

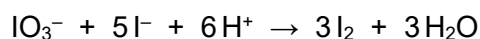
**[1 mark]**


---



---

In acidic solution,  $\text{IO}_3^-$  ions oxidise iodide ions to iodine.



0 6 . 2

Give a half-equation for the oxidation of iodide ions to iodine.

Deduce the half-equation to show the reduction process in this reaction.

**[2 marks]**

Oxidation half-equation

---

Reduction half-equation

---

0 6 . 3

When iodide ions are oxidised using concentrated sulfuric acid, sulfur dioxide, a yellow solid and a foul-smelling gas are all formed.

Give an equation to show the reaction between iodide ions and concentrated sulfuric acid to form the yellow solid.

Identify the foul-smelling gas.

**[2 marks]**

Equation

---

Identity of foul-smelling gas \_\_\_\_\_

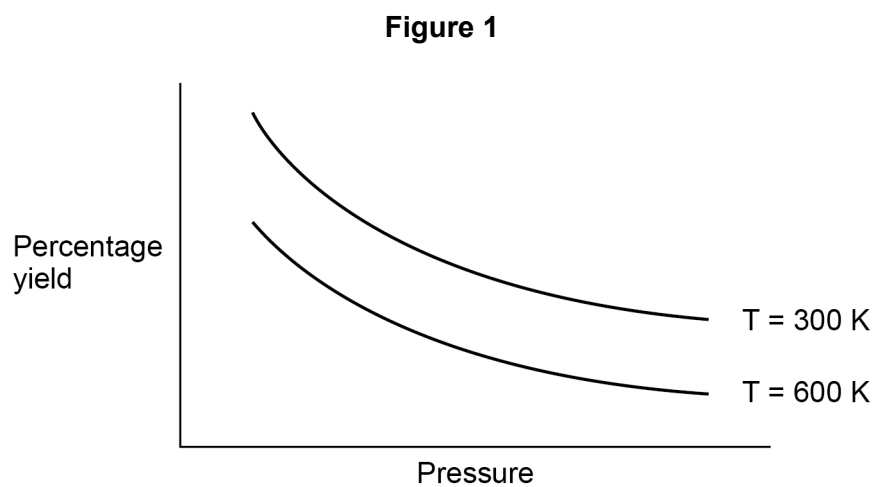
5

**Turn over ►**

0 7

This question is about gaseous equilibria.

**Figure 1** shows the effect of pressure on the percentage yield of a reaction at equilibrium at two different temperatures.



0 7 . 1

Explain how **Figure 1** shows that the forward reaction in this equilibrium is exothermic.

**[2 marks]**

---

---

---

---



**0 7 . 2**

State whether the forward reaction in this equilibrium results in an increase, decrease or no change in the amount, in moles, of gas.

Explain your answer.

**[3 marks]**

Tick (✓) **one** box.

increase

decrease

no change

Explanation \_\_\_\_\_

---

---

---

---

**0 7 . 3**

Explain why using a catalyst has no effect on the percentage yield.

**[1 mark]**

---

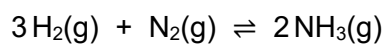
---

---

**Question 7 continues on the next page**

**Turn over ►**

Hydrogen and nitrogen react to form ammonia.



At 745 K, the equilibrium constant,  $K_c = 0.118 \text{ mol}^{-2} \text{ dm}^6$

0 7 . 4

At 745 K,  $0.150 \text{ dm}^3$  of an equilibrium mixture contains  $0.0285 \text{ mol}$  of hydrogen and  $0.0870 \text{ mol}$  of nitrogen.

Calculate the amount, in moles, of ammonia present in this equilibrium mixture.

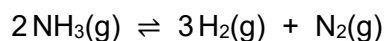
**[5 marks]**

Amount of ammonia \_\_\_\_\_ mol

0 7 . 5

Calculate the value, at 745 K, for the equilibrium constant  $K_c$  for this dissociation of ammonia to give hydrogen and nitrogen.

State the units.



**[2 marks]**

Value \_\_\_\_\_

Units \_\_\_\_\_

13



**Turn over for the next question**

*Do not write  
outside the  
box*

**DO NOT WRITE ON THIS PAGE  
ANSWER IN THE SPACES PROVIDED**

**Turn over ►**



0 8

A student does two test-tube reactions on four colourless solutions (**A**, **B**, **C** and **D**).

**Table 4** shows the student's observations.

**Table 4**

| Solution | Test 1<br>Add $\text{Na}_2\text{CO}_3(\text{s})$ | Test 2<br>Add acidified $\text{AgNO}_3(\text{aq})$ |
|----------|--|--|
| <b>A</b> | Effervescence                                    | No visible change                                  |
| <b>B</b> | Effervescence                                    | White precipitate                                  |
| <b>C</b> | No visible change                                | No visible change                                  |
| <b>D</b> | No visible change                                | Very pale yellow precipitate                       |

0 8 . 1

Identify the gas formed in **Test 1**.

Describe a further test to confirm the identity of this gas.

**[2 marks]**

Identity of gas \_\_\_\_\_

Test

---



---

0 8 . 2

Explain how the observations from **Test 1** and **Test 2** can be used to show that solution **B** contains hydrochloric acid.

**[2 marks]**

---



---



---



---





08.3

Describe a series of tests that the student can use to show that solution **C** contains ammonium sulfate.

**[4 marks]**

---

---

---

---

---

---

---

---

---

---

---

---

---

---

---

08.4

The student does an additional experiment to show that solution **D** contains a mixture of halide ions. One of the halide ions is chloride.

Method:

Step 1 Add an excess of  $\text{AgNO}_3(\text{aq})$  to  $10.0 \text{ cm}^3$  of solution **D**.

Step 2 Filter, wash, dry and weigh the precipitate.

Step 3 Add an excess of dilute ammonia to the dry precipitate.

Step 4 Filter, wash, dry and weigh the solid that remains.

Explain how the masses recorded during this experiment can be used to show that solution **D** contains a mixture of halide ions.

**[2 marks]**

---

---

---

---

---

---

---

---

---

---

10

Turn over ►



## Section B

Answer **all** questions in this section.Only **one** answer per question is allowed.

For each answer completely fill in the circle alongside the appropriate answer.

CORRECT METHOD



WRONG METHODS



If you want to change your answer you must cross out your original answer as shown.



If you wish to return to an answer previously crossed out, ring the answer you now wish to select as shown.

You may do your working in the blank space around each question but this will not be marked.  
Do **not** use additional sheets for this working.

0 9

Which atom has two more protons and two more neutrons than  $^{52}_{24}\text{Cr}$ ?

[1 mark]

A  $^{54}_{26}\text{Cr}$  B  $^{56}_{26}\text{Cr}$  C  $^{54}_{26}\text{Fe}$  D  $^{56}_{26}\text{Fe}$  

1 0

An atom has all its electrons in their lowest energy levels.

Which atom contains only two unpaired electrons?

[1 mark]

A Helium B Beryllium C Oxygen D Iron 

1 1

The first six ionisation energies, in  $\text{kJ mol}^{-1}$ , of an element are:

1090, 2350, 4610, 6220, 37 800, 47 000

What is the element?

[1 mark]

A Boron

B Carbon

C Nitrogen

D Oxygen

1 2

In which pair is the first ionisation energy of atom Y greater than that of atom X?

[1 mark]

|   | Electron configuration of atom X | Electron configuration of atom Y |                          |
|---|----------------------------------|----------------------------------|--------------------------|
| A | $1s^22s^2$                       | $1s^22s^22p^1$                   | <input type="checkbox"/> |
| B | $1s^22s^22p^3$                   | $1s^22s^22p^4$                   | <input type="checkbox"/> |
| C | $1s^22s^22p^5$                   | $1s^22s^22p^6$                   | <input type="checkbox"/> |
| D | $1s^22s^22p^6$                   | $1s^22s^22p^63s^1$               | <input type="checkbox"/> |

1 3

Which statement about isotopes of an element is **not** correct?

[1 mark]

A They have the same chemical properties.

B They have the same number of electrons in ions of the same charge.

C They have the same number of neutrons.

D They have the same number of protons.

Turn over ►



**1 4**

5.0 g of an oxide contains 4.0 g of molybdenum.

What is the empirical formula of this oxide?

**[1 mark]**

A MoO<sub>2</sub>

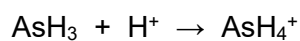
B MoO<sub>5</sub>

C Mo<sub>2</sub>O<sub>3</sub>

D Mo<sub>3</sub>O<sub>2</sub>

**1 5**

The equation for a reaction is



What type of interaction forms in this reaction?

**[1 mark]**

A Co-ordinate bond

B Dipole–dipole force

C Hydrogen bond

D Ionic bond

**1 6**

Which is a correct trend down Group 7 from fluorine to iodine?

**[1 mark]**

A The boiling point of the element decreases.

B The oxidising ability of the element decreases.

C The electronegativity of the atom increases.

D The first ionisation energy of the atom increases.



**1 7**

Which of these ions has the largest ionic radius?

**[1 mark]****A**  $S^{2-}$  **B**  $Cl^{-}$  **C**  $K^{+}$  **D**  $Ca^{2+}$  **1 8**

Which statement is correct?

**[1 mark]****A** Chloride ions reduce concentrated sulfuric acid to form sulfur dioxide. **B** Bromide ions reduce concentrated sulfuric acid to form sulfur. **C** Bromide ions reduce iodine to form iodide ions. **D** Iodide ions reduce chlorine to form chloride ions. **1 9**

In which of these substances is oxygen in the highest oxidation state?

**[1 mark]****A**  $OF_2$  **B**  $H_2O$  **C**  $O_2$  **D**  $H_2O_2$  **Turn over ►**

**2 0**

Which block in the Periodic Table contains the element samarium (Sm)?

**[1 mark]****A** d block **B** f block **C** p block **D** s block **2 1**Which species is **not** a possible product of the reactions between chlorine and water?**[1 mark]****A**  $\text{Cl}^-$  **B**  $\text{ClO}^-$  **C**  $\text{O}_2$  **D**  $\text{OH}^-$  **2 2**

Which statement is correct?

**[1 mark]****A** Magnesium reacts with steam to give magnesium oxide as one of the products. **B** Magnesium acts as an oxidising agent in the extraction of titanium. **C** Magnesium has a lower melting point than sodium. **D** Magnesium hydroxide is very soluble in water. 

|   |   |
|---|---|
| 2 | 3 |
|---|---|

Which is **not** responsible for conducting electricity?

[1 mark]

- A** The sodium ions in molten sodium chloride
- B** The electrons between layers of carbon atoms in graphite
- C** The bonding electrons in a metal
- D** The lone pair electrons in liquid water molecules

|    |
|----|
| 15 |
|----|

**END OF QUESTIONS**



**There are no questions printed on this page**

*Do not write  
outside the  
box*

**DO NOT WRITE ON THIS PAGE  
ANSWER IN THE SPACES PROVIDED**











**There are no questions printed on this page**

*Do not write  
outside the  
box*

**DO NOT WRITE ON THIS PAGE  
ANSWER IN THE SPACES PROVIDED**

**Copyright information**

For confidentiality purposes, all acknowledgements of third-party copyright material are published in a separate booklet. This booklet is published after each live examination series and is available for free download from [www.aqa.org.uk](http://www.aqa.org.uk).

Permission to reproduce all copyright material has been applied for. In some cases, efforts to contact copyright-holders may have been unsuccessful and AQA will be happy to rectify any omissions of acknowledgements. If you have any queries please contact the Copyright Team.

Copyright © 2022 AQA and its licensors. All rights reserved.



2 8



2 2 6 A 7 4 0 4 / 1

IB/M/Jun22/7404/1