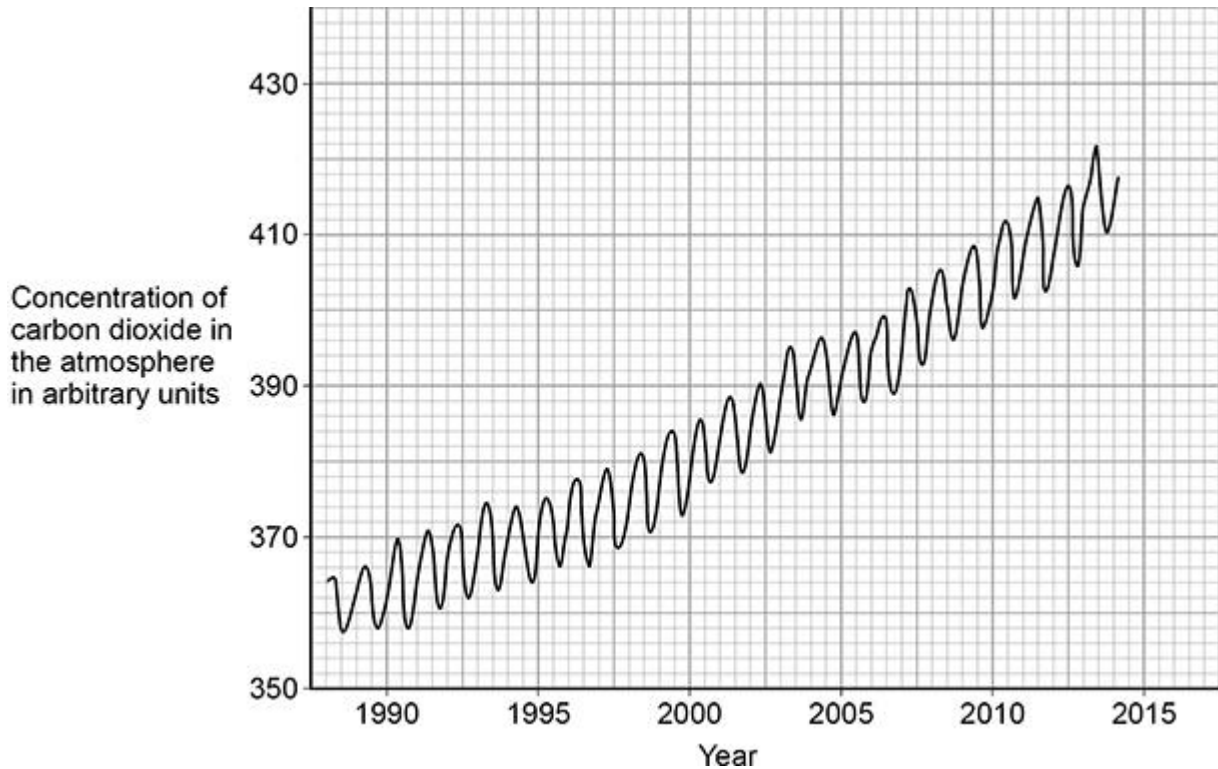


**Q1.**

Scientists are very concerned about the changes in concentration of carbon dioxide in the Earth's atmosphere.

The graph below shows the concentration of carbon dioxide in the atmosphere between 1988 and 2014.



(a) Describe **two** patterns shown in the graph above.

Use data from the graph above in your answer.

1 \_\_\_\_\_

\_\_\_\_\_

\_\_\_\_\_

\_\_\_\_\_

2 \_\_\_\_\_

\_\_\_\_\_

\_\_\_\_\_

\_\_\_\_\_

**(4)**

- (b) Give **two** human activities that affect the concentration of carbon dioxide in the atmosphere.

1 \_\_\_\_\_

\_\_\_\_\_

2 \_\_\_\_\_

\_\_\_\_\_

**(2)**

- (c) The trend shown in the graph above may continue for many years.

Explain what effect the changing concentration of carbon dioxide in the atmosphere could have on living organisms.

\_\_\_\_\_

\_\_\_\_\_

\_\_\_\_\_

\_\_\_\_\_

\_\_\_\_\_

\_\_\_\_\_

\_\_\_\_\_

\_\_\_\_\_

\_\_\_\_\_

\_\_\_\_\_

\_\_\_\_\_

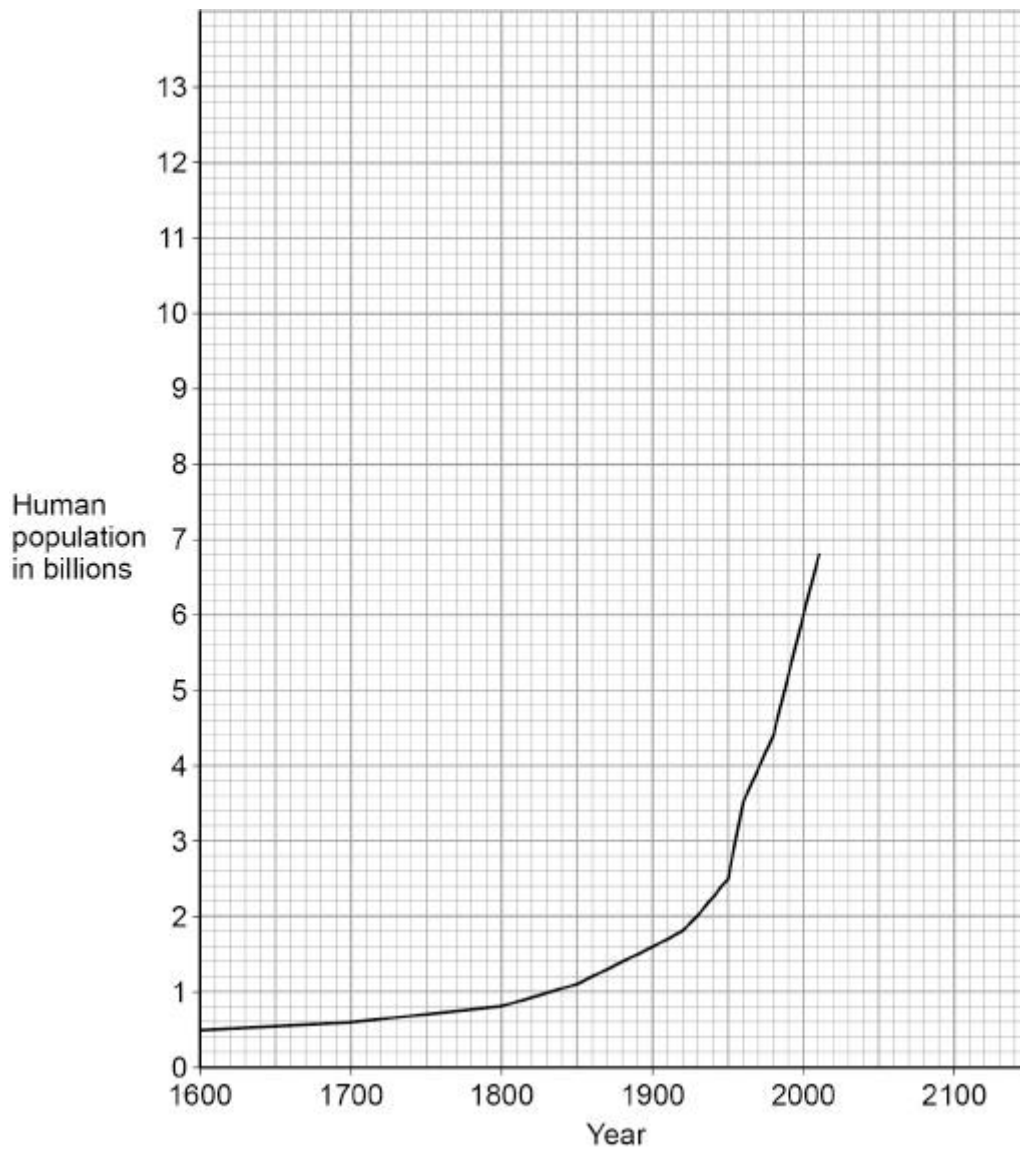
\_\_\_\_\_

**(4)**

**(Total 10 marks)**

**Q2.**

The graph below shows the human population from 1600 to 2010.



In 1900 the human population was 1.6 billion.

- (a) Calculate how many times greater the human population was in the year 2000 compared with the year 1900.

---



---



---

Number of times greater = \_\_\_\_\_

(2)

- (b) In 1950 the human population was 2.5 billion.

Calculate the mean annual increase in the human population between 1900 and 1950.

---



---



---

Mean annual increase = \_\_\_\_\_ billion per year

(2)

- (c) Predict the human population in 2050 if the current rate of population increase continues.

You should draw an extrapolation line on the graph above.

---



---



---

Predicted human population = \_\_\_\_\_

(2)

- (d) The increasing human population has caused a decline in fish stocks.

Describe how fishing quotas can help to return fish stocks to a sustainable level.

---



---



---



---

(2)

- (e) Farming techniques have changed in recent years.

Describe:

- why more land is being used for farming
- how increased farming has decreased biodiversity.

---



---



---

---

---

---

---

---

---

---

---

---

---

(6)

- (f) Genetic modification of crop plants can help meet the demands of the increasing human population.

Golden rice is a genetically modified (GM) crop.

What is the advantage of golden rice compared with non-GM rice?

Tick (✓) **one** box.

- Golden rice contains protein-rich mycoprotein
- Golden rice has improved nutritional value
- Golden rice produces human insulin

(1)

- (g) Suggest **one** reason why some people are concerned about the use of golden rice.

---

---

(1)

(Total 16 marks)

**Q3.**

**Figure 1** shows a flightless bird called the dodo (*Raphus cucullatus*).

**Figure 1**



The dodo:

- was 1 m tall
- had a mass of 20 kg
- lived in rainforests on a tropical island
- ate fruits
- made its nest on the ground.

A female dodo laid only one egg each year.

Humans arrived on the island in the year 1507. By 1681 the dodo was extinct.

(a) What is the genus of the dodo?

Tick (✓) **one** box.

- |        |                          |
|--------|--------------------------|
| Animal | <input type="checkbox"/> |
| Bird   | <input type="checkbox"/> |
| Raphus | <input type="checkbox"/> |

**(1)**

(b) Before the arrival of humans, there were no other large animals living on the island.

Suggest **two** reasons why the dodo became extinct soon after the arrival of humans.

1 \_\_\_\_\_

\_\_\_\_\_

2 \_\_\_\_\_

\_\_\_\_\_

(2)

Today, humans are cutting down large areas of tropical rainforests.

(c) Suggest **one** use of the land after the trees have been removed.

\_\_\_\_\_

\_\_\_\_\_

(1)

(d) Why does the removal of trees cause an increase in carbon dioxide in the atmosphere?

Tick (✓) **two** boxes.

There are fewer animals.

There is less photosynthesis.

There is less respiration.

The soil dries out.

The trees are burned.

(2)

(e) What effect would an increase in carbon dioxide in the atmosphere have on global air temperature?

Tick (✓) **one** box.

Decrease

Increase

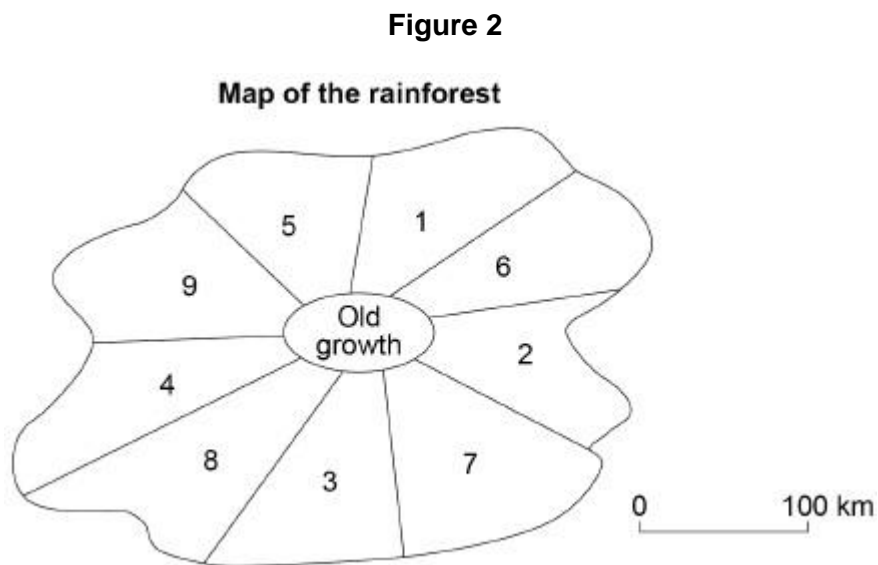
Stay the same

(1)

'Sustainable forestry' reduces the harmful effects of cutting down trees on the environment.

**Figure 2** shows a method of 'sustainable forestry'.

Numbers 1–9 show different parts of a rainforest.



The trees are cut down in the sequence 1 – 2 – 3 – 4 – 5 – 6 – 7 – 8 – 9

- The trees are cut down in only one area at any one time.
  - It takes 30 years to cut down the trees in each area.
  - The trees in the 'Old growth' area are never cut down.
- (f) How many years would it take to cut down the trees in all of the numbered areas in **Figure 2**?

---



---



---

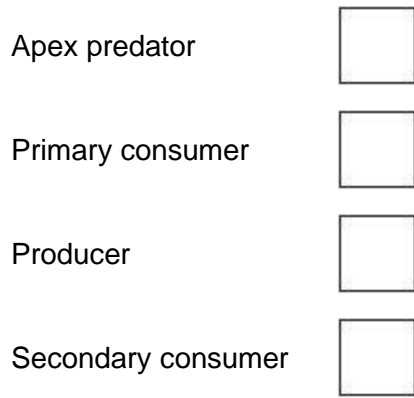
Number of years = \_\_\_\_\_

(2)

- (g) The rainforest contains:
- 750 species of trees
  - 400 species of birds







(1)

- (b) Draw a pyramid of biomass for the food chain.  
Label each trophic level.

(2)

- (c) Give **one** reason why the total biomass of the Daphnia in the pond is different from the total biomass of the algae.

---



---

(1)

Students investigated the size of the population of Daphnia in the pond.

This is the method used.

1. Collect 1 dm<sup>3</sup> of pond water from near the edge of the pond.
2. Pour the water through a fine net.
3. Count the number of Daphnia caught in the net.
4. Repeat steps 1–3 four more times.

The table below shows the results.

Sample number	Number of Daphnia in 1 dm <sup>3</sup> water
1	5
2	21
3	0
4	16
5	28

- (d) Calculate the mean number of Daphnia in 1 m<sup>3</sup> of pond water.

$$1 \text{ m}^3 = 1000 \text{ dm}^3$$

---

---

---

---

---

Mean number of Daphnia in 1 m<sup>3</sup> of pond water = \_\_\_\_\_

(2)

- (e) The pond was a rectangular shape, measuring:

- length = 2.5 metres
- width = 1.5 metres
- depth = 0.5 metres.

Calculate the estimated number of Daphnia in the pond.

Use your answer from part (d).

Give your answer in standard form.

---

---

---

---



---



---



---



---

Number of Daphnia in the pond = \_\_\_\_\_

(4)

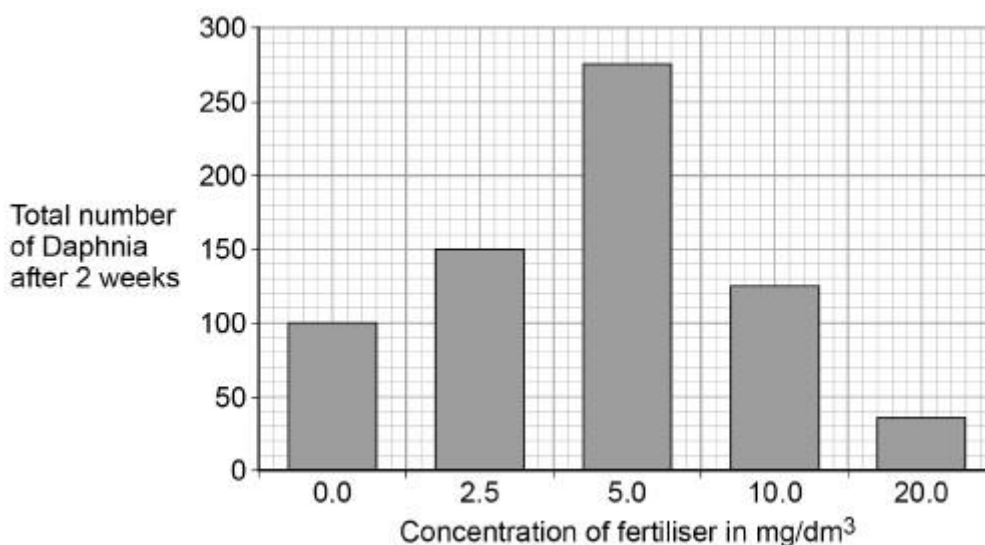
Rainfall can cause fertiliser to be washed from farmland into a pond.

The students investigated the effect of fertiliser on the population of Daphnia in water from the pond.

- The students put 20 Daphnia in each of five different concentrations of fertiliser.
- The students counted the total number of Daphnia in each concentration of fertiliser after 2 weeks.

Figure 2 shows the results.

Figure 2



- (f) A concentration of 5.0 mg/dm<sup>3</sup> of fertiliser caused a large increase in the population of Daphnia.

Explain why.

---



---

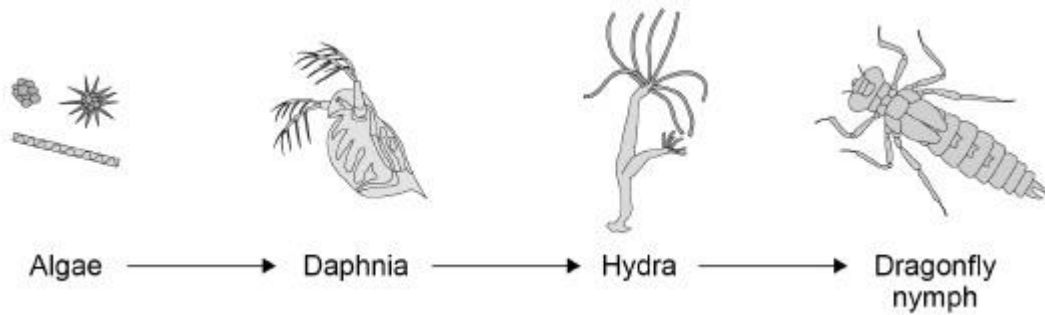


---

(2)

(g) **Figure 1** is repeated below.

**Figure 1**



The population of **Hydra** will decrease when 20 mg/dm<sup>3</sup> of fertiliser is added to the pond.

Explain why.

---



---



---



---

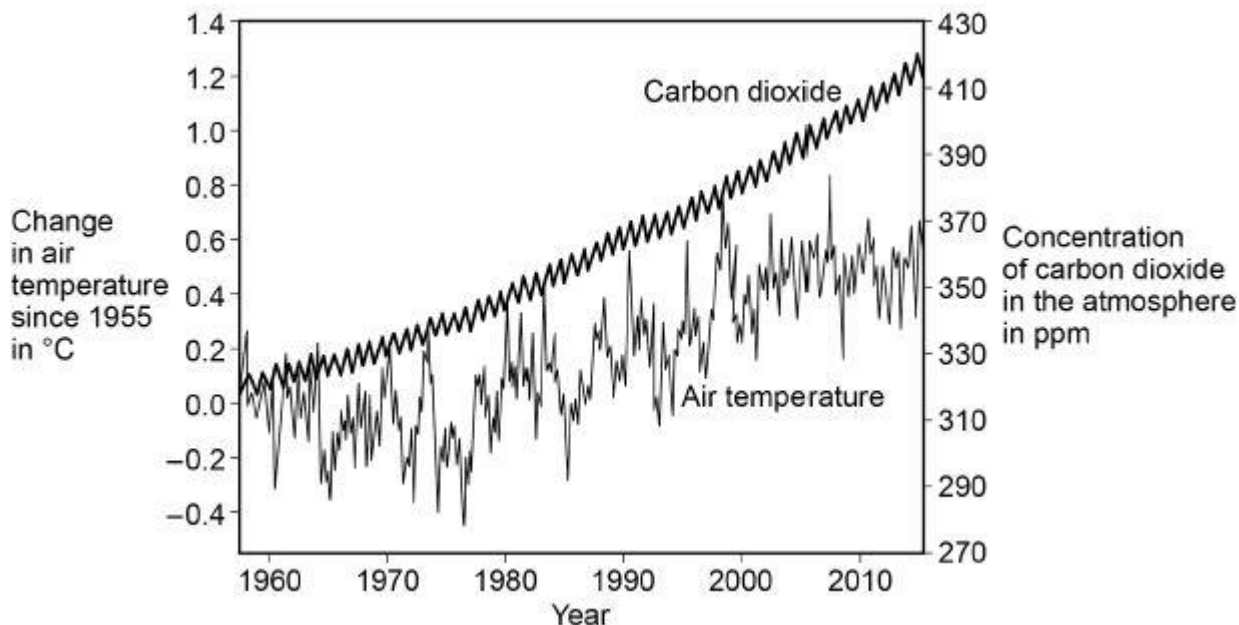
(2)

(Total 14 marks)

**Q5.**

Many scientists think that global air temperature is related to the concentration of carbon dioxide in the atmosphere.

The graph below shows changes in global air temperature and changes in the concentration of carbon dioxide in the atmosphere.



- (a) Complete the table below.  
Use information from the graph above.

Choose answers from the box.

You may use each answer once, more than once or not at all.

<b>constant</b>	<b>decreasing</b>	<b>increasing</b>
-----------------	-------------------	-------------------

	<b>1960 – 1977</b>	<b>1977 – 2003</b>	<b>2003 – 2015</b>
<b>Trend in carbon dioxide concentration</b>	Increasing		
<b>Trend in air temperature</b>			

(2)

Many scientists think that an increase in carbon dioxide concentration in the atmosphere causes an increase in air temperature.

- (b) How would an increase in the concentration of carbon dioxide in the atmosphere cause an increase in air temperature?

---



---

(1)

- (c) Evaluate evidence for and against the theory that an increase in the



(1)

- (f) Give **two** possible effects of an increase in global air temperature on living organisms.

1.

---

---

2.

---

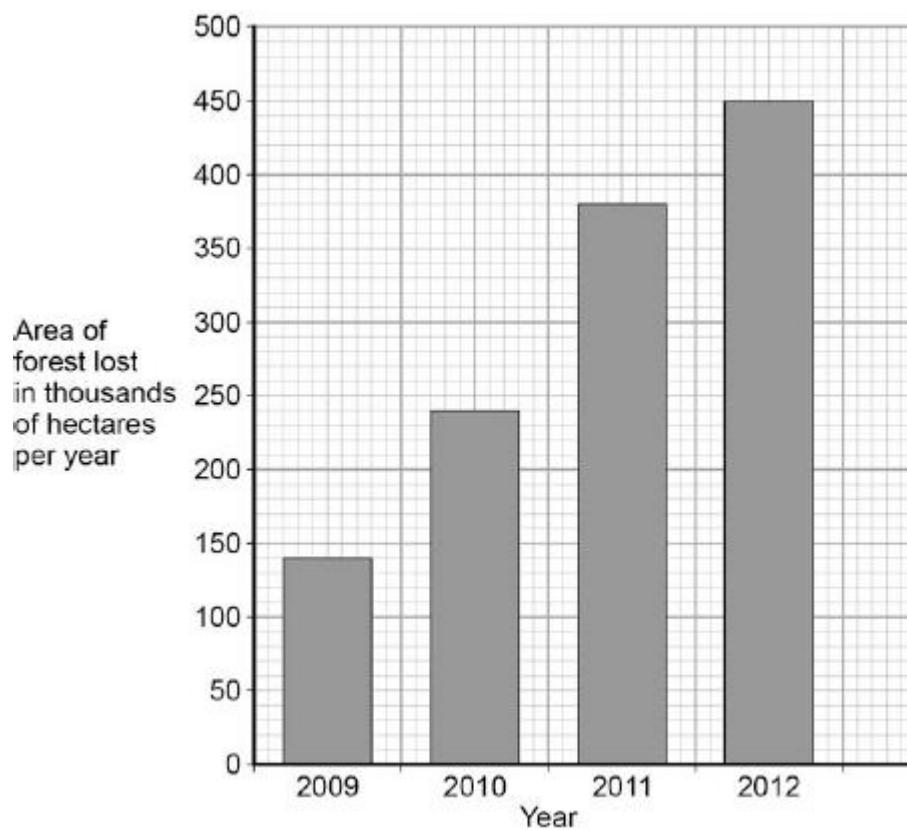
---

(2)

(Total 11 marks)

**Q6.**

The graph below shows the area of forest lost in Madagascar from 2009 to 2012.



- (a) The area of forest lost each year in Madagascar increased between 2009 and 2012.

Determine the total area of forest lost from the start of 2009 to the end of 2012.

---



---

Total area of forest lost = \_\_\_\_\_ thousand hectares

(1)

- (b) What are the possible reasons for the change in the area of forest lost per year between 2009 and 2012?

Tick **two** boxes.

The local people stop growing rice

Fewer new houses are needed for the population

The local people decided to farm cattle

More trees have been planted

A company starts growing plants for biofuels

(2)

- (c) More forest was lost in 2012 than in 2009.

Use words from the box to complete the sentences.

<b>carbon dioxide</b>	<b>excretion</b>	<b>nitrogen</b>
<b>oxygen</b>	<b>photosynthesis</b>	<b>respiration</b>

The increase in the area of forest lost has caused an increase in the gas

\_\_\_\_\_

The increase of this gas has been caused because less of the gas is being absorbed by plants for the process of \_\_\_\_\_.

(2)

- (d) Deforestation can have negative effects on our ecosystems.

What are the negative effects of deforestation?

Tick **two** boxes.

Animals and birds migrate because there is less food

- More habitats are destroyed
- There is less acid rain
- There is more biodiversity
- The global temperature decreases

(2)

(e) Scientists try to reduce the negative effects of human activity on our ecosystems.

One way is to protect rare habitats.

Give **one other** way of reducing the negative effects of human activity on our ecosystems.

---



---

(1)

(Total 8 marks)

**Q7.**

Human activity affects ecosystems.

(a) Draw **one** line from each human activity to the effect on ecosystems.

Human activity	Effect on ecosystems
Increase in rice fields	Increases the amount of methane in the atmosphere
Destruction of peat bogs	Increases the amount of carbon dioxide that is released into the atmosphere
	Reduces the rate at which carbon dioxide is locked up as wood

(2)

(b) (i) Deforestation also affects the atmosphere.

Give **two** reasons why deforestation takes place.

1. \_\_\_\_\_

\_\_\_\_\_

2. \_\_\_\_\_

\_\_\_\_\_

(2)

(ii) Changes in the gases in our atmosphere can cause global warming.

Give **two** possible effects of a rise in the Earth's temperature.

1. \_\_\_\_\_

\_\_\_\_\_

2. \_\_\_\_\_

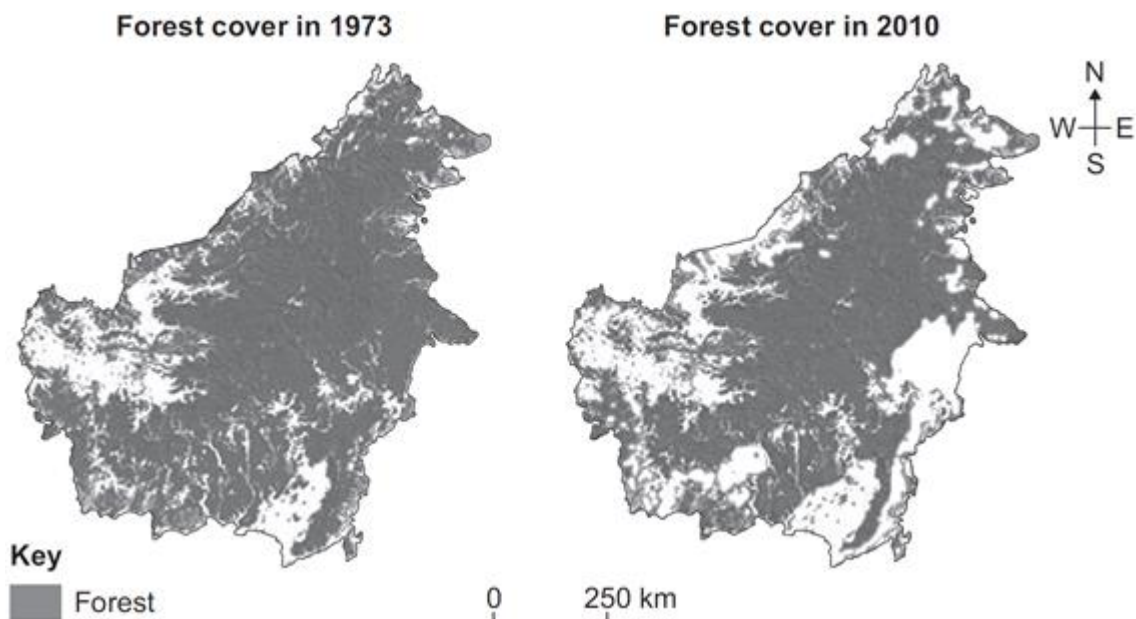
\_\_\_\_\_

(2)

(Total 6 marks)

**Q8.**

The figure below shows the amount of forest cover on an island in Asia, in 1973 and in 2010.



(a) (i) Deforestation has decreased the amount of forest cover on the island.

Describe the change in the pattern of forest cover on the island.

---

---

---

---

(2)

- (ii) Give **two** possible reasons why the amount of forest has decreased between 1973 and 2010.

1.

---

---

2.

---

---

(2)

- (b) Scientists are concerned about the effects of a decrease in forest cover on ecosystems.

Give **two** possible negative effects of the decrease in forest cover on ecosystems.

1.

---

---

2.

---

---

(2)

(Total 6 marks)