

Q1.Some populations of flies are becoming resistant to insecticides intended to kill them.

Scientists developed a method for finding out whether a fly was carrying a recessive allele, **r**, that gives resistance to an insecticide. The dominant allele, **R**, of this gene does not give resistance.

The scientists:

- crossed flies with genotype **RR** with flies with genotype **rr**
- obtained DNA samples from the parents and offspring
- used the same restriction endonuclease enzymes on each sample, to obtain DNA fragments.

(a) Explain why the scientists used the same restriction endonuclease enzymes on each DNA sample.

.....

.....

.....

.....

(2)

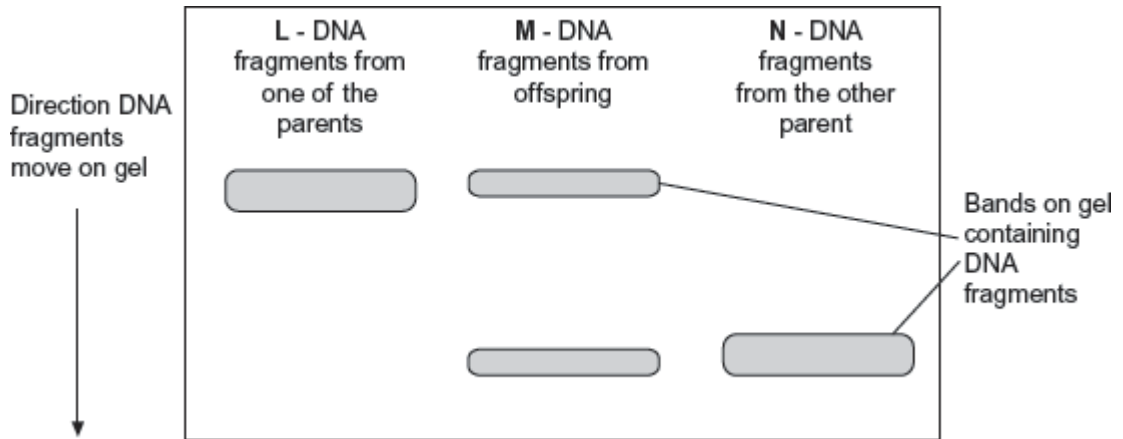
The scientists added two different primers to each sample of DNA fragments for the polymerase chain reaction (PCR).

- Primer A3 only binds to a 195 base-pair fragment from allele **r**.
- Primer A4 only binds to a 135 base-pair fragment from allele **R**.

The scientists separated the DNA fragments produced by the PCR on a gel where shorter fragments move further in a given time.

Their results are shown in **Figure 1**.

Figure 1



(b) Explain why primer A3 and primer A4 only bind to specific DNA fragments.

.....

.....

.....

.....

(2)

(c) Use all the information given to explain the results in **Figure 1**.

.....

.....

.....

.....

.....

.....

[Extra space]

.....

.....

(3)

(d) The scientists wanted to know on which chromosome the gene with alleles **R** and **r** was located. From the flies with genotype **RR**, they obtained cells that were in mitosis and added a labelled DNA probe specific for allele **R**. They then looked at

the cells under an optical microscope.

Explain why they used cells that were in mitosis.

.....

.....

.....

.....

(2)

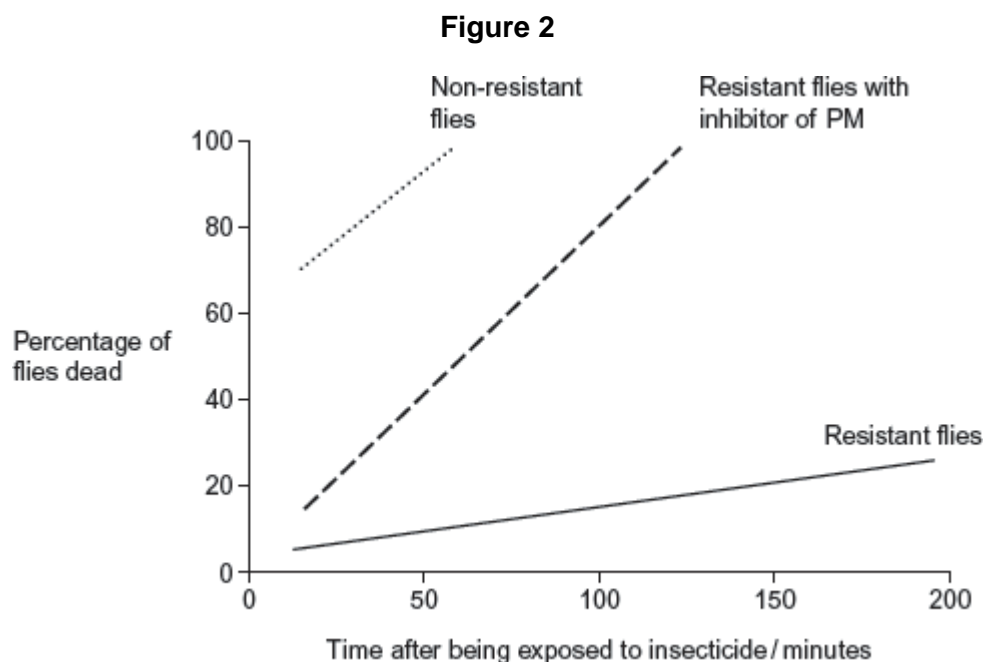
- (e) Another group of scientists thought that pesticide resistance in some flies was related to increased activity of an enzyme called P450 monooxygenase (PM). This enzyme breaks down insecticides.

The scientists obtained large numbers of resistant and non-resistant flies. They then set up the following experiments.

- Non-resistant flies exposed to insecticide.
- Resistant flies exposed to insecticide.
- Resistant flies treated with an inhibitor of PM and then exposed to insecticide.

They then determined the percentage of flies that were dead at different times after being exposed to insecticide.

Figure 2 shows their results.



- (i) Explain why the scientists carried out the control experiment with the non-resistant flies.

.....
.....
.....
.....
.....

(2)

- (ii) The scientists concluded that the resistance of the flies to the insecticide is partly due to increased activity of PM but other factors are also involved.

Explain how these data support this conclusion.

.....
.....
.....
.....
.....
.....

[Extra space]

.....
.....
.....

(4)

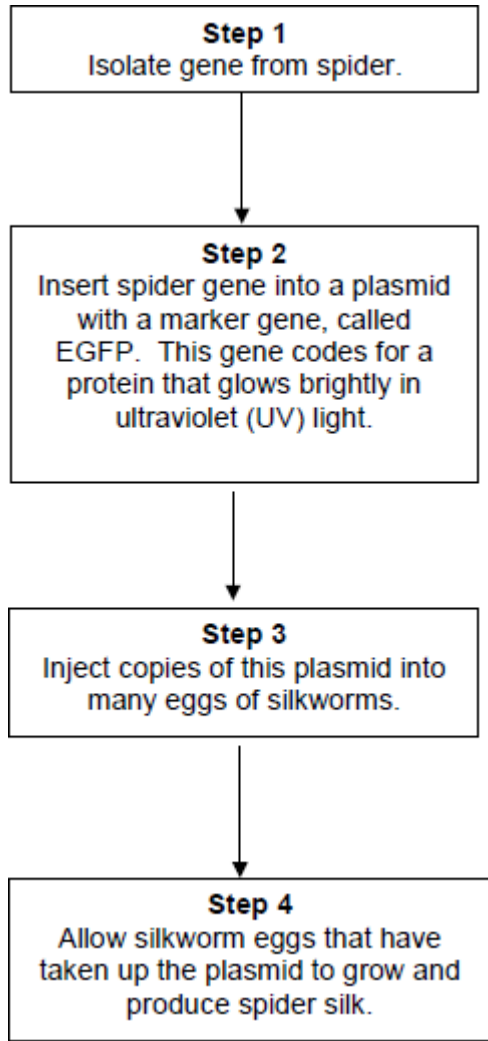
(Total 15 marks)

Q2. Silkworms secrete silk fibres, which are harvested and used to manufacture silk fabric.

Scientists have produced genetically modified (GM) silkworms that contain a gene from a spider.

The GM silkworms secrete fibres made of spider web protein (spider silk), which is stronger than normal silk fibre protein.

The method the scientists used is shown in the figure below.



(a) Suggest why the plasmids were injected into the eggs of silkworms, rather than into the silkworms.

.....

.....

.....

.....

(2)

(b) Suggest why the scientists used a marker gene and why they used the EGFP gene.

.....

.....

.....

.....

(2)

The scientists ensured the spider gene was expressed only in cells within the silk glands.

- (c) What would the scientists have inserted into the plasmid along with the spider gene to ensure that the spider gene was only expressed in the silk glands of the silkworms?

.....

(1)

- (d) Suggest **two** reasons why it was important that the spider gene was expressed only in the silk glands of the silkworms.

1

.....

2

.....

(2)

(Total 7 marks)

Q3. Scientists wanted to measure how much mRNA was transcribed from allele **A** of a gene in a sample of cells. This gene exists in two forms, **A** and **a**.

The scientists isolated mRNA from the cells. They added an enzyme to mRNA to produce cDNA.

- (a) Name the type of enzyme used to produce the cDNA.

.....

(1)

The scientists used the polymerase chain reaction (PCR) to produce copies of the cDNA. They added a DNA probe for allele **A** to the cDNA copies. This DNA probe had a dye attached to it. This dye glows with a green light **only** when the DNA probe is attached to its target cDNA.

(b) Explain why this DNA probe will only detect allele **A**.

.....

.....

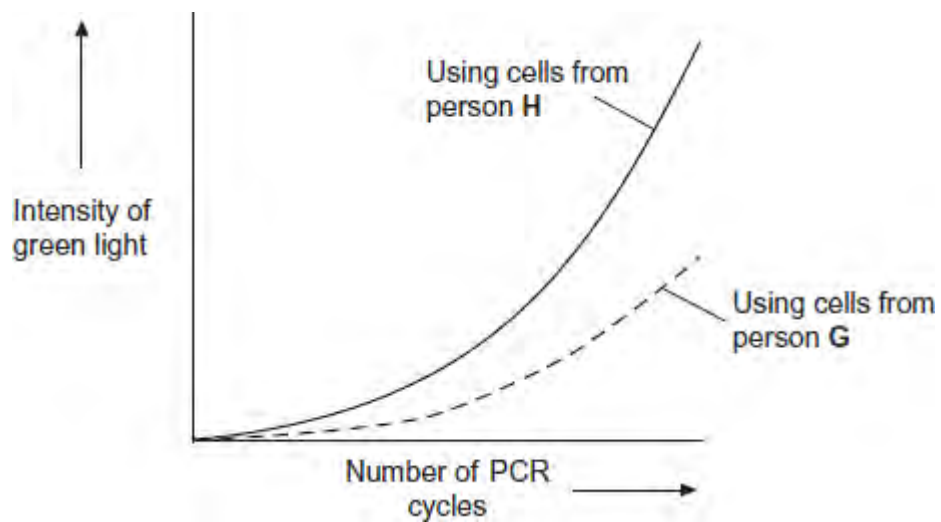
.....

.....

(2)

(c) The scientists used this method with cells from two people, **H** and **G**. One person was homozygous, **AA**, and the other was heterozygous, **Aa**. The scientists used the PCR and the DNA probe specific for allele **A** on the cDNA from both people.

The figure shows the scientists' results.



(i) Explain the curve for person **H**.

.....

.....

.....

.....

.....

.....

.....

.....

(Extra space)

.....

.....

(3)

(ii) Which person, **H** or **G**, was heterozygous, **Aa**? Explain your answer.

.....

.....

.....

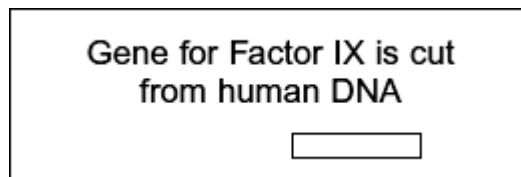
.....

(2)

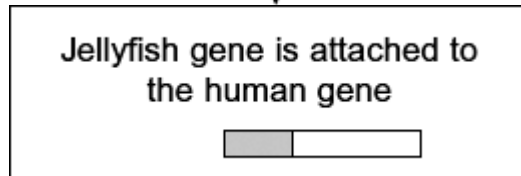
(Total 8 marks)

Q4. Haemophilia is a genetic condition in which blood fails to clot. Factor IX is a protein used to treat haemophilia. Sheep can be genetically engineered to produce Factor IX in the milk produced by their mammary glands. The diagram shows the stages involved in this process.

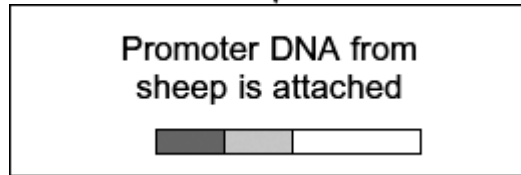
Stage 1

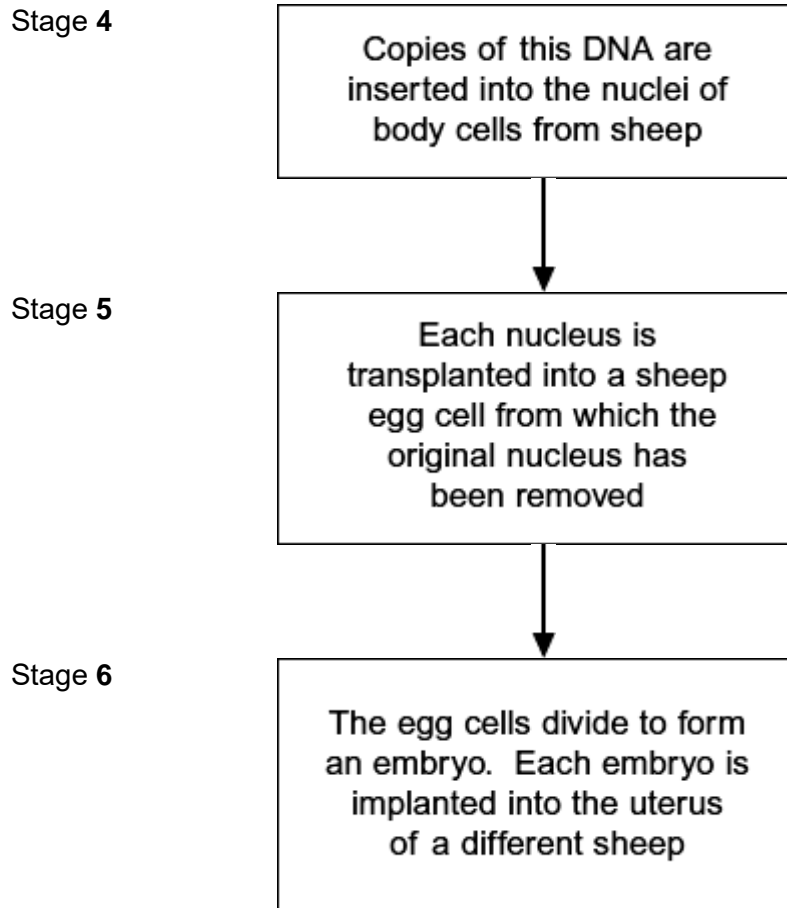


Stage 2



Stage 3





- (a) Name the type of enzyme that is used to cut the gene for Factor IX from human DNA (Stage 1) .

.....

(1)

- (b) (i) The jellyfish gene attached to the human Factor IX gene (Stage 2) codes for a protein that glows green under fluorescent light. Explain the purpose of attaching this gene.

.....

.....

.....

.....

.....

(2)

- (ii) The promoter DNA from sheep (Stage 3) causes transcription of genes coding for proteins found in sheep milk.

Suggest the advantage of using this promoter DNA.

.....
.....
.....
.....
.....

(Extra space)
.....

(2)

- (c) Many attempts to produce transgenic animals have failed. Very few live births result from the many embryos that are implanted.

- (i) Suggest **one** reason why very few live births result from the many embryos that are implanted.

.....
.....
.....
.....
.....

(Extra space)
.....

(2)

- (ii) It is important that scientists still report the results from failed attempts to produce transgenic animals. Explain why.

.....
.....
.....
.....
.....

(2)
(Total 9 marks)

- Q5.** (a) Adrenaline binds to receptors in the plasma membranes of liver cells. Explain how this causes the blood glucose concentration to increase.

.....
.....
.....
.....
.....

(Extra space)
.....

(2)

- (b) Scientists made an artificial gene which codes for insulin. They put the gene into a virus which was then injected into rats with type I diabetes. The virus was harmless to the rats but carried the gene into the cells of the rats.

The treated rats produced insulin for up to 8 months and showed no side-effects. The scientists measured the blood glucose concentrations of the rats at regular intervals. While the rats were producing the insulin, their blood glucose concentrations were normal.

- (i) The rats were not fed for at least 6 hours before their blood glucose concentration was measured. Explain why.

.....
.....
.....

(1)

- (ii) The rats used in the investigation had type I diabetes. This form of gene therapy may be less effective in treating rats that have type II diabetes. Explain why.

.....
.....
.....

(1)

- (iii) Research workers have suggested that treating diabetes in humans by this method of gene therapy would be better than injecting insulin. Evaluate this suggestion.

.....
.....
.....
.....
.....
.....
.....
.....

(Extra space)
.....

.....

.....

.....

.....

(4)

(Total 8 marks)