

**Q1.** Scientists investigated the control of blood glucose concentration in mice. They kept a group of normal mice without food for 48 hours. After 48 hours, the blood glucose concentrations of the mice were the same as at the start of the experiment.

- (a) Explain how the normal mice prevented their blood glucose concentration falling when they had **not** eaten for 48 hours.

.....  
.....  
.....  
.....  
.....  
.....

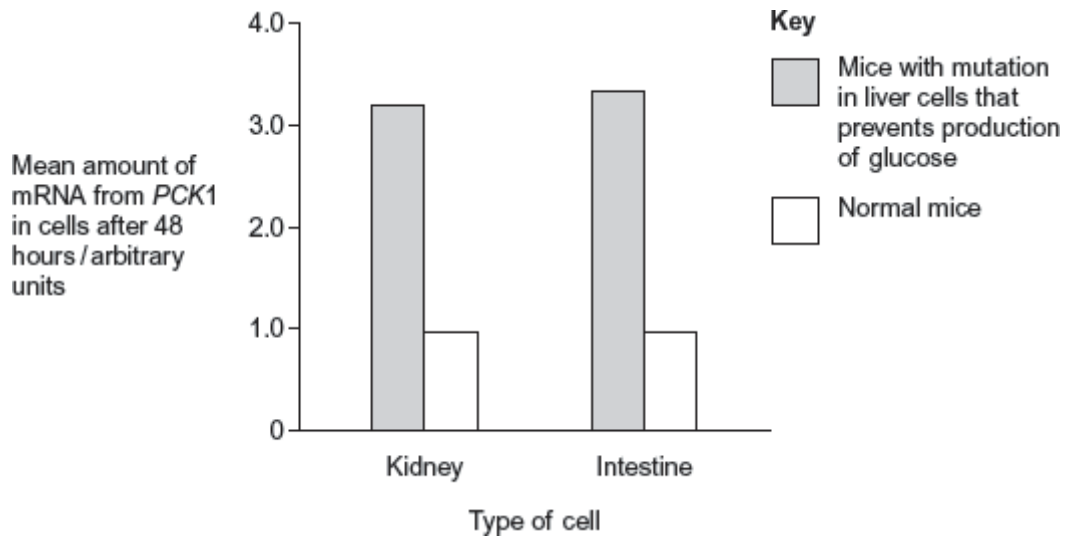
**[Extra space]** .....  
.....  
.....

(3)

The scientists then investigated mice with a mutation that prevents their liver cells making glucose. They kept a group of these mice without food for 48 hours. After 48 hours, the mean blood glucose concentrations of the mutant mice and the normal mice were the same.

The scientists investigated how blood glucose concentration is controlled in these mutant mice. An enzyme required for synthesis of glucose is coded for by a gene called *PCK1*. The scientists measured the mean amount of mRNA produced from this gene in cells from the kidneys and intestines of normal mice and mutant mice. They did this with mice that had previously been without food for 48 hours.

The scientists' results are shown in the graph.



- (b) Use information from the graph to suggest how blood glucose concentration is controlled in the mutant mice, compared with the normal mice.

.....

.....

.....

.....

.....

.....

.....

**[Extra space]** .....

.....

.....

(3)

- (c) The scientists performed statistical tests on the data shown in the graph, to see whether the differences in the amount of mRNA in cells from normal and mutant mice were significant. Both the probability values they obtained were  $p < 0.01$ .

Explain what this means about the differences in the amounts of mRNA produced.

.....

.....

.....

.....

.....  
[Extra space] .....

(2)  
(Total 8 marks)

**Q2.** Some mice have diabetes. The diabetes causes the blood glucose concentration to become very high after a meal. Scientists investigated the use of an inhibitor of amylase to treat diabetes.

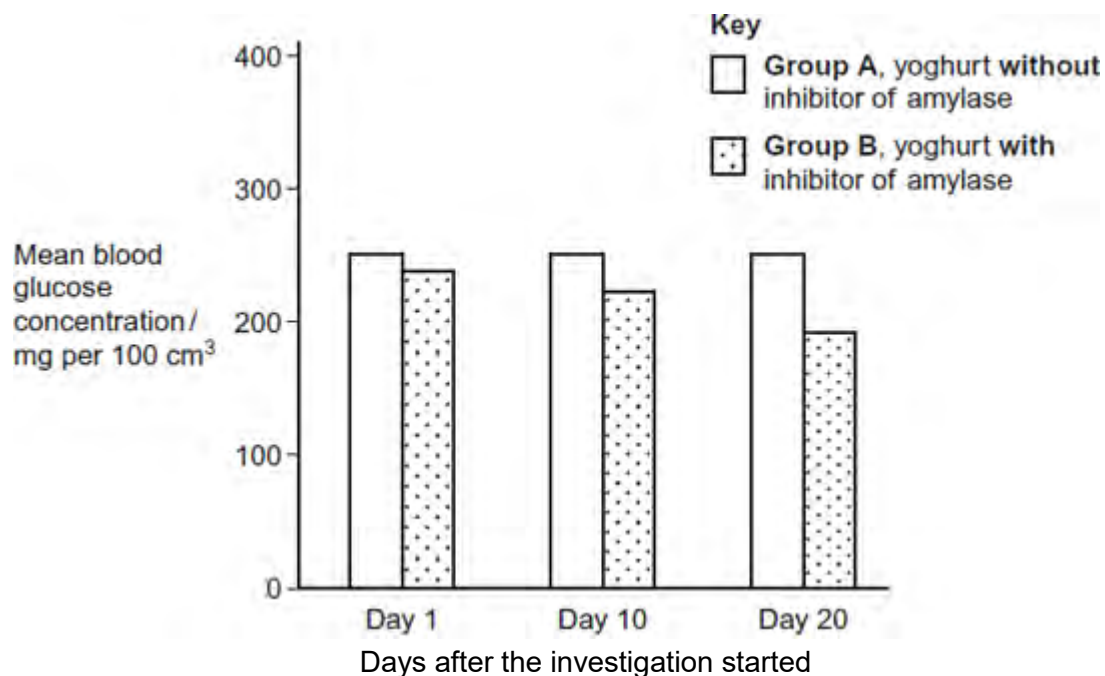
The scientists took 30 mice with diabetes and divided them into two groups, **A** and **B**.

- **Group A** was given yoghurt **without** the inhibitor of amylase each day.
- **Group B** was given yoghurt **with** the inhibitor of amylase each day.

Apart from the yoghurt, all of the mice were given the same food each day.

The scientists measured the blood glucose concentration of each mouse, 1 hour after it had eaten. This was done on days 1, 10 and 20 after the investigation started.

The following figure shows the scientists' results.



(a) **Group A** acted as a control in this investigation.

Explain the purpose of this group.

.....

.....  
.....  
.....

(2)

- (b) Apart from the yoghurt, it was important that all of the mice were given the same food each day.

Give **two** reasons why it was important that all of the mice were given the same food each day.

1 .....

.....

2 .....

.....

(2)

- (c) The scientists' hypothesis was that adding the inhibitor of amylase to the food would lead to a lower blood glucose concentration.

Use your knowledge of digestion to suggest how the addition of the inhibitor could lead to a lower blood glucose concentration.

.....

.....

.....

.....

(2)

- (d) Give **one** reason why these results may **not** support the use of the inhibitor of amylase to treat diabetes in mice.

.....

.....

.....

.....

**Q3.(a)** When insulin binds to receptors on liver cells, it leads to the formation of glycogen from glucose. This lowers the concentration of glucose in liver cells.

Explain how the formation of glycogen in liver cells leads to a lowering of blood glucose concentration.

.....

.....

.....

.....

(2)

People with type II diabetes have cells with low sensitivity to insulin. About 80% of people with type II diabetes are overweight or obese. Some people who are obese have gastric bypass surgery (GBS) to help them to lose weight.

Doctors investigated whether GBS affected sensitivity to insulin. They measured patients' sensitivity to insulin before and after GBS. About half of the patients had type II diabetes. The other half did not but were considered at high risk of developing the condition.

The table below shows the doctors' results. The higher the number, the greater the sensitivity to insulin.

Patients	Mean sensitivity to insulin / arbitrary units ( $\pm$ SD)	
	Before gastric bypass surgery	1 month after gastric bypass surgery
Did not have diabetes	0.55 ( $\pm$ 0.32)	1.30 ( $\pm$ 0.88)
Had type II diabetes	0.40 ( $\pm$ 0.24)	1.10 ( $\pm$ 0.87)

(b) The doctors concluded that many of the patients who did not have type II diabetes

were at high risk of developing the condition.

Use the data in the table to suggest why they reached this conclusion.

.....  
.....  
.....  
.....

(2)

- (c) The doctors also concluded that GBS cured many patients' diabetes but that some were not helped very much.

Do these data support this conclusion? Give reasons for your answer.

.....  
.....  
.....  
.....  
.....  
.....

(Extra space) .....

.....  
.....

(3)

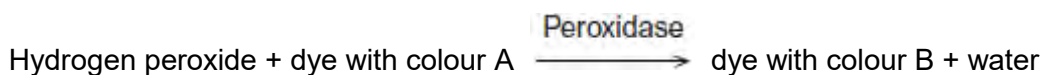
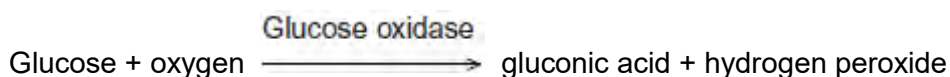
(Total 7 marks)

**Q4.**A glucometer is a device used to measure blood glucose concentration. A person uses a test strip that goes into the glucometer. They put a drop of blood onto the test strip. There are substances on the test strip that produce a colour change with glucose. The higher the concentration of glucose, the deeper the colour produced. The glucometer measures the depth of colour produced and converts this into a glucose concentration. A new test strip is used for each blood test.

**Figure – glucometer and test strip**



The following equations show how the substances on the test strip produce a colour change.



Non-diabetics have no glucose in their urine. Diabetics have glucose in their urine if their blood glucose concentration rises above about  $170 \text{ mg } 100 \text{ cm}^{-3}$ . Before the glucometer was available, diabetics used test strips to measure the concentration of glucose in their urine as a means of measuring their blood glucose concentration. When testing urine, the colour of the test strip is compared against a colour chart which gives a glucose concentration range for the colour produced.

- (a) Identify all the substances located at position **X** on the test strip before a drop of blood is added.

.....

.....

.....

.....

.....

(2)

- (b) Before the glucometer was available, diabetics used test strips to measure the concentration of glucose in their urine as a means of measuring their blood glucose concentration.

Give **two** reasons why this method of testing urine would **not** give an accurate measurement of blood glucose concentration.

1 .....

.....

2 .....

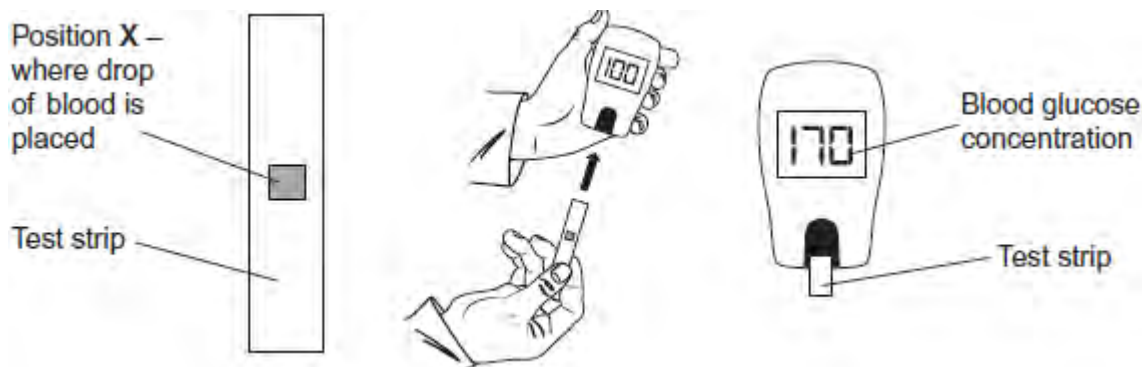
.....

(2)  
(Total 4 marks)

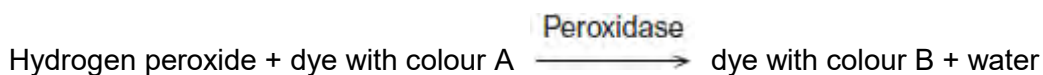
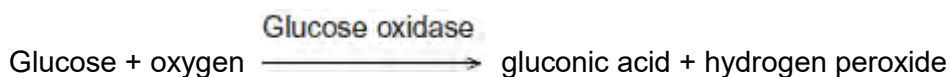
### Q5.Resource A

A glucometer is a device used to measure blood glucose concentration. A person uses a test strip that goes into the glucometer. They put a drop of blood onto the test strip. There are substances on the test strip that produce a colour change with glucose. The higher the concentration of glucose, the deeper the colour produced. The glucometer measures the depth of colour produced and converts this into a glucose concentration. A new test strip is used for each blood test.

Figure 1 – glucometer and test strip



The following equations show how the substances on the test strip produce a colour change.



Non-diabetics have no glucose in their urine. Diabetics have glucose in their urine if their blood glucose concentration rises above about  $170 \text{ mg } 100 \text{ cm}^{-3}$ . Before the glucometer was available, diabetics used test strips to measure the concentration of glucose in their urine as a means of measuring their blood glucose concentration. When testing urine, the colour of the test strip is compared against a colour chart which gives a glucose concentration range for the colour produced.



## Resource B

There are two types of diabetes: type 1 and type 2.

- People with type 1 diabetes do not produce enough insulin.
- People with type 2 diabetes do produce insulin but have cells which do not respond to insulin.

Doctors use a glucose tolerance test to help diagnose people with diabetes. They start each test after a person has not eaten overnight. They measure a person's blood glucose concentration.

The person then drinks a solution containing 75 g of glucose. The doctors measure the person's blood glucose concentration 2 hours later. During the test, the person remains at rest.

**Figure 1** shows three diagnoses that can be made from the results of the test.

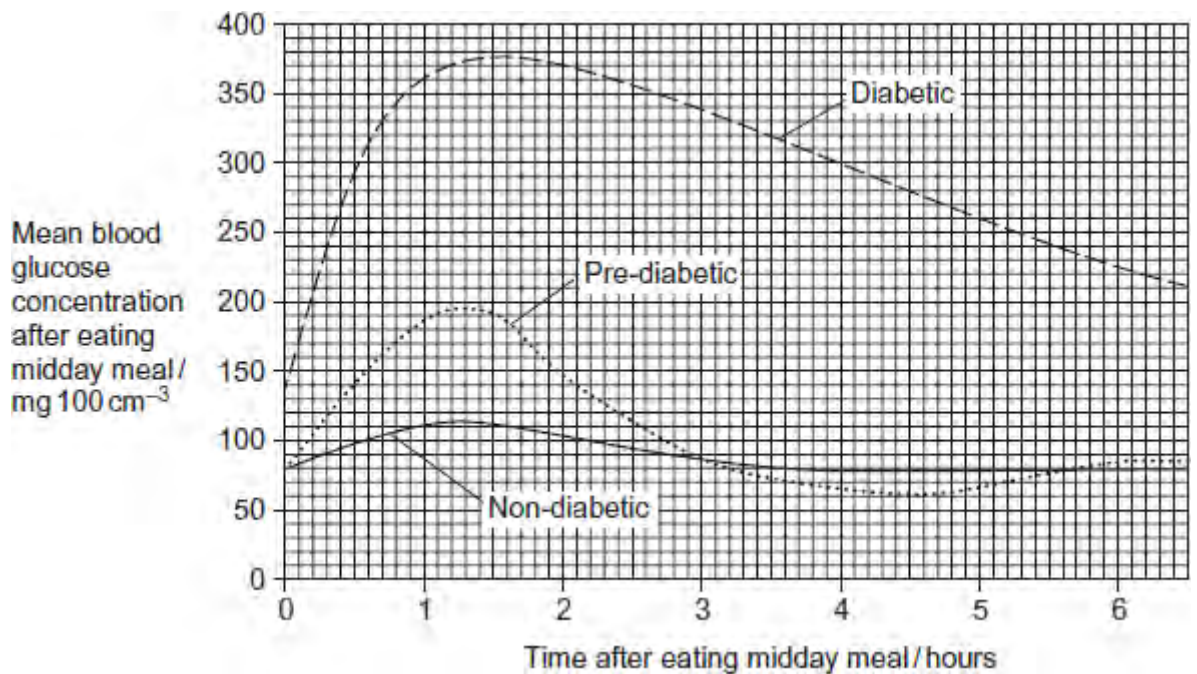
**Figure 2 – glucose tolerance test results and diagnoses**

Blood glucose concentration after 2 hours / mg 100 cm <sup>-3</sup>	Diagnosis	Comments
≤ 110	Non-diabetic	Low risk for future diabetes
Between 140 and 200	Pre-diabetic	High risk for future diabetes. Some doctors recommend that the upper value should be lowered to 180 mg 100 cm <sup>-3</sup>
≥ 200	Diabetic	Confirm by doing a second test

A researcher monitored the mean blood glucose concentration of a non-diabetic, a pre-diabetic and a diabetic after they had each eaten a midday meal.

His results are shown in **Figure 3**.

**Figure 3**



A laboratory worker suspected she had type 2 diabetes but did not have a glucometer. Instead she added a drop of her blood to a test strip and used a colour chart to estimate her blood glucose concentration as  $140 \text{ mg } 100 \text{ cm}^{-3}$ .

Is it valid to conclude that she did have type 2 diabetes?

Use this information, and **Resource A** and **Resource B**, to explain your answer.

.....

.....

.....

.....

.....

.....

.....

.....

(Extra space) .....

.....

.....

(Total 3 marks)

**Q6.** (a) Adrenaline binds to receptors in the plasma membranes of liver cells. Explain how this causes the blood glucose concentration to increase.

.....  
.....  
.....  
.....  
.....

(Extra space) .....  
.....

(2)

(b) Scientists made an artificial gene which codes for insulin. They put the gene into a virus which was then injected into rats with type I diabetes. The virus was harmless to the rats but carried the gene into the cells of the rats.

The treated rats produced insulin for up to 8 months and showed no side-effects. The scientists measured the blood glucose concentrations of the rats at regular intervals. While the rats were producing the insulin, their blood glucose concentrations were normal.

(i) The rats were not fed for at least 6 hours before their blood glucose concentration was measured. Explain why.

.....  
.....  
.....

(1)

(ii) The rats used in the investigation had type I diabetes. This form of gene therapy may be less effective in treating rats that have type II diabetes. Explain why.

.....

.....  
.....

(1)

- (iii) Research workers have suggested that treating diabetes in humans by this method of gene therapy would be better than injecting insulin. Evaluate this suggestion.

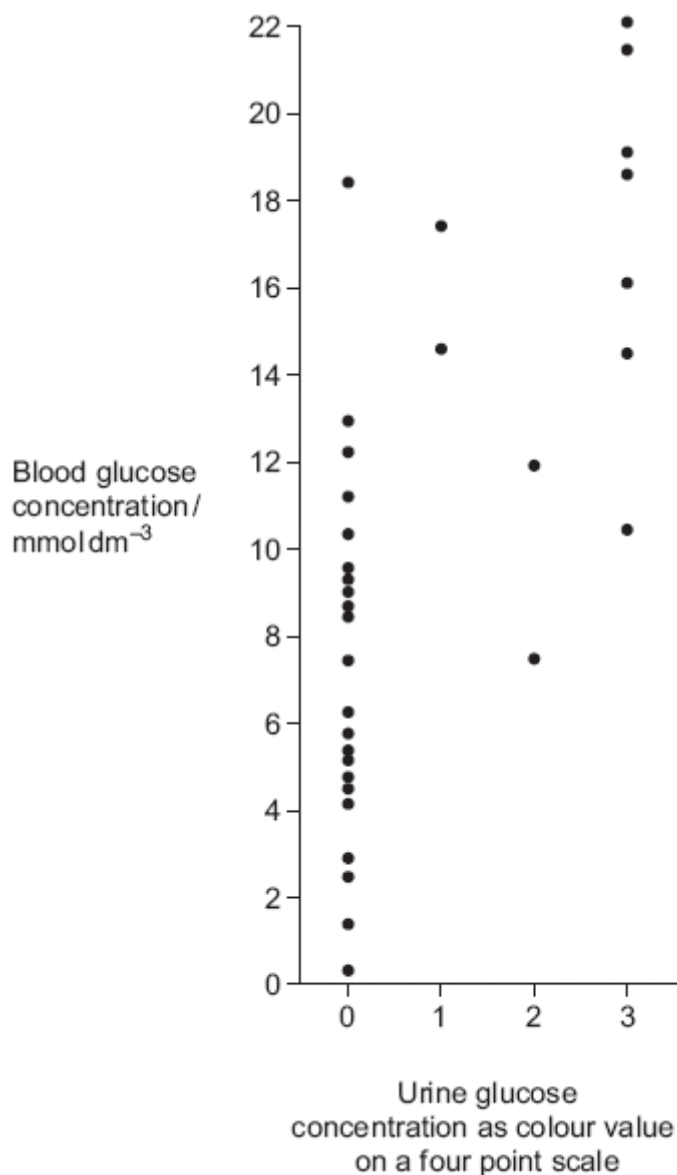
.....  
.....  
.....  
.....  
.....  
.....  
.....  
.....  
.....

*(Extra space)* .....  
.....  
.....  
.....  
.....  
.....

(4)

**(Total 8 marks)**

- Q7.** (a) Technicians in a hospital laboratory tested urine and blood samples from a girl with diabetes at intervals over a one-year period. Each time the technicians tested her urine, they also measured her blood glucose concentration. Their results are shown in the graph.



- (i) The girl who took part in this investigation was being successfully treated with insulin. The graph shows that on some occasions, the concentration of glucose in her blood was very high. Suggest why.

.....

.....

.....

.....

(2)

(ii) Use the graph to evaluate the use of the urine test as a measure of blood glucose concentration.

.....  
.....  
.....  
.....  
.....  
.....

(3)

(b) Diabetic people who do not control their blood glucose concentration may become unconscious and go into a coma. A doctor may inject a diabetic person who is in a coma with glucagon. Explain how the glucagon would affect the person's blood glucose concentration.

.....  
.....  
.....  
.....

(2)

(Total 7 marks)