

GCSE Physics A (Gateway)

J249/02 Physics A P5-P8 and P9 (Foundation Tier)

Question Set 27

Multiple Choice Questions

P5: Waves in Matter

1 Which electromagnetic waves have the highest frequency?

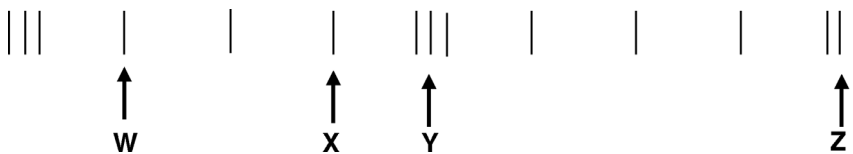
- A Gamma rays
- B Microwaves
- C Radio waves
- D Ultra-violet rays

Your answer

[1]

2 A longitudinal wave passes through a slinky spring.
The coils of the spring vibrate backwards and forwards.

The diagram shows a snapshot of the position of the coils as the wave passes along the spring.



Which pair of coils are one wavelength apart?

- A W and X
- B W and Z
- C X and Y
- D Y and Z

Your answer

[1]

3 Which statement is **not** true of all electromagnetic waves?

- A They have the same wavelength.
- B They are transverse waves.
- C They can travel through a vacuum.
- D They travel at 300 000 000 m/s.

Your answer

[1]

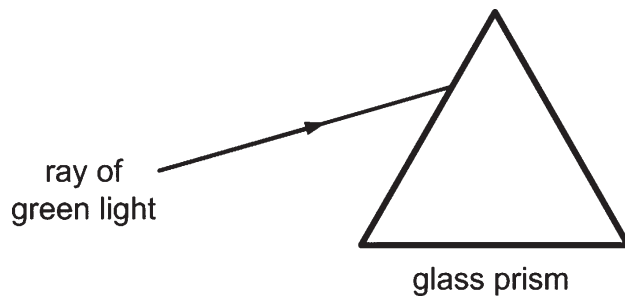
4 Which wave travels as a **longitudinal** wave?

- A Light from a torch
- B Ripples from a stone dropped in water
- C Sound from a loudspeaker
- D Ultra-violet from the Sun

Your answer

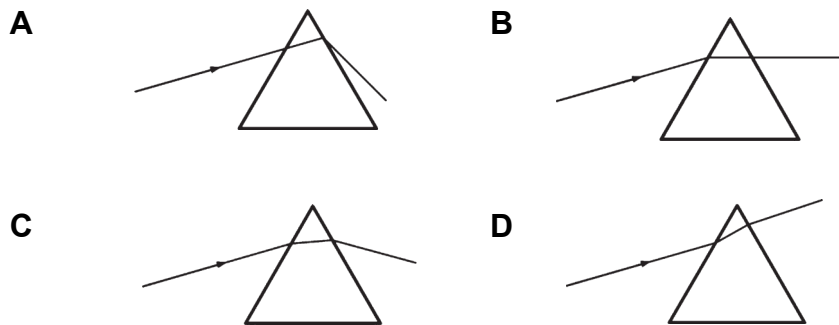
[1]

5 A ray of **green** light shines through a glass prism.



The ray travels through the prism and out of the other side.

Which diagram shows the correct path of the ray?



Your answer

[1]

6 Some electromagnetic waves are used to scan a person in hospital.

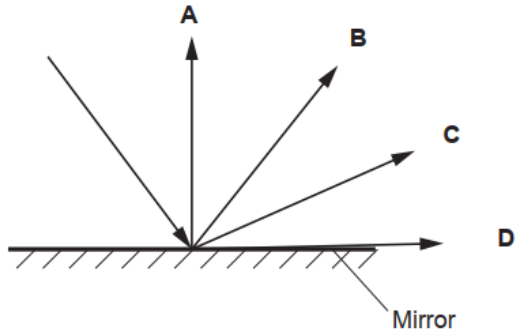
Which statement is true about a scan that uses **electromagnetic** waves?

- A Micro-waves are used to scan skin.
- B Ultrasound waves are used to scan an unborn baby.
- C Ultra-violet is used to scan for cancer.
- D X-rays are used to scan for broken bones.

Your answer

[1]

7 Which light ray shows the correct reflection from the plane (flat) mirror?



Your answer

[1]

8 Which row **A**, **B**, **C** or **D**, is true for electromagnetic waves?

	Transmission	Type	Movement in space
A	Transmit energy from absorber to source	Longitudinal	Travel through space at different velocities
B	Transmit energy from absorber to source	Transverse	Travel through space at different velocities
C	Transmit energy from source to absorber	Longitudinal	Travel through space where all have the same velocity
D	Transmit energy from source to absorber	Transverse	Travel through space where all have the same velocity

Your answer

[1]

- 9 A student measures the time it takes for the sound from a firework to reach the observer. She takes 3 measurements of the time taken for four different distances, **A**, **B**, **C** and **D**.

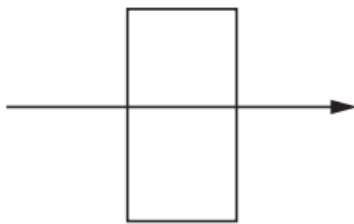
Distance	Time taken (s)		
	1st measurement	2nd measurement	3rd measurement
A	2.16	2.19	2.17
B	1.99	2.02	1.97
C	1.80	1.81	1.89
D	1.69	1.68	1.71

Which distance **A**, **B**, **C** or **D**, has the largest range of values?

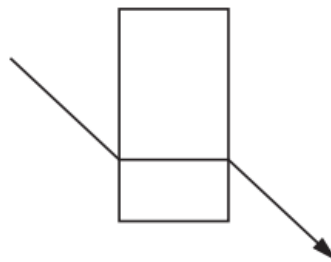
Your answer

[1]

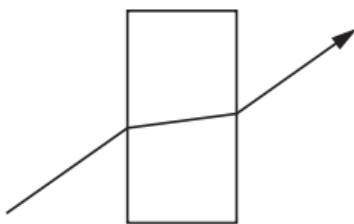
- 10 Look at the diagrams of a light ray as it passes from air through a glass block.



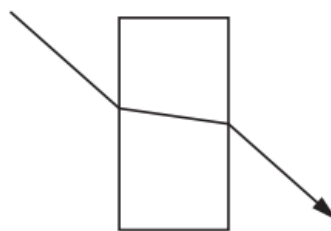
A



B



C



D

Which diagram shows an **incorrect** refraction?

Your answer

[1]

11 A radio wave has a wavelength of 100 m. It has a speed of 3×10^8 m/s.

Use the equation: Wave speed = Frequency \times Wavelength

Calculate the frequency of the wave.

- A** 3 MHz
- B** 30 MHz
- C** 300 MHz
- D** 3000 MHz

Your answer

[1]

12 A teacher measures the speed of water waves in a ripple tank.

What apparatus should she use?

- A** Ammeter and stopwatch
- B** Newton-meter and ruler
- C** Ruler and protractor
- D** Ruler and stopwatch

Your answer

[1]

13 What type of wave is light?

- A** A longitudinal electromagnetic wave
- B** A longitudinal P wave
- C** A transverse S wave
- D** A transverse electromagnetic wave

Your answer

[1]

14 Which statement is **true** for electromagnetic waves?

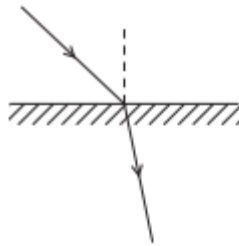
- A High frequency electromagnetic waves have a long wavelength.
- B High frequency electromagnetic waves have no wavelength.
- C Low frequency electromagnetic waves have a long wavelength.
- D Low frequency electromagnetic waves have a short wavelength.

Your answer

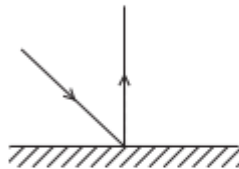
[1]

15 Which diagram shows reflection of a light ray using a plane mirror?

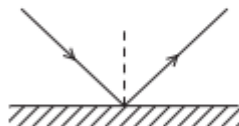
A



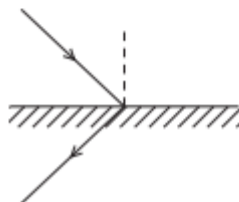
B



C



D



Your answer

[1]

16 Which row in the table is correct?

	Electromagnetic wave	Use
A	Radio	Killing bacteria
B	Microwaves	Mobile phones
C	X-rays	Optical fibres
D	Gamma rays	Tanning beds

Your answer

[1]

17 A sound wave travels in air and enters water.

What happens to the sound wave as it enters the water?

	Speed	Frequency	Wavelength
A	decreases	decreases	decreases
B	decreases	stays the same	decreases
C	increases	increases	increases
D	increases	stays the same	increases

Your answer

[1]

18 An electromagnetic wave transfers energy.

Which row in the table is correct?

	Electromagnetic wave	Energy transfer
A	Infra-red	From a heating element of a toaster to the bread inside
B	Radio	From a radio to a transmitter
C	Gamma rays	From a high voltage supply to heating water in food
D	X-rays	From bones in the body to an X-ray machine

Your answer

[1]

Total Marks for Question Set 27: 18

OCR

Oxford Cambridge and RSA

Copyright Information

OCR is committed to seeking permission to reproduce all third-party content that it uses in its assessment materials. OCR has attempted to identify and contact all copyright holders whose work is used in this paper. To avoid the issue of disclosure of answer-related information to candidates, all copyright acknowledgements are reproduced in the OCR Copyright Acknowledgements Booklet. This is produced for each series of examinations and is freely available to download from our public website (www.ocr.org.uk) after the live examination series.

If OCR has unwittingly failed to correctly acknowledge or clear any third-party content in this assessment material, OCR will be happy to correct its mistake at the earliest possible opportunity.

For queries or further information please contact The OCR Copyright Team, The Triangle Building, Shaftesbury Road, Cambridge CB2 8EA.

OCR is part of the Cambridge Assessment Group; Cambridge Assessment is the brand name of University of Cambridge Local Examinations Syndicate (UCLES), which is itself a department of the University of Cambridge