

GCSE Physics A (Gateway)

J249/02 Physics A P5-P8 and P9 (Foundation Tier)

Question Set 11

- 1 (a) Lenses can be used to help people see clearly.

Fig. 1.1 is a diagram of a convex lens.




Fig. 1.1

- (i) A student models the lens using two glass **prisms** and a glass **block**.

Complete the ray diagram **Fig. 1.2** to show how light rays travel through the model lens (glass prism and glass block).

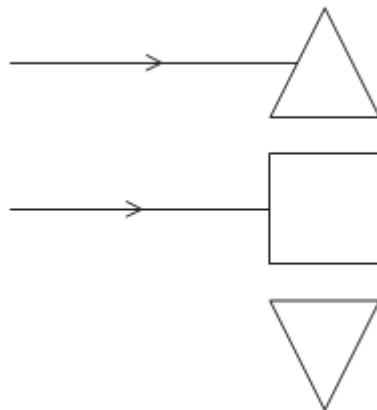


Fig. 1.2

- (ii) Explain how a convex lens can correct long-sighted vision.

Use the model in **Fig. 1.2** to help you.

[2]

[2]

(b) A student looks at coloured paper in different coloured light.

Fig. 1.3 is a diagram of her experiment.

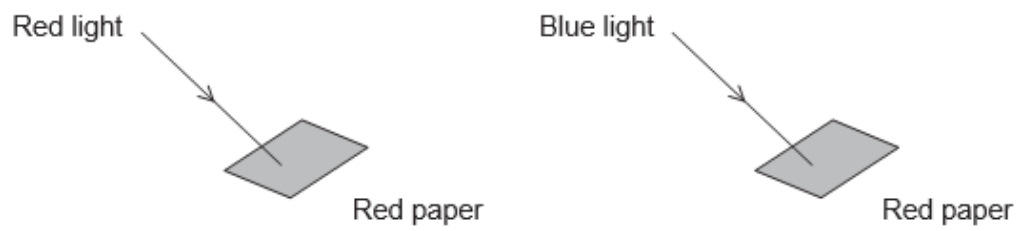


Fig. 1.3

She looks at red paper with red light. The paper appears red.

What colour does the red paper appear in blue light?

Explain your answer.

[2]

Total Marks for Question Set 11: 6

OCR

Oxford Cambridge and RSA

Copyright Information

OCR is committed to seeking permission to reproduce all third-party content that it uses in its assessment materials. OCR has attempted to identify and contact all copyright holders whose work is used in this paper. To avoid the issue of disclosure of answer-related information to candidates, all copyright acknowledgements are reproduced in the OCR Copyright Acknowledgements Booklet. This is produced for each series of examinations and is freely available to download from our public website (www.ocr.org.uk) after the live examination series.

If OCR has unwittingly failed to correctly acknowledge or clear any third-party content in this assessment material, OCR will be happy to correct its mistake at the earliest possible opportunity.

For queries or further information please contact The OCR Copyright Team, The Triangle Building, Shaftesbury Road, Cambridge CB2 8EA.

OCR is part of the Cambridge Assessment Group; Cambridge Assessment is the brand name of University of Cambridge Local Examinations Syndicate (UCLES), which is itself a department of the University of Cambridge