

GCSE Physics A (Gateway)



J249/01 Physics A P1-P4 and P9 (Foundation Tier)



Question Set 28



Multiple Choice Questions



P4: Magnets and Magnetic Fields

1 Which pair of objects attract each other?

A   copper bar

B  

C  

D   aluminium bar

Your answer

[1]

2

In a solenoid, a magnetic field is generated when an electric current passes through a coiled wire.

Which row shows how increasing the current or increasing the number of turns in the coiled wire affects the strength of the magnetic field?

		Increased current	Increased number of turns
A	Effect on magnetic field strength	stronger	weaker
B		stronger	stronger
C		weaker	stronger
D		weaker	weaker

Your answer

[1]

3 Why is an unmagnetised piece of iron attracted to a magnet?

- A The iron has charged particles which attract the electrons in the magnet.
- B The iron has charged particles which attract the protons in the magnet.
- C The iron has magnetism induced by the magnet.
- D The iron is attracted by the Earth's magnetic field

Your answer

[1]

Total Marks for Question Set 28: 3

OCR

Oxford Cambridge and RSA

Copyright Information

OCR is committed to seeking permission to reproduce all third-party content that it uses in its assessment materials. OCR has attempted to identify and contact all copyright holders whose work is used in this paper. To avoid the issue of disclosure of answer-related information to candidates, all copyright acknowledgements are reproduced in the OCR Copyright Acknowledgements Booklet. This is produced for each series of examinations and is freely available to download from our public website (www.ocr.org.uk) after the live examination series.

If OCR has unwittingly failed to correctly acknowledge or clear any third-party content in this assessment material, OCR will be happy to correct its mistake at the earliest possible opportunity.

For queries or further information please contact The OCR Copyright Team, The Triangle Building, Shaftesbury Road, Cambridge CB2 8EA.

OCR is part of the Cambridge Assessment Group; Cambridge Assessment is the brand name of University of Cambridge Local Examinations Syndicate (UCLES), which is itself a department of the University of Cambridge