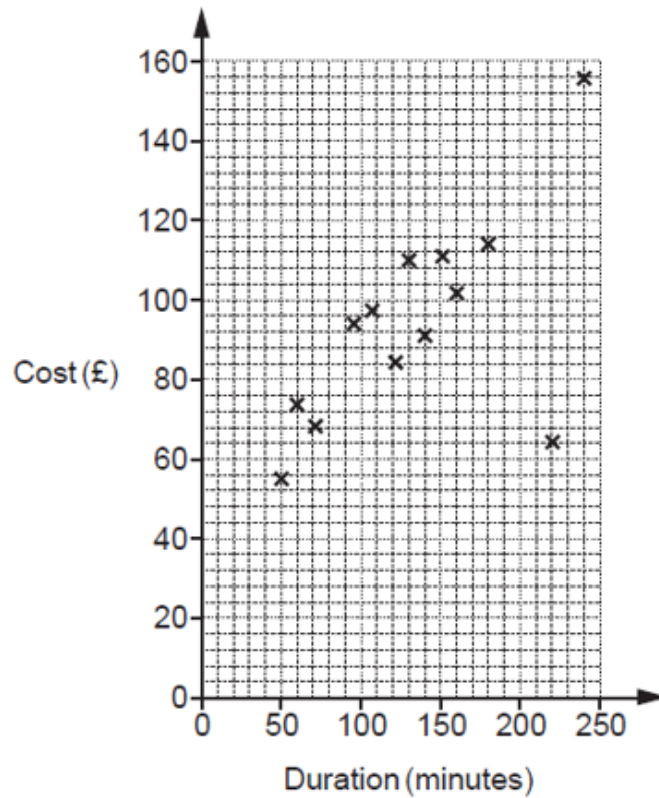


GCSE (9-1) Mathematics
J560/06 Paper 6 (Higher Tier)

Question Set 5

1 (a)

A travel agent records the duration and cost of the 15 flights he sold on one day. The data for the first 13 flights are plotted on the scatter diagram.



The data for the final two flights is:

Duration	210 minutes	1 hour 40 minutes
Cost	£130	£80

Plot these flights on the scatter diagram.

[2]

1 (b)

(b) The cost of one of the 15 flights had been discounted in a sale.

Circle the most likely flight on the scatter diagram.

[1]

1 (c) i

(c) (i) Draw a line of best fit on the scatter diagram.

[1]

1 (c) ii

(ii) Use your line of best fit to estimate the duration of a flight costing £90.

(c)(ii) minutes [1]

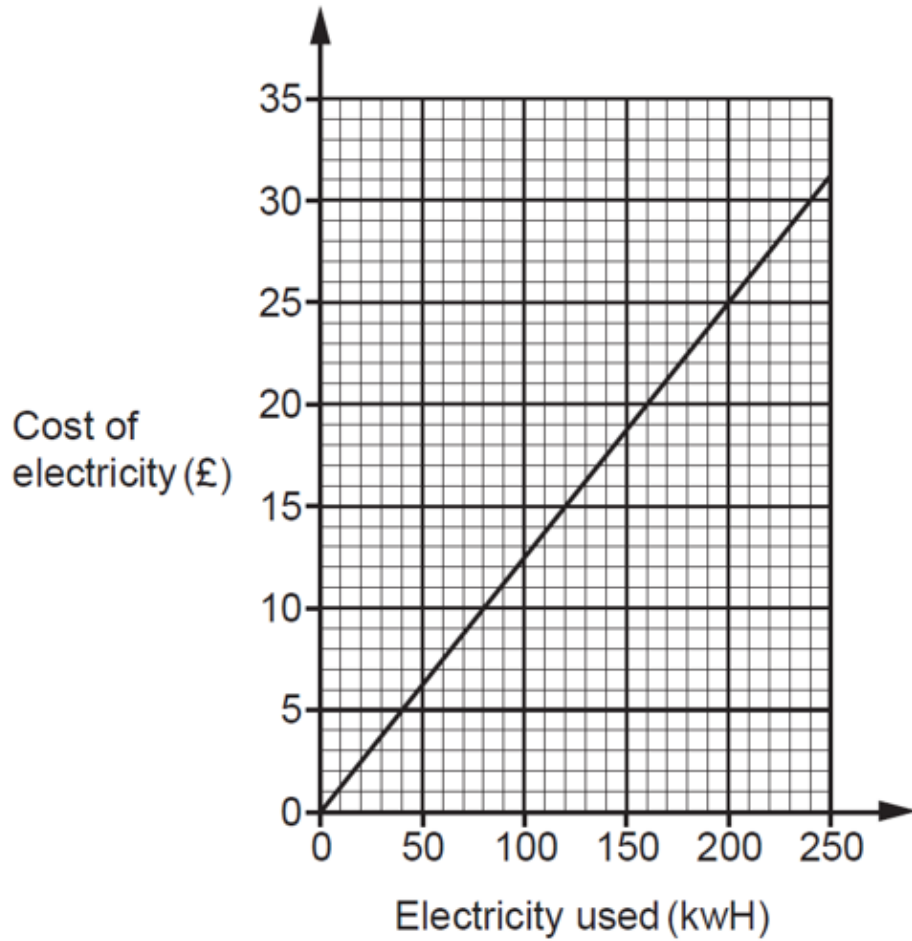
1 (d)

(d) Explain why the travel agent should not use his records to estimate the cost of a 7 hour flight.

.....
.....
..... [1]

2 (a)

The graph shows the cost of electricity with Company A.



Use the information in the graph to estimate the cost of electricity for a customer who uses 450 kWh of electricity.

[3]

2 (b)

(b) Company B charges 14.3 pence per kWh of electricity used.

If Company B's cost of electricity was plotted on the same axes as Company A's cost of electricity, which line would be steeper?
Explain how you know.

Company would have the steeper line because
.....
..... [3]

3 (a)

Nina estimates the value of $\sqrt{\left(\frac{3.93 \times 393}{0.546 \times 220}\right)^3}$ by rounding each number to 1 significant figure.

(a) Show that Nina's answer is 64. [3]

(b)

(b) Calculate the error in her estimated answer as a percentage of the exact answer.

(b) % [4]

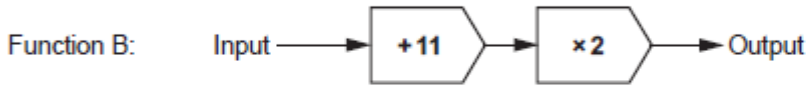
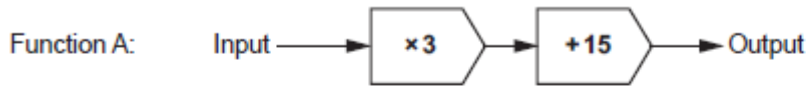
4 (a) (a) Work out the size of the exterior angle of a regular 12-sided polygon.

(a)° [2]

4 (b) (b) Use your answer to part (a) to write down the size of the interior angle of a regular 12-sided polygon.

(b)° [1]

5 (a) i Here are two functions.



(a) (i) Jo chooses a number, x .
She inputs x into each function.
The two outputs are equal.

Work out the value of x .

(a)(i) $x = \dots\dots\dots$ [4]

5 (a) ii

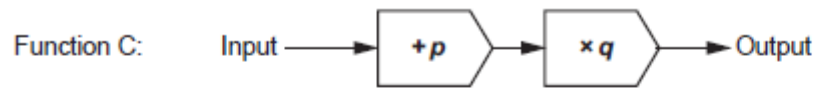
(ii) Explain why there is no other input that gives two outputs that are equal.

.....

..... [1]

5 (b)

(b) Here is function C.



Kai chooses values for p and q so that if he inputs **any** number into both function A and function C, he will **always** get two outputs that are equal.

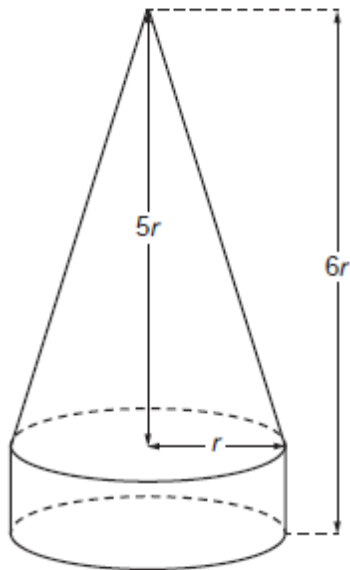
Find the value of p and the value of q .

(b) $p = \dots\dots\dots$

$q = \dots\dots\dots$ [3]

6

The base of a cone is fixed to the top of a cylinder to make a decoration.



The radius of the base of the cone and of the cylinder is r cm.

The cone's height is $5r$ cm.

The total height of the decoration is $6r$ cm.

The total volume of the decoration is 225cm^3 .

Calculate the value of r .

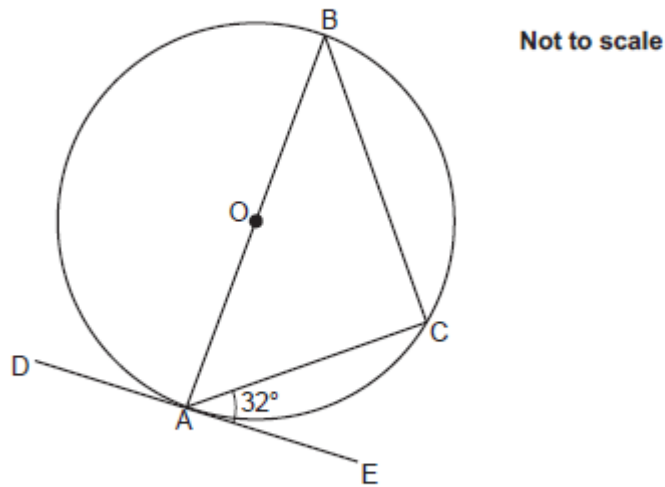
Show your working.

[The volume V of a cone with radius r and height h is $V = \frac{1}{3}\pi r^2 h$.]

$r = \dots\dots\dots$ [5]

7 (a) The diagram shows a circle, centre O.

Points A, B and C lie on the circumference of the circle.
Line AOB is a diameter.
Line DAE is a tangent to the circle.
Angle CAE = 32° .



(a) Give a reason why angle ACB is a right angle.

.....
..... [1]

7 (b) (b) The radius of the circle is 8 cm.

Calculate length BC.

(b) cm [4]

8

Vector $\mathbf{m} = \begin{pmatrix} 2 \\ k \end{pmatrix}$ and vector $\mathbf{n} = \begin{pmatrix} 3 \\ 11 \end{pmatrix}$.

Vector $2\mathbf{m} + \mathbf{n}$ is parallel to $\begin{pmatrix} 1 \\ -1 \end{pmatrix}$.

Find the value of k .

$k = \dots\dots\dots$ [4]

9

Write as a single fraction in its simplest form.

$$\frac{x}{x+2} + \frac{x+1}{x-2} - \frac{6x}{x^2-4}$$

..... [6]

Total Marks for Question Set 5: 50

OCR

Oxford Cambridge and RSA

Copyright Information

OCR is committed to seeking permission to reproduce all third-party content that it uses in its assessment materials. OCR has attempted to identify and contact all copyright holders whose work is used in this paper. To avoid the issue of disclosure of answer-related information to candidates, all copyright acknowledgements are reproduced in the OCR Copyright Acknowledgements Booklet. This is produced for each series of examinations and is freely available to download from our public website (www.ocr.org.uk) after the live examination series.

If OCR has unwittingly failed to correctly acknowledge or clear any third-party content in this assessment material, OCR will be happy to correct its mistake at the earliest possible opportunity.

For queries or further information please contact The OCR Copyright Team, The Triangle Building, Shaftesbury Road, Cambridge CB2 8EA.

OCR is part of the Cambridge Assessment Group; Cambridge Assessment is the brand name of University of Cambridge Local Examinations Syndicate (UCLES), which is itself a department of the University of Cambridge