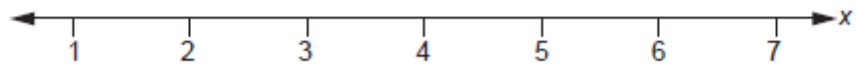


GCSE (9-1) Mathematics
J560/06 Paper 6 (Higher Tier)

Question Set 3

1

Solve $3x - 5 \geq 10$.
Show your solution on the number line.



[4]

2

Kay invests £1500 in an account paying 3% **compound** interest per year.
Neil invests £1500 in an account paying $r\%$ **simple** interest per year.

At the end of the 5th year, Kay and Neil's accounts both contain the same amount of money.

Calculate r .

Give your answer correct to 1 decimal place.

$r = \dots\dots\dots$ [6]

3

The table shows the children nominated to win the subject prize in Mathematics and the subject prize in English.

Mathematics	English
Alice	Alice
Ben	Claire
Emma	Gabi
Paddy	Simon

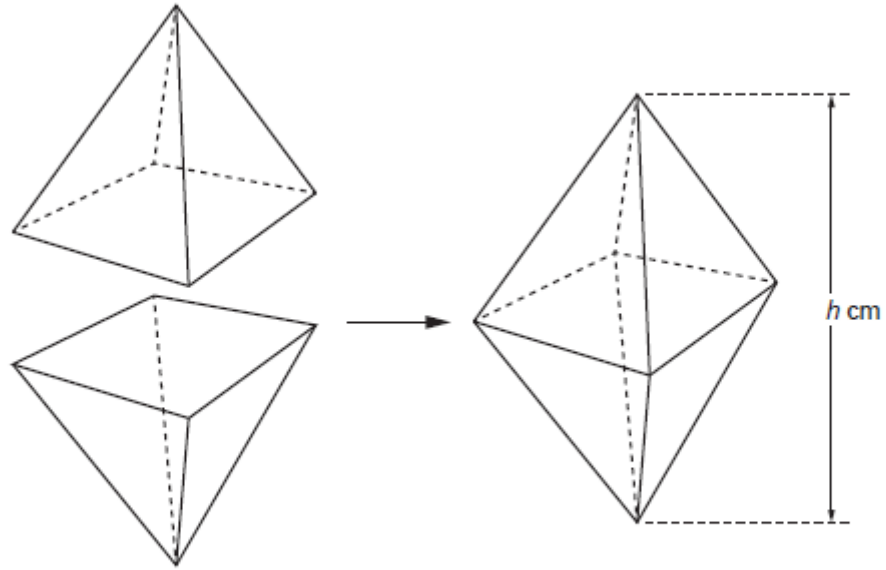
The winner of each subject prize is picked at random.
It is possible for Alice to win both prizes.

In what percentage of the combinations of prize winners does Alice win **at least** one prize?

..... % [4]

4

An octahedron is formed from two identical square based pyramids.
The square bases are stuck together as shown.



The volume of the octahedron is 60 cm^3 .
The length of the side of each pyramid's square base is 5 cm.

Work out the height h cm of the **octahedron**.

[The volume of a pyramid is $\frac{1}{3} \times \text{area of base} \times \text{perpendicular height}$]

$h = \dots\dots\dots$ cm [4]

5 (a)

Vector $\mathbf{a} = \begin{pmatrix} 3 \\ -1 \end{pmatrix}$ and vector $\mathbf{b} = \begin{pmatrix} 1 \\ 3 \end{pmatrix}$.

(a) Find the values of k and n so that

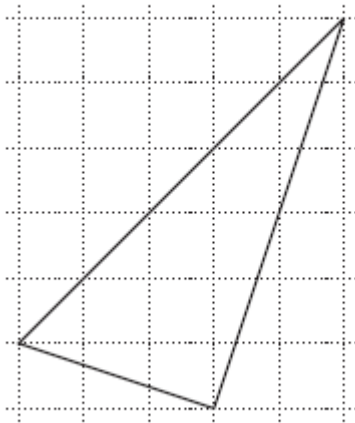
$$k(\mathbf{a} + \mathbf{b}) = \begin{pmatrix} 10 \\ n \end{pmatrix}.$$

(a) $k = \dots\dots\dots$

$n = \dots\dots\dots$ [3]

5 (b)

(b) Gavin starts to draw a diagram to show that $\mathbf{a} + 2\mathbf{b} = \begin{pmatrix} 5 \\ 5 \end{pmatrix}$.



Complete Gavin's diagram.

[3]

6 (a) i

A sequence is defined by the rule $u_{n+1} = 5u_n - 15$.

(a) If $u_3 = 6$, calculate

(i) u_5

(a)(i) $u_5 = \dots\dots\dots$ [3]

6 (a) ii (ii) u_2

(ii) $u_2 = \dots\dots\dots$ [3]

6 (b) (b) Trevor says

If $u_1 = 3.75$ then $u_{100} = 3.75$

Show that Trevor is correct.

[2]

7

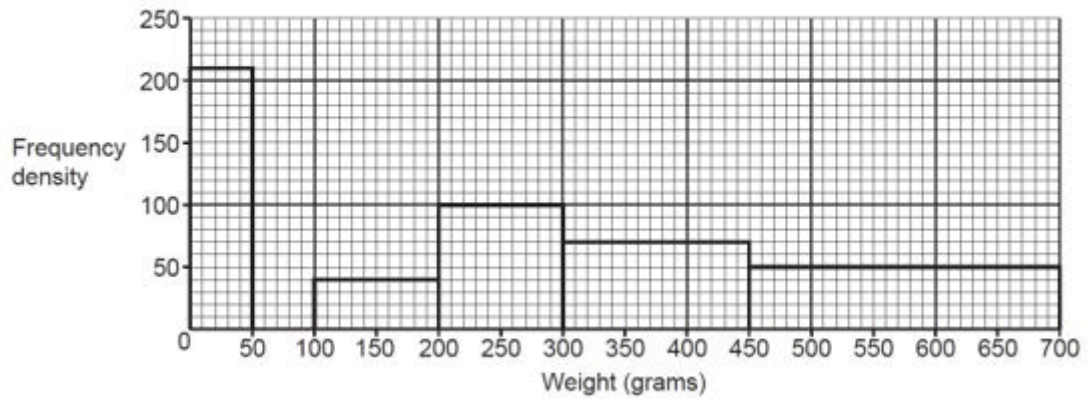
Write $(\sqrt[4]{8})^5$ as a power of 2.

$\dots\dots\dots$ [3]

8 (a)

The histogram shows information about the weights of some of the parcels handled by a delivery company in one month.

The histogram shows information about the weights of some of the parcels handled by a delivery company in one month.



(a) Zoe says

There are fewer parcels weighing between 450g and 700g than parcels weighing between 300g and 450g.

Is Zoe correct?
Show how you decide.

.....
.....
.....
..... [4]

8 (b)

(b) The delivery company delivered 6500 parcels weighing between 50g and 100g.

Complete the histogram to show this information.

[2]

8 (c)

(c) Zoe uses the histogram to calculate the number of parcels weighing between 200g and 250g.

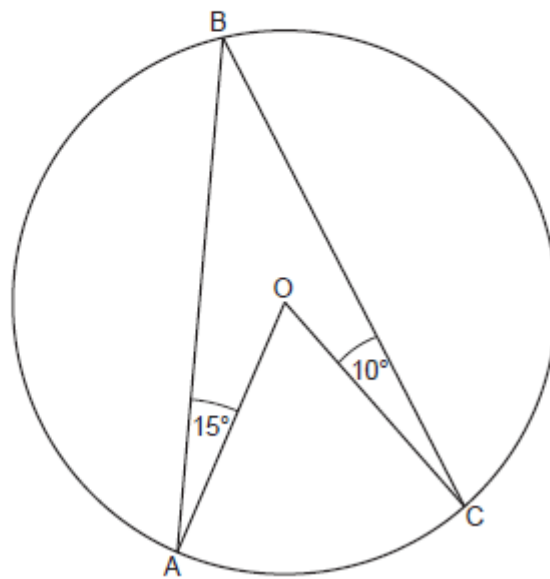
Explain why Zoe's answer is unlikely to be reliable.

.....
..... [1]

9 (a)

(a) In the diagram,

- A, B and C are points on the circumference of a circle
- O is the centre of the circle
- angle $OAB = 15^\circ$
- angle $BCO = 10^\circ$.



Not to scale

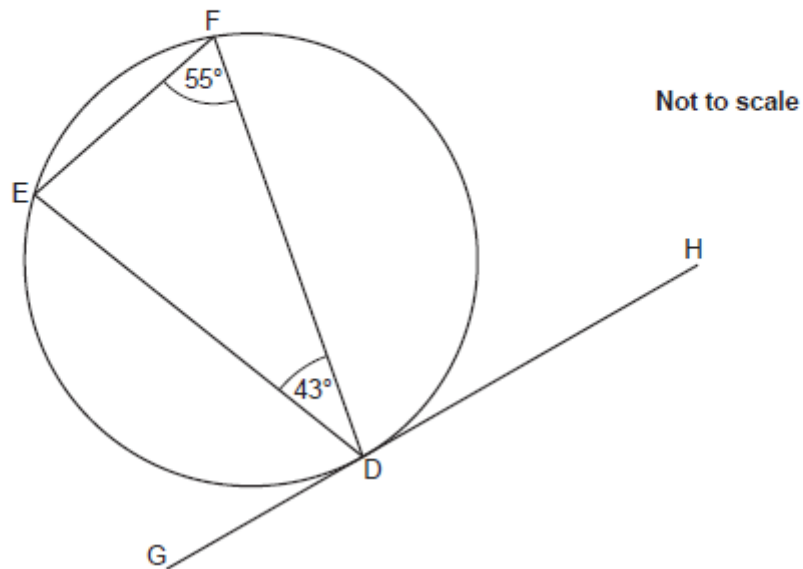
Calculate the acute angle AOC.

(a)° [4]

9 (b)

(b) In the diagram,

- E, F and D are points on the circumference of the circle
- G, D and H lie on a tangent to the circle
- angle EFD = 55°
- angle FDE = 43° .



Explain why angle HDF is 82° .

..... $\angle EFD$
.....
..... is equal to $\angle EDG$. If we subtract 55°
..... ($\angle EDG$) and 43° ($\angle EDF$) from 180° , we
..... get 82° for $\angle HDF$.
..... [4]

Total Marks for Question Set 3: 50

OCR

Oxford Cambridge and RSA

Copyright Information

OCR is committed to seeking permission to reproduce all third-party content that it uses in its assessment materials. OCR has attempted to identify and contact all copyright holders whose work is used in this paper. To avoid the issue of disclosure of answer-related information to candidates, all copyright acknowledgements are reproduced in the OCR Copyright Acknowledgements Booklet. This is produced for each series of examinations and is freely available to download from our public website (www.ocr.org.uk) after the live examination series.

If OCR has unwittingly failed to correctly acknowledge or clear any third-party content in this assessment material, OCR will be happy to correct its mistake at the earliest possible opportunity.

For queries or further information please contact The OCR Copyright Team, The Triangle Building, Shaftesbury Road, Cambridge CB2 8EA.

OCR is part of the Cambridge Assessment Group; Cambridge Assessment is the brand name of University of Cambridge Local Examinations Syndicate (UCLES), which is itself a department of the University of Cambridge