

GCSE Mathematics - Paper 3 (Foundation tier)
J560/03 Paper 3 Mathematics (Foundation Tier)

Question Set 5

1 5 is a factor of 20.

(a) Write down another factor of 20.

(a) [1]

(b) Write down a multiple of 20.

(b) [1]

2 (a) Complete the first seven square numbers.

1 4 9 16 36 49 [1]

(b) Write the missing term in each sequence.

(i) 18 16 14 10 8 [1]

(ii) 14 20 26 32 38 [1]

3 A teacher asks nine of his pupils how many pets they have at home.

Here are the results.

1 1 1 2 3 4 5 7 111

(a) Work out the range of the nine results.

(a) [1]

(b) The median of the nine results is 3.
The mean is 15.

(i) Write down the mode.

(b)(i) [1]

(ii) The teacher wants to use a sensible average to summarise the results.


Which average should he use and why?

..... because

..... [1]

4

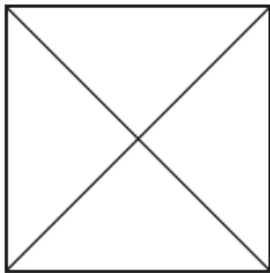
(a) The curved surface of a solid is made from this flat shape.



Write down the mathematical name of the solid.

(a) [1]

(b) This is the plan view of a different solid.



Write down the mathematical name of the solid.

(b) [1]

5 (a) Work out 70% of 50.

(a) [2]

(b) Beth multiplies a number by 3 and divides the answer by 10.

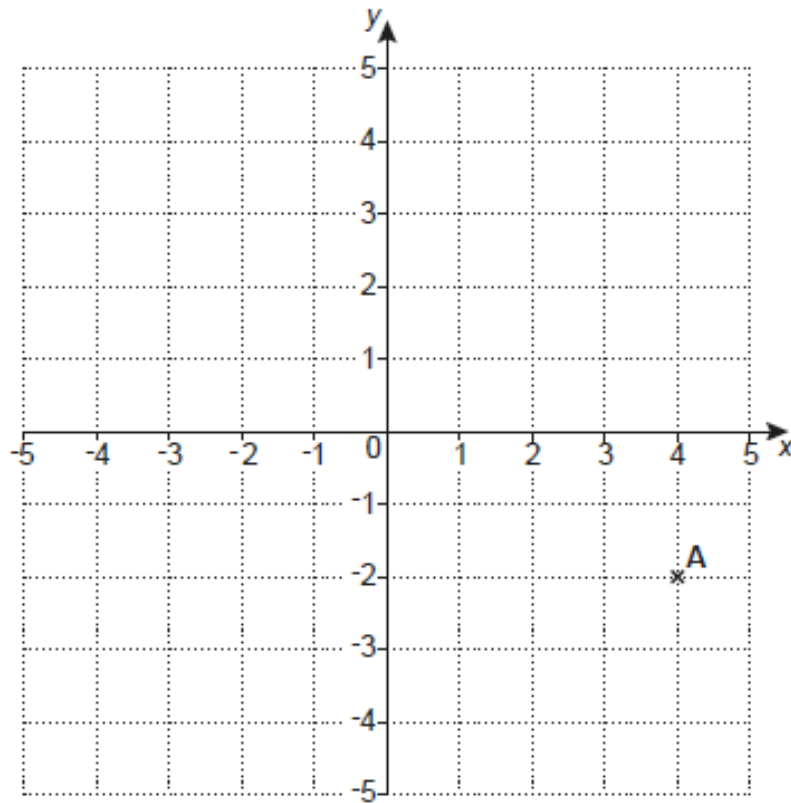
By what fraction has the number been reduced?

(b) [2]

(c) Find a fraction which is bigger than $\frac{3}{7}$ and smaller than $\frac{4}{7}$.

(c) [2]

- 6 Point A is plotted at (4, -2) on this one-centimetre square grid.



Point A is a corner of a square with area 36 cm^2 .
The other corners of the square have integer coordinates and lie on the grid.

Find the coordinates for the corner of the square that is diagonally opposite point A.
You may use the grid above to help you.

(.....,) [3]

7 Sundip is going on holiday.
She wants to change £400 into euros(€).

Bank A will change her £400 into €452.

Bank B changed £250 into €280 for Sundip's friend.
It will use the same rate to change Sundip's £400 into euros.

At which bank will Sundip receive the most euros and by how many?
Show your working.

At Bank Sundip will receive € more [5]

8

(a) Complete the power of 2 for each statement by writing the missing value in the box.

(i) $2^3 \times 2^3 = 2^{\square}$ [1]

(ii) $\frac{1}{32} = 2^{\square}$ [1]

(b) $2 \times 2^y = 1$.

Find the value of y .

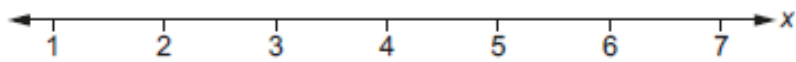
(b) $y = \dots\dots\dots$ [2]

- 9 A rectangle is three times as long as it is wide.
It has a perimeter of 44 cm.

Find the length of the rectangle.

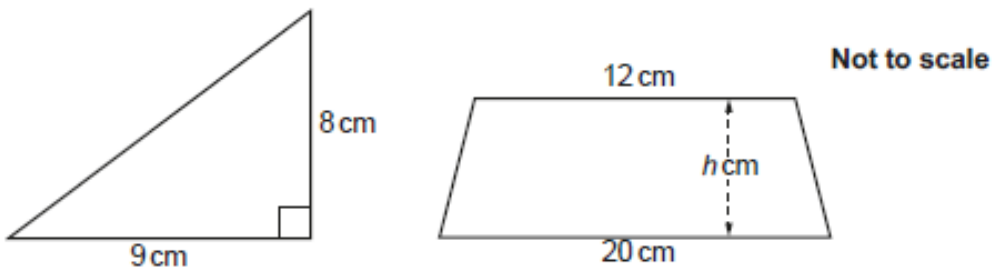
..... cm [4]

- 10 Solve $3x + 4 < 19$.
Show your solution on the number line.



[4]

- 11 The area of the triangle is equal to the area of the trapezium.

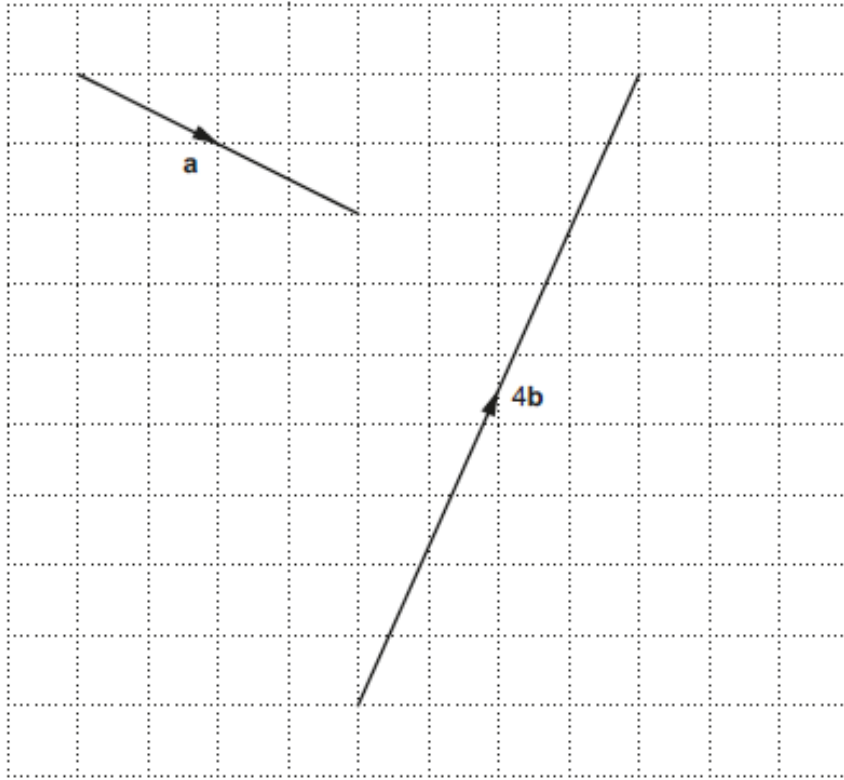


Calculate the height, h cm, of the trapezium.

$h = \dots\dots\dots$ cm [5]

12

Vectors **a** and **4b** are drawn on the grid.



(a) Write vector **a** as a column vector.

(a) $\begin{pmatrix} \\ \end{pmatrix}$ [2]

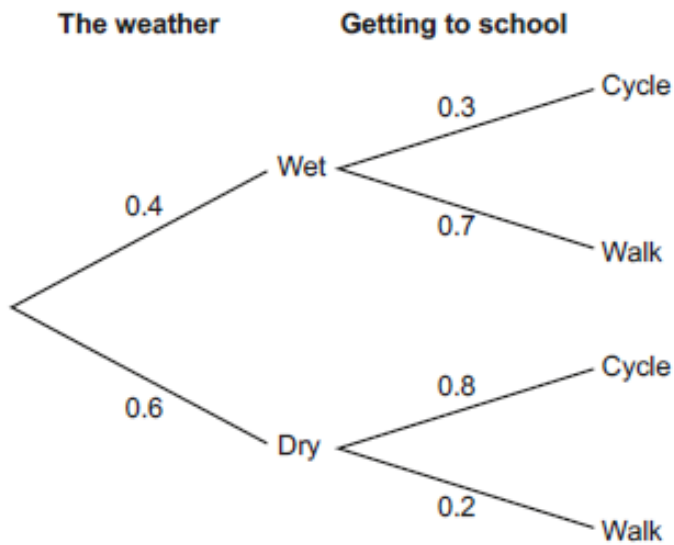
(b) Find vector **b** as a column vector.

(b) $\begin{pmatrix} \\ \end{pmatrix}$ [2]

13 The probability that Adam cycles to school or walks to school depends on the weather.

- On any day, the probability that the weather is wet is 0.4.
- When the weather is wet the probability that he cycles to school is 0.3.
- When the weather is dry the probability that he cycles to school is 0.8.

The information is shown on this tree diagram.



Work out the probability that

(a) it is dry and Adam walks to school,

(a) [2]

(b) Adam cycles to school.

(b) [3]

Total Marks for Question Set 5: 50

OCR

Oxford Cambridge and RSA

Copyright Information

OCR is committed to seeking permission to reproduce all third-party content that it uses in its assessment materials. OCR has attempted to identify and contact all copyright holders whose work is used in this paper. To avoid the issue of disclosure of answer-related information to candidates, all copyright acknowledgements are reproduced in the OCR Copyright Acknowledgements Booklet. This is produced for each series of examinations and is freely available to download from our public website (www.ocr.org.uk) after the live examination series.

If OCR has unwittingly failed to correctly acknowledge or clear any third-party content in this assessment material, OCR will be happy to correct its mistake at the earliest possible opportunity.

For queries or further information please contact The OCR Copyright Team, The Triangle Building, Shaftesbury Road, Cambridge CB2 8EA.

OCR is part of the Cambridge Assessment Group; Cambridge Assessment is the brand name of University of Cambridge Local Examinations Syndicate (UCLES), which is itself a department of the University of Cambridge