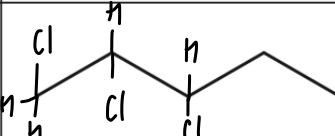
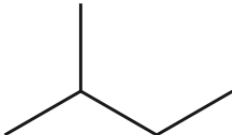



AS Level Chemistry A
H032/01 Breadth in chemistry

Question Set 16

1. (a) This question is about saturated hydrocarbons.

Compounds **A**, **B** and **C** are saturated hydrocarbons.
The structures and boiling points of **A**, **B** and **C** are shown below.

	Isomer	Boiling point / °C
A		36
B		28
C		9

- Use the structures to explain what is meant by the term structural isomer.
- Explain the trend in boiling points shown by **A**, **B** and **C** in the table.

① a) structural isomers are molecules with the same molecular formula but different structural formulae.

[5]

A, **B** and **C** are all chain isomers, meaning they have different arrangements of the hydrocarbon chain.

As the molecules become more branched the boiling point decreases because the molecules can't pack as closely together and so have weaker van der Waal's forces between the molecules.

(b) Compounds **A**, **B** and **C** all react with chlorine in the presence of ultraviolet radiation to form organic compounds with the formula $C_5H_{11}Cl$.

(i) Name the mechanism for this reaction.

[1]

b)i) free radical substitution

(ii) Complete the table to show the number of structural isomers of $C_5H_{11}Cl$ that could be formed from the reaction of chlorine with **A** and **B**.

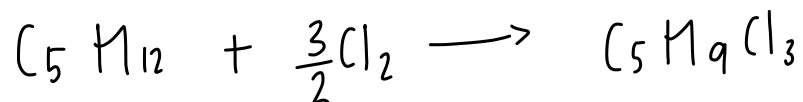
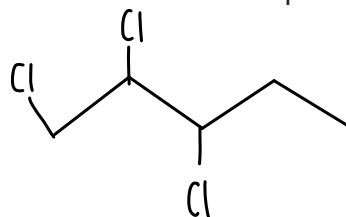
	A	B
Number of structural isomers	3	5

[2]

- (iii) The reaction of compound **A** with excess chlorine forms a compound **D**, which has a molar mass of 175.5 g mol^{-1} .

Draw a possible structure for compound **D** and write the equation for its formation from compound **A**. Use molecular formulae in the equation.

[2]



Total Marks for Question Set 16: 10

OCR

Oxford Cambridge and RSA

Copyright Information

OCR is committed to seeking permission to reproduce all third-party content that it uses in its assessment materials. OCR has attempted to identify and contact all copyright holders whose work is used in this paper. To avoid the issue of disclosure of answer-related information to candidates, all copyright acknowledgements are reproduced in the OCR Copyright Acknowledgements Booklet. This is produced for each series of examinations and is freely available to download from our public website (www.ocr.org.uk) after the live examination series.

If OCR has unwittingly failed to correctly acknowledge or clear any third-party content in this assessment material, OCR will be happy to correct its mistake at the earliest possible opportunity.

For queries or further information please contact The OCR Copyright Team, The Triangle Building, Shaftesbury Road, Cambridge CB2 8EA.

OCR is part of the Cambridge Assessment Group; Cambridge Assessment is the brand name of University of Cambridge Local Examinations Syndicate (UCLES), which is itself a department of the University of Cambridge