

GCSE Biology B (Twenty First Century Science)
J257/03 Breadth in Biology (Higher)

Question Set 12

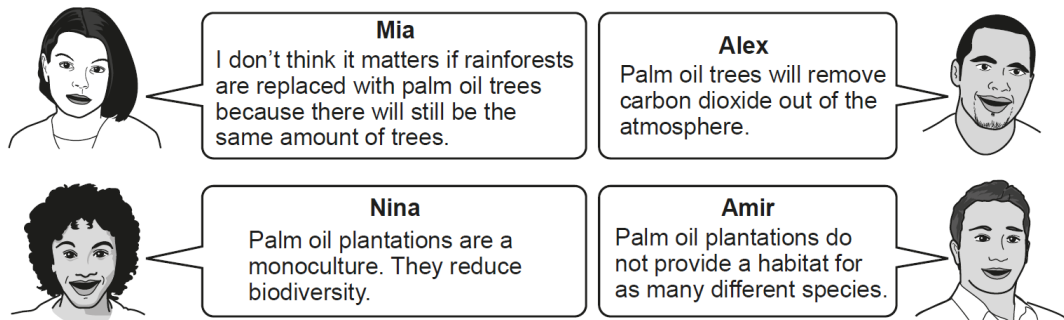
1

Deforestation is happening to rainforests in Malaysia and Indonesia.

The rainforests are being replaced with palm oil trees.

Palm oil is used in many products, such as soaps, body creams and food.

(a) (i) Some people talk about this.



Which **two** people have the best arguments as to why we should conserve rainforests?

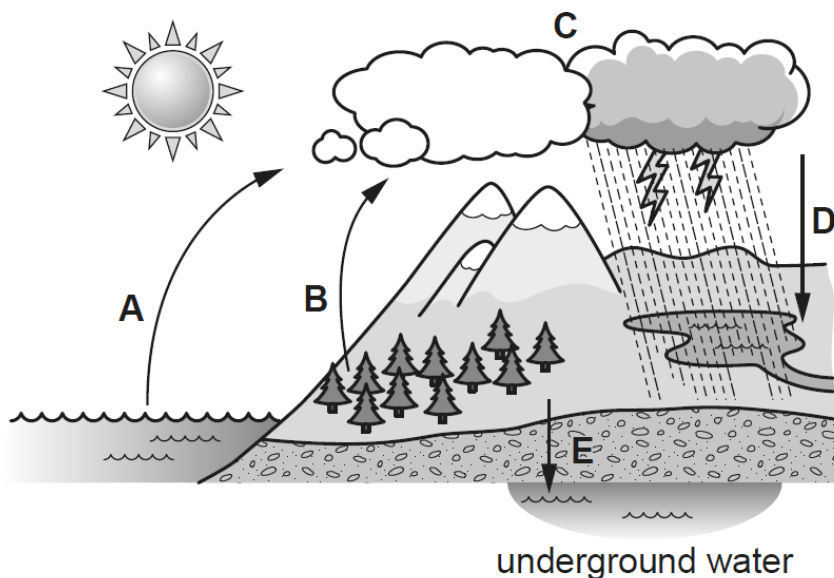
[2]

(ii) Describe the effect deforestation can have on climate change.

[2]

Deforestation can affect the water cycle.

The diagram below shows the water cycle.




(b) (i) Put a ring around the letter, **A**, **B**, **C**, **D** or **E**, in the diagram which shows the process of transpiration.

[1]

(ii) Describe the effect deforestation will have on the amount of transpiration.

[1]

- (c) Orangutans live in the rainforests of Malaysia.



Orangutan

A century ago there were 230 000 orangutans.

The table shows the estimated number of three species of orangutans which remain today.

Species of orangutan	Number
Bornean	104 700
Sumatran	7500
Tapanuli	800

- (i) Calculate the percentage (%) of orangutans which remain today.

Give your answer to **2** significant figures.

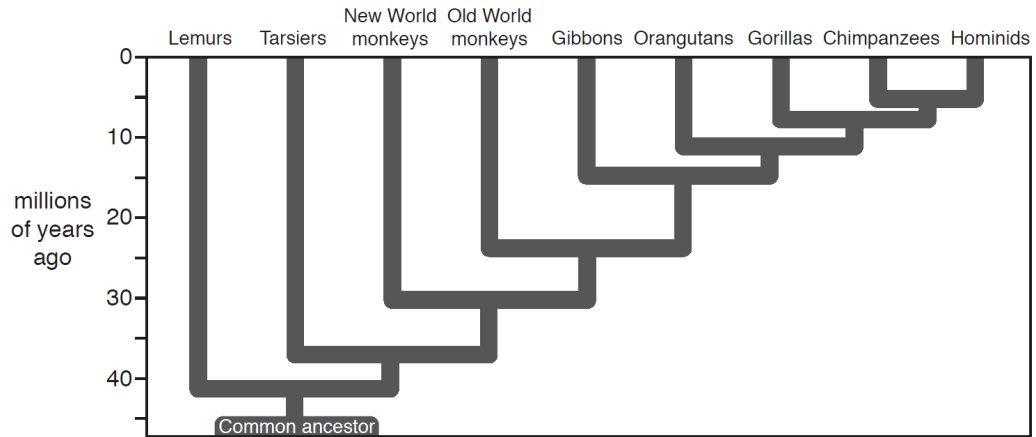
Percentage =% **[3]**

- (ii) The number of orangutans living in the rainforests of Malaysia is an estimate.

Explain why.

[1]

- (d) (i) The diagram shows the evolutionary relationship of the orangutan to some other primates.



Which one of the other primates is the orangutan **least** closely related to?

[1]

- (ii) Which biological molecule can provide scientists with evidence of how closely related two species are?

Tick (✓) **one** box.

- | | |
|------------|--------------------------|
| Amino acid | <input type="checkbox"/> |
| DNA | <input type="checkbox"/> |
| Glucose | <input type="checkbox"/> |
| Lipid | <input type="checkbox"/> |

[1]

Total Marks for Question Set 12: 12

OCR

Oxford Cambridge and RSA

Copyright Information

OCR is committed to seeking permission to reproduce all third-party content that it uses in its assessment materials. OCR has attempted to identify and contact all copyright holders whose work is used in this paper. To avoid the issue of disclosure of answer-related information to candidates, all copyright acknowledgements are reproduced in the OCR Copyright Acknowledgements Booklet. This is produced for each series of examinations and is freely available to download from our public website (www.ocr.org.uk) after the live examination series.

If OCR has unwittingly failed to correctly acknowledge or clear any third-party content in this assessment material, OCR will be happy to correct its mistake at the earliest possible opportunity.

For queries or further information please contact The OCR Copyright Team, The Triangle Building, Shaftesbury Road, Cambridge CB2 8EA.

OCR is part of the Cambridge Assessment Group; Cambridge Assessment is the brand name of University of Cambridge Local Examinations Syndicate (UCLES), which is itself a department of the University of Cambridge