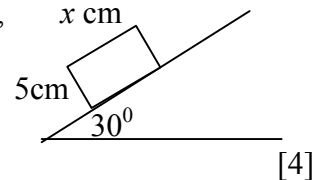


MECHANICS (C) UNIT 2 TEST PAPER 3

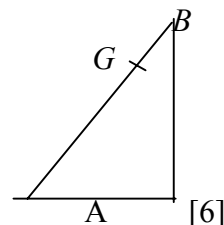
Take $g = 9.8 \text{ ms}^{-2}$ and give all answers correct to 3 significant figures where necessary.

1. A solid rectangular block, whose cross-section measures $x \text{ cm}$ by 5 cm , is placed gently on a rough plane inclined at 30° to the horizontal, as shown. The coefficient of friction between the block and the plane is 0.6 . Show that the block does not slide down the plane and find the smallest value of x for which the block will not topple.



[4]

2. A non-uniform ladder AB , of length $3a$, has its centre of mass at G , where $AG = 2a$. The ladder rests in limiting equilibrium with the end B against a smooth vertical wall and the end A resting on rough horizontal ground. The angle between AB and the horizontal in this position is α , where $\tan \alpha = \frac{14}{9}$. Calculate the coefficient of friction between the ladder and the ground.

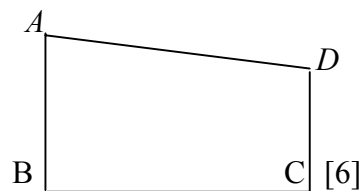


[6]

3. A lorry of mass 4200 kg can develop a maximum power of 84 kW . On any road the lorry experiences a non-gravitational resisting force which is directly proportional to its speed. When the lorry is travelling at 20 ms^{-1} the resisting force has magnitude 2400 N . Find the maximum speed of the lorry when it is

- (i) travelling on a horizontal road, [3]
 (ii) climbing a hill inclined at an angle α to the horizontal, where $\sin \alpha = \frac{1}{7}$. [5]

4. A uniform lamina is in the form of a trapezium $ABCD$, as shown. AB and DC are perpendicular to BC . $AB = 17 \text{ cm}$, $BC = 21 \text{ cm}$ and $CD = 8 \text{ cm}$.



[6]

- (i) Find the distances of the centre of mass of the lamina from
 (a) AB , (b) BC .

The lamina is freely suspended from C and rests in equilibrium.

- (ii) Find the angle between CD and the vertical. [2]

5. Two railway trucks, P and Q , of equal mass, are moving towards each other with speeds $4u$ and $5u$ respectively along a straight stretch of rail which may be modelled as being smooth. They collide and move apart. The coefficient of restitution between P and Q is e .

- (i) Find, in terms of u and e , the speed of Q after the collision. [5]
 (ii) Show that $e > \frac{1}{9}$. [2]

Q now hits a fixed buffer and rebounds along the track. P continues to move with the speed that it had immediately after it collided with Q .

- (iii) Prove that it is impossible for a further collision between P and Q to occur. [3]

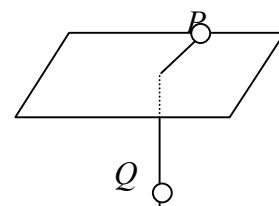
6. A stone, of mass 1.5 kg , is projected **horizontally** with speed 4 ms^{-1} from a height of 7 m above horizontal ground.

- (i) Show that the stone travels about 4.78 m horizontally before it hits the ground. [3]
 (ii) Find the height of the stone above the ground when it has travelled half of this horizontal distance. [3]
 (iii) Calculate the potential energy lost by the stone as it moves from its point of projection to the ground. [2]
 (iv) Showing your method clearly, use the principle of conservation of energy to find the speed with which the stone hits the ground. [2]

(v) State **two** modelling assumptions that you have made in answering this question. [2]

7. Two identical particles P and Q are connected by a light inextensible string passing through a small smooth edged hole in a smooth table, as shown.

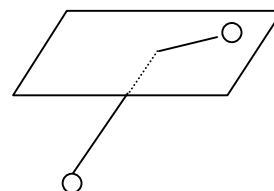
P moves on the table in a horizontal circle of radius 0.2 m and Q hangs at rest.



[4]

(i) Calculate the number of revolutions made per minute by P .

Q is now also made to move in a horizontal circle of radius 0.2 m below the table. The part of the string between Q and the table makes an angle of 45° with the vertical.



[8]

(ii) Show that the numbers of revolutions per minute made by P and Q respectively are in the ratio $2^{\frac{1}{4}} : 1$.

MECHANICS 2 (C) TEST PAPER 3 : ANSWERS AND MARK SCHEME

1.	$\tan 30^\circ < 0.6$, so block does not slide	B1	
	Topples if $x/5 < \tan 30^\circ$, so does not topple if $x \geq 2.89$	M1 A1 A1	4
2.	Let reactions be R at ground, S at wall		
	$M(A) : W(2a \cos \alpha) = S(3a \sin \alpha) \quad S = 2W \div 3 \tan \alpha = \frac{3}{7} W$	M1 A1 A1	
	Resolve : $R = W, \quad \mu R = S \quad \mu = S \div W = \frac{3}{7}$	B1 M1 A1	6
3.	(i) $2400 = 20k \quad k = 120 \quad 84000 = v(120v) \quad v = 26.5 \text{ ms}^{-1}$	M1 A1 A1	
	(ii) $P = v(600g + 120v) \quad 120v^2 + 5880v - 84000 = 0$	M1 A1 A1	
	$v^2 + 49v - 700 = 0 \quad v = (-49 + \sqrt{5201})/2 = 11.6 \text{ ms}^{-1}$	M1 A1 8	
4.	(i) (a) $168(10.5) + 94.5(7) = 262.5 \bar{x} \quad \bar{x} = 9.24$	M1 A1 A1	
	(b) $168(4) + 94.5(11) = 262.5 \bar{y} \quad \bar{y} = 6.52$	M1 A1 A1	
	(ii) $\tan \alpha = (21 - 9.24)/6.52 = 1.804 \quad \alpha = 61.0^\circ$	M1 A1	8
5.	(i) Momentum : $4mu - 5mu = mv_P + mv_Q \quad v_P + v_Q = -u$	B1	
	Elasticity : $(v_P - v_Q)/(-5u - 4u) = e \quad v_P - v_Q = -9eu$	M1 A1	
	Subt : $2v_Q = -u + 9eu \quad v_Q = \frac{1}{2}(9e - 1)u$	M1 A1	
	(ii) $v_Q > 0$, so $9e > 1 \quad e > \frac{1}{9}$	M1 A1	
	(iii) $v_P = -\frac{1}{2}(9e + 1)u$ After hitting wall, speed of $Q < \frac{1}{2}(9e - 1)u$	M1 A1	
	which is clearly less than $ v_P $, so there is no further collision	A1	10
6.	(i) $7 = \frac{1}{2}gt^2 \quad t^2 = 14 \div 9.8 \quad t = 1.195$	M1 A1	
	In 1.195 s, stone travels $4 \times 1.195 = 4.78$ m	A1	
	(ii) When $x = 2.39, t = 0.598 \quad y = 7 - \frac{1}{2}gt^2 = 5.25$ m	M1 A1 A1	
	(iii) $mgh = 1.5 \times 9.8 \times 7 = 102.9$ J	M1 A1	
	(iv) $\frac{1}{2}mv^2 = \frac{1}{2}mu^2 + mgh \quad v = \sqrt{(14g + 16)} = 12.4 \text{ ms}^{-1}$	M1 A1	
	(v) Modelled stone as particle, ignored air resistance, etc.	B1 B1	12
7.	(i) For $Q : T = mg \quad$ For $P : T = m(0.2)\omega^2$	B1 M1	
	$\omega^2 = g/0.2 = 49 \quad \omega = 7 \quad$ No. of r.p.m. = $\frac{7}{2\pi} \times 60 = 66.8$	A1 A1	
	(ii) For $Q : T \sin 45^\circ = m(0.2)\omega_1^2, \quad T \cos 45^\circ = mg$	M1 A1 A1	
	$\tan 45^\circ = 0.2\omega_1^2 / g \quad \omega_1^2 = 49 \tan 45^\circ = 49$	M1 A1	
	For $P : T = m(0.2)\omega^2 \quad$ But $T = mg\sqrt{2}$ so $\omega^2 = 49\sqrt{2}$	M1 A1	
	$\omega^2 : \omega_1^2 = \sqrt{2} : 1 \quad \omega : \omega_1 = 2^{\frac{1}{4}} : 1$	A1	12