

Core 3 Numerical Methods Questions

- 2 Use Simpson's rule with 5 ordinates (4 strips) to find an approximation to

$$\int_1^3 \frac{1}{\sqrt{1+x^3}} dx$$

giving your answer to three significant figures.

(4 marks)

- 6 [Figure 1, printed on the insert, is provided for use in this question.]

The curve $y = x^3 + 4x - 3$ intersects the x -axis at the point A where $x = \alpha$.

- (a) Show that α lies between 0.5 and 1.0. (2 marks)

- (b) Show that the equation $x^3 + 4x - 3 = 0$ can be rearranged into the form $x = \frac{3 - x^3}{4}$. (1 mark)

- (c) (i) Use the iteration $x_{n+1} = \frac{3 - x_n^3}{4}$ with $x_1 = 0.5$ to find x_3 , giving your answer to two decimal places. (3 marks)

- (ii) The sketch on **Figure 1** shows parts of the graphs of $y = \frac{3 - x^3}{4}$ and $y = x$, and the position of x_1 .

On **Figure 1**, draw a cobweb or staircase diagram to show how convergence takes place, indicating the positions of x_2 and x_3 on the x -axis. (3 marks)

- 1 The curve $y = x^3 - x - 7$ intersects the x -axis at the point where $x = \alpha$.

- (a) Show that α lies between 2.0 and 2.1. (2 marks)

- (b) Show that the equation $x^3 - x - 7 = 0$ can be rearranged in the form $x = \sqrt[3]{x + 7}$. (1 mark)

- (c) Use the iteration $x_{n+1} = \sqrt[3]{x_n + 7}$ with $x_1 = 2$ to find the values of x_2 , x_3 and x_4 , giving your answers to three significant figures. (3 marks)

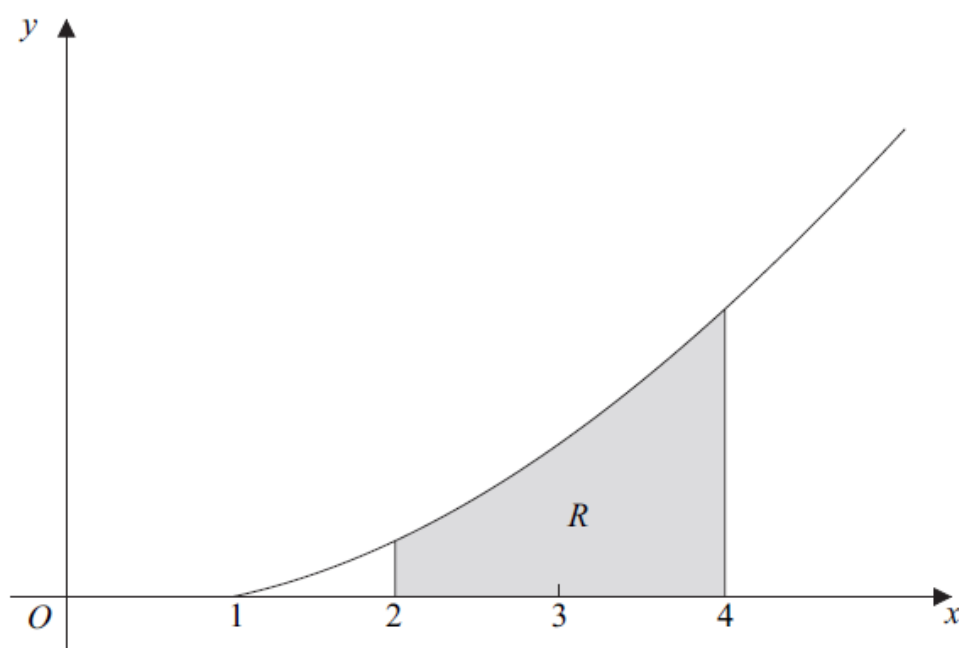
-
- 6 (a) Use the mid-ordinate rule with four strips to find an estimate for $\int_1^5 \ln x \, dx$, giving your answer to three significant figures. (3 marks)
-

- (c) The region R is bounded by the curve $y = \sec x$, the x -axis and the lines $x = 0$ and $x = 1$.

Find the volume of the solid formed when R is rotated through 2π radians about the x -axis, giving your answer to three significant figures. (3 marks)

- 1 Use the mid-ordinate rule with four strips of equal width to find an estimate for $\int_1^5 \frac{1}{1 + \ln x} \, dx$, giving your answer to three significant figures. (4 marks)
-

- (b) The diagram shows the curve with equation $y = 2\sqrt{(x-1)^3}$ for $x \geq 1$.



The shaded region R is bounded by the curve $y = 2\sqrt{(x-1)^3}$, the lines $x = 2$ and $x = 4$, and the x -axis.

Find the exact value of the volume of the solid formed when the region R is rotated through 360° about the x -axis. (4 marks)

- (c) Describe a sequence of **two** geometrical transformations that maps the graph of $y = \sqrt{x^3}$ onto the graph of $y = 2\sqrt{(x-1)^3}$. (4 marks)
-

4 [Figure 1, printed on the insert, is provided for use in this question.]

- (a) Use Simpson's rule with 5 ordinates (4 strips) to find an approximation to $\int_1^2 3^x dx$, giving your answer to three significant figures. (4 marks)

- (b) The curve $y = 3^x$ intersects the line $y = x + 3$ at the point where $x = \alpha$.

(i) Show that α lies between 0.5 and 1.5. (2 marks)

- (ii) Show that the equation $3^x = x + 3$ can be rearranged into the form

$$x = \frac{\ln(x+3)}{\ln 3} \quad (2 \text{ marks})$$

- (iii) Use the iteration $x_{n+1} = \frac{\ln(x_n + 3)}{\ln 3}$ with $x_1 = 0.5$ to find x_3 to two significant figures. (2 marks)

- (iv) The sketch on **Figure 1** shows part of the graphs of $y = \frac{\ln(x+3)}{\ln 3}$ and $y = x$, and the position of x_1 .

On **Figure 1**, draw a cobweb or staircase diagram to show how convergence takes place, indicating the positions of x_2 and x_3 on the x -axis. (2 marks)

Figure 1 (for Question 6)

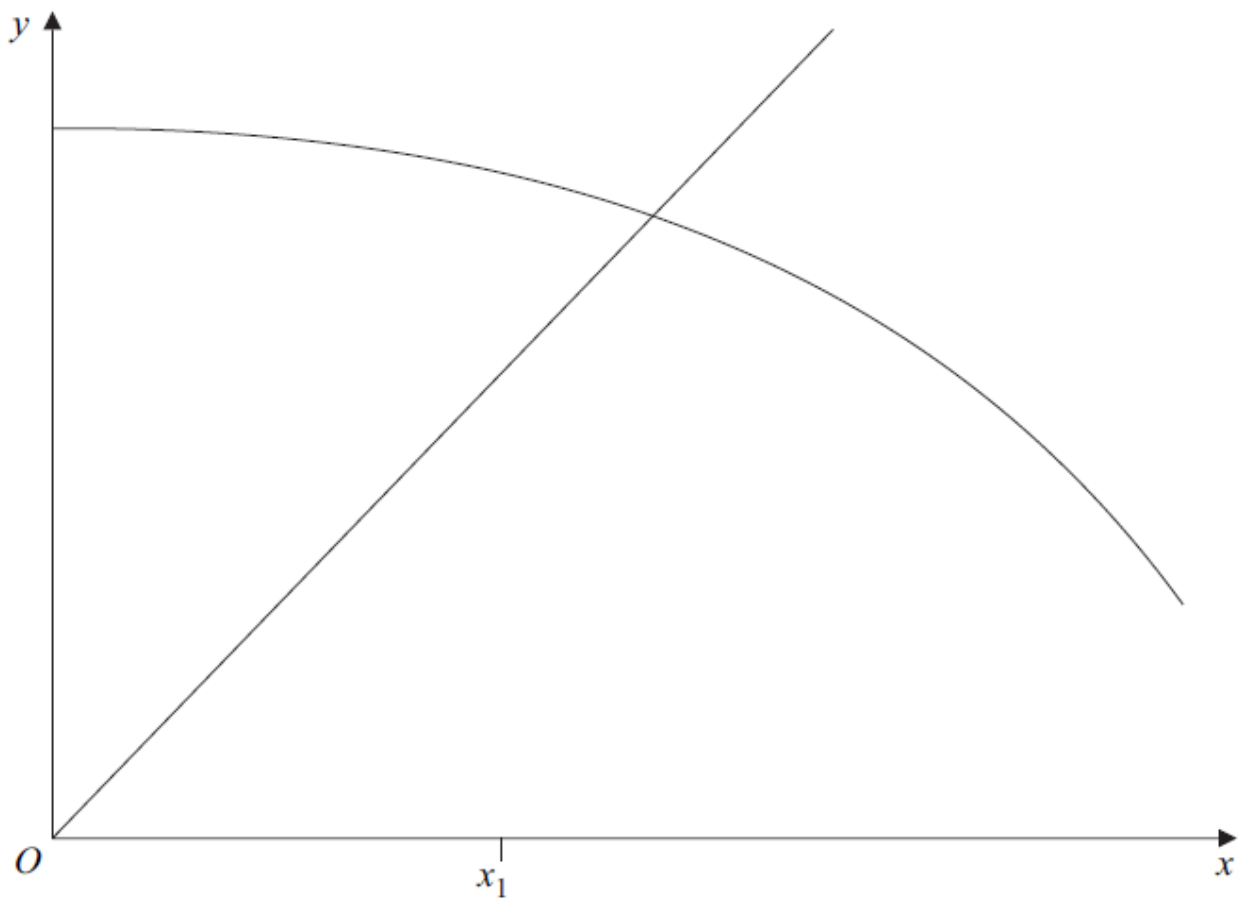
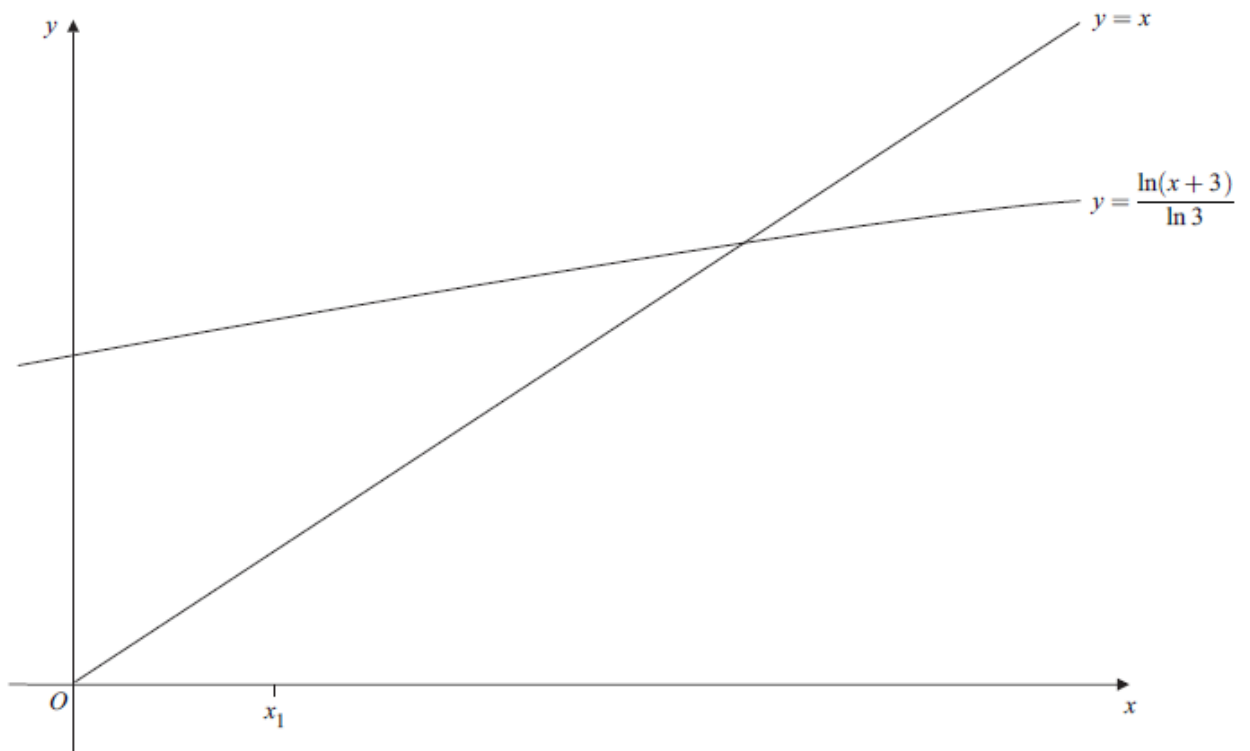
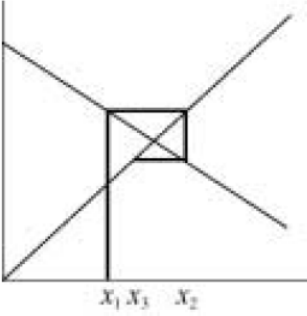


Figure 1 (for use in Question 4)



Core 3 Numerical Methods Answers

<p>2 $\int_1^3 \frac{1}{\sqrt{1+x^3}} dx$</p> <table style="margin-left: 20px; border-collapse: collapse;"> <thead> <tr> <th style="border-bottom: 1px solid black; padding: 2px 10px;">x</th> <th style="border-bottom: 1px solid black; padding: 2px 10px;">y</th> </tr> </thead> <tbody> <tr> <td style="padding: 2px 10px;">1</td> <td style="padding: 2px 10px;">0.707(1)</td> </tr> <tr> <td style="padding: 2px 10px;">1.5</td> <td style="padding: 2px 10px;">0.478(1)</td> </tr> <tr> <td style="padding: 2px 10px;">2</td> <td style="padding: 2px 10px;">0.333(3)</td> </tr> <tr> <td style="padding: 2px 10px;">2.5</td> <td style="padding: 2px 10px;">0.245(3)</td> </tr> <tr> <td style="padding: 2px 10px;">3</td> <td style="padding: 2px 10px;">0.189(0)</td> </tr> </tbody> </table> $A = \frac{1}{3} \times 0.5 \left[y(1) + y(3) + 4(y(1.5) + y(2.5)) + 2(y(2)) \right]$ <p>= 0.743</p>	x	y	1	0.707(1)	1.5	0.478(1)	2	0.333(3)	2.5	0.245(3)	3	0.189(0)			<p>B1</p> <p>B1</p> <p>M1</p> <p>A1</p> <p style="text-align: center;">4</p>			<p>3 correct } SC B1 for all correct expressions but</p> <p>all correct } wrongly evaluated</p> <p>use of Simpson's rule</p>
x	y																	
1	0.707(1)																	
1.5	0.478(1)																	
2	0.333(3)																	
2.5	0.245(3)																	
3	0.189(0)																	
Total			4															

<p>6(a) $f(0.5) = -0.875$ $f(1) = 2$ Change of sign \therefore root</p>			<p>M1</p> <p>A1</p> <p style="text-align: center;">2</p>			
<p>(b) $x^3 + 4x - 3 = 0$ $4x = 3 - x^3$ $x = \frac{3 - x^3}{4}$</p>			<p>B1</p> <p style="text-align: center;">1</p>			<p>AG</p>
<p>(c)(i) $x_1 = 0.5$ $x_2 = 0.71875$ 0.72 AWRT $x_3 = 0.66$</p>			<p>M1</p> <p>A1</p> <p>A1</p> <p style="text-align: center;">3</p>			
<p>(ii) </p>			<p>M1</p> <p>A1</p> <p>A1</p> <p style="text-align: center;">3</p>			<p>For cobweb, x_1 to curve</p> <p>For x_2</p> <p>All correct</p>
Total			9			

1(a)	$f(2) = -1$ $f(2.1) = +0.161$ change of sign $\therefore 2 < \alpha < 2.1$	M1	2	both attempted
		A1		
(b)	$x^3 - x - 7 = 0$ $x^3 = x + 7$ $x = \sqrt[3]{x+7}$	B1	1	AG
(c)	$x_1 = 2$ $x_2 = 2.0801\dots$ $x_3 = 2.0862\dots$ $x_4 = 2.09$	M1	3	AWRT 2.08 AWRT 2.09
		A1		
		A1		
		A1		
Total			6	

6(a)	$\therefore \int \ln x = 1(\ln 1.5 + \ln 2.5 + \ln 3.5 + \ln 4.5)$ $= 4.08$	M1	3	use of 1.5, 2.5, ... ; 3 or 4 correct x values AWFW 4 to 4.2 CAO
		A1		
		A1		

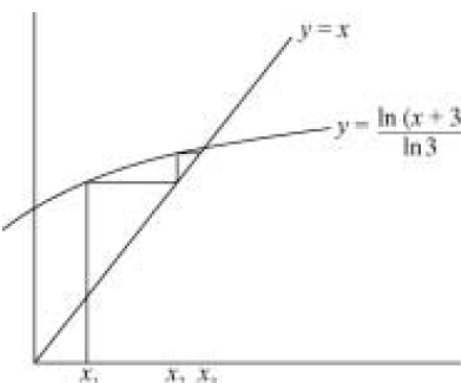
(c)	$V = (k) \int \sec^2 x \, dx$ $= (k) [\tan x]_0^1$ $= 4.89$	M1	3	CAO
		A1		
		A1		

1	$x = 1.5, 2.5, 3.5, 4.5$ $y_1 = 0.7115 \quad 0.712$ $y_2 = 0.5218 \quad 0.522$ $y_3 = 0.4439 \quad 0.444$ $y_4 = 0.3993 \quad 0.399$ $A = 1 \times (y_1 + y_2 + y_3 + y_4)$ $= 2.08$	M1	4	Method x values 3 correct y 's
		A1		
		A1		
		A1		
		A1		
Total			4	

8(a)	$A(-1, \pi)$	B1		
	$B\left(0, \frac{\pi}{2}\right)$	B1	2	
(b)	$\cos^{-1} x - 3x - 1 = 0$			
	$f(0.1) = 0.17$ allow 0.2, 0.1	M1		Or comparing 'sides'
	$f(0.2) = -0.23$ allow -0.2			
	Change of sign \therefore root	A1	2	
(c)	$x_1 = 0.1$	M1		
	$x_2 = 0.1569 = 0.157$	A1		
	$x_3 = 0.1378 = 0.138$			
	$x_4 = 0.144$	A1	3	
	Total		7	

(b)	$V = 4(\pi) \int_2^4 (x-1)^3 dx$	M1		$(\pi) \int y^2 dx$
	$= 4\pi \left[\frac{(x-1)^4}{4} \right]_2^4$	M1		$k(x-1)^4 (\pi)$ or in expanded form
	$= \pi(81-1) = 80\pi$	m1		correct substitution of limits into
		A1	4	$k(x-1)^4$
				CAO
(c)	Translate	E1		
	$\begin{pmatrix} 1 \\ 0 \end{pmatrix}$	B1		OE
	Stretch (I) SF 2 (II)	M1		for I and (II or III)
	// y axis (III)	A1	4	for I and II and III

4(a)		y		
	x_0	1	3	B1
	x_1	1.25	3.948(2)	
	x_2	1.5	5.196(2)	B1
	x_3	1.75	6.838(5)	
	x_4	2	9	
	$A = \frac{1}{3} \times \frac{1}{4} (3 + 4 \times 3.9482 + 2 \times 5.1962$			
	$+ 4 \times 6.8385 + 9)$	M1		Simpson's rule
	$= 5.46$	A1	4	CAO
(b)(i)	$f(x) = 3^x - x - 3$			
	$f(0.5) = -1.77$			
	$f(1.5) = 0.696$			
	} change of sign \therefore root	M1A1	2	

(ii)	$3^x = x + 3$ $\ln 3^x = \ln(x + 3)$ $x \ln 3 = \ln(x + 3)$ $x = \frac{\ln(x + 3)}{\ln 3}$	M1		correct use of logs
(iii)	$x_1 = 0.5$ $(x_2 = 1.14)$ $x_3 = 1.29 = 1.3$	M1	2	correct with no mistakes; AG
(iv)		M1	2	staircase x_2, x_3 correct and labelled on x -axis
Total			12	