

- Q1.** (a) Compound **A**,  $\text{HCOOCH}_2\text{CH}_2\text{CH}_3$ , is an ester. Name this ester and write an equation for its reaction with aqueous sodium hydroxide.

Name .....

Equation .....

(2)

- (b) The initial rate of reaction between ester **A** and aqueous sodium hydroxide was measured in a series of experiments at a constant temperature. The data obtained are shown below.

Experiment	Initial concentration of NaOH / mol dm <sup>-3</sup>	Initial concentration of <b>A</b> / mol dm <sup>-3</sup>	Initial rate / mol dm <sup>-3</sup> s <sup>-1</sup>
1	0.040	0.030	$4.0 \times 10^{-4}$
2	0.040	0.045	$6.0 \times 10^{-4}$
3	0.060	0.045	$9.0 \times 10^{-4}$
4	0.120	0.060	to be calculated

Use the data in the table to deduce the order of reaction with respect to **A** and the order of reaction with respect to NaOH. Hence calculate the initial rate of reaction in Experiment 4.

Order with respect to **A** .....

Order with respect to NaOH .....

Initial rate in Experiment 4 .....

.....

(3)

- (c) In a further experiment at a different temperature, the initial rate of reaction was found to be  $9.0 \times 10^{-3} \text{ mol dm}^{-3} \text{ s}^{-1}$  when the initial concentration of **A** was  $0.020 \text{ mol dm}^{-3}$  and the initial concentration of NaOH was  $2.00 \text{ mol dm}^{-3}$ . Under these new conditions with the much higher concentration of sodium hydroxide, the reaction is first order with respect to **A** and appears to be zero order with respect to sodium hydroxide.

- (i) Write a rate equation for the reaction under these new conditions.

.....

- (ii) Calculate a value for the rate constant under these new conditions and state its units.

*Calculation* .....

.....

.....

*Units* .....

- (iii) Suggest why the order of reaction with respect to sodium hydroxide appears to be zero under these new conditions.

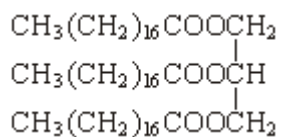
.....

.....

.....

(6)

- (d) A naturally-occurring triester, shown below, was heated under reflux with an excess of aqueous sodium hydroxide and the mixture produced was then distilled. One of the products distilled off and the other was left in the distillation flask.



- (i) Draw the structure of the product distilled off and give its name.

*Structure*

Name .....

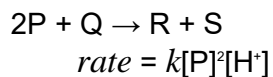
- (ii) Give the formula of the product left in the distillation flask and give a use for it.

Formula .....

Use .....

(4)  
(Total 15 marks)

**Q2.** The equation and rate law for the reaction of substance P with substance Q are given below.



Under which one of the following conditions, all at the same temperature, would the rate of reaction be slowest?

	[P] / mol dm <sup>-3</sup>	pH
<b>A</b>	0.1	0
<b>B</b>	1	2
<b>C</b>	3	3
<b>D</b>	10	4

(Total 1 mark)

**Q3.** Rate = k [A]<sup>2</sup> [B]

Correct units for the rate constant in the rate equation above are

- A** mol dm<sup>-3</sup> s<sup>-1</sup>
- B** mol<sup>-1</sup> dm<sup>-3</sup> s<sup>-1</sup>
- C** mol<sup>2</sup> dm<sup>-6</sup> s<sup>-1</sup>

- Q4.** (a) The following data were obtained in a series of experiments on the rate of the reaction between compounds **A** and **B** at a constant temperature.

Experiment	Initial concentration of <b>A</b> /mol dm <sup>-3</sup>	Initial concentration of <b>B</b> /mol dm <sup>-3</sup>	Initial rate/mol dm <sup>-3</sup> s <sup>-1</sup>
1	0.15	0.24	$0.45 \times 10^{-5}$
2	0.30	0.24	$0.90 \times 10^{-5}$
3	0.60	0.48	$7.20 \times 10^{-5}$

- (i) Show how the data in the table can be used to deduce that the reaction is first-order with respect to **A**.

.....  
 .....

- (ii) Deduce the order with respect to **B**.

.....  
 .....

(2)

- (b) The following data were obtained in a second series of experiments on the rate of the reaction between compounds **C** and **D** at a constant temperature.

Experiment	Initial concentration of <b>A</b> /mol dm <sup>-3</sup>	Initial concentration of <b>B</b> /mol dm <sup>-3</sup>	Initial rate/mol dm <sup>-3</sup> s <sup>-1</sup>
4	0.75	1.50	$9.30 \times 10^{-5}$
5	0.20	0.10	To be calculated

The rate equation for this reaction is

$$\text{rate} = k[\mathbf{C}]^2[\mathbf{D}]$$

- (i) Use the data from Experiment 4 to calculate a value for the rate constant,  $k$ , at this temperature. State the units of  $k$ .

Value for  $k$  .....

.....

.....

Units of  $k$  .....

.....

- (ii) Calculate the value of the initial rate in Experiment 5.

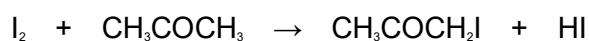
.....

.....

.....

(4)  
(Total 6 marks)

- Q5.** Iodine and propanone react in acid solution according to the equation



The rate equation for the reaction is found to be

$$\text{rate} = k [\text{CH}_3\text{COCH}_3][\text{H}^+]$$

- (a) Deduce the order of reaction with respect to iodine and the overall order of reaction.

Order with respect to iodine .....

Overall order .....

(2)

- (b) At the start of the experiment, the rate of reaction was found to be

$2.00 \times 10^{-5} \text{ mol dm}^{-3} \text{ s}^{-1}$  when the concentrations of the reactants were as shown below.

Reactant	Concentration / $\text{mol dm}^{-3}$
$\text{CH}_3\text{COCH}_3$	1.50
$\text{I}_2$	$2.00 \times 10^{-2}$
$\text{H}^+$	$3.00 \times 10^{-2}$

Use these data to calculate a value for the rate constant and deduce its units.

Rate constant .....

.....  
.....

Units .....

(3)

(c) How can you tell that  $\text{H}^+$  acts as a catalyst in this reaction?

.....  
.....  
.....

(2)

(d) Calculate the initial rate of reaction if the experiment were to be repeated at the same temperature and with the same concentrations of iodine and propanone as in part (b) but at a pH of 1.25

.....  
.....  
.....  
.....  
.....  
.....

(3)

(Total 10 marks)

- Q6.** (a) The initial rate of the reaction between compounds **A** and **B** was measured in a series of experiments at a fixed temperature. The following rate equation was deduced.

$$\text{rate} = k[\mathbf{A}][\mathbf{B}]^2$$

- (i) Complete the table of data below for the reaction between **A** and **B**.

Expt	Initial [A] /mol dm <sup>-3</sup>	Initial [B] /mol dm <sup>-3</sup>	Initial rate /mol dm <sup>-3</sup> s <sup>-1</sup>
1	$4.80 \times 10^{-2}$	$6.60 \times 10^{-2}$	$10.4 \times 10^{-3}$
2	$4.80 \times 10^{-2}$	$3.30 \times 10^{-2}$	
3		$13.2 \times 10^{-2}$	$5.20 \times 10^{-3}$
4	$1.60 \times 10^{-2}$		$10.4 \times 10^{-3}$

- (ii) Using the data for experiment 1, calculate a value for the rate constant,  $k$ , and state its units.

*Calculation* .....

.....

*Units* .....

(6)

- (b) State how the value of the rate constant,  $k$ , would change, if at all, if the concentration of **A** were increased in a series of experiments.

.....

(1)

(Total 7 marks)

- Q7.** (a) The initial rate of the reaction between substances **P** and **Q** was measured in a series of experiments and the following rate equation was deduced.

$$\text{rate} = k[\text{P}]^2[\text{Q}]$$

- (i) Complete the table of data below for the reaction between **P** and **Q**.

Experiment	Initial [P] / mol dm <sup>-3</sup>	Initial [Q] / mol dm <sup>-3</sup>	Initial rate / mol dm <sup>-3</sup> s <sup>-1</sup>
1	0.20	0.30	4.8 × 10 <sup>-3</sup>
2	0.10	0.10	
3	0.40		9.6 × 10 <sup>-3</sup>
4		0.60	19.2 × 10 <sup>-3</sup>

- (ii) Using the data from experiment 1, calculate a value for the rate constant, *k*, and deduce its units.

.....

.....

.....

.....

.....

(6)

- (b) What change in the reaction conditions would cause the value of the rate constant to change?

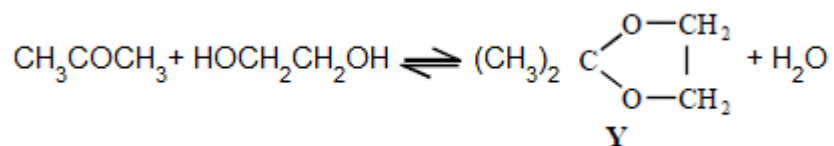
.....

(1)

(Total 7 marks)



**Q8.** This question is about the reaction between propanone and an excess of ethane-1,2-diol, the equation for which is given below.



In a typical procedure, a mixture of 1.00 g of propanone, 5.00 g of ethane-1,2-diol and 0.100 g of benzenesulphonic acid,  $\text{C}_6\text{H}_5\text{SO}_3\text{H}$ , is heated under reflux in an inert solvent. Benzenesulphonic acid is a strong acid.

When the concentration of benzenesulphonic acid is doubled, the rate of the reaction doubles. It can be deduced that

- A** the reaction is first order overall.
- B** the reaction is third order overall.
- C** the reaction is acid-catalysed.
- D** units for the rate constant,  $k$ , are  $\text{mol}^{-2} \text{dm}^6 \text{s}^{-1}$ .

(Total 1 mark)

**Q9.** (a) The following data were obtained in a series of experiments on the rate of the reaction between compounds **A** and **B** at a constant temperature.

Experiment	Initial concentration of <b>A</b> /mol dm <sup>-3</sup>	Initial concentration of <b>B</b> /mol dm <sup>-3</sup>	Initial rate/mol dm <sup>-3</sup> s <sup>-1</sup>
1	0.12	0.15	$0.32 \times 10^{-3}$
2	0.36	0.15	$2.88 \times 10^{-3}$
3	0.72	0.30	$11.52 \times 10^{-3}$

(i) Deduce the order of reaction with respect to **A**.

.....  
 .....

(ii) Deduce the order of reaction with respect to **B**.

.....

(2)

- (b) The following data were obtained in a series of experiments on the rate of the reaction between NO and O<sub>2</sub> at a constant temperature.

Experiment	Initial concentration of NO/mol dm <sup>-3</sup>	Initial concentration of O <sub>2</sub> /mol dm <sup>-3</sup>	Initial rate/mol dm <sup>-3</sup> s <sup>-1</sup>
4	5.0 × 10 <sup>-2</sup>	2.0 × 10 <sup>-2</sup>	6.5 × 10 <sup>-4</sup>
5	6.5 × 10 <sup>-2</sup>	3.4 × 10 <sup>-2</sup>	To be calculated

The rate equation for this reaction is

$$\text{rate} = k[\text{NO}]^2[\text{O}_2]$$

- (i) Use the data from experiment 4 to calculate a value for the rate constant,  $k$ , at this temperature, and state its units.

Value of  $k$  .....

.....

.....

Units of  $k$  .....

.....

- (ii) Calculate a value for the initial rate in experiment 5.

.....

.....

.....

(4)  
(Total 6 marks)

**Q10.** The rate of the reaction between substance **A** and substance **B** was studied in a series of experiments carried out at the same temperature. In each experiment the initial rate was measured using different concentrations of **A** and **B**. These results were used to deduce the order of reaction with respect to **A** and the order of reaction with respect to **B**.

(a) What is meant by the term *order of reaction* with respect to **A**?

.....  
.....

(1)

(b) When the concentrations of **A** and **B** were both doubled, the initial rate increased by a factor of 4. Deduce the **overall** order of the reaction.

.....

(1)

(c) In another experiment, the concentration of **A** was increased by a factor of three and the concentration of **B** was halved. This caused the initial rate to increase by a factor of nine.

(i) Deduce the order of reaction with respect to **A** and the order with respect to **B**.

*Order with respect to A* .....

*Order with respect to B* .....

(ii) Using your answers from part (c)(i), write a rate equation for the reaction and suggest suitable units for the rate constant.

*Rate equation* .....

*Units for the rate constant* .....

.....

(4)

(Total 6 marks)